

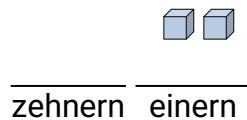
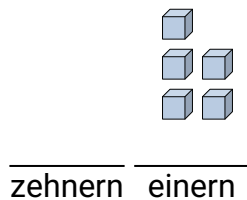
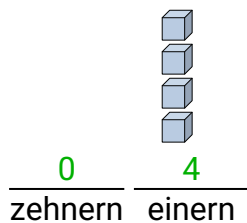
Fülle die Lücken auf und finde die Zahlen.

Antworten

Bsp)

1)

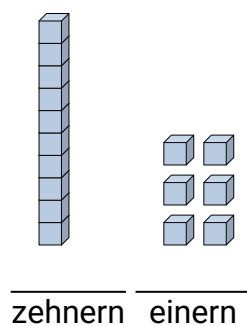
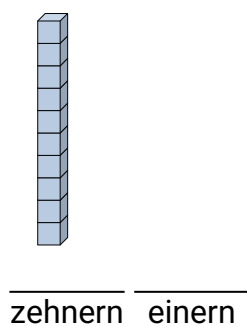
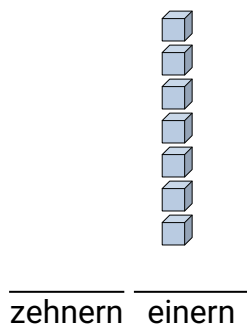
2)



3)

4)

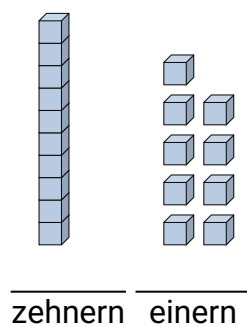
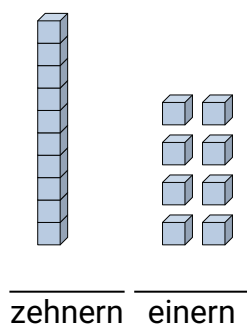
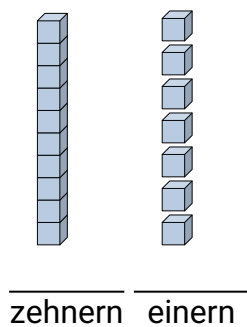
5)



6)

7)

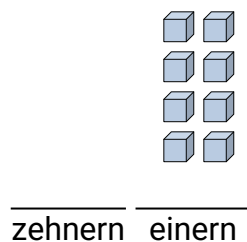
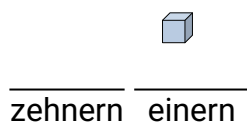
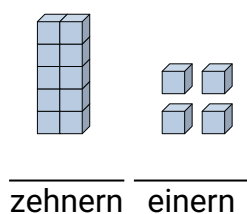
8)



9)

10)

11)



Bsp. **4**

1. _____

2. _____

3. _____

4.

5.

6. _____

7.

8.

9.

10. _____

11.



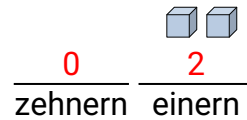
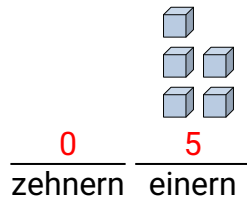
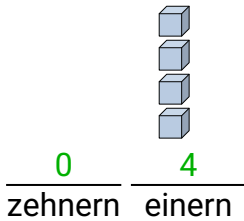
Fülle die Lücken auf und finde die Zahlen.

Antworten

Bsp)

1)

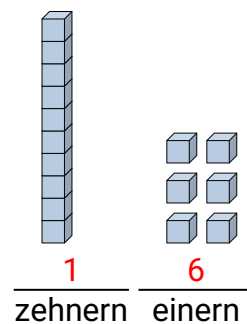
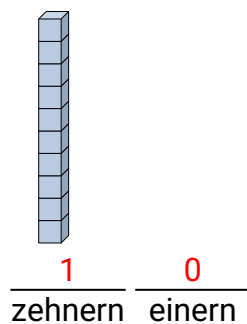
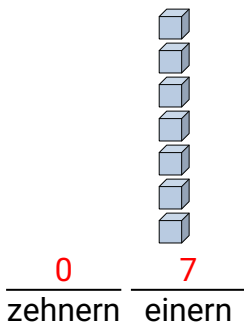
2)

Bsp. 41. 52. 23. 74. 10

3)

4)

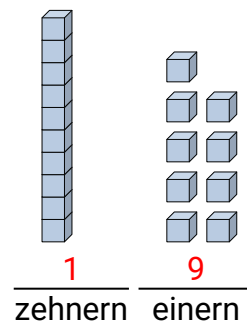
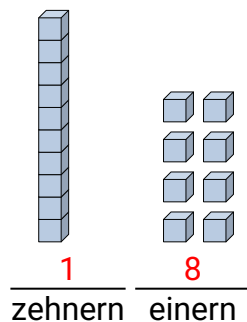
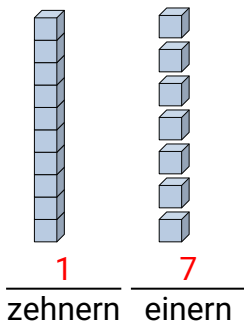
5)

5. 166. 177. 188. 199. 14

6)

7)

8)

10. 111. 8

9)

10)

11)

