




Verwenden Sie die Blöcke, um die Gesamtmengen zu bestimmen.




4 hundertern = 40 zehnern = 400 einern

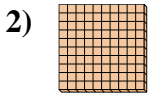
Antworten

Bsp. 4 40 400

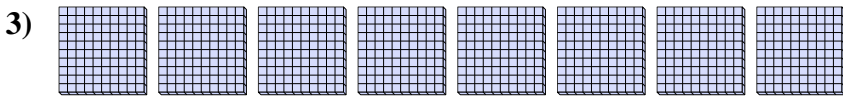
1. _____
2. _____
3. _____
4. _____
5. _____
6. _____
7. _____
8. _____



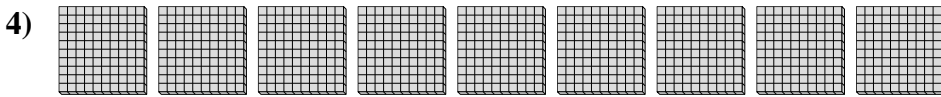
_____ hundertern = _____ zehnern = _____ einern



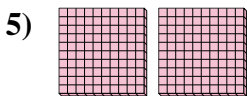
_____ hundertern = _____ zehnern = _____ einern



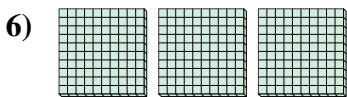
_____ hundertern = _____ zehnern = _____ einern



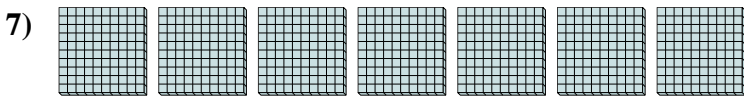
_____ hundertern = _____ zehnern = _____ einern




_____ hundertern = _____ zehnern = _____ einern



_____ hundertern = _____ zehnern = _____ einern




_____ hundertern = _____ zehnern = _____ einern




_____ hundertern = _____ zehnern = _____ einern



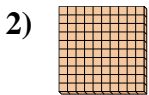
Verwenden Sie die Blöcke, um die Gesamtmengen zu bestimmen.



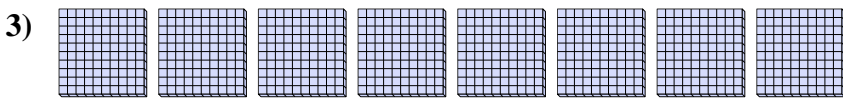
4 hundertern = 40 zehnern = 400 einern



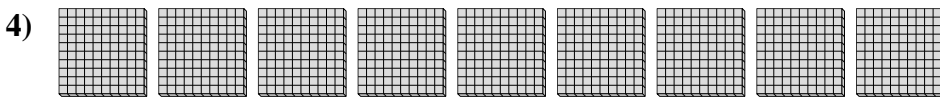
5 hundertern = 50 zehnern = 500 einern



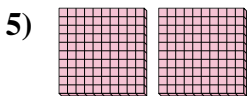
1 hundertern = 10 zehnern = 100 einern



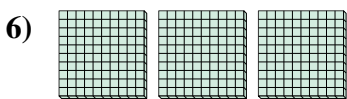
8 hundertern = 80 zehnern = 800 einern



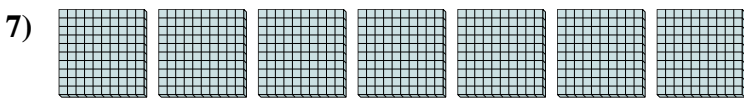
9 hundertern = 90 zehnern = 900 einern




2 hundertern = 20 zehnern = 200 einern



3 hundertern = 30 zehnern = 300 einern



7 hundertern = 70 zehnern = 700 einern



6 hundertern = 60 zehnern = 600 einern

Antworten

Bsp. 4 40 400

1. 5 50 500

2. 1 10 100

3. 8 80 800

4. 9 90 900

5. 2 20 200

6. 3 30 300

7. 7 70 700

8. 6 60 600