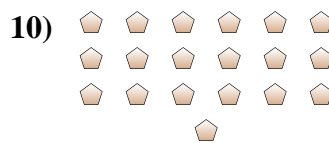
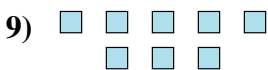
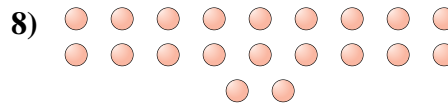
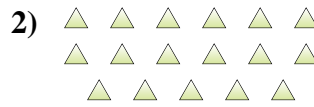
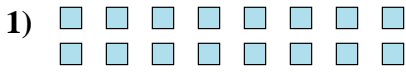




Bestimme, ob die Anzahl der Formen im Feld gerade oder ungerade ist.

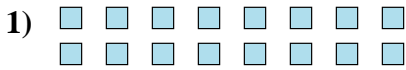
Antworten



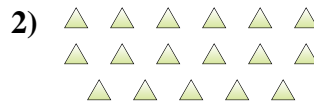
- 1. _____
- 2. _____
- 3. _____
- 4. _____
- 5. _____
- 6. _____
- 7. _____
- 8. _____
- 9. _____
- 10. _____



Bestimme, ob die Anzahl der Formen im Feld gerade oder ungerade ist.



16



17



5



6



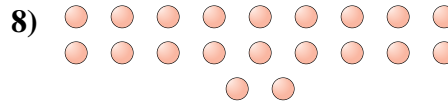
13



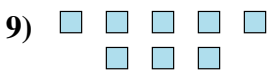
15



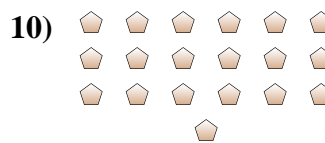
8



20



8



19

Antworten

1. gerade

2. ungerade

3. ungerade

4. gerade

5. ungerade

6. ungerade

7. gerade

8. gerade

9. gerade

10. ungerade