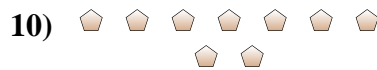
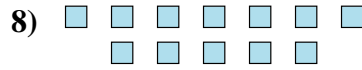
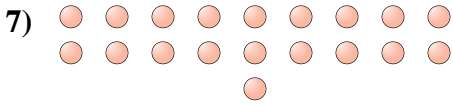
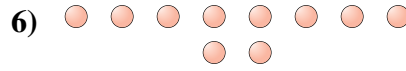

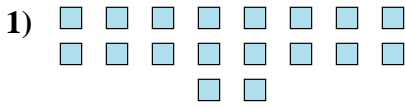




Bestimme, ob die Anzahl der Formen im Feld gerade oder ungerade ist.

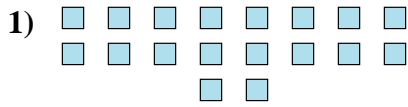
**Antworten**




- 1. \_\_\_\_\_
- 2. \_\_\_\_\_
- 3. \_\_\_\_\_
- 4. \_\_\_\_\_
- 5. \_\_\_\_\_
- 6. \_\_\_\_\_
- 7. \_\_\_\_\_
- 8. \_\_\_\_\_
- 9. \_\_\_\_\_
- 10. \_\_\_\_\_



Bestimme, ob die Anzahl der Formen im Feld gerade oder ungerade ist.



18



20



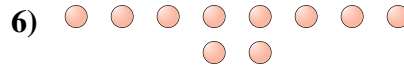
14



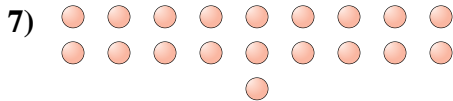
10



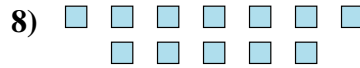
12



10



19



12



7



9

Antworten

1. gerade

2. gerade

3. gerade

4. gerade

5. gerade

6. gerade

7. ungerade

8. gerade

9. ungerade

10. ungerade