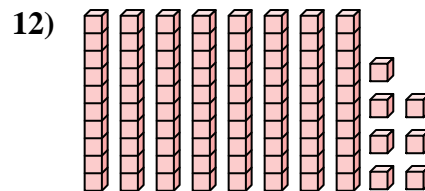
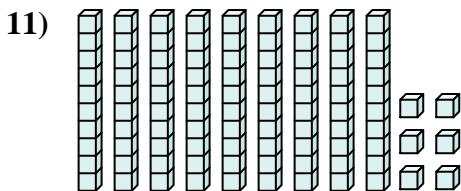
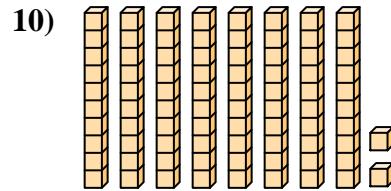
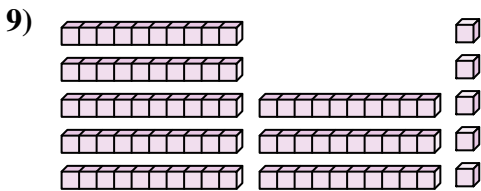
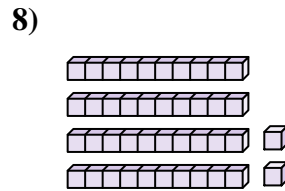
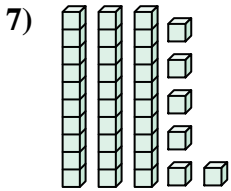
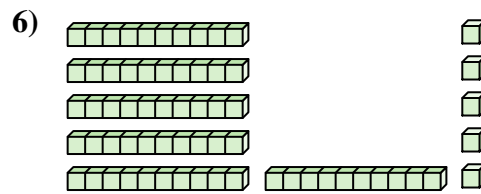
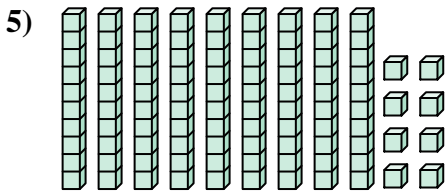
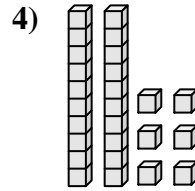
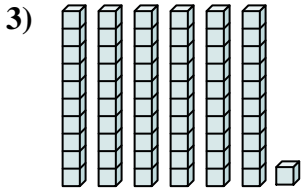
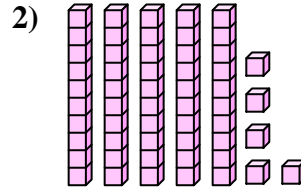
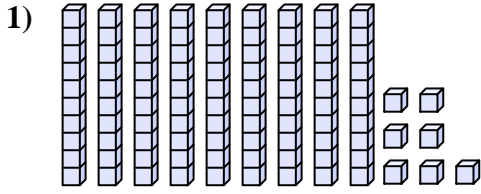




Zähle die Gesamtzahl aller kleinen Blöcke.

**Antworten**



1. \_\_\_\_\_

2. \_\_\_\_\_

3. \_\_\_\_\_

4. \_\_\_\_\_

5. \_\_\_\_\_

6. \_\_\_\_\_

7. \_\_\_\_\_

8. \_\_\_\_\_

9. \_\_\_\_\_

10. \_\_\_\_\_

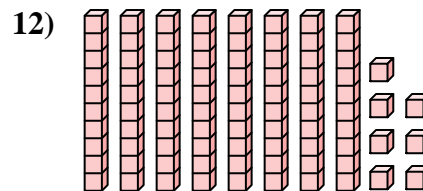
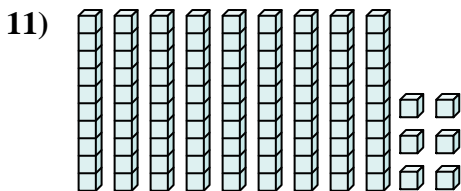
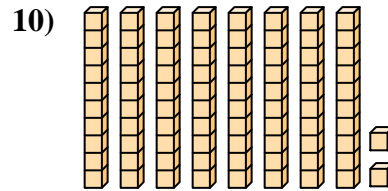
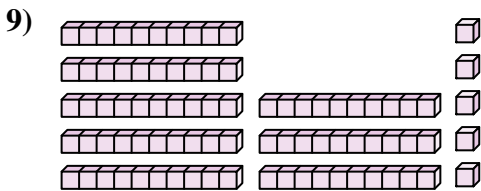
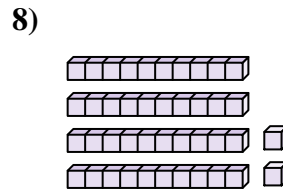
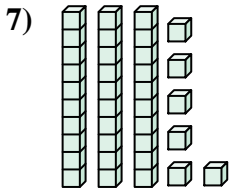
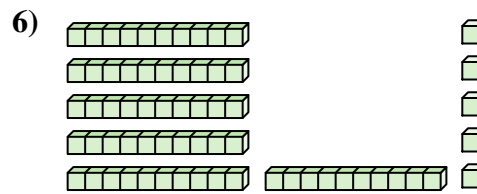
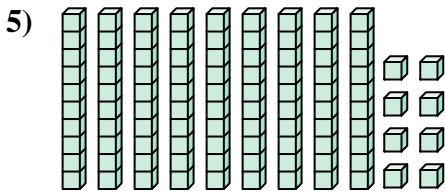
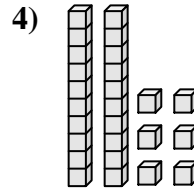
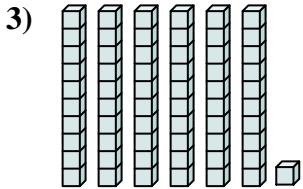
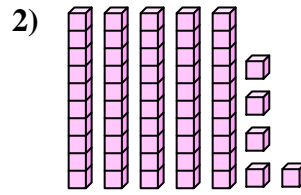
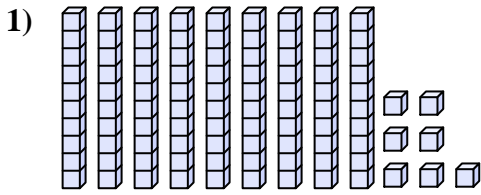
11. \_\_\_\_\_

12. \_\_\_\_\_



Zähle die Gesamtzahl aller kleinen Blöcke.

**Antworten**



1. 97

2. 55

3. 61

4. 26

5. 98

6. 65

7. 36

8. 42

9. 85

10. 82

11. 96

12. 87



Zähle die Gesamtzahl aller kleinen Blöcke.

**Antworten**

98

42

97

82

36

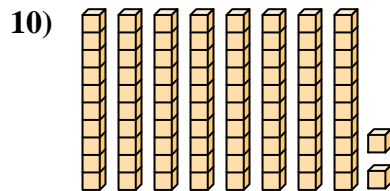
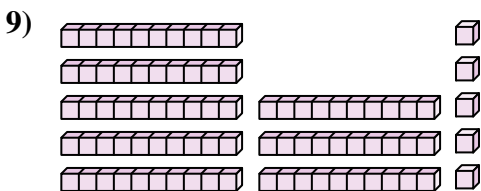
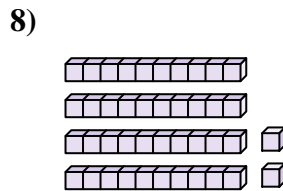
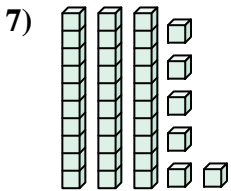
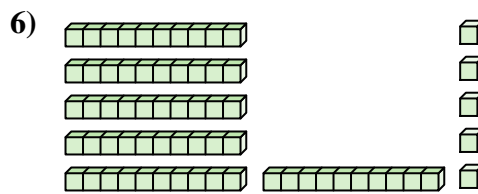
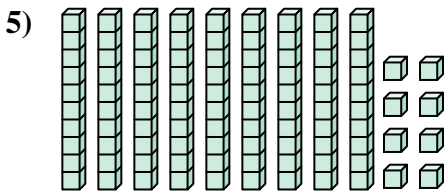
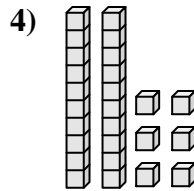
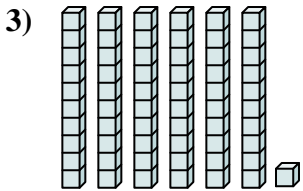
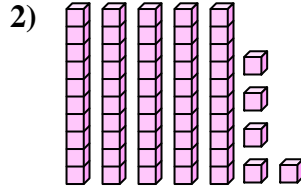
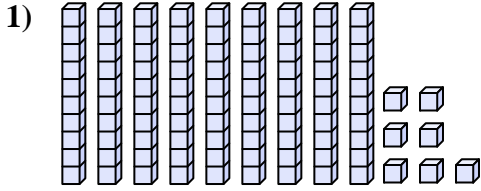
61

26

65

55

85



1. \_\_\_\_\_

2. \_\_\_\_\_

3. \_\_\_\_\_

4. \_\_\_\_\_

5. \_\_\_\_\_

6. \_\_\_\_\_

7. \_\_\_\_\_

8. \_\_\_\_\_

9. \_\_\_\_\_

10. \_\_\_\_\_