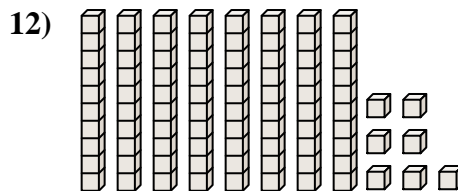
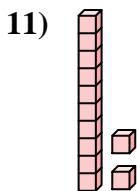
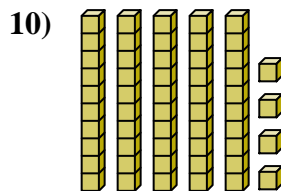
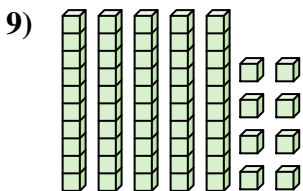
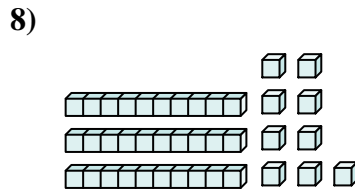

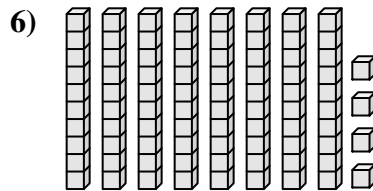
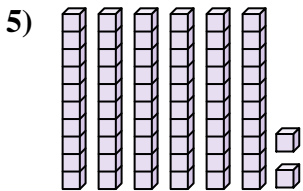
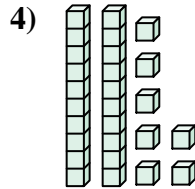
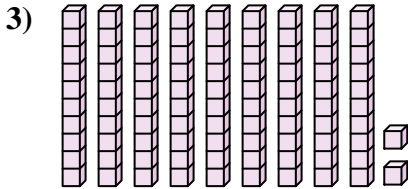
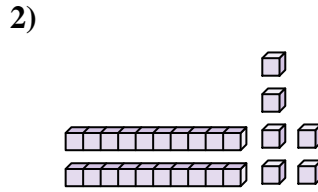
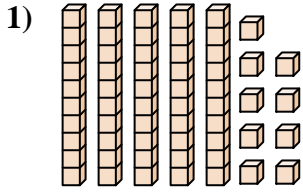




Zähle die Gesamtzahl aller kleinen Blöcke.

**Antworten**

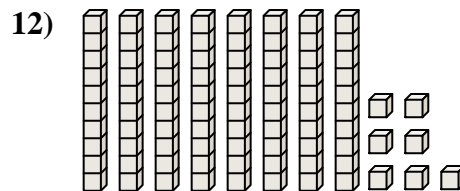
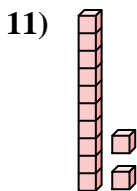
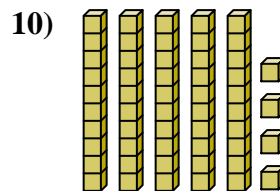
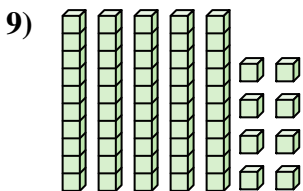
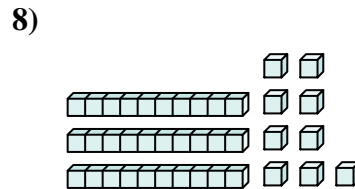

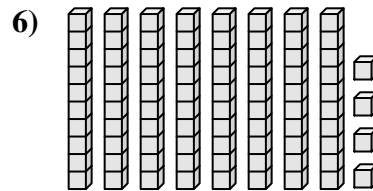
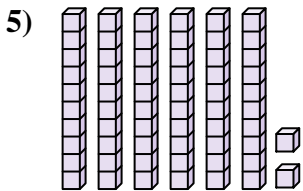
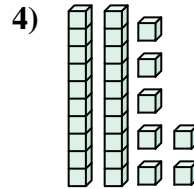
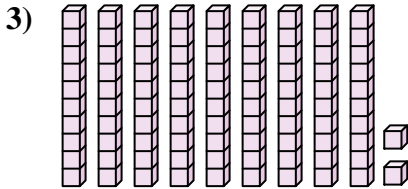
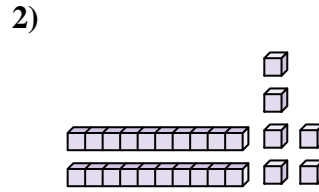
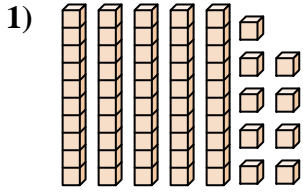


- 1. \_\_\_\_\_
- 2. \_\_\_\_\_
- 3. \_\_\_\_\_
- 4. \_\_\_\_\_
- 5. \_\_\_\_\_
- 6. \_\_\_\_\_
- 7. \_\_\_\_\_
- 8. \_\_\_\_\_
- 9. \_\_\_\_\_
- 10. \_\_\_\_\_
- 11. \_\_\_\_\_
- 12. \_\_\_\_\_



Zähle die Gesamtzahl aller kleinen Blöcke.

**Antworten**



1. 59

2. 26

3. 92

4. 27

5. 62

6. 84

7. 85

8. 39

9. 58

10. 54

11. 12

12. 87



Zähle die Gesamtzahl aller kleinen Blöcke.

62

54

58

27

84

59

85

26

92

39

**Antworten**

1. \_\_\_\_\_

2. \_\_\_\_\_

3. \_\_\_\_\_

4. \_\_\_\_\_

5. \_\_\_\_\_

6. \_\_\_\_\_

7. \_\_\_\_\_

8. \_\_\_\_\_

9. \_\_\_\_\_

10. \_\_\_\_\_

