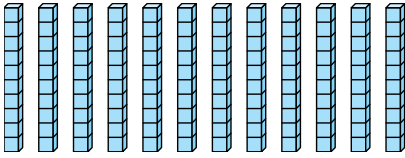




Bestimmen Sie, wie viele Gruppen von 100 aus den angezeigten Blöcken erstellt werden können.

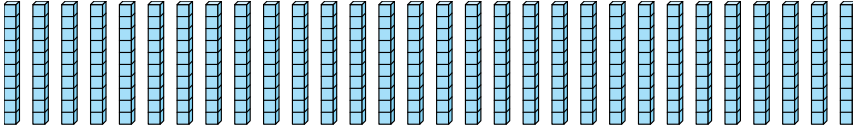
**Antworten**

Bsp)



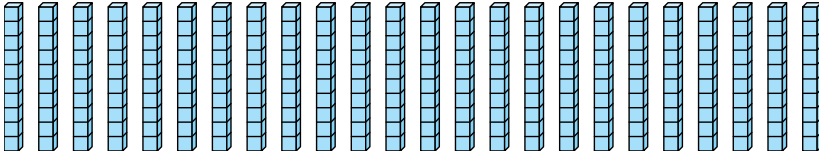
Bsp. 1

1)



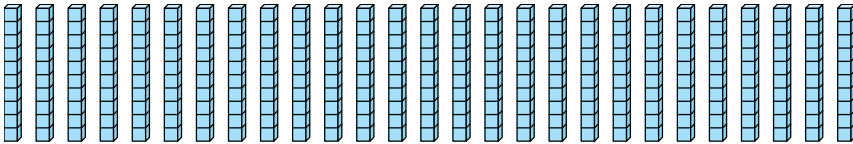
1. \_\_\_\_\_

2)



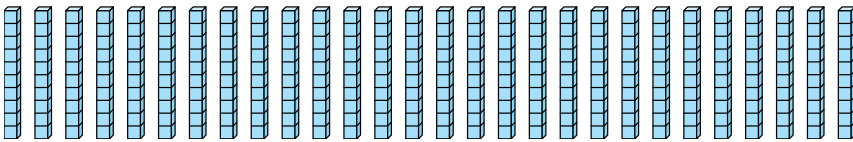
2. \_\_\_\_\_

3)



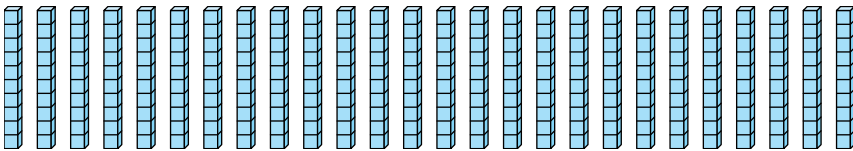
3. \_\_\_\_\_

4)



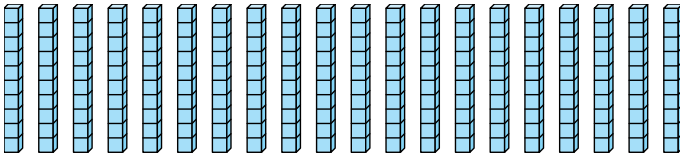
4. \_\_\_\_\_

5)



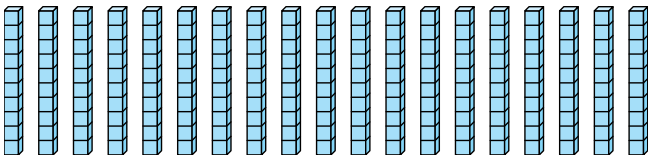
5. \_\_\_\_\_

6)



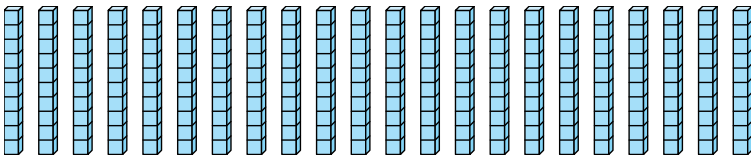
6. \_\_\_\_\_

7)



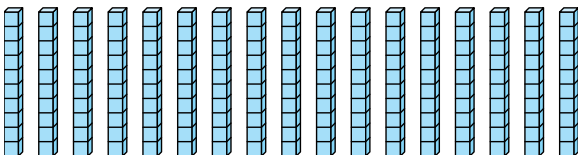
7. \_\_\_\_\_

8)



8. \_\_\_\_\_

9)



9. \_\_\_\_\_



Bestimmen Sie, wie viele Gruppen von 100 aus den angezeigten Blöcken erstellt werden können.

Bsp)

1)

2)

3)

4)

5)

6)

7)

8)

9)

Antworten

Bsp. 1

1. 3

2. 2

3. 2

4. 2

5. 2

6. 2

7. 1

8. 2

9. 1