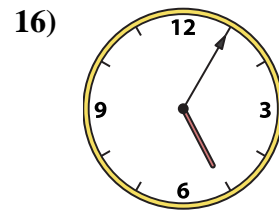
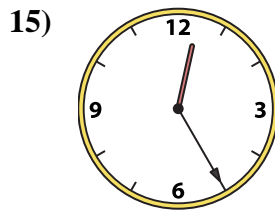
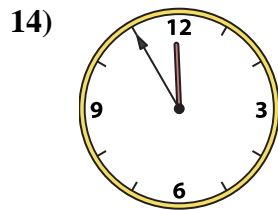
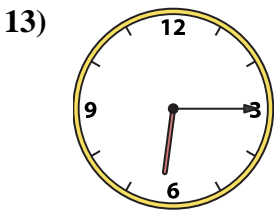
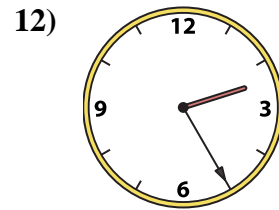
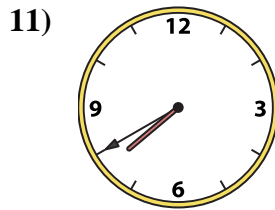
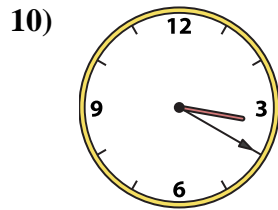
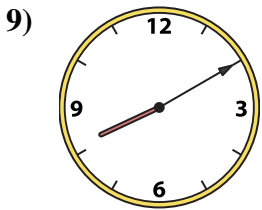
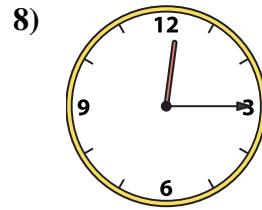
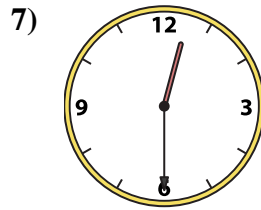
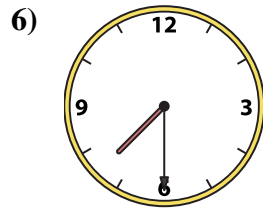
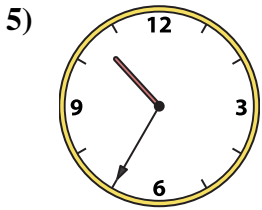
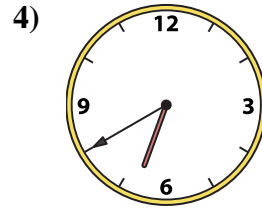
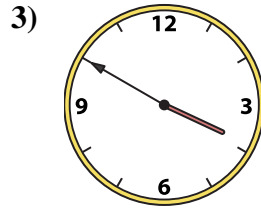
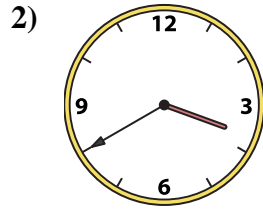
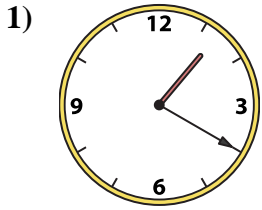




Passen Sie die analoge Uhr an die digitale Uhr an.

Antworten



A. 10:35

B. 2:25

C. 7:40

D. 12:30

E. 6:40

F. 1:20

G. 12:25

H. 6:15

I. 3:50

J. 3:20

K. 11:55

L. 5:05

M. 7:30

N. 3:40

O. 8:10

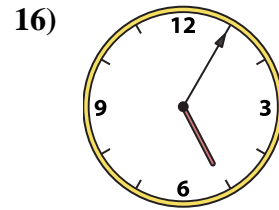
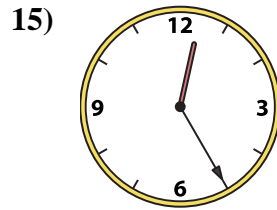
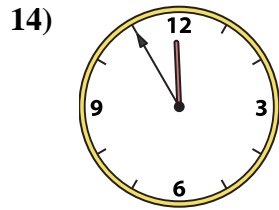
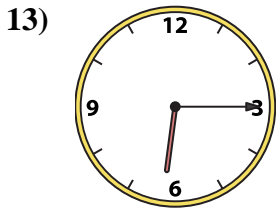
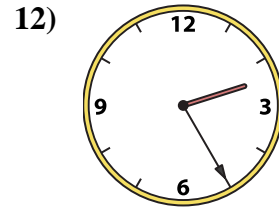
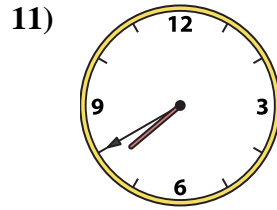
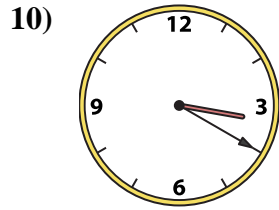
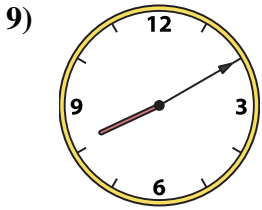
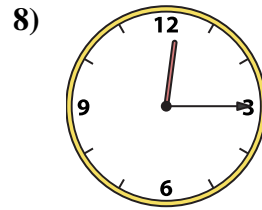
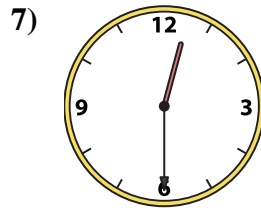
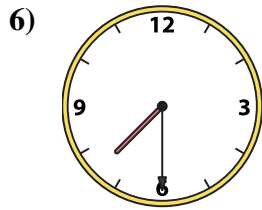
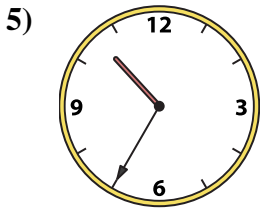
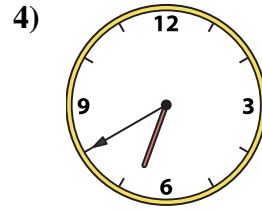
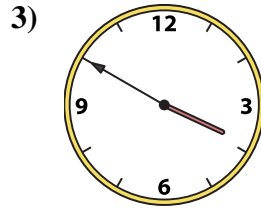
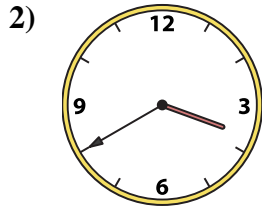
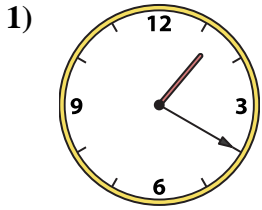
P. 12:15

1. _____
2. _____
3. _____
4. _____
5. _____
6. _____
7. _____
8. _____
9. _____
10. _____
11. _____
12. _____
13. _____
14. _____
15. _____
16. _____



Passen Sie die analoge Uhr an die digitale Uhr an.

Antworten



A. 10:35

B. 2:25

C. 7:40

D. 12:30

E. 6:40

F. 1:20

G. 12:25

H. 6:15

I. 3:50

J. 3:20

K. 11:55

L. 5:05

M. 7:30

N. 3:40

O. 8:10

P. 12:15

1. **F**

2. **N**

3. **I**

4. **E**

5. **A**

6. **M**

7. **D**

8. **P**

9. **O**

10. **J**

11. **C**

12. **B**

13. **H**

14. **K**

15. **G**

16. **L**