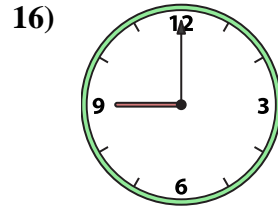
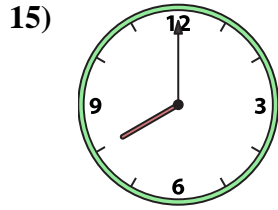
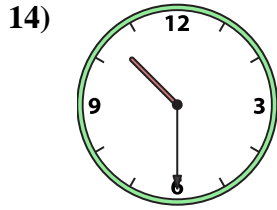
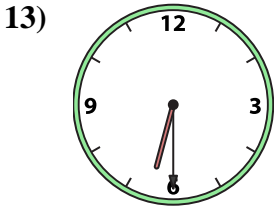

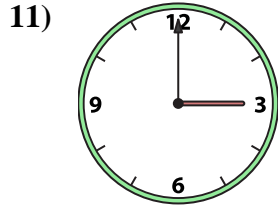
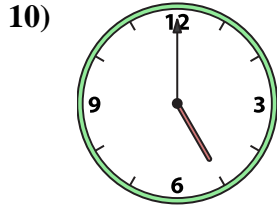
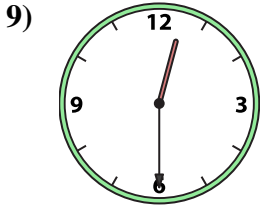
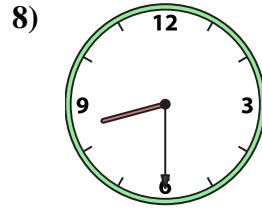
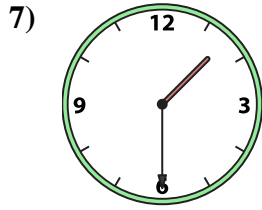

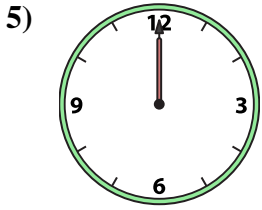
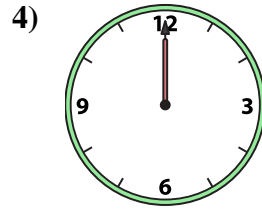
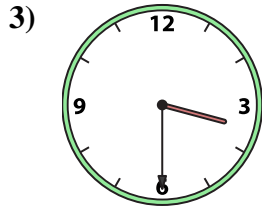
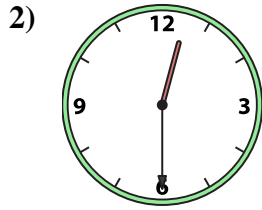





Passen Sie die analoge Uhr an die digitale Uhr an.

Antworten



1. \_\_\_\_\_
2. \_\_\_\_\_
3. \_\_\_\_\_
4. \_\_\_\_\_
5. \_\_\_\_\_
6. \_\_\_\_\_
7. \_\_\_\_\_
8. \_\_\_\_\_
9. \_\_\_\_\_
10. \_\_\_\_\_
11. \_\_\_\_\_
12. \_\_\_\_\_
13. \_\_\_\_\_
14. \_\_\_\_\_
15. \_\_\_\_\_
16. \_\_\_\_\_

A. 3:30

B. 9:00

C. 12:00

D. 12:00

E. 10:30

F. 12:30

G. 8:00

H. 11:00

I. 5:00

J. 1:30

K. 12:30

L. 4:00

M. 3:00

N. 6:30

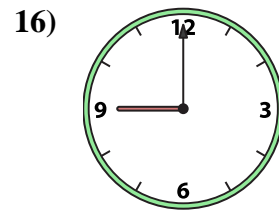
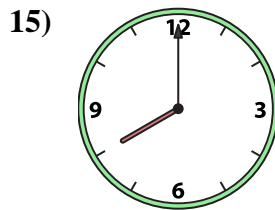
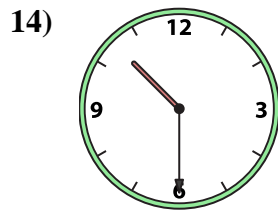
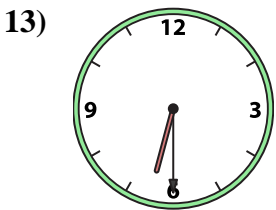
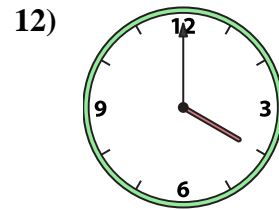
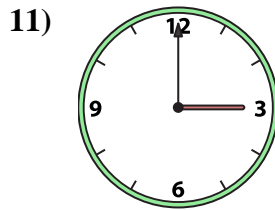
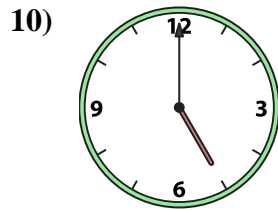
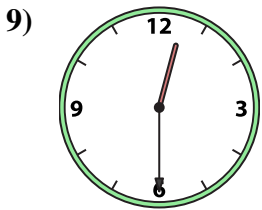
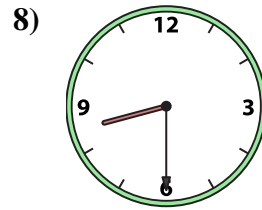
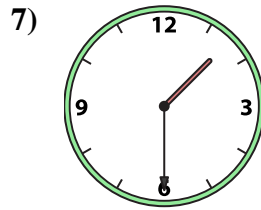
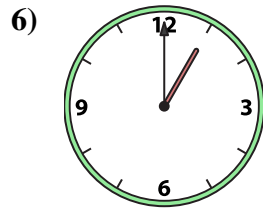
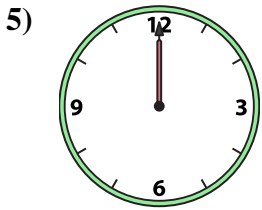
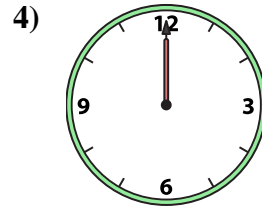
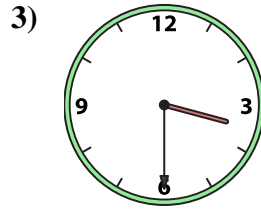
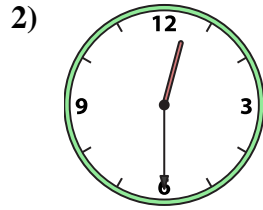

O. 8:30

P. 1:00



Passen Sie die analoge Uhr an die digitale Uhr an.

**Antworten**



A.

B.

C.

D.

E.

F.

G.

H.

I.

J.

K.

L.

M.

N.

O.

P.

1.   **H**  

2.   **F**  

3.   **A**  

4.   **C**  

5.   **D**  

6.   **P**  

7.   **J**  

8.   **O**  

9.   **K**  

10.   **I**  

11.   **M**  

12.   **L**  

13.   **N**  

14.   **E**  

15.   **G**  

16.   **B**