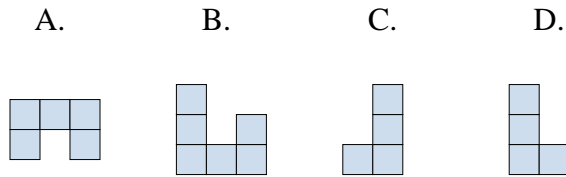
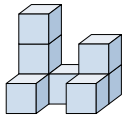


**Löse jede Aufgabe.****Antworten**

- 1) If you were looking at the 3d shape from above what would you see?



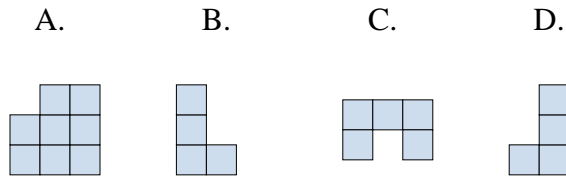
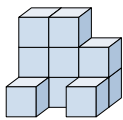
1. _____

2. _____

3. _____

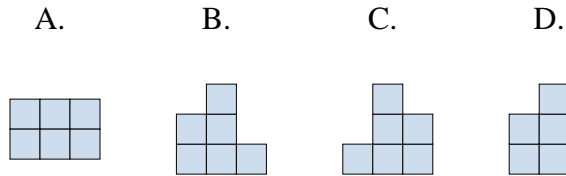
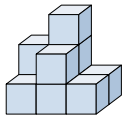
4. _____

- 2) If you were looking at the 3d shape from above what would you see?

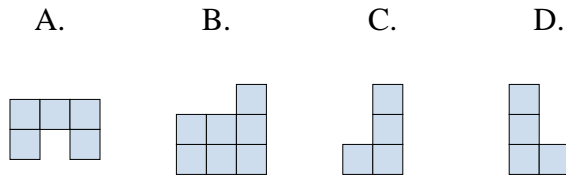
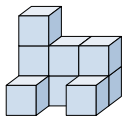


5. _____

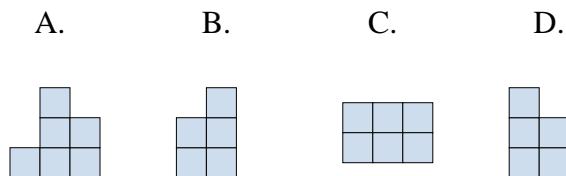
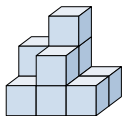
- 3) If you were looking at the 3d shape from the right side what would you see?



- 4) If you were looking at the 3d shape from above what would you see?

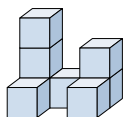


- 5) If you were looking at the 3d shape from above what would you see?



**Löse jede Aufgabe.****Antworten**

- 1) If you were looking at the 3d shape from above what would you see?



A.



B.



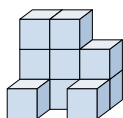
C.



D.

1. **A**

- 2) If you were looking at the 3d shape from above what would you see?



A.



B.



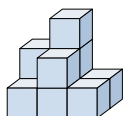
C.



D.

2. **C**3. **D**4. **A**5. **C**

- 3) If you were looking at the 3d shape from the right side what would you see?



A.



B.



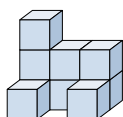
C.



D.



- 4) If you were looking at the 3d shape from above what would you see?



A.



B.



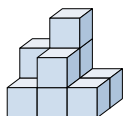
C.



D.



- 5) If you were looking at the 3d shape from above what would you see?



A.



B.



C.

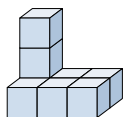


D.



**Löse jede Aufgabe.****Antworten**

- 1) If you were looking at the 3d shape from the right side what would you see?



A.



B.



C.



D.



1. _____

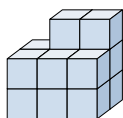
2. _____

3. _____

4. _____

5. _____

- 2) If you were looking at the 3d shape from the back what would you see?



A.



B.



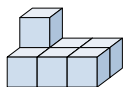
C.



D.



- 3) If you were looking at the 3d shape from the right side what would you see?



A.



B.



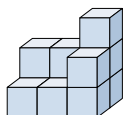
C.



D.



- 4) If you were looking at the 3d shape from above what would you see?



A.



B.



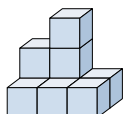
C.



D.



- 5) If you were looking at the 3d shape from the back what would you see?



A.



B.



C.

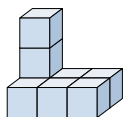


D.



**Löse jede Aufgabe.****Antworten**

- 1) If you were looking at the 3d shape from the right side what would you see?



A.



B.



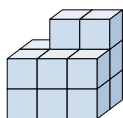
C.



D.

1. **C**

- 2) If you were looking at the 3d shape from the back what would you see?



A.



B.



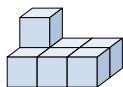
C.



D.

2. **C**3. **A**4. **B**5. **B**

- 3) If you were looking at the 3d shape from the right side what would you see?



A.



B.



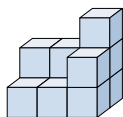
C.



D.



- 4) If you were looking at the 3d shape from above what would you see?



A.



B.



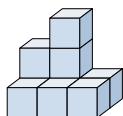
C.



D.



- 5) If you were looking at the 3d shape from the back what would you see?



A.



B.

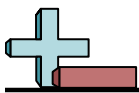


C.

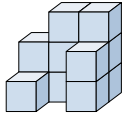


D.



**Löse jede Aufgabe.****Antworten**

- 1) If you were looking at the 3d shape from the back what would you see?



A.



B.



C.



D.



1. _____

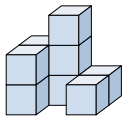
2. _____

3. _____

4. _____

5. _____

- 2) If you were looking at the 3d shape from the back what would you see?



A.



B.



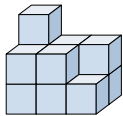
C.



D.



- 3) If you were looking at the 3d shape from the back what would you see?



A.



B.



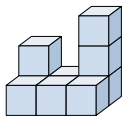
C.



D.



- 4) If you were looking at the 3d shape from the left side what would you see?



A.



B.



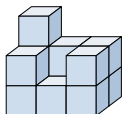
C.



D.



- 5) If you were looking at the 3d shape from the back what would you see?



A.



B.



C.

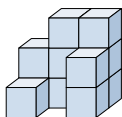


D.



**Löse jede Aufgabe.****Antworten**

- 1) If you were looking at the 3d shape from the back what would you see?



A.



B.



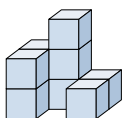
C.



D.

1. **B**

- 2) If you were looking at the 3d shape from the back what would you see?



A.



B.



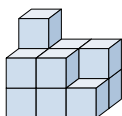
C.



D.

2. **B**3. **C**4. **B**5. **C**

- 3) If you were looking at the 3d shape from the back what would you see?



A.



B.



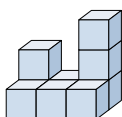
C.



D.



- 4) If you were looking at the 3d shape from the left side what would you see?



A.



B.



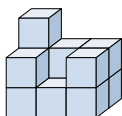
C.



D.



- 5) If you were looking at the 3d shape from the back what would you see?



A.



B.



C.

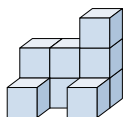


D.



**Löse jede Aufgabe.****Antworten**

- 1) If you were looking at the 3d shape from above what would you see?



A.



B.



C.



D.



1. _____

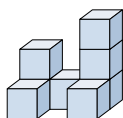
2. _____

3. _____

4. _____

5. _____

- 2) If you were looking at the 3d shape from the left side what would you see?



A.



B.



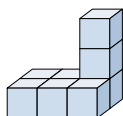
C.



D.



- 3) If you were looking at the 3d shape from above what would you see?



A.



B.



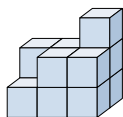
C.



D.



- 4) If you were looking at the 3d shape from the left side what would you see?



A.



B.



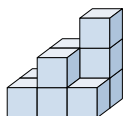
C.



D.



- 5) If you were looking at the 3d shape from the right side what would you see?



A.



B.



C.

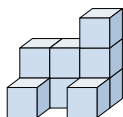


D.



**Löse jede Aufgabe.****Antworten**

- 1) If you were looking at the 3d shape from above what would you see?



A.



B.



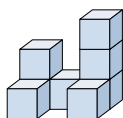
C.



D.

1. **B**

- 2) If you were looking at the 3d shape from the left side what would you see?



A.



B.



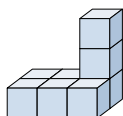
C.



D.

2. **A**3. **B**4. **D**5. **D**

- 3) If you were looking at the 3d shape from above what would you see?



A.



B.



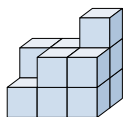
C.



D.



- 4) If you were looking at the 3d shape from the left side what would you see?



A.



B.



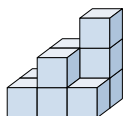
C.



D.



- 5) If you were looking at the 3d shape from the right side what would you see?



A.



B.



C.

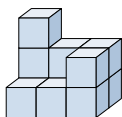


D.



**Löse jede Aufgabe.****Antworten**

- 1) If you were looking at the 3d shape from the right side what would you see?



A.



B.



C.



D.



1. _____

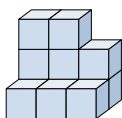
2. _____

3. _____

4. _____

5. _____

- 2) If you were looking at the 3d shape from the left side what would you see?



A.



B.



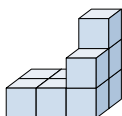
C.



D.



- 3) If you were looking at the 3d shape from above what would you see?



A.



B.



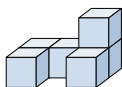
C.



D.



- 4) If you were looking at the 3d shape from the left side what would you see?



A.



B.



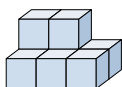
C.



D.



- 5) If you were looking at the 3d shape from the right side what would you see?



A.



B.



C.

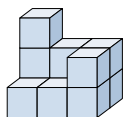


D.



**Löse jede Aufgabe.****Antworten**

- 1) If you were looking at the 3d shape from the right side what would you see?



A.

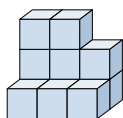
B.

C.

D.

1. **D**

- 2) If you were looking at the 3d shape from the left side what would you see?



A.

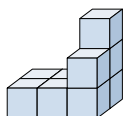
B.

C.

D.

2. **A**3. **A**4. **D**5. **B**

- 3) If you were looking at the 3d shape from above what would you see?



A.

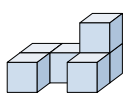
B.

C.

D.



- 4) If you were looking at the 3d shape from the left side what would you see?



A.

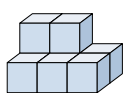
B.

C.

D.



- 5) If you were looking at the 3d shape from the right side what would you see?



A.

B.

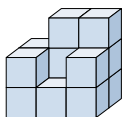
C.

D.



**Löse jede Aufgabe.****Antworten**

- 1) If you were looking at the 3d shape from the left side what would you see?



A.



B.



C.



D.



1. _____

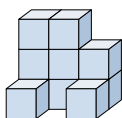
2. _____

3. _____

4. _____

5. _____

- 2) If you were looking at the 3d shape from above what would you see?



A.



B.



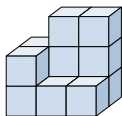
C.



D.



- 3) If you were looking at the 3d shape from the back what would you see?



A.



B.



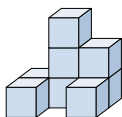
C.



D.



- 4) If you were looking at the 3d shape from the left side what would you see?



A.



B.



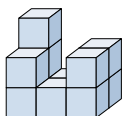
C.



D.



- 5) If you were looking at the 3d shape from the left side what would you see?



A.



B.



C.

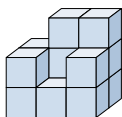


D.



**Löse jede Aufgabe.****Antworten**

- 1) If you were looking at the 3d shape from the left side what would you see?



A.



B.



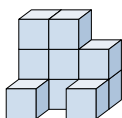
C.



D.

1. **C**

- 2) If you were looking at the 3d shape from above what would you see?



A.



B.



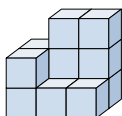
C.



D.

2. **A**3. **A**4. **C**5. **D**

- 3) If you were looking at the 3d shape from the back what would you see?



A.



B.



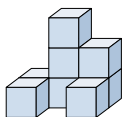
C.



D.



- 4) If you were looking at the 3d shape from the left side what would you see?



A.



B.



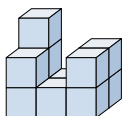
C.



D.



- 5) If you were looking at the 3d shape from the left side what would you see?



A.



B.



C.

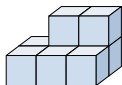


D.



**Löse jede Aufgabe.****Antworten**

- 1) If you were looking at the 3d shape from the left side what would you see?



A.



B.



C.



D.



1. _____

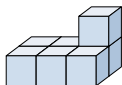
2. _____

3. _____

4. _____

5. _____

- 2) If you were looking at the 3d shape from the right side what would you see?



A.



B.



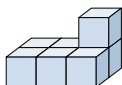
C.



D.



- 3) If you were looking at the 3d shape from the back what would you see?



A.



B.



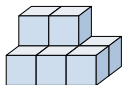
C.



D.



- 4) If you were looking at the 3d shape from above what would you see?



A.



B.



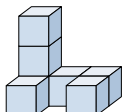
C.



D.



- 5) If you were looking at the 3d shape from above what would you see?



A.



B.



C.

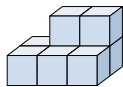


D.



**Löse jede Aufgabe.****Antworten**

- 1) If you were looking at the 3d shape from the left side what would you see?



A.



B.



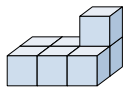
C.



D.

1. **A**

- 2) If you were looking at the 3d shape from the right side what would you see?



A.



B.



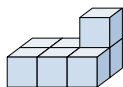
C.



D.

2. **D**3. **D**4. **B**5. **D**

- 3) If you were looking at the 3d shape from the back what would you see?



A.



B.



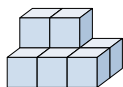
C.



D.



- 4) If you were looking at the 3d shape from above what would you see?



A.



B.



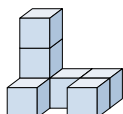
C.



D.



- 5) If you were looking at the 3d shape from above what would you see?



A.



B.



C.

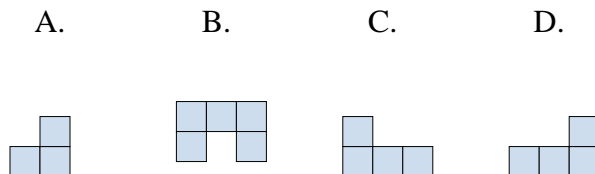
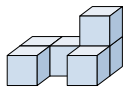


D.



**Löse jede Aufgabe.****Antworten**

- 1) If you were looking at the 3d shape from the right side what would you see?



1. _____

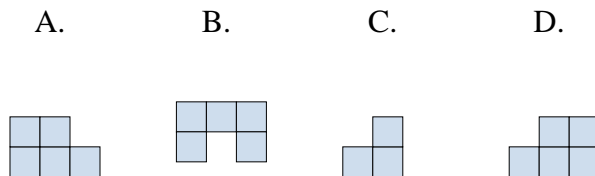
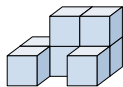
2. _____

3. _____

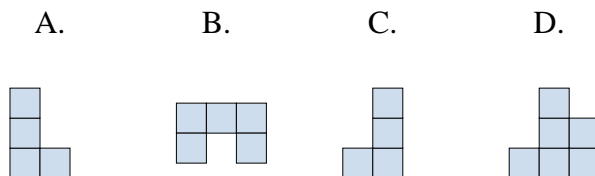
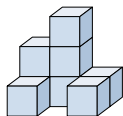
4. _____

5. _____

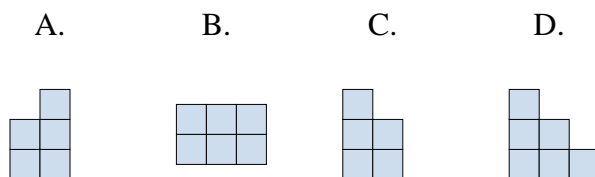
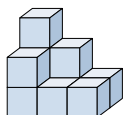
- 2) If you were looking at the 3d shape from the right side what would you see?



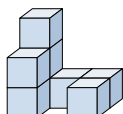
- 3) If you were looking at the 3d shape from the back what would you see?



- 4) If you were looking at the 3d shape from above what would you see?

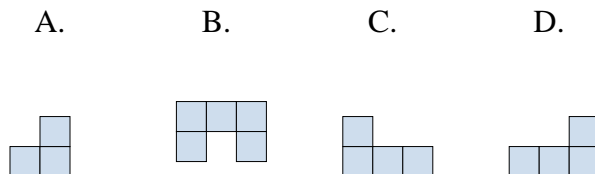
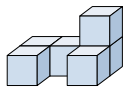


- 5) If you were looking at the 3d shape from the right side what would you see?

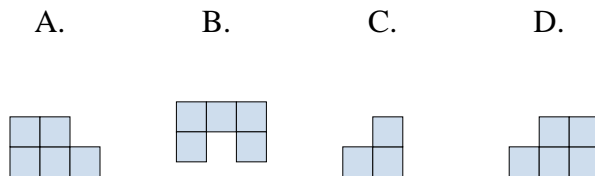
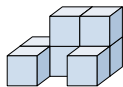


**Löse jede Aufgabe.****Antworten**

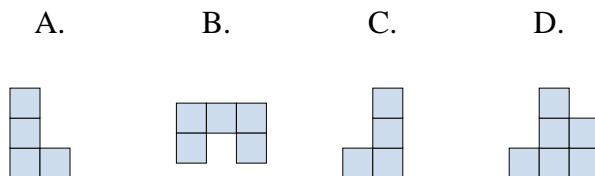
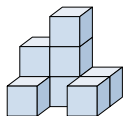
- 1) If you were looking at the 3d shape from the right side what would you see?

1. **A**2. **C**3. **D**4. **B**5. **B**

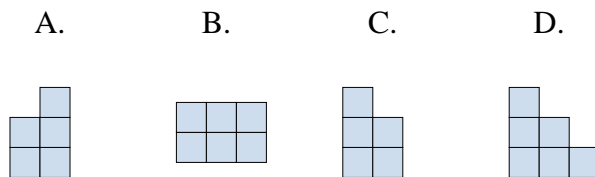
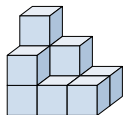
- 2) If you were looking at the 3d shape from the right side what would you see?



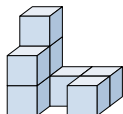
- 3) If you were looking at the 3d shape from the back what would you see?



- 4) If you were looking at the 3d shape from above what would you see?

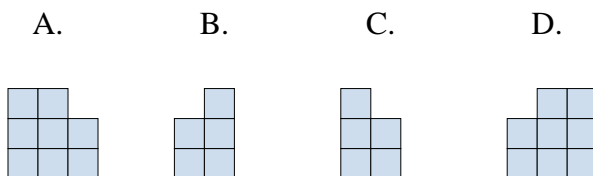
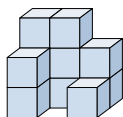


- 5) If you were looking at the 3d shape from the right side what would you see?



**Löse jede Aufgabe.****Antworten**

- 1) If you were looking at the 3d shape from the right side what would you see?



1. _____

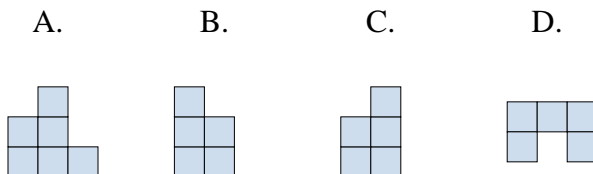
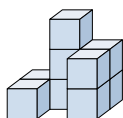
2. _____

3. _____

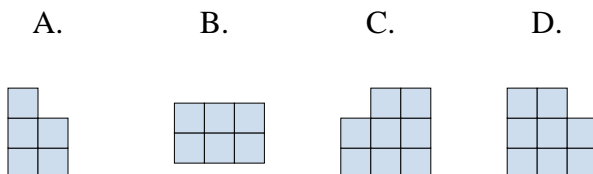
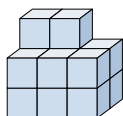
4. _____

5. _____

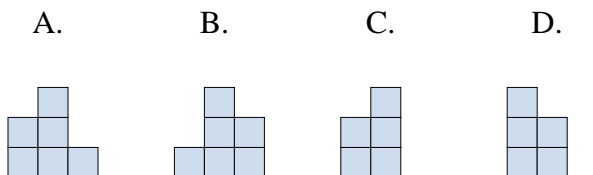
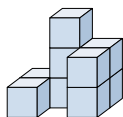
- 2) If you were looking at the 3d shape from the right side what would you see?



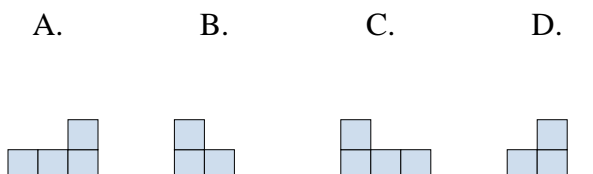
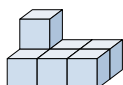
- 3) If you were looking at the 3d shape from above what would you see?



- 4) If you were looking at the 3d shape from the left side what would you see?

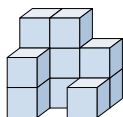


- 5) If you were looking at the 3d shape from the left side what would you see?



**Löse jede Aufgabe.****Antworten**

- 1) If you were looking at the 3d shape from the right side what would you see?



A.



B.



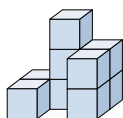
C.



D.

1. **B**

- 2) If you were looking at the 3d shape from the right side what would you see?



A.



B.



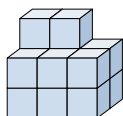
C.



D.

2. **C**3. **B**4. **D**5. **B**

- 3) If you were looking at the 3d shape from above what would you see?



A.



B.



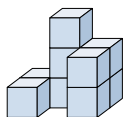
C.



D.



- 4) If you were looking at the 3d shape from the left side what would you see?



A.



B.



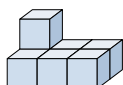
C.



D.



- 5) If you were looking at the 3d shape from the left side what would you see?



A.



B.



C.

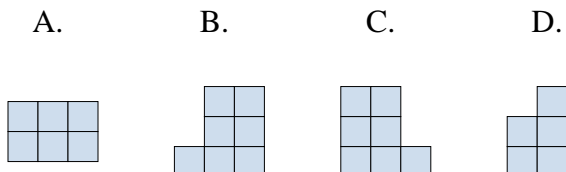
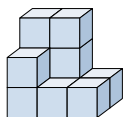


D.



**Löse jede Aufgabe.****Antworten**

- 1) If you were looking at the 3d shape from the right side what would you see?



1. _____

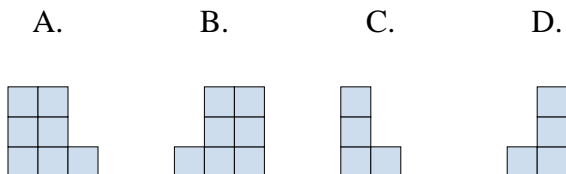
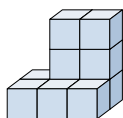
2. _____

3. _____

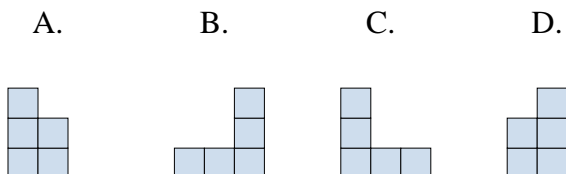
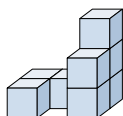
4. _____

5. _____

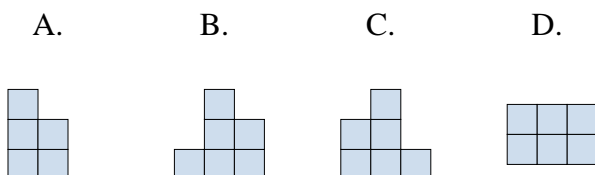
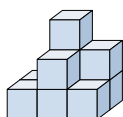
- 2) If you were looking at the 3d shape from the back what would you see?



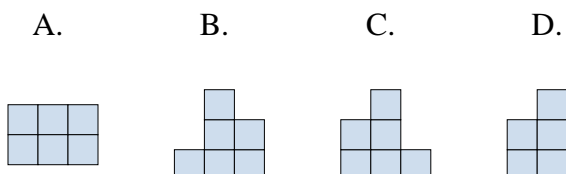
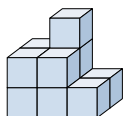
- 3) If you were looking at the 3d shape from the back what would you see?



- 4) If you were looking at the 3d shape from the back what would you see?

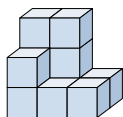


- 5) If you were looking at the 3d shape from above what would you see?



**Löse jede Aufgabe.****Antworten**

- 1) If you were looking at the 3d shape from the right side what would you see?



A.



B.



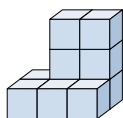
C.



D.

1. **D**

- 2) If you were looking at the 3d shape from the back what would you see?



A.



B.



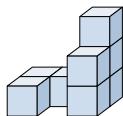
C.



D.

2. **A**3. **C**4. **C**5. **A**

- 3) If you were looking at the 3d shape from the back what would you see?



A.



B.



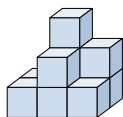
C.



D.



- 4) If you were looking at the 3d shape from the back what would you see?



A.



B.



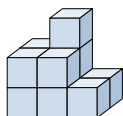
C.



D.



- 5) If you were looking at the 3d shape from above what would you see?



A.



B.



C.



D.

