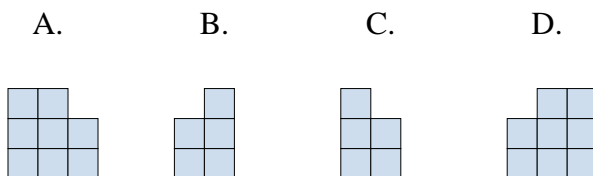
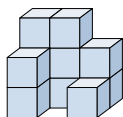


**Löse jede Aufgabe.****Antworten**

- 1) If you were looking at the 3d shape from the right side what would you see?



1. \_\_\_\_\_

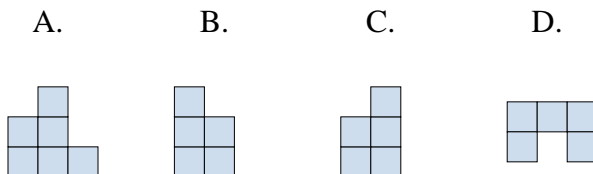
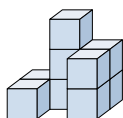
2. \_\_\_\_\_

3. \_\_\_\_\_

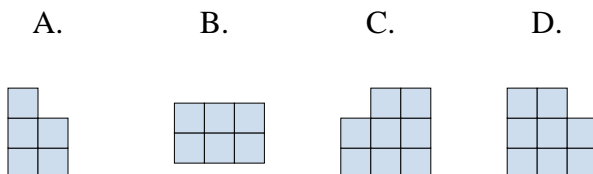
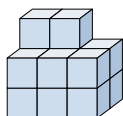
4. \_\_\_\_\_

5. \_\_\_\_\_

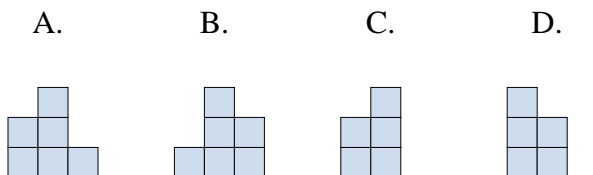
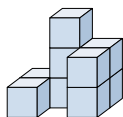
- 2) If you were looking at the 3d shape from the right side what would you see?



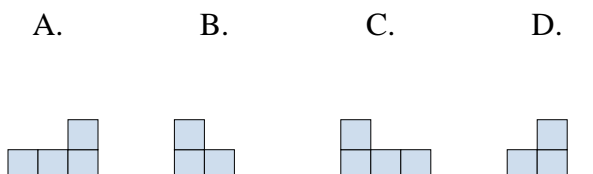
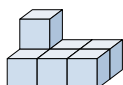
- 3) If you were looking at the 3d shape from above what would you see?



- 4) If you were looking at the 3d shape from the left side what would you see?

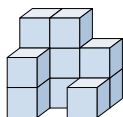


- 5) If you were looking at the 3d shape from the left side what would you see?



**Löse jede Aufgabe.****Antworten**

- 1) If you were looking at the 3d shape from the right side what would you see?



A.



B.



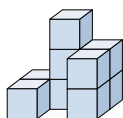
C.



D.

1. **B**

- 2) If you were looking at the 3d shape from the right side what would you see?



A.



B.



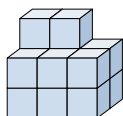
C.



D.

2. **C**3. **B**4. **D**5. **B**

- 3) If you were looking at the 3d shape from above what would you see?



A.



B.



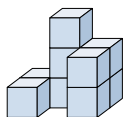
C.



D.



- 4) If you were looking at the 3d shape from the left side what would you see?



A.



B.



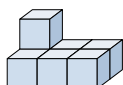
C.



D.



- 5) If you were looking at the 3d shape from the left side what would you see?



A.



B.



C.



D.

