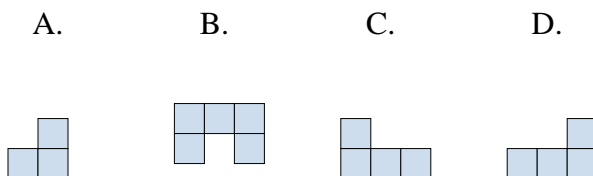
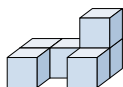


**Löse jede Aufgabe.****Antworten**

- 1) If you were looking at the 3d shape from the right side what would you see?



1. \_\_\_\_\_

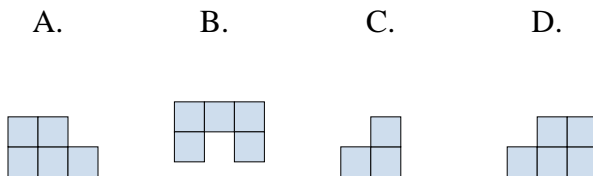
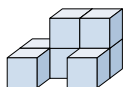
2. \_\_\_\_\_

3. \_\_\_\_\_

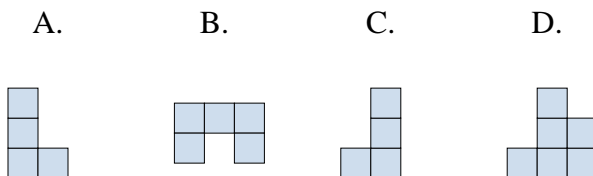
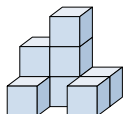
4. \_\_\_\_\_

5. \_\_\_\_\_

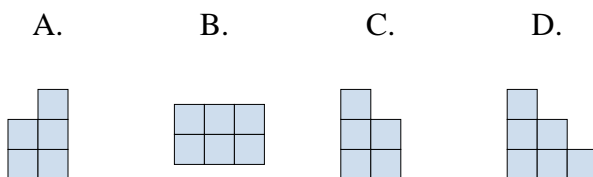
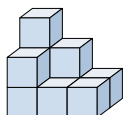
- 2) If you were looking at the 3d shape from the right side what would you see?



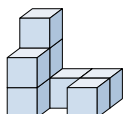
- 3) If you were looking at the 3d shape from the back what would you see?



- 4) If you were looking at the 3d shape from above what would you see?

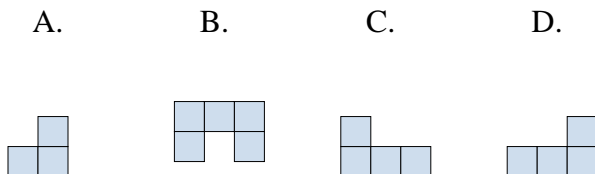
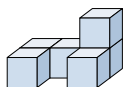


- 5) If you were looking at the 3d shape from the right side what would you see?

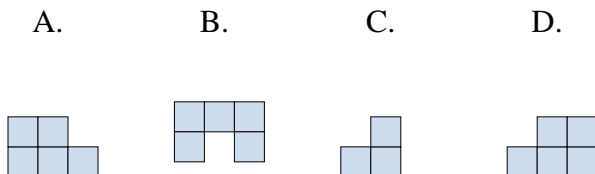
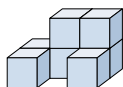


**Löse jede Aufgabe.****Antworten**

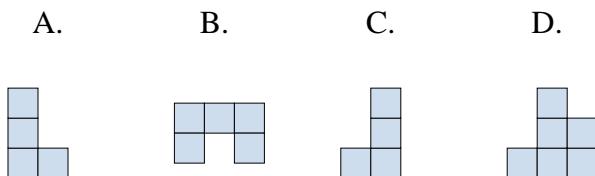
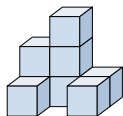
- 1) If you were looking at the 3d shape from the right side what would you see?

1. **A**2. **C**3. **D**4. **B**5. **B**

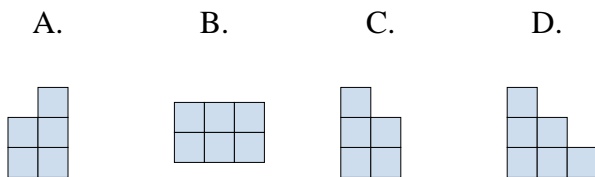
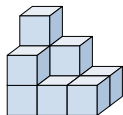
- 2) If you were looking at the 3d shape from the right side what would you see?



- 3) If you were looking at the 3d shape from the back what would you see?



- 4) If you were looking at the 3d shape from above what would you see?



- 5) If you were looking at the 3d shape from the right side what would you see?

