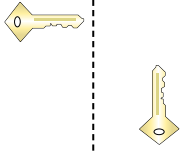




Stelle fest, ob eine Form-Verschiebung, Form-Drehung oder Form-Spiegelung vorliegt.

**Antworten**

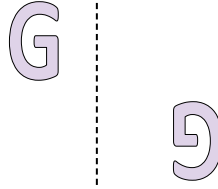
1)



2)



3)



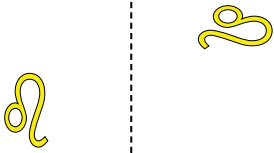
1. \_\_\_\_\_

2. \_\_\_\_\_

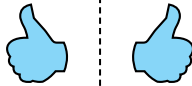
3. \_\_\_\_\_

4. \_\_\_\_\_

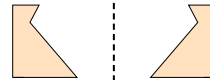
4)



5)



6)

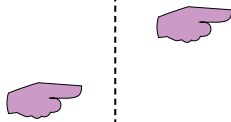


5. \_\_\_\_\_

6. \_\_\_\_\_

7. \_\_\_\_\_

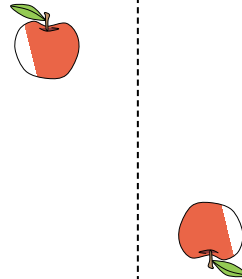
7)



8)



9)



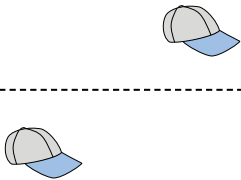
8. \_\_\_\_\_

9. \_\_\_\_\_

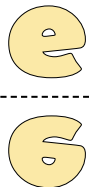
10. \_\_\_\_\_

11. \_\_\_\_\_

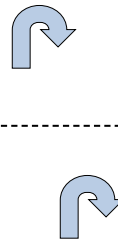
10)



11)



12)




12. \_\_\_\_\_

13. \_\_\_\_\_


14. \_\_\_\_\_

15. \_\_\_\_\_

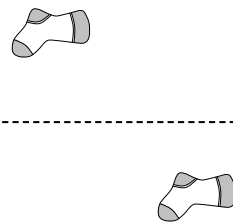
13)



14)



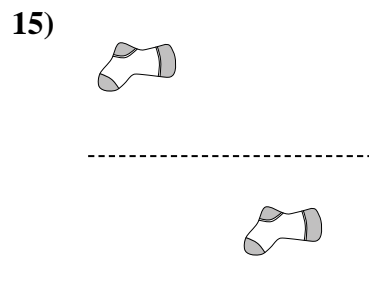
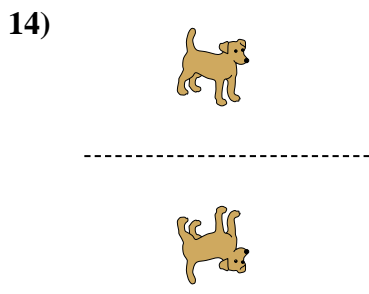
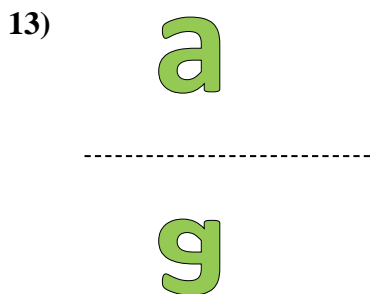
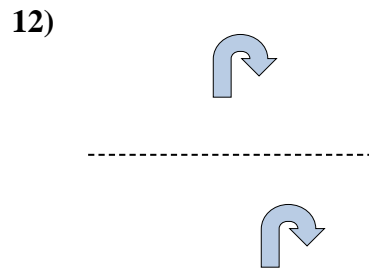
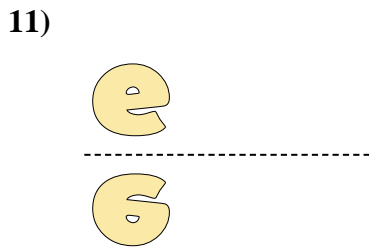
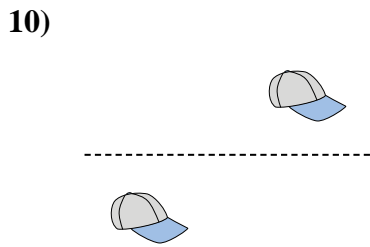
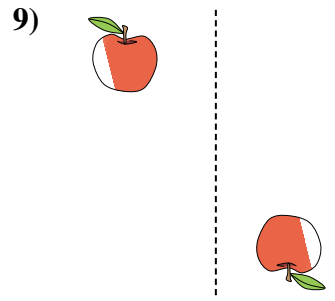
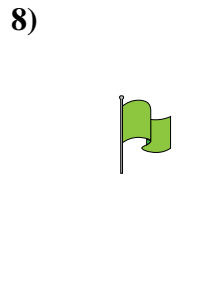

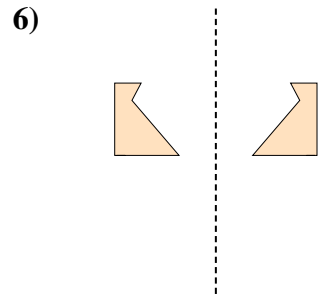


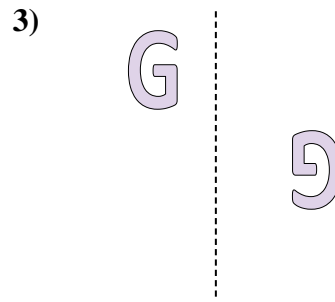
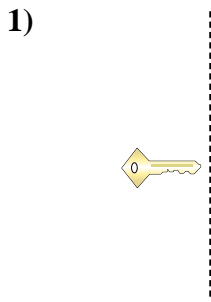
15)





Stelle fest, ob eine Form-Verschiebung, Form-Drehung oder Form-Spiegelung vorliegt.

**Antworten**



1. Drehung

2. Verschiebung

3. Drehung

4. Drehung

5. Spiegelung

6. Spiegelung

7. Verschiebung

8. Spiegelung

9. Drehung

10. Verschiebung

11. Spiegelung

12. Verschiebung

13. Spiegelung

14. Spiegelung

15. Verschiebung