



Stelle fest, ob eine Form-Verschiebung, Form-Drehung oder Form-Spiegelung vorliegt.

Antworten


1)



2)



3)



4)



5)



6)



7)



8)



9)



10)



11)



12)



13)



14)



15)



1. _____

2. _____

3. _____

4. _____

5. _____

6. _____

7. _____

8. _____

9. _____

10. _____

11. _____

12. _____

13. _____

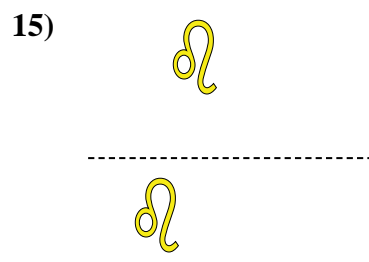
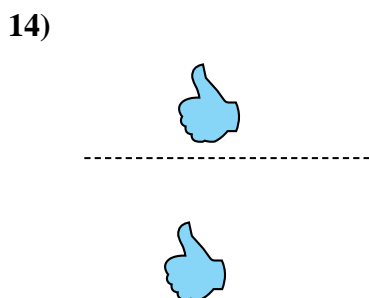
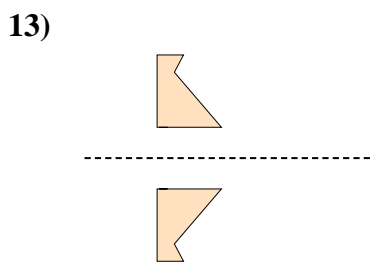
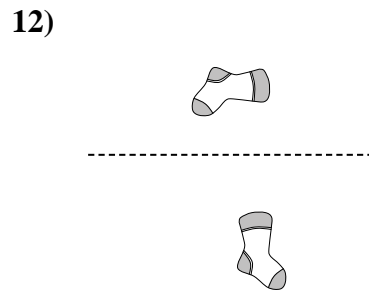
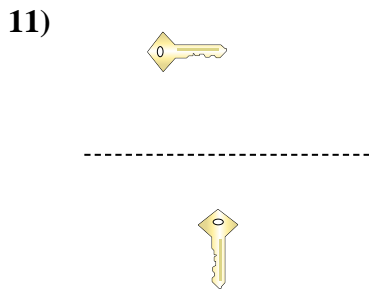
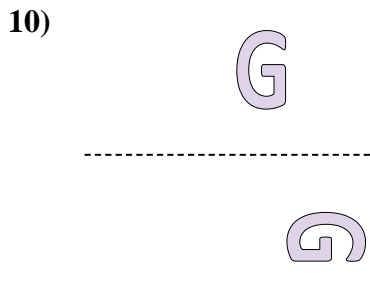
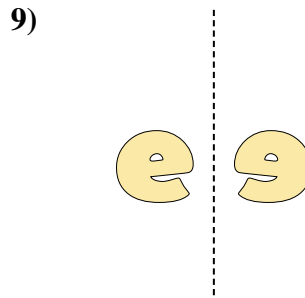
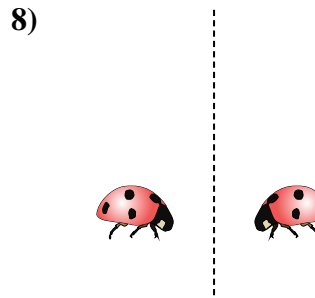
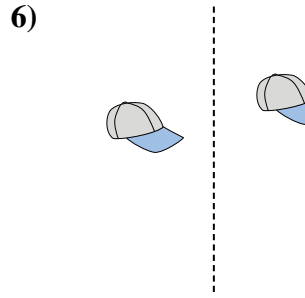
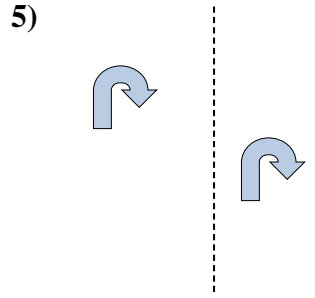

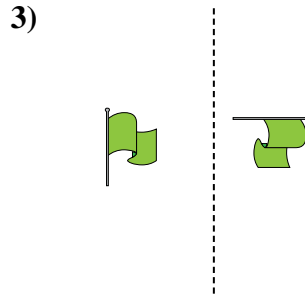
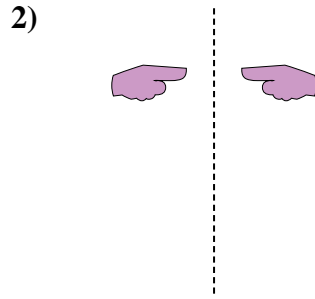

14. _____

15. _____



Stelle fest, ob eine Form-Verschiebung, Form-Drehung oder Form-Spiegelung vorliegt.

Antworten



1. Drehung

2. Spiegelung

3. Drehung

4. Spiegelung

5. Verschiebung

6. Verschiebung

7. Verschiebung

8. Spiegelung

9. Spiegelung

10. Drehung

11. Drehung

12. Drehung

13. Spiegelung

14. Verschiebung

15. Verschiebung