




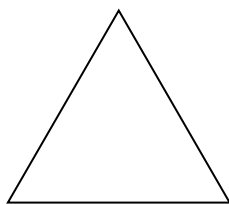
Stelle fest, ob die gezeigte Form regelmäßig oder unregelmäßig ist.

**Antworten**

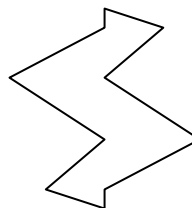
1)



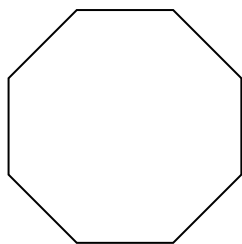
2)



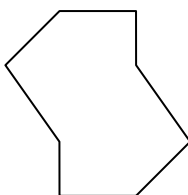
3)




4)



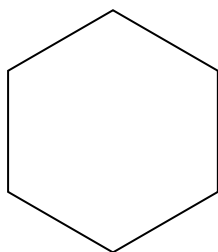
5)



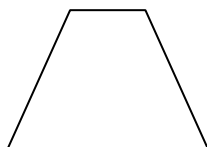
6)




7)



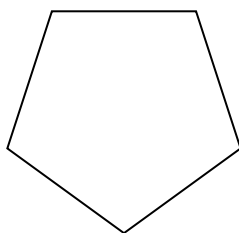
8)



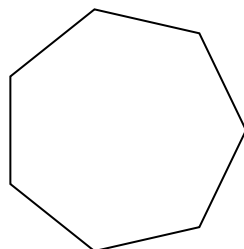
9)




10)



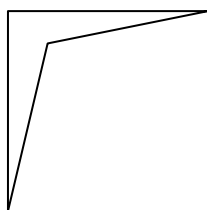
11)



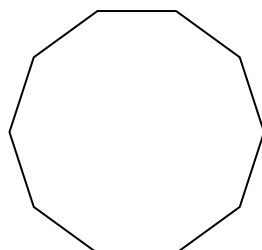
12)



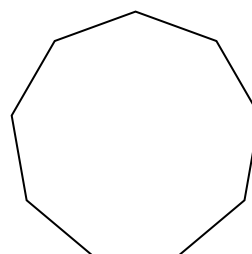
13)



14)



15)




1. \_\_\_\_\_
2. \_\_\_\_\_
3. \_\_\_\_\_
4. \_\_\_\_\_
5. \_\_\_\_\_
6. \_\_\_\_\_
7. \_\_\_\_\_
8. \_\_\_\_\_
9. \_\_\_\_\_
10. \_\_\_\_\_
11. \_\_\_\_\_
12. \_\_\_\_\_
13. \_\_\_\_\_
14. \_\_\_\_\_
15. \_\_\_\_\_

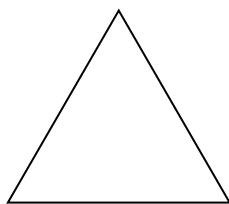


Stelle fest, ob die gezeigte Form regelmäßig oder unregelmäßig ist.

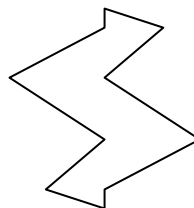
1)



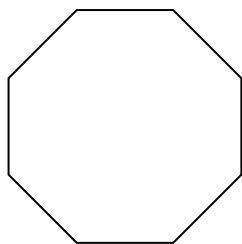
2)



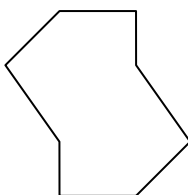
3)




4)



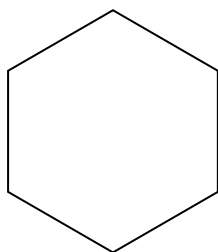
5)



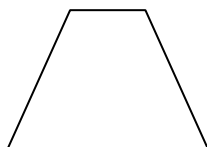
6)




7)



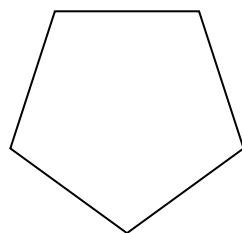
8)



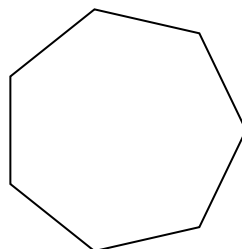
9)




10)



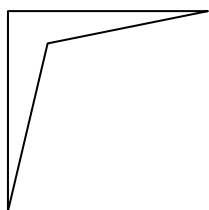
11)



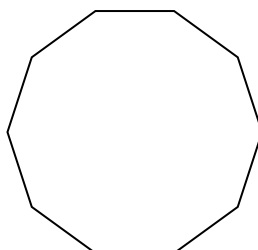
12)



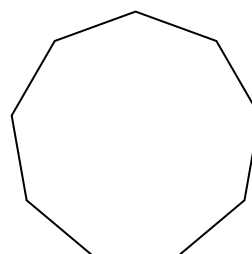
13)



14)



15)

**Antworten**1. **Unregelmäßig**2. **Regelmäßig**3. **Unregelmäßig**4. **Regelmäßig**5. **Unregelmäßig**6. **Regelmäßig**7. **Regelmäßig**8. **Unregelmäßig**9. **Unregelmäßig**10. **Regelmäßig**11. **Regelmäßig**12. **Unregelmäßig**13. **Unregelmäßig**14. **Regelmäßig**15. **Regelmäßig**