



Bestimmen Sie, ob jedes Dreieck spitz (A), stumpf (O) oder rechts (R) ist und ob es gleichseitig (E), gleichschenkelig (I) oder skalenförmig (S) ist.

Acute Triangle:

All angles are less than 90° .

Obtuse Triangle:

One angle is greater than 90° .

Right Triangle:

One angle is 90° .

Equilateral Triangle:

3 equal sides. 3 equal angles.

Isosceles Triangle:

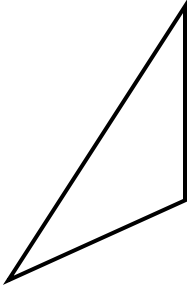
2 equal sides. 2 equal angles.

Scalene Triangle:

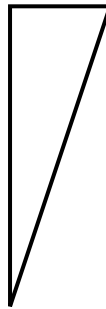
No equal sides. No equal angles.

Antworten

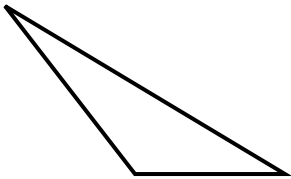
1)



2)



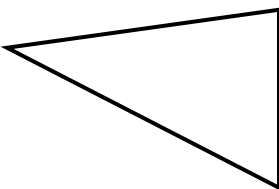
3)



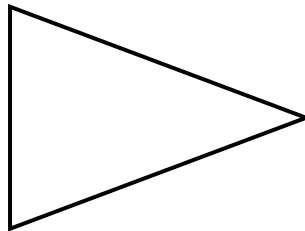
4)



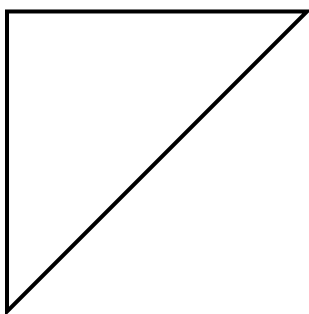
5)



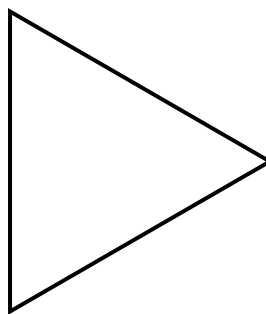
6)



7)



8)



1. _____
2. _____
3. _____
4. _____
5. _____
6. _____
7. _____
8. _____



Bestimmen Sie, ob jedes Dreieck spitz (A), stumpf (O) oder rechts (R) ist und ob es gleichseitig (E), gleichschenkelig (I) oder skalenförmig (S) ist.

Acute Triangle:

All angles are less than 90° .

Obtuse Triangle:

One angle is greater than 90° .

Right Triangle:

One angle is 90° .

Equilateral Triangle:

3 equal sides. 3 equal angles.

Isosceles Triangle:

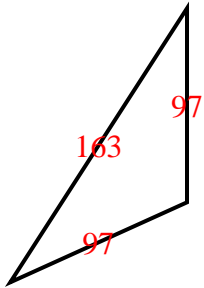
2 equal sides. 2 equal angles.

Scalene Triangle:

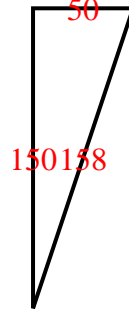
No equal sides. No equal angles.

Antworten

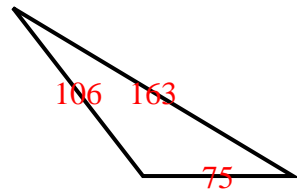
1)



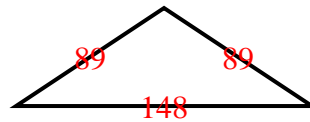
2)



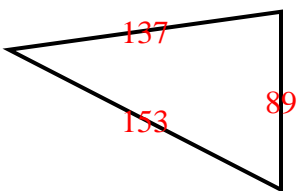
3)



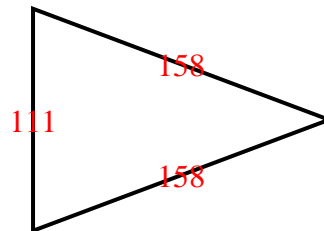
4)



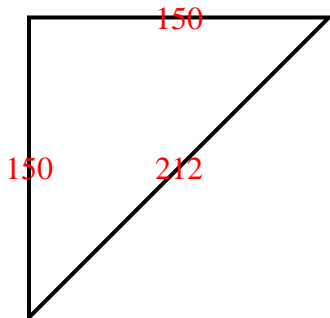
5)



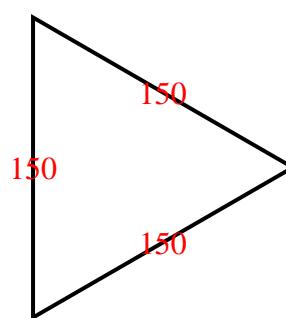
6)



7)



8)



1. **O I**
2. **R S**
3. **O S**
4. **O I**
5. **A S**
6. **A I**
7. **R I**
8. **A E**