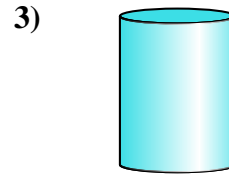
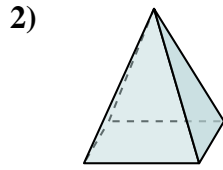
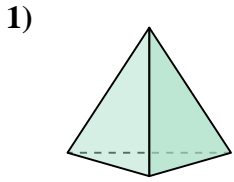




Bestimme, welche Auswahlmöglichkeit AM BESTEN den gezeigten Körper darstellt.

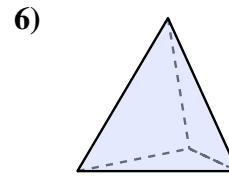
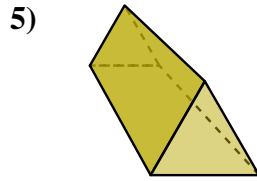
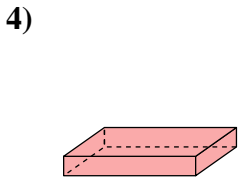
Antworten



- 1) A. triangular pyramid
- B. sphere
- C. cylinder
- D. rectangular pyramid

- 2) A. triangular pyramid
- B. cone
- C. cube
- D. rectangular pyramid

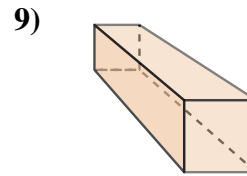
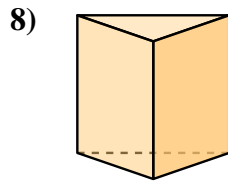
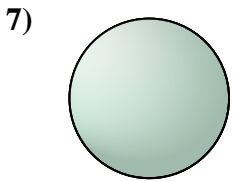
- 3) A. rectangular pyramid
- B. rectangular prism
- C. cylinder
- D. sphere



- 4) A. rectangular prism
- B. rectangular pyramid
- C. triangular pyramid
- D. cone

- 5) A. rectangular pyramid
- B. rectangular prism
- C. triangular prism
- D. triangular pyramid

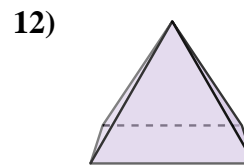
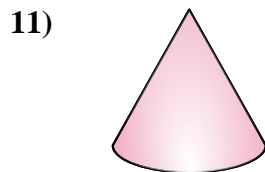
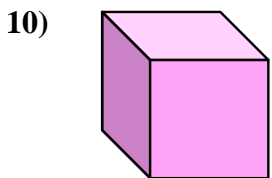
- 6) A. triangular pyramid
- B. rectangular prism
- C. triangular prism
- D. cube



- 7) A. triangular prism
- B. rectangular prism
- C. sphere
- D. cube

- 8) A. cone
- B. triangular prism
- C. cube
- D. rectangular prism

- 9) A. cylinder
- B. sphere
- C. rectangular prism
- D. rectangular pyramid



- 10) A. rectangular pyramid
- B. cube
- C. triangular prism
- D. cone

- 11) A. rectangular pyramid
- B. sphere
- C. triangular prism
- D. cone

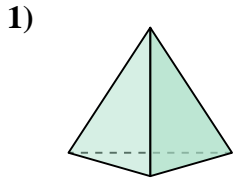
- 12) A. triangular prism
- B. triangular pyramid
- C. cube
- D. rectangular pyramid

- 1. \_\_\_\_\_
- 2. \_\_\_\_\_
- 3. \_\_\_\_\_
- 4. \_\_\_\_\_
- 5. \_\_\_\_\_
- 6. \_\_\_\_\_
- 7. \_\_\_\_\_
- 8. \_\_\_\_\_
- 9. \_\_\_\_\_
- 10. \_\_\_\_\_
- 11. \_\_\_\_\_
- 12. \_\_\_\_\_

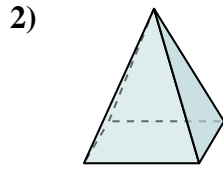


Bestimme, welche Auswahlmöglichkeit AM BESTEN den gezeigten Körper darstellt.

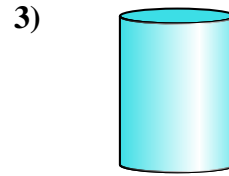
**Antworten**



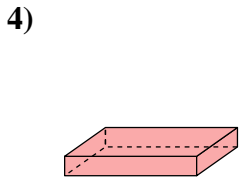
- A. triangular pyramid
- B. sphere
- C. cylinder
- D. rectangular pyramid



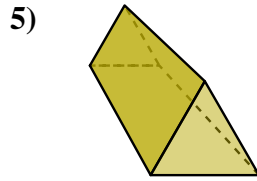
- A. triangular pyramid
- B. cone
- C. cube
- D. rectangular pyramid



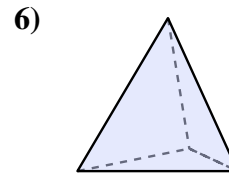
- A. rectangular pyramid
- B. rectangular prism
- C. cylinder
- D. sphere



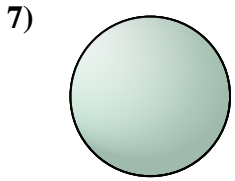
- A. rectangular prism
- B. rectangular pyramid
- C. triangular pyramid
- D. cone



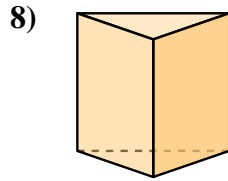
- A. rectangular pyramid
- B. rectangular prism
- C. triangular prism
- D. triangular pyramid



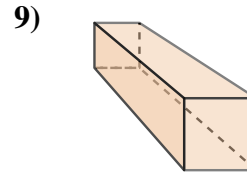
- A. triangular pyramid
- B. rectangular prism
- C. triangular prism
- D. cube



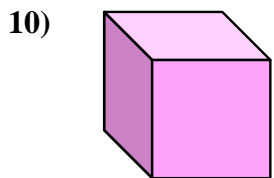
- A. triangular prism
- B. rectangular prism
- C. sphere
- D. cube



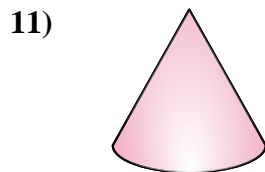
- A. cone
- B. triangular prism
- C. cube
- D. rectangular prism



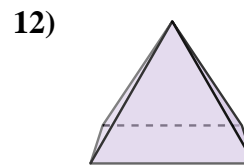
- A. cylinder
- B. sphere
- C. rectangular prism
- D. rectangular pyramid



- A. rectangular pyramid
- B. cube
- C. triangular prism
- D. cone



- A. rectangular pyramid
- B. sphere
- C. triangular prism
- D. cone



- A. triangular prism
- B. triangular pyramid
- C. cube
- D. rectangular pyramid

- 1.   **A**
- 2.   **D**
- 3.   **C**
- 4.   **A**
- 5.   **C**
- 6.   **A**
- 7.   **C**
- 8.   **B**
- 9.   **C**
- 10.   **B**
- 11.   **D**
- 12.   **D**