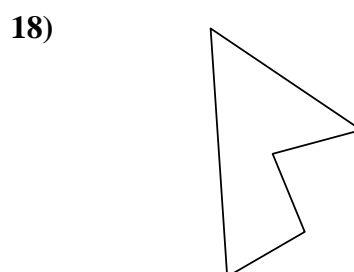
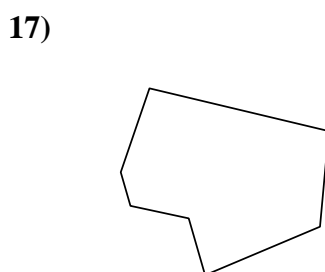
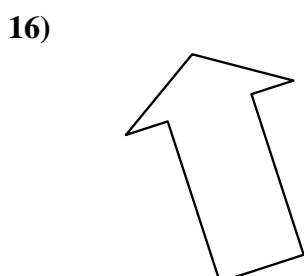
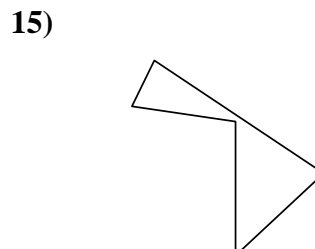
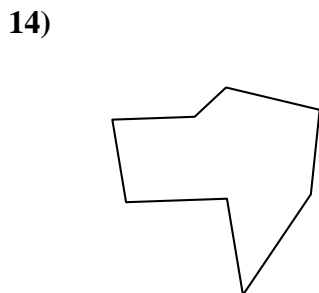
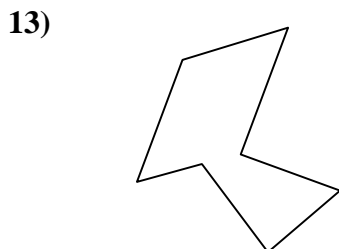
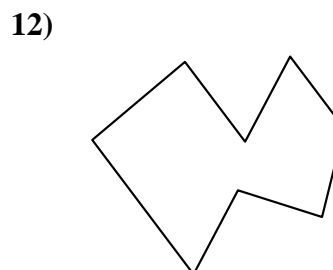
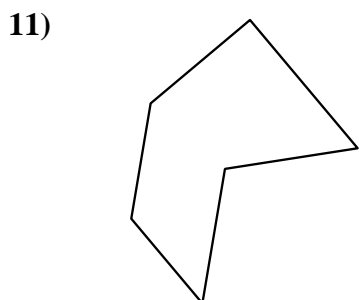
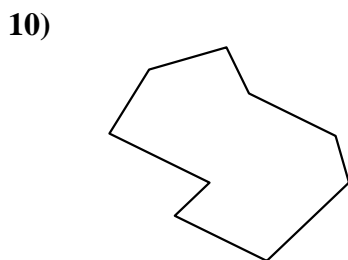
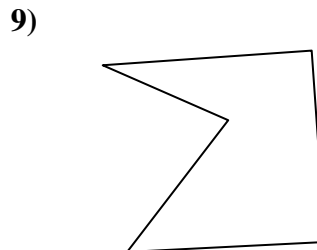
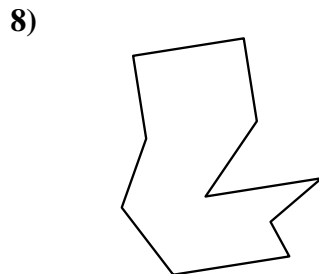
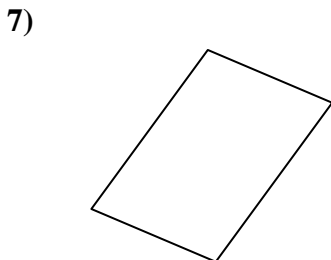
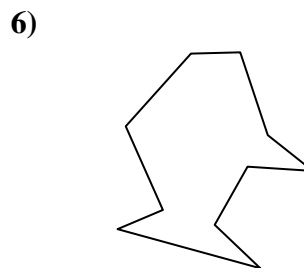
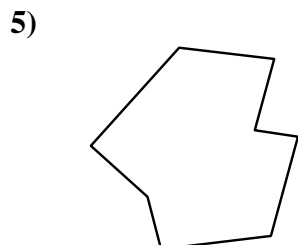
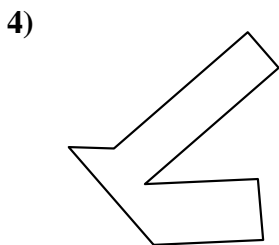
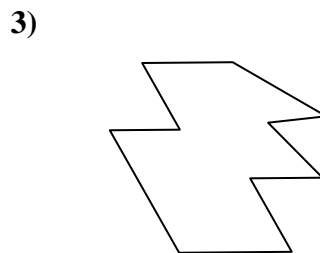
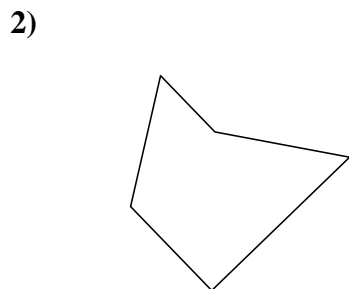
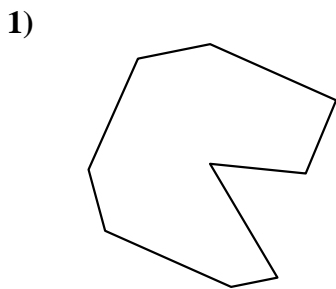




Identifiziere jede gezeigte Form.

**Antworten**



1. \_\_\_\_\_

2. \_\_\_\_\_

3. \_\_\_\_\_

4. \_\_\_\_\_

5. \_\_\_\_\_

6. \_\_\_\_\_

7. \_\_\_\_\_

8. \_\_\_\_\_

9. \_\_\_\_\_

10. \_\_\_\_\_

11. \_\_\_\_\_

12. \_\_\_\_\_

13. \_\_\_\_\_

14. \_\_\_\_\_

15. \_\_\_\_\_

16. \_\_\_\_\_

17. \_\_\_\_\_

18. \_\_\_\_\_

19. \_\_\_\_\_

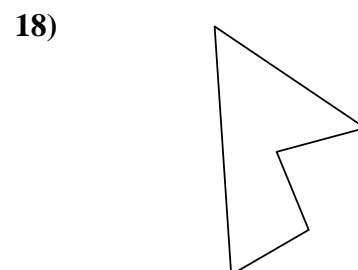
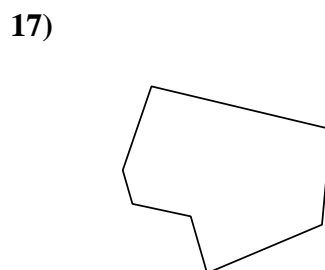
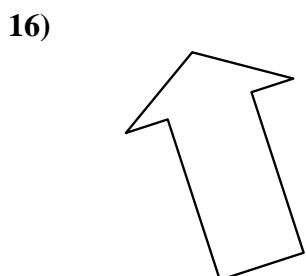
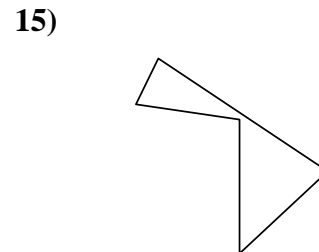
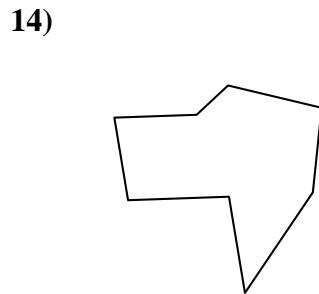
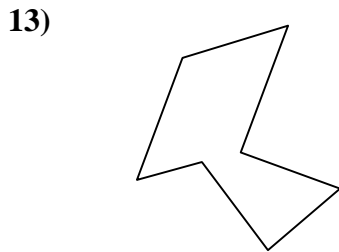
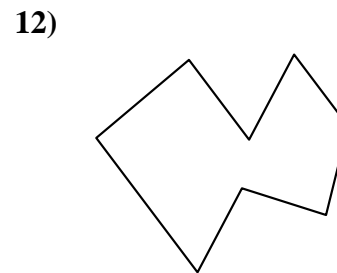
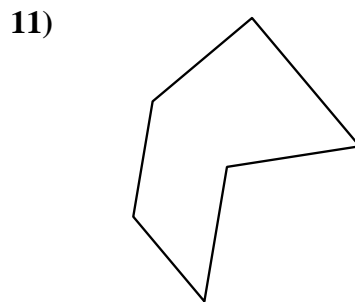
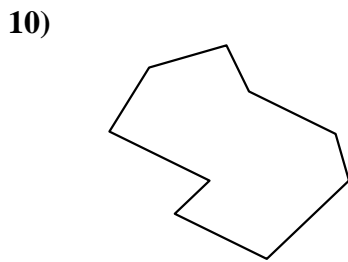
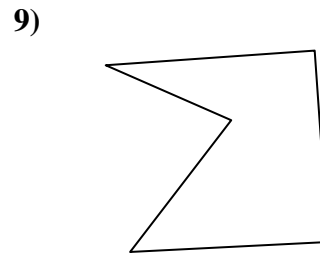
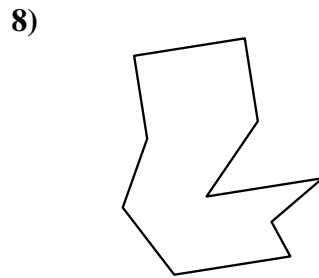
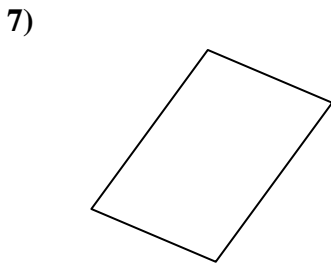
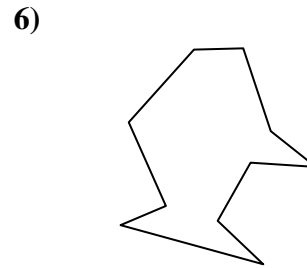
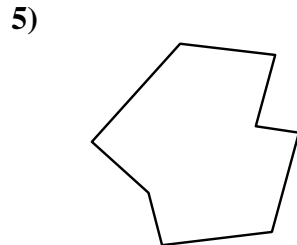
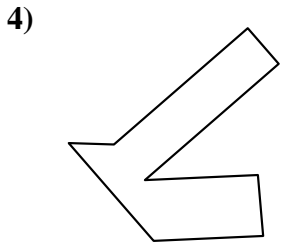
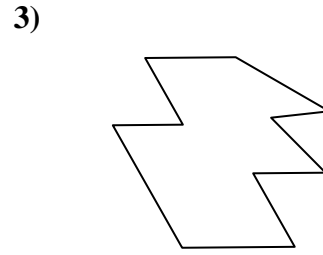
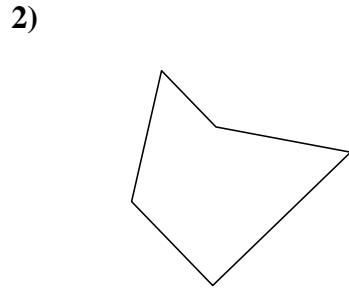
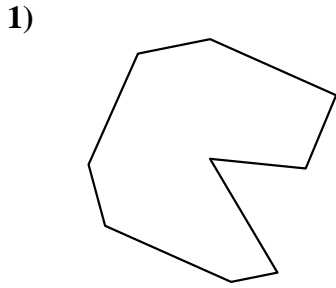
20. \_\_\_\_\_

21. \_\_\_\_\_



Identifiziere jede gezeigte Form.

**Antworten**



1. Neuneck

2. Fünfeck

3. Zehneck

4. Achteck

5. Achteck

6. Zehneck

7. Viereck

8. Zehneck

9. Fünfeck

10. Neuneck

11. Sechseck

12. Achteck

13. Siebeneck

14. Achteck

15. Fünfeck

16. Siebeneck

17. Siebeneck

18. Fünfeck

19. Neuneck

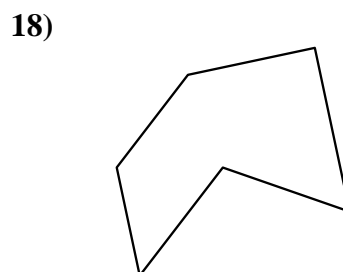
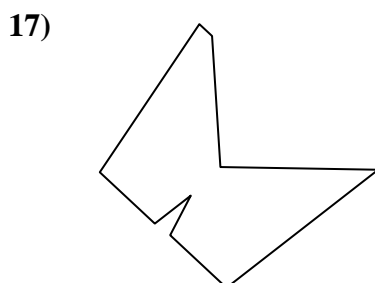

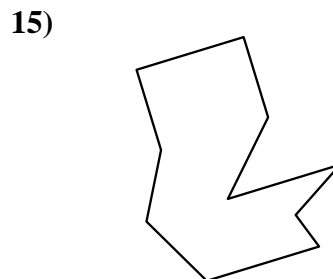
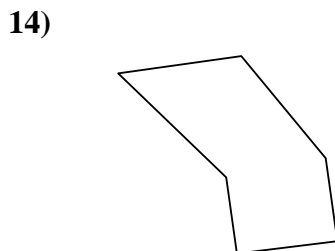
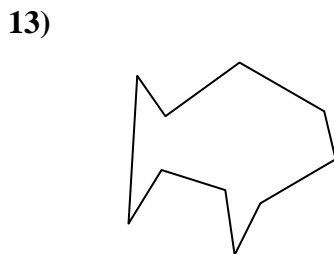
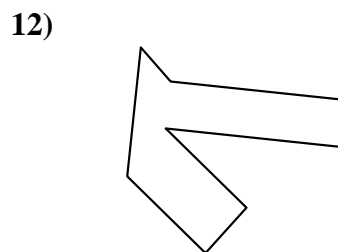
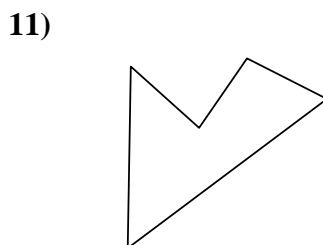
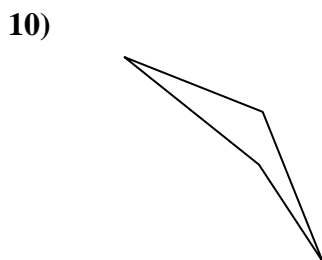
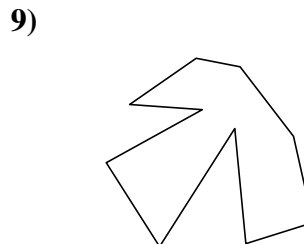
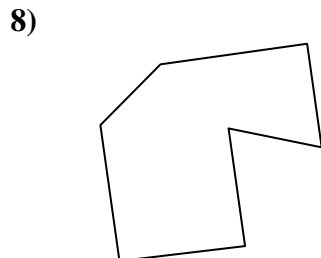
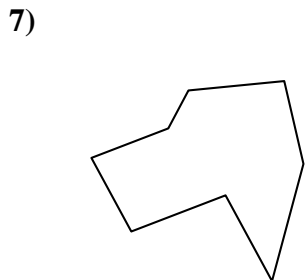
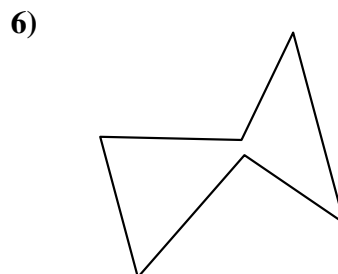
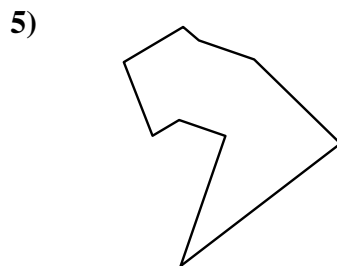
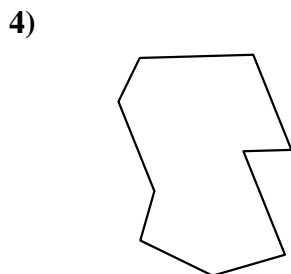
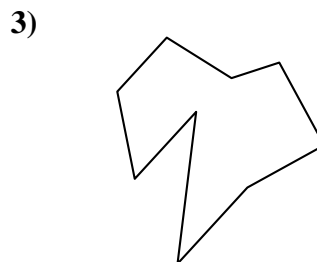
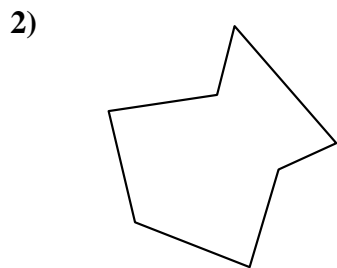
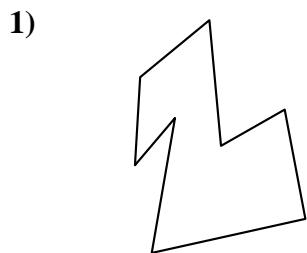
20. Neuneck

21. Fünfeck



Identifiziere jede gezeigte Form.

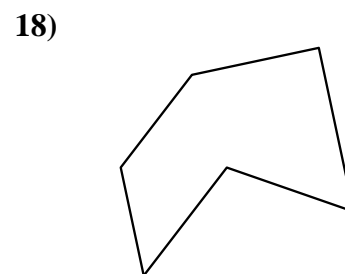
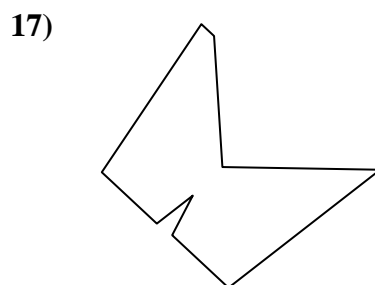
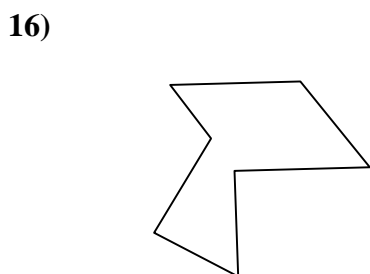
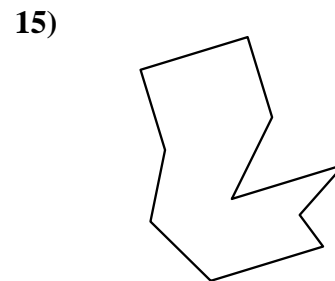
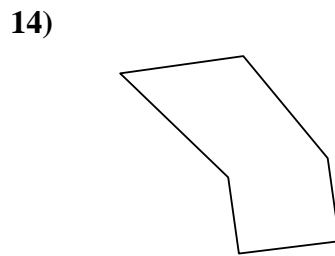
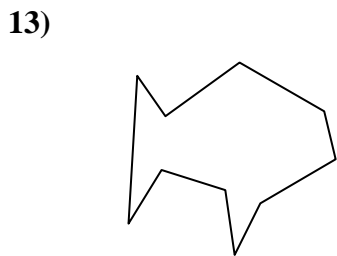
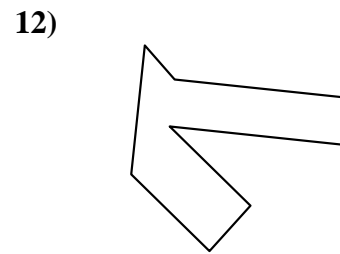
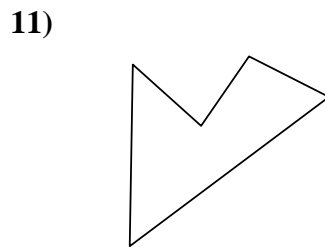
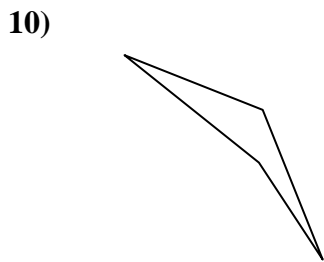
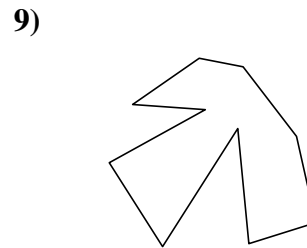
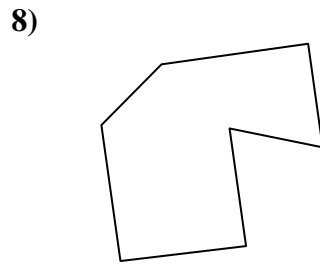
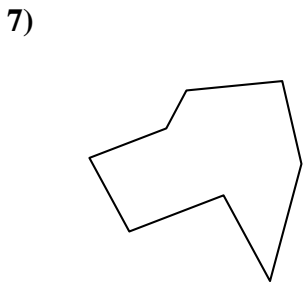
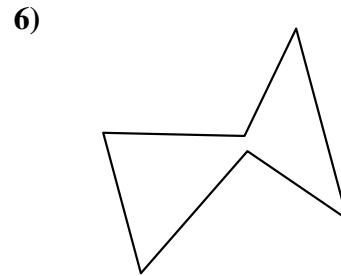
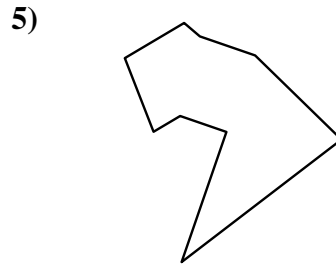
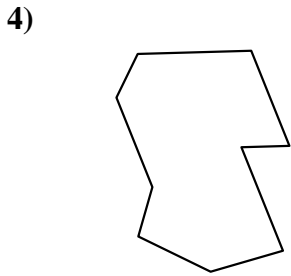
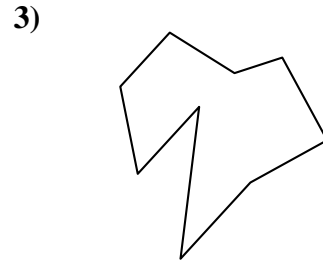
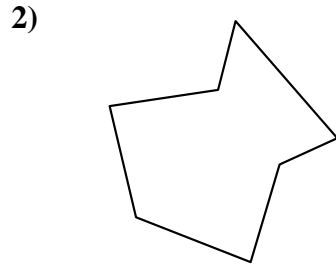
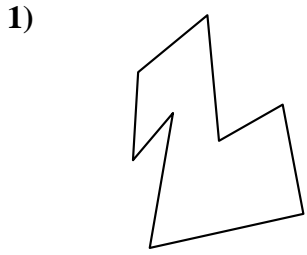
**Antworten**



- 1. \_\_\_\_\_
- 2. \_\_\_\_\_
- 3. \_\_\_\_\_
- 4. \_\_\_\_\_
- 5. \_\_\_\_\_
- 6. \_\_\_\_\_
- 7. \_\_\_\_\_
- 8. \_\_\_\_\_
- 9. \_\_\_\_\_
- 10. \_\_\_\_\_
- 11. \_\_\_\_\_
- 12. \_\_\_\_\_
- 13. \_\_\_\_\_
- 14. \_\_\_\_\_
- 15. \_\_\_\_\_
- 16. \_\_\_\_\_
- 17. \_\_\_\_\_
- 18. \_\_\_\_\_
- 19. \_\_\_\_\_
- 20. \_\_\_\_\_
- 21. \_\_\_\_\_



Identifiziere jede gezeigte Form.



**Antworten**

1. Achteck

2. Siebeneck

3. Neuneck

4. Neuneck

5. Neuneck

6. Sechseck

7. Achteck

8. Siebeneck

9. Zehneck

10. Viereck

11. Fünfeck

12. Achteck

13. Zehneck

14. Sechseck

15. Zehneck

16. Siebeneck

17. Neuneck

18. Sechseck

19. Siebeneck

20. Sechseck

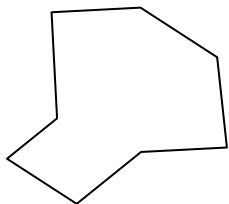
21. Viereck



Identifiziere jede gezeigte Form.

**Antworten**

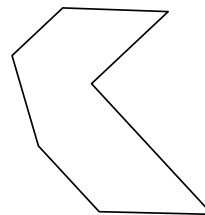
1)



2)




3)

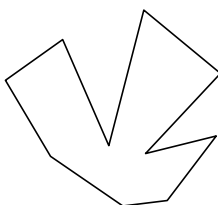


1. \_\_\_\_\_

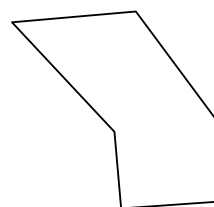
4)



5)

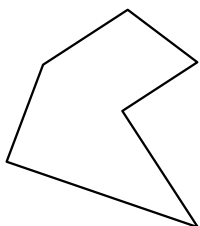


6)

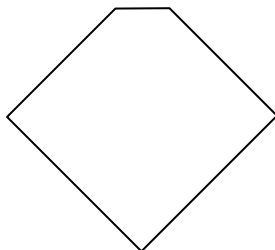


2. \_\_\_\_\_

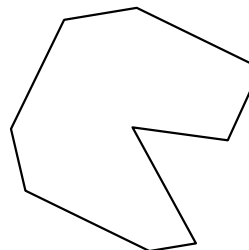
7)



8)

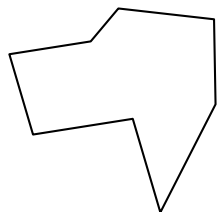


9)

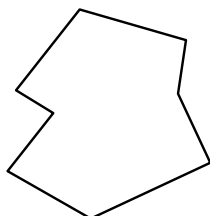


3. \_\_\_\_\_

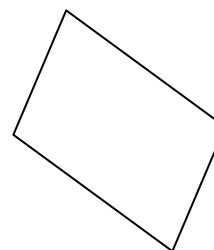
10)



11)

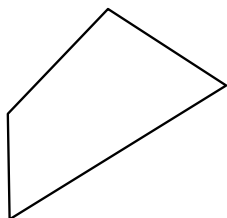


12)




4. \_\_\_\_\_

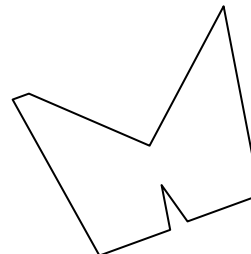
13)



14)

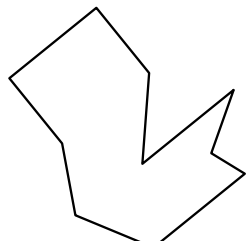


15)




5. \_\_\_\_\_

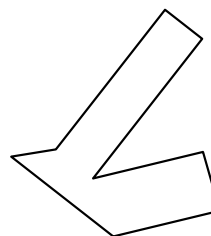
16)



17)



18)



6. \_\_\_\_\_

7. \_\_\_\_\_

8. \_\_\_\_\_

9. \_\_\_\_\_

10. \_\_\_\_\_

11. \_\_\_\_\_

12. \_\_\_\_\_

13. \_\_\_\_\_

14. \_\_\_\_\_

15. \_\_\_\_\_

16. \_\_\_\_\_

17. \_\_\_\_\_

18. \_\_\_\_\_

19. \_\_\_\_\_

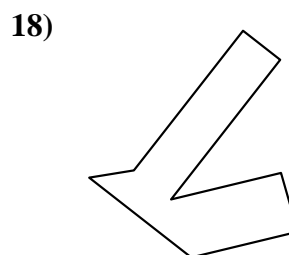
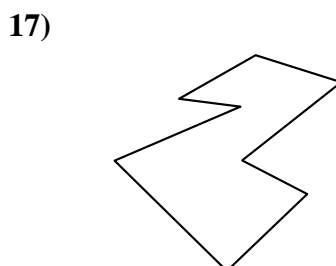
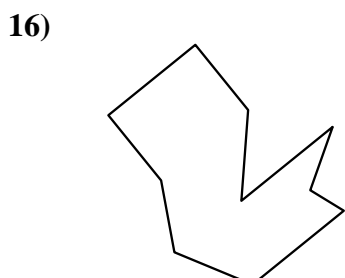
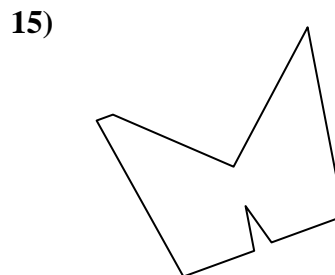

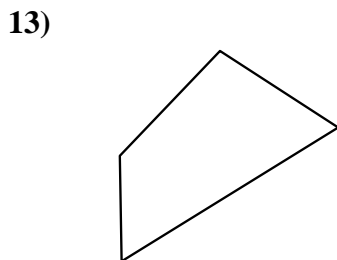
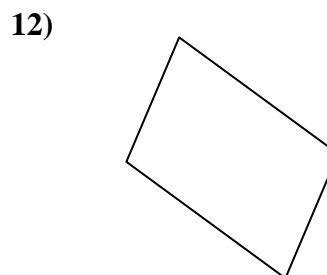
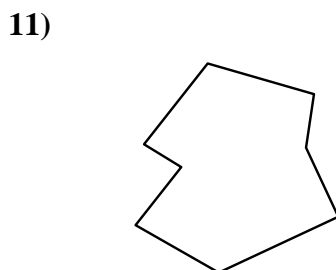
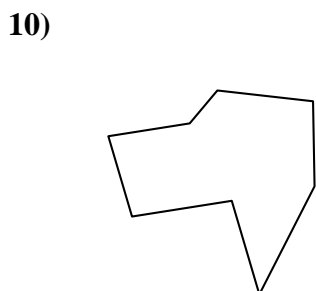
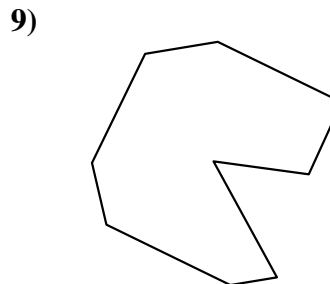
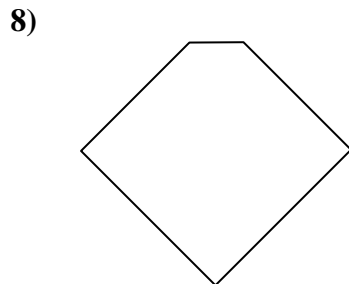
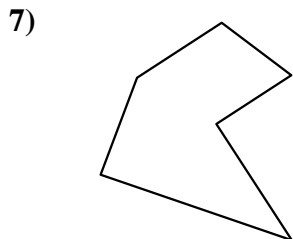
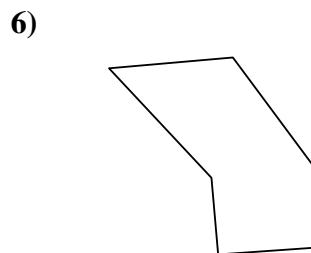
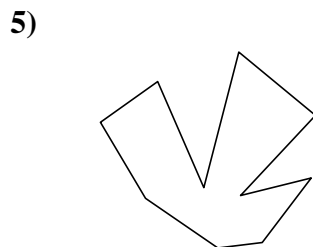
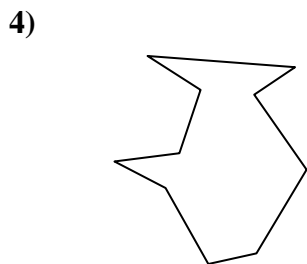
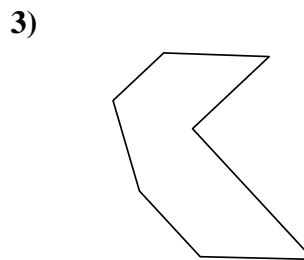
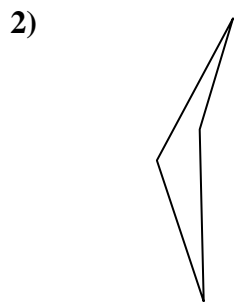
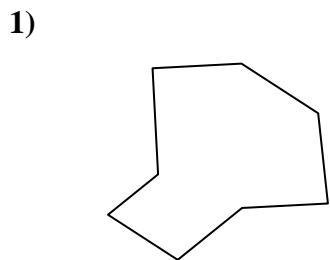
20. \_\_\_\_\_

21. \_\_\_\_\_



Identifiziere jede gezeigte Form.

**Antworten**



1. Achteck

2. Viereck

3. Siebeneck

4. Zehneck

5. Zehneck

6. Sechseck

7. Sechseck

8. Fünfeck

9. Neuneck

10. Achteck

11. Achteck

12. Viereck

13. Viereck

14. Achteck

15. Neuneck

16. Zehneck

17. Achteck

18. Achteck

19. Viereck

20. Siebeneck

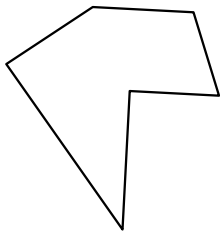
21. Neuneck




Identifiziere jede gezeigte Form.

**Antworten**

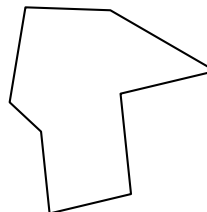
1)



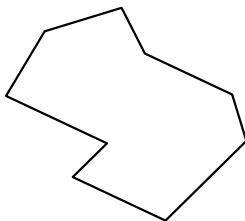
2)



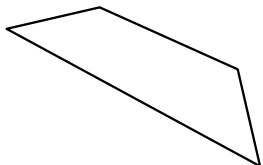
3)



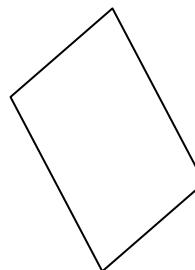
4)




5)



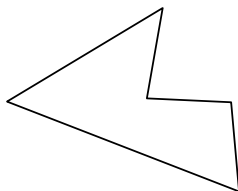
6)




7)



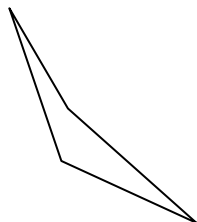
8)



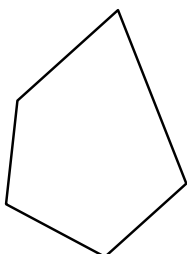
9)



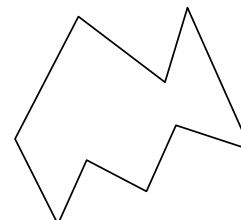
10)



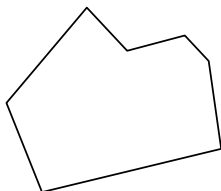
11)



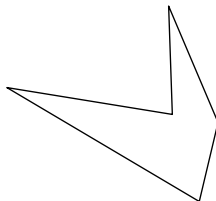
12)



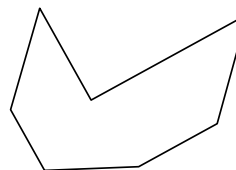
13)



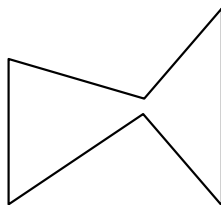
14)



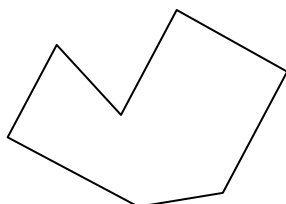
15)



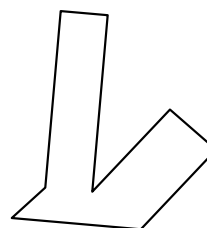
16)



17)



18)



1. \_\_\_\_\_

2. \_\_\_\_\_

3. \_\_\_\_\_

4. \_\_\_\_\_

5. \_\_\_\_\_

6. \_\_\_\_\_

7. \_\_\_\_\_

8. \_\_\_\_\_

9. \_\_\_\_\_

10. \_\_\_\_\_

11. \_\_\_\_\_

12. \_\_\_\_\_

13. \_\_\_\_\_

14. \_\_\_\_\_

15. \_\_\_\_\_

16. \_\_\_\_\_

17. \_\_\_\_\_

18. \_\_\_\_\_

19. \_\_\_\_\_

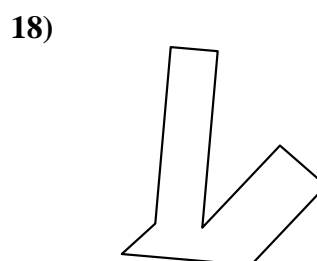
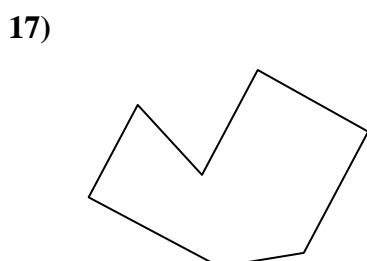
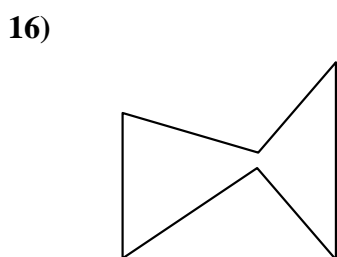
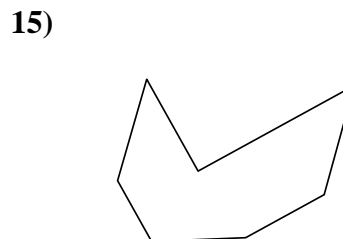
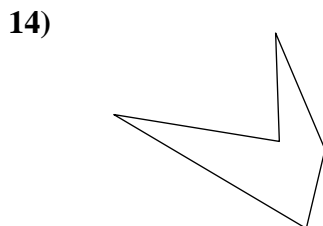
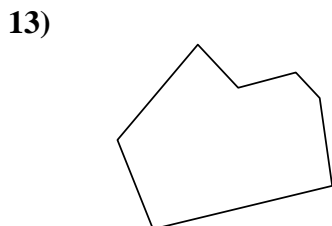
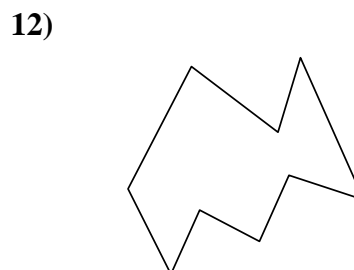
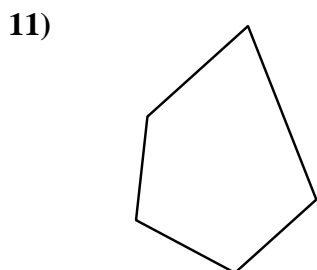
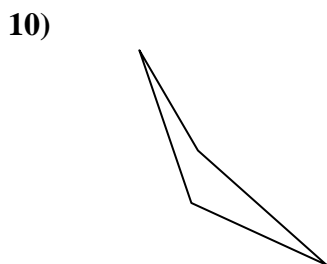
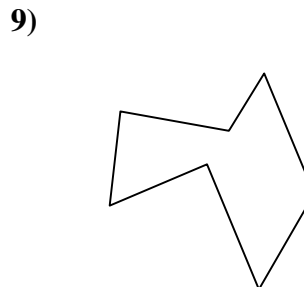
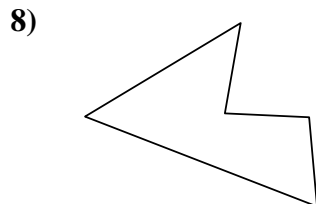
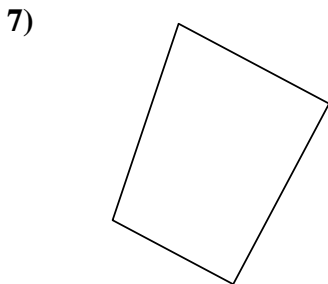
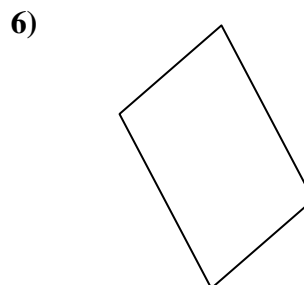
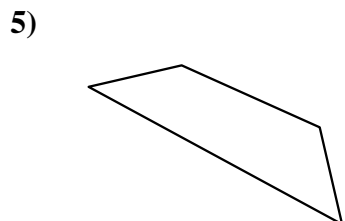
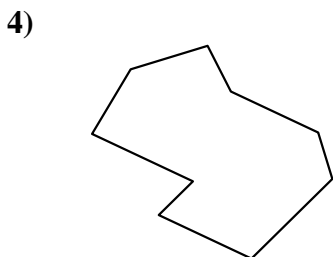
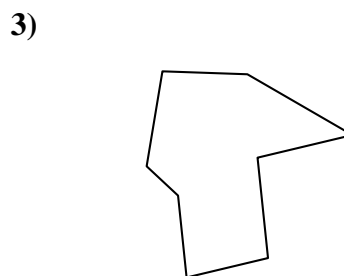
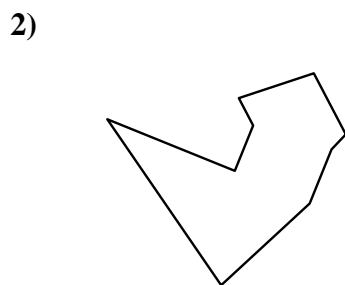
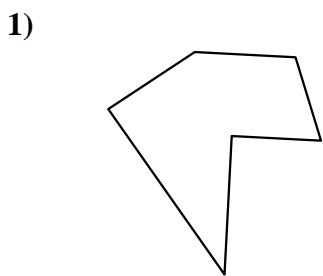
20. \_\_\_\_\_

21. \_\_\_\_\_



Identifiziere jede gezeigte Form.

Antworten



1. Sechseck

2. Neuneck

3. Achteck

4. Neuneck

5. Viereck

6. Viereck

7. Viereck

8. Fünfeck

9. Siebeneck

10. Viereck

11. Fünfeck

12. Neuneck

13. Siebeneck

14. Fünfeck

15. Siebeneck

16. Sechseck

17. Siebeneck

18. Achteck

19. Achteck

20. Siebeneck

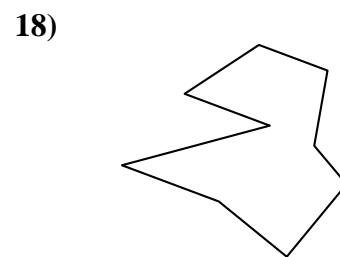

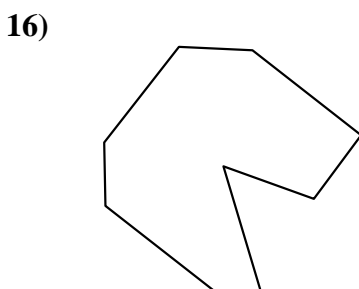
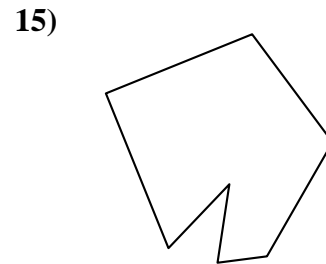
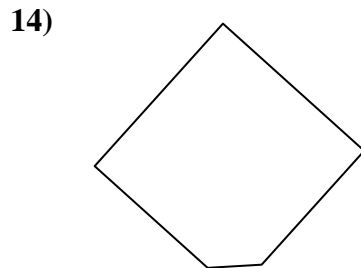
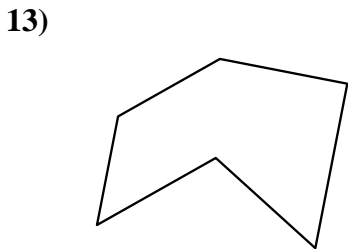
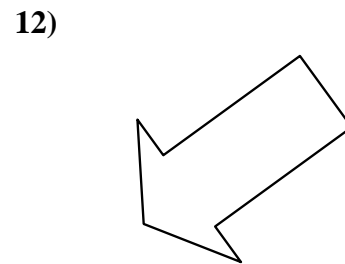
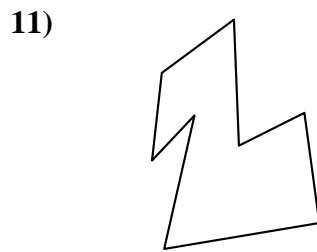
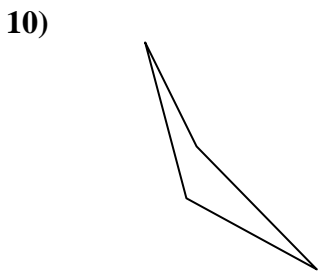
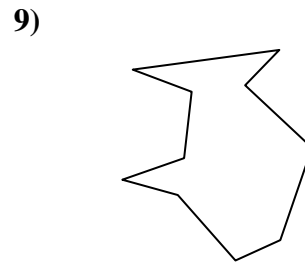
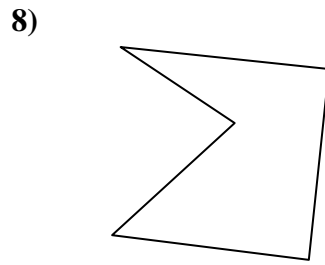
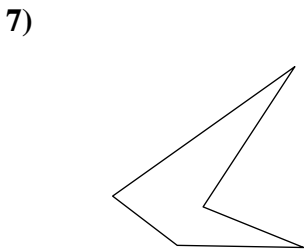
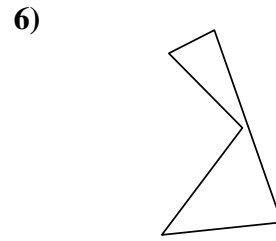
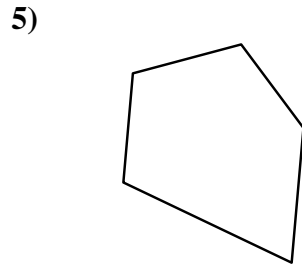
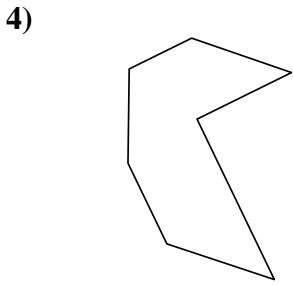
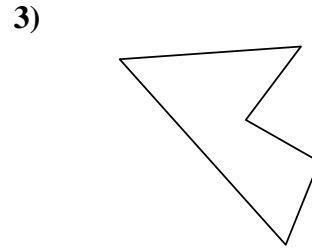
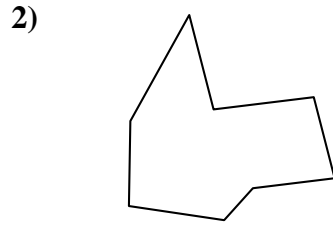
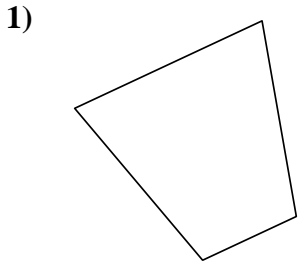
21. Achteck





Identifiziere jede gezeigte Form.

**Antworten**

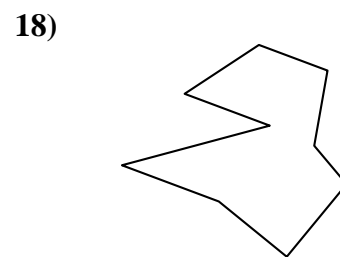

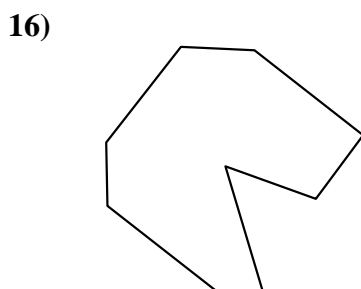
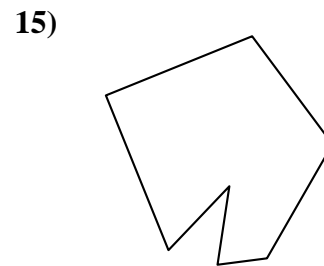
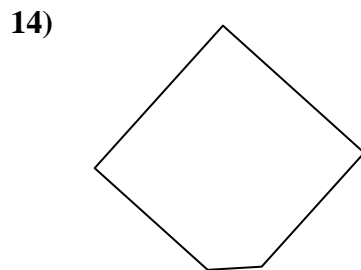
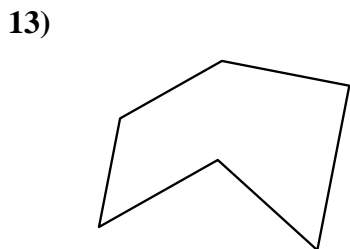
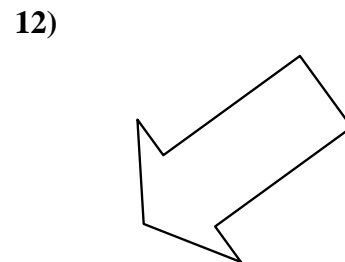
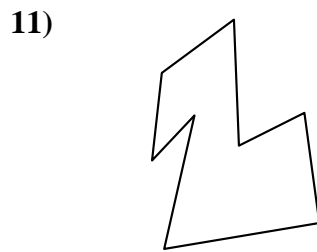
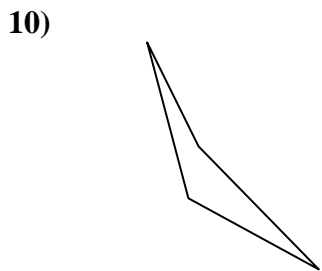
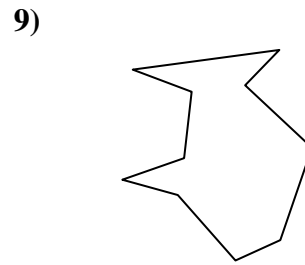
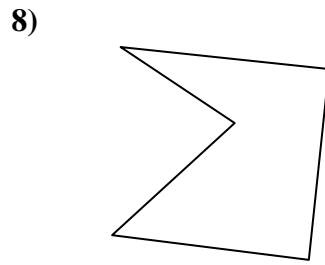
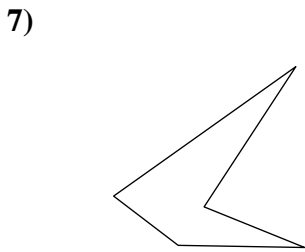
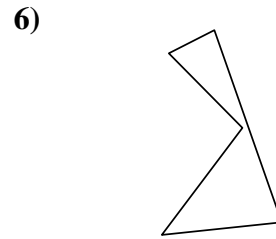
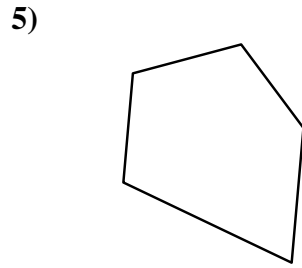
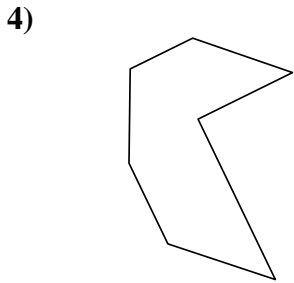
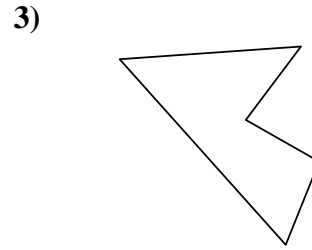
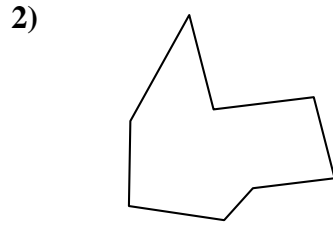
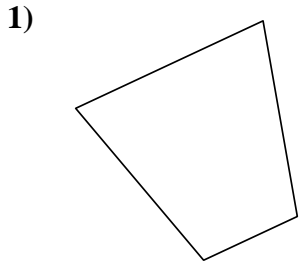


- 1. \_\_\_\_\_
- 2. \_\_\_\_\_
- 3. \_\_\_\_\_
- 4. \_\_\_\_\_
- 5. \_\_\_\_\_
- 6. \_\_\_\_\_
- 7. \_\_\_\_\_
- 8. \_\_\_\_\_
- 9. \_\_\_\_\_
- 10. \_\_\_\_\_
- 11. \_\_\_\_\_
- 12. \_\_\_\_\_
- 13. \_\_\_\_\_
- 14. \_\_\_\_\_
- 15. \_\_\_\_\_
- 16. \_\_\_\_\_
- 17. \_\_\_\_\_
- 18. \_\_\_\_\_
- 19. \_\_\_\_\_
- 20. \_\_\_\_\_
- 21. \_\_\_\_\_



Identifiziere jede gezeigte Form.

**Antworten**



1. Viereck

2. Achteck

3. Fünfeck

4. Siebeneck

5. Fünfeck

6. Fünfeck

7. Fünfeck

8. Fünfeck

9. Zehneck

10. Viereck

11. Achteck

12. Siebeneck

13. Sechseck

14. Fünfeck

15. Siebeneck

16. Neuneck

17. Sechseck

18. Neuneck

19. Zehneck

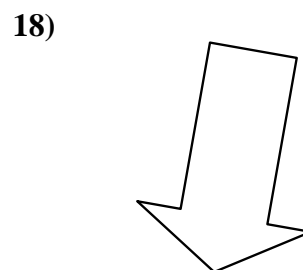
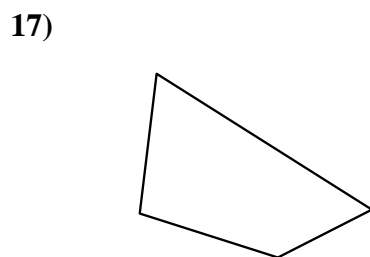
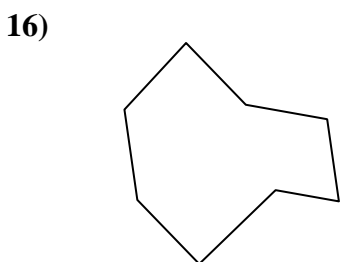
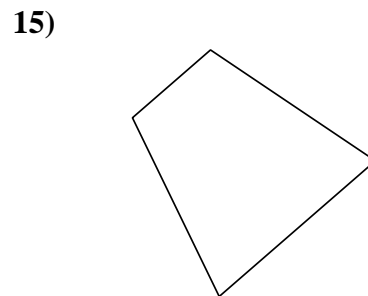
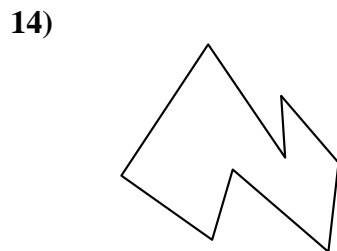
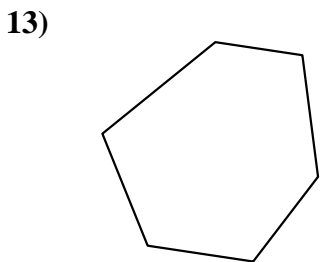
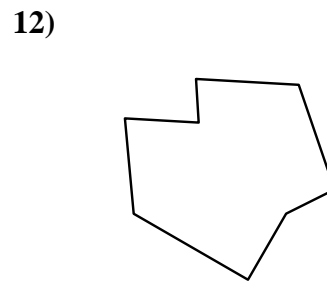
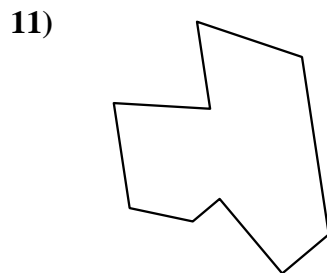
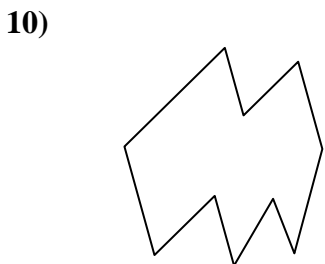
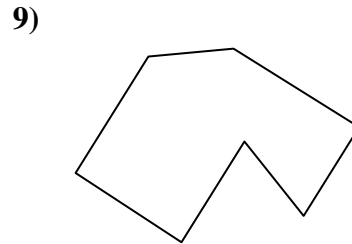

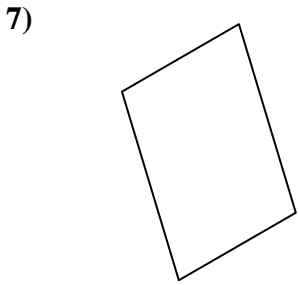
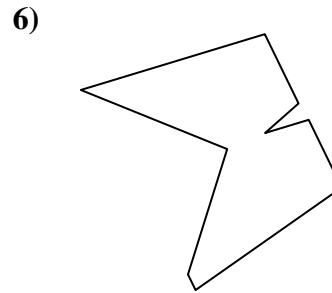
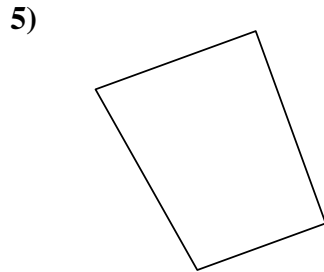
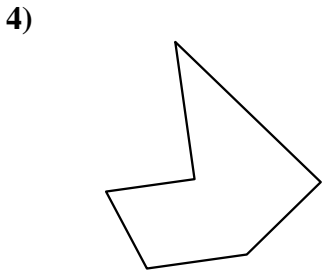
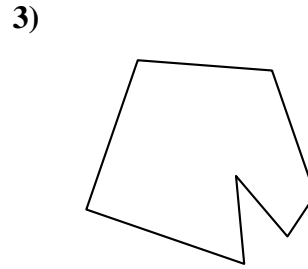
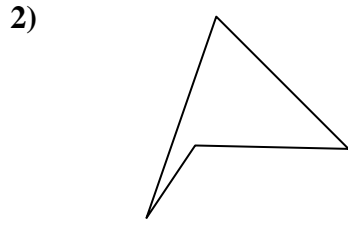
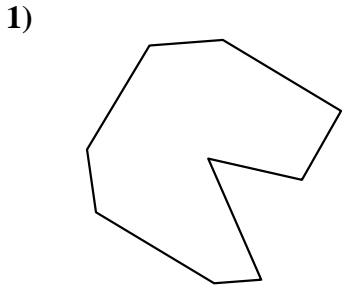
20. Viereck

21. Neuneck



Identifiziere jede gezeigte Form.

**Antworten**



1. \_\_\_\_\_

2. \_\_\_\_\_

3. \_\_\_\_\_

4. \_\_\_\_\_

5. \_\_\_\_\_

6. \_\_\_\_\_

7. \_\_\_\_\_

8. \_\_\_\_\_

9. \_\_\_\_\_

10. \_\_\_\_\_

11. \_\_\_\_\_

12. \_\_\_\_\_

13. \_\_\_\_\_

14. \_\_\_\_\_

15. \_\_\_\_\_

16. \_\_\_\_\_

17. \_\_\_\_\_

18. \_\_\_\_\_

19. \_\_\_\_\_

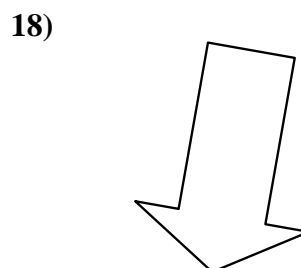
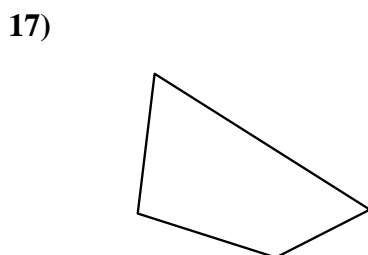
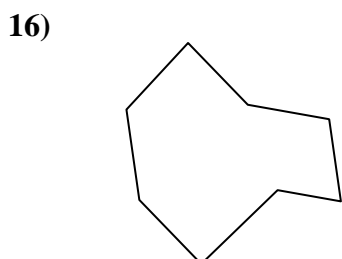
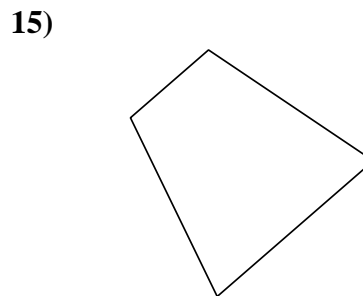
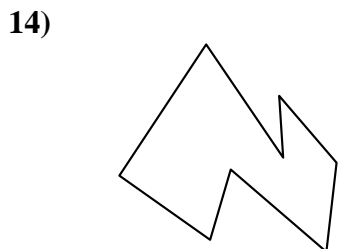
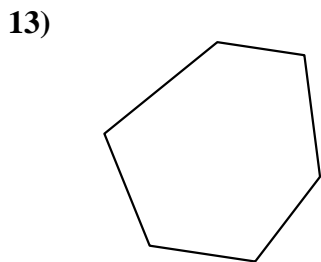
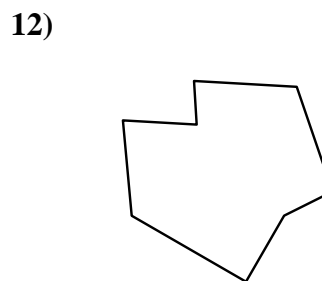
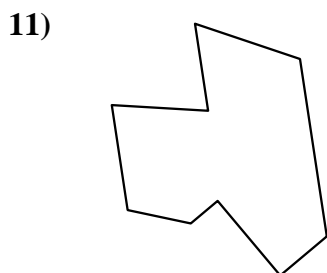
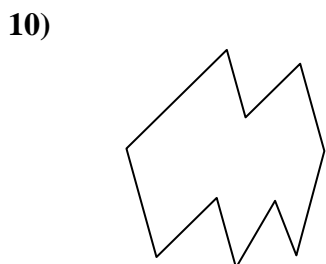
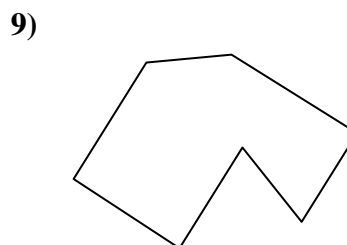

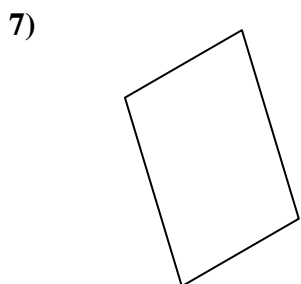
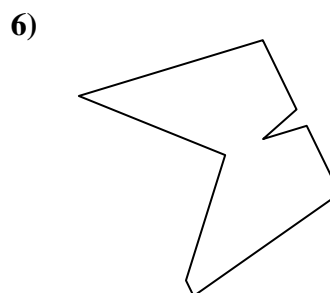
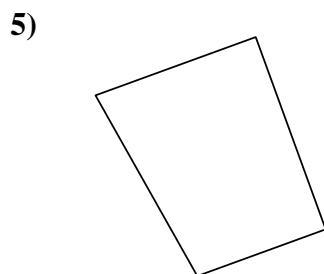
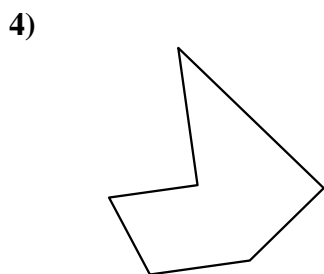
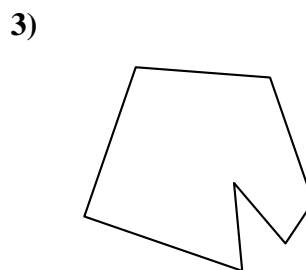
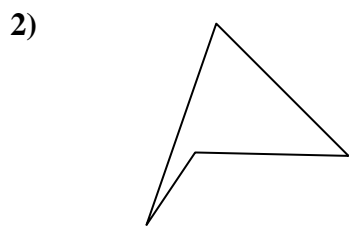
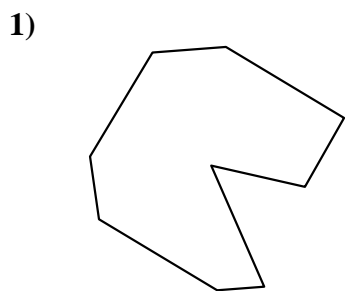
20. \_\_\_\_\_

21. \_\_\_\_\_



Identifiziere jede gezeigte Form.

**Antworten**



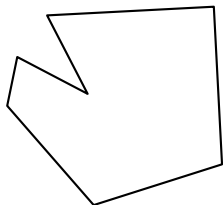
- 1. Neuneck
- 2. Viereck
- 3. Siebeneck
- 4. Sechseck
- 5. Viereck
- 6. Neuneck
- 7. Viereck
- 8. Neuneck
- 9. Siebeneck
- 10. Zehneck
- 11. Neuneck
- 12. Achteck
- 13. Sechseck
- 14. Achteck
- 15. Viereck
- 16. Achteck
- 17. Viereck
- 18. Siebeneck
- 19. Sechseck
- 20. Fünfeck
- 21. Zehneck



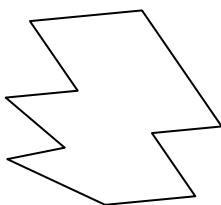
Identifiziere jede gezeigte Form.

**Antworten**

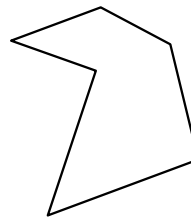
1)



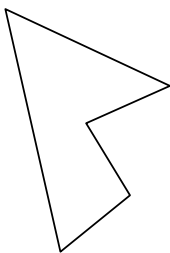
2)



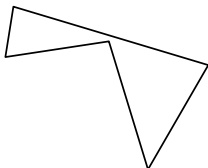
3)



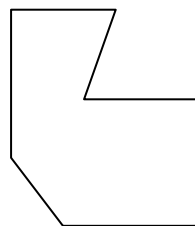
4)




5)



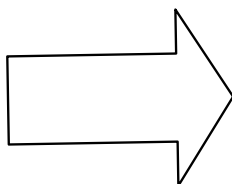
6)



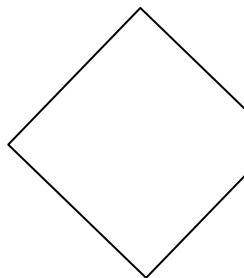
7)



8)



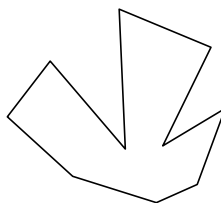
9)



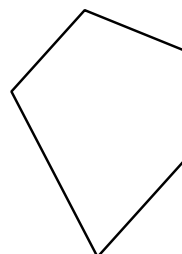
10)



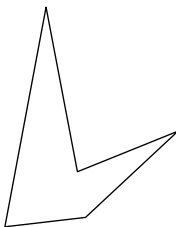
11)



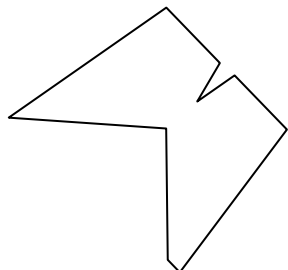
12)




13)



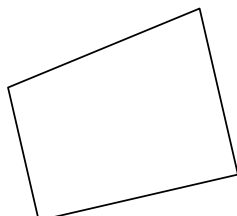
14)



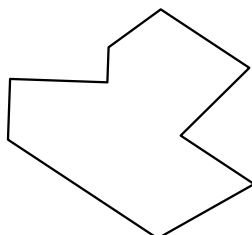
15)




16)



17)



18)



1. \_\_\_\_\_

2. \_\_\_\_\_

3. \_\_\_\_\_

4. \_\_\_\_\_

5. \_\_\_\_\_

6. \_\_\_\_\_

7. \_\_\_\_\_

8. \_\_\_\_\_

9. \_\_\_\_\_

10. \_\_\_\_\_

11. \_\_\_\_\_

12. \_\_\_\_\_

13. \_\_\_\_\_

14. \_\_\_\_\_

15. \_\_\_\_\_

16. \_\_\_\_\_

17. \_\_\_\_\_

18. \_\_\_\_\_

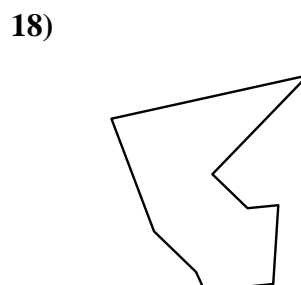
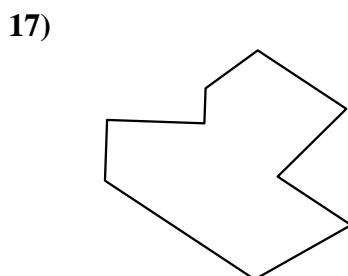
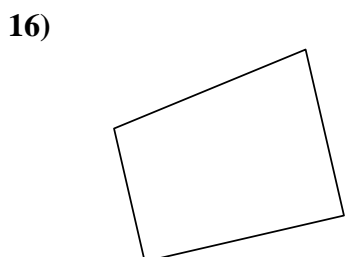

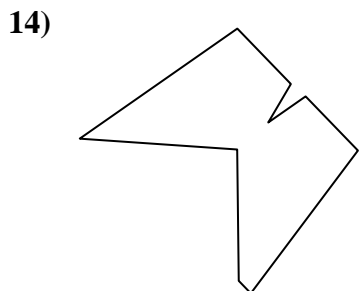
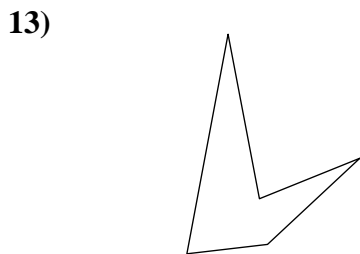
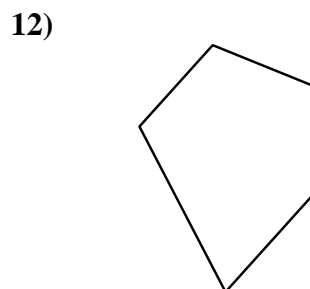
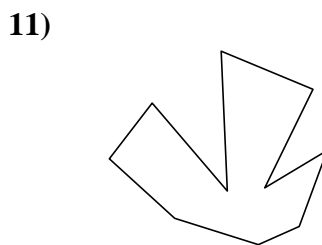
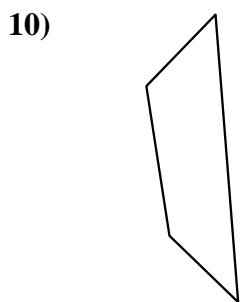
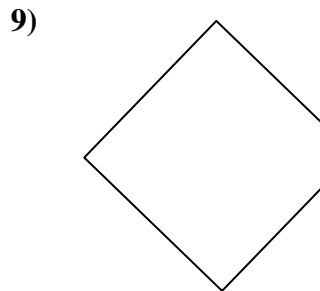
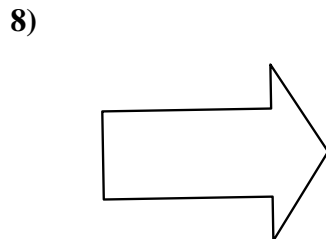
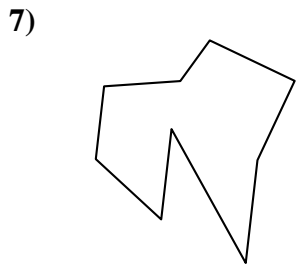
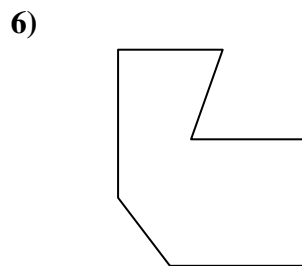
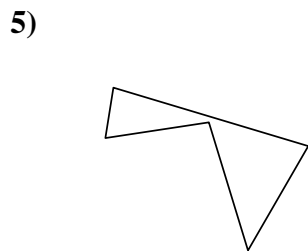
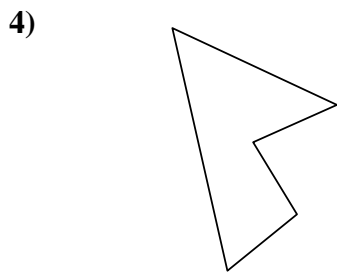
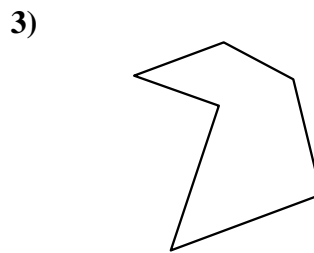
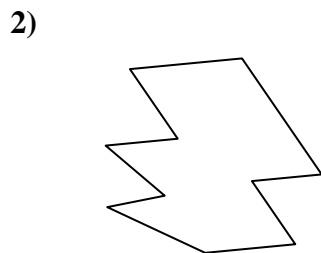

19. \_\_\_\_\_

20. \_\_\_\_\_

21. \_\_\_\_\_



Identifiziere jede gezeigte Form.



Antworten

1. Siebeneck

2. Zehneck

3. Sechseck

4. Fünfeck

5. Fünfeck

6. Siebeneck

7. Neuneck

8. Siebeneck

9. Fünfeck

10. Viereck

11. Zehneck

12. Fünfeck

13. Fünfeck

14. Neuneck

15. Achteck

16. Viereck

17. Neuneck

18. Neuneck

19. Achteck

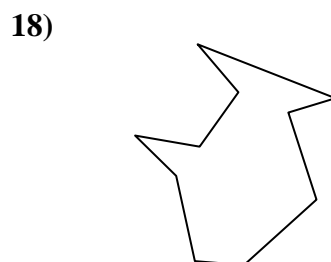
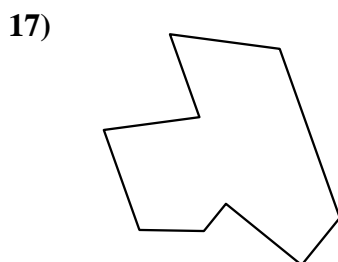
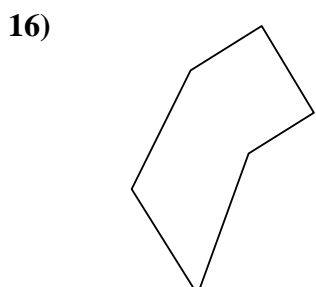
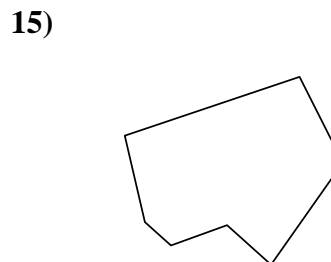
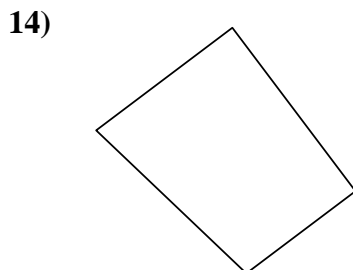
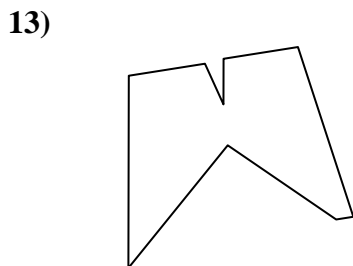
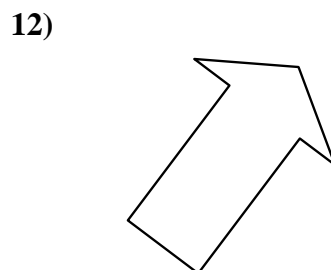
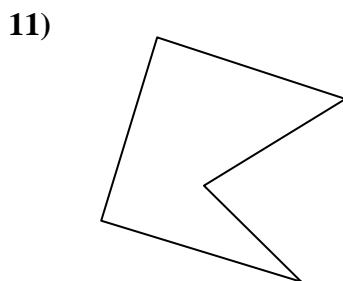
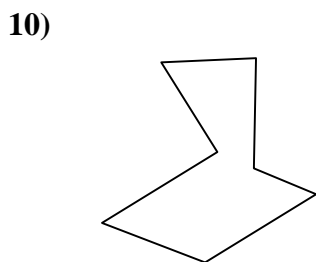

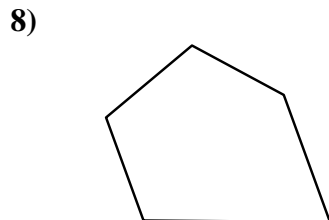
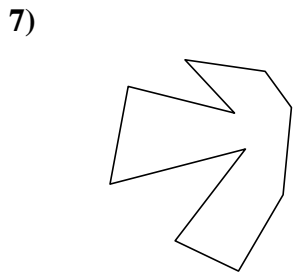
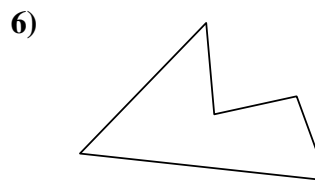

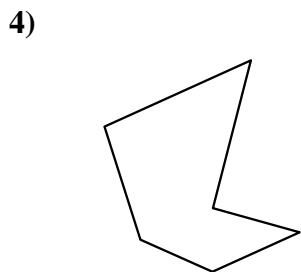
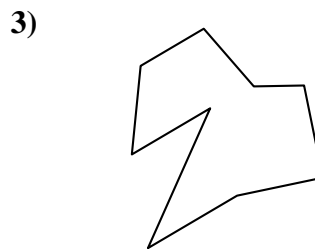

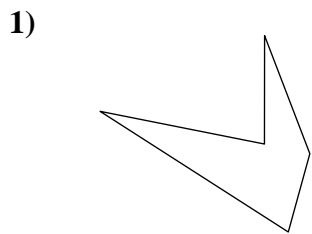
20. Viereck

21. Achteck



Identifiziere jede gezeigte Form.

**Antworten**



1. \_\_\_\_\_

2. \_\_\_\_\_

3. \_\_\_\_\_

4. \_\_\_\_\_

5. \_\_\_\_\_

6. \_\_\_\_\_

7. \_\_\_\_\_

8. \_\_\_\_\_

9. \_\_\_\_\_

10. \_\_\_\_\_

11. \_\_\_\_\_

12. \_\_\_\_\_

13. \_\_\_\_\_

14. \_\_\_\_\_

15. \_\_\_\_\_

16. \_\_\_\_\_

17. \_\_\_\_\_

18. \_\_\_\_\_

19. \_\_\_\_\_

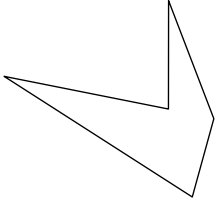
20. \_\_\_\_\_

21. \_\_\_\_\_

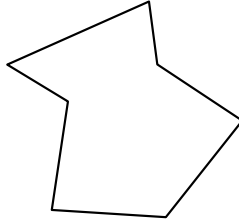


Identifiziere jede gezeigte Form.


1)



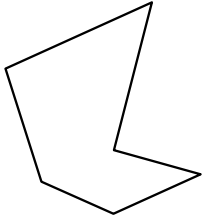
2)




3)



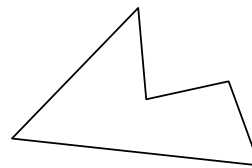
4)



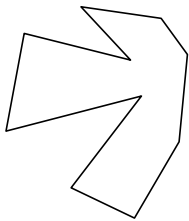
5)



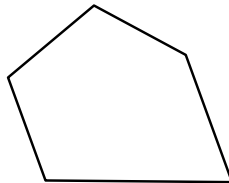
6)



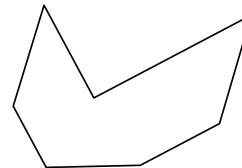
7)



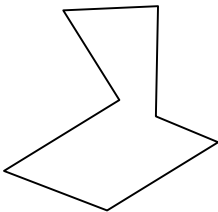
8)




9)



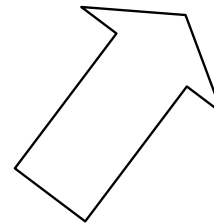
10)



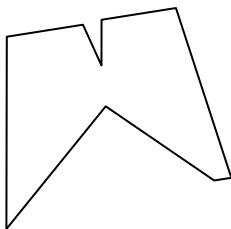
11)



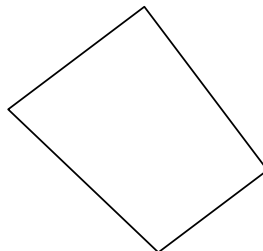
12)



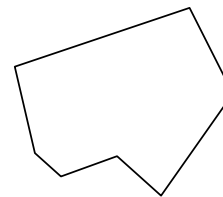
13)



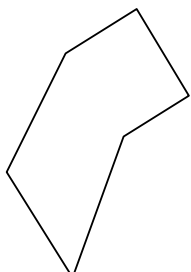
14)



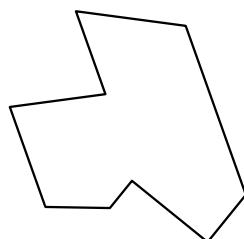
15)




16)



17)



18)



**Antworten**

1. Fünfeck

2. Siebeneck

3. Neuneck

4. Sechseck

5. Achteck

6. Fünfeck

7. Zehneck

8. Fünfeck

9. Siebeneck

10. Siebeneck

11. Fünfeck

12. Siebeneck

13. Neuneck

14. Viereck

15. Siebeneck

16. Sechseck

17. Neuneck

18. Zehneck

19. Neuneck

20. Sechseck

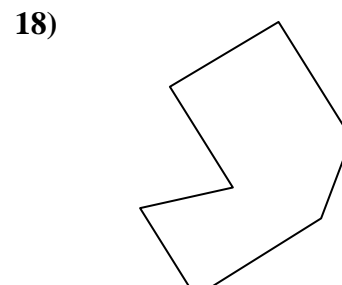
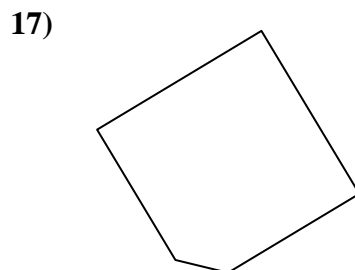
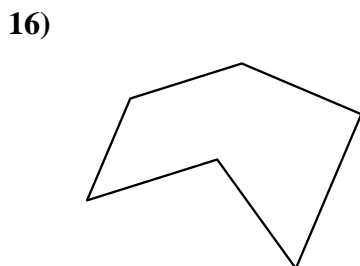
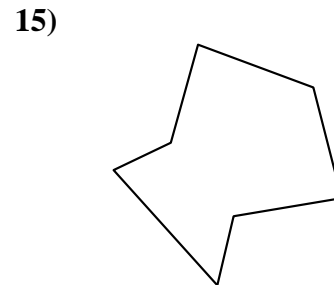

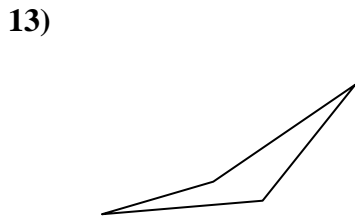
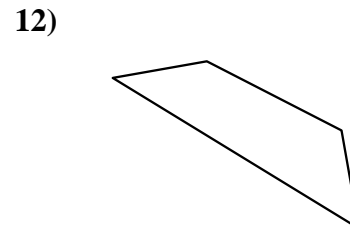
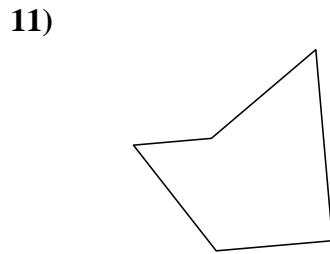
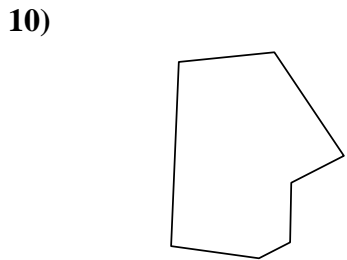
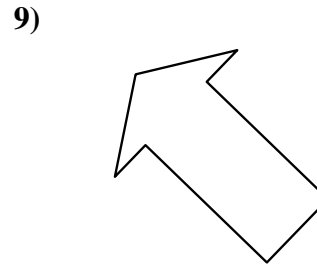
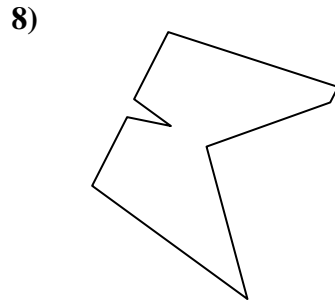
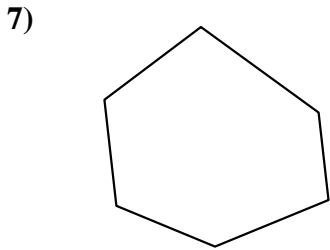
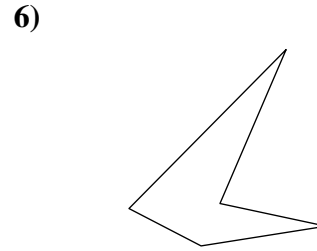
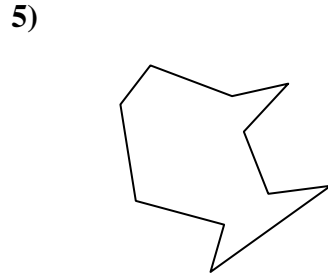
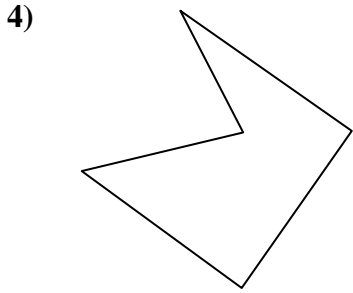
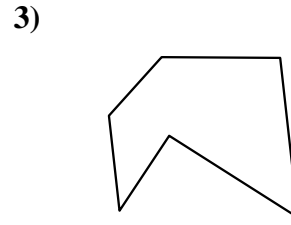
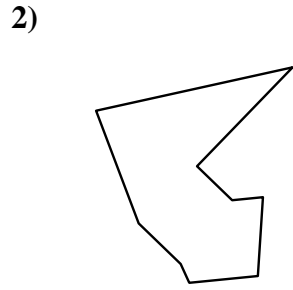
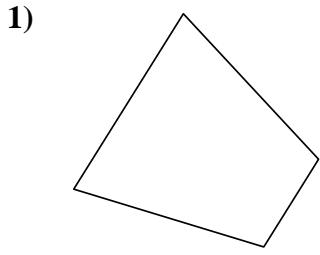
21. Achteck





Identifiziere jede gezeigte Form.

**Antworten**

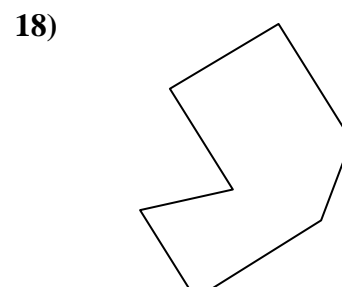
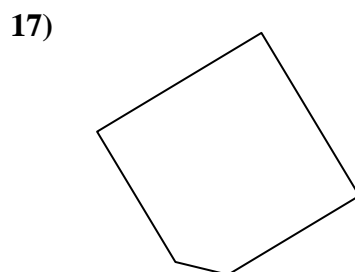
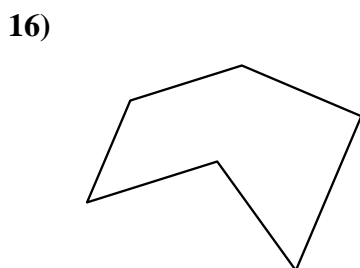
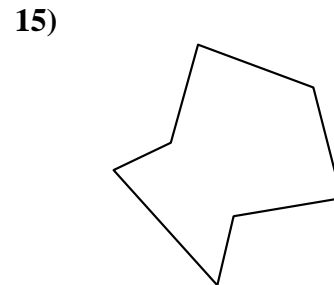

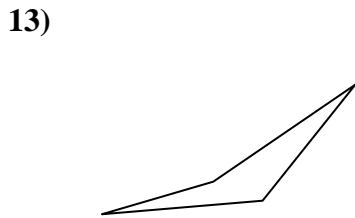
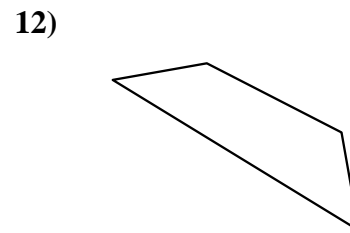
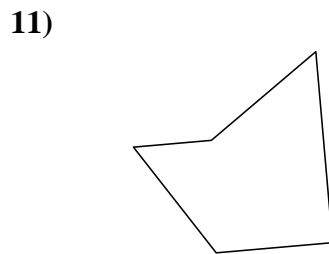
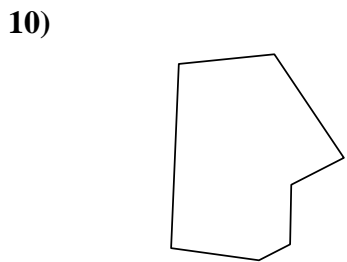
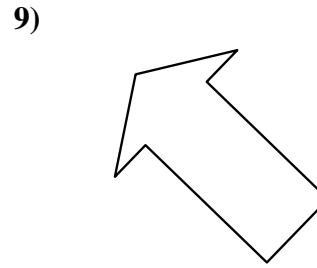
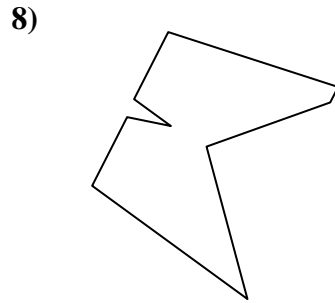
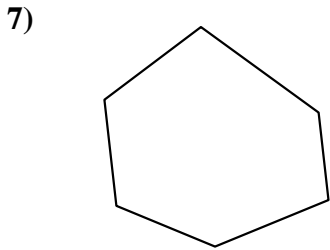
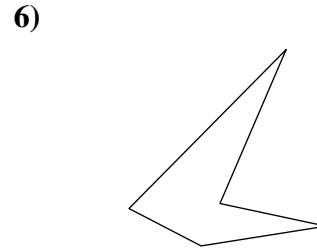
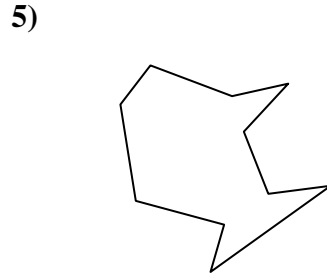
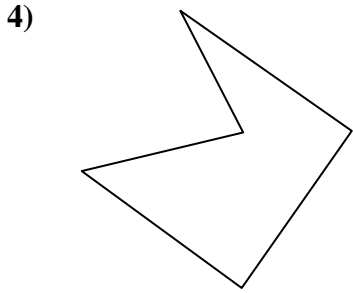
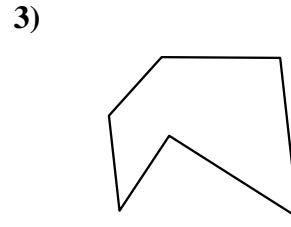
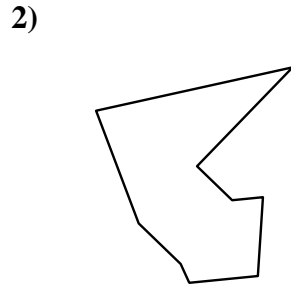
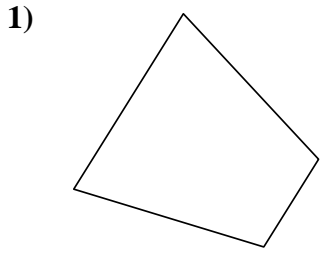


- 1. \_\_\_\_\_
- 2. \_\_\_\_\_
- 3. \_\_\_\_\_
- 4. \_\_\_\_\_
- 5. \_\_\_\_\_
- 6. \_\_\_\_\_
- 7. \_\_\_\_\_
- 8. \_\_\_\_\_
- 9. \_\_\_\_\_
- 10. \_\_\_\_\_
- 11. \_\_\_\_\_
- 12. \_\_\_\_\_
- 13. \_\_\_\_\_
- 14. \_\_\_\_\_
- 15. \_\_\_\_\_
- 16. \_\_\_\_\_
- 17. \_\_\_\_\_
- 18. \_\_\_\_\_
- 19. \_\_\_\_\_
- 20. \_\_\_\_\_
- 21. \_\_\_\_\_



Identifiziere jede gezeigte Form.

**Antworten**



1. Viereck

2. Neuneck

3. Sechseck

4. Fünfeck

5. Zehneck

6. Fünfeck

7. Sechseck

8. Neuneck

9. Siebeneck

10. Siebeneck

11. Fünfeck

12. Viereck

13. Viereck

14. Viereck

15. Siebeneck

16. Sechseck

17. Fünfeck

18. Siebeneck

19. Siebeneck

20. Achteck

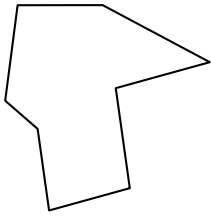
21. Sechseck



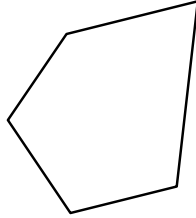
Identifiziere jede gezeigte Form.

**Antworten**


1)



2)



3)

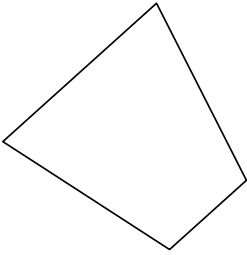


1. \_\_\_\_\_

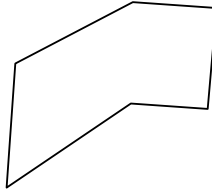
2. \_\_\_\_\_

3. \_\_\_\_\_

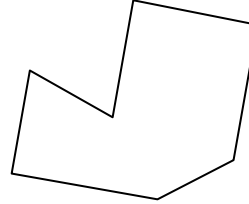
4)



5)



6)

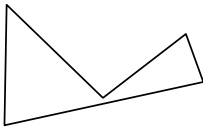


4. \_\_\_\_\_


5. \_\_\_\_\_

6. \_\_\_\_\_

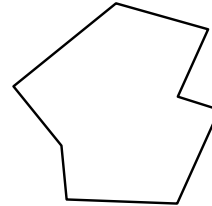
7)



8)



9)

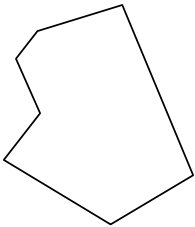


7. \_\_\_\_\_

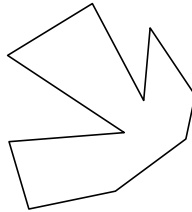
8. \_\_\_\_\_

9. \_\_\_\_\_

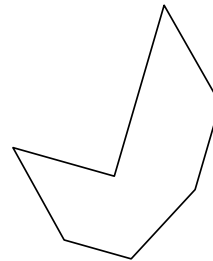
10)



11)



12)



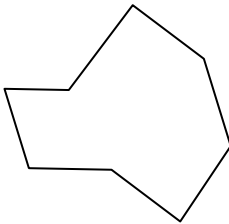
10. \_\_\_\_\_

11. \_\_\_\_\_

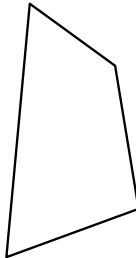
12. \_\_\_\_\_

13. \_\_\_\_\_

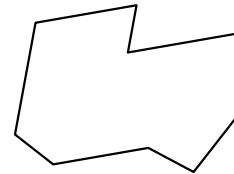
13)



14)



15)



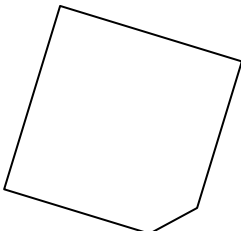
14. \_\_\_\_\_

15. \_\_\_\_\_

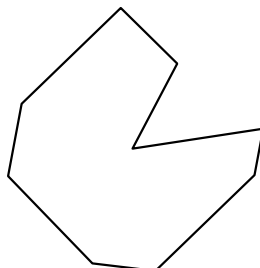
16. \_\_\_\_\_

17. \_\_\_\_\_

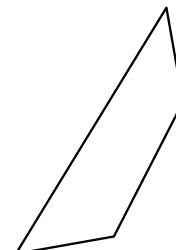
16)



17)



18)



18. \_\_\_\_\_

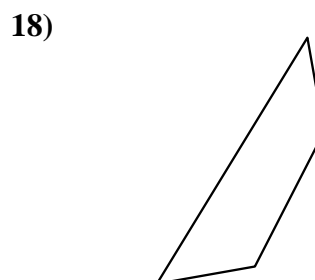
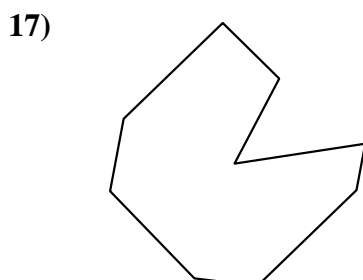
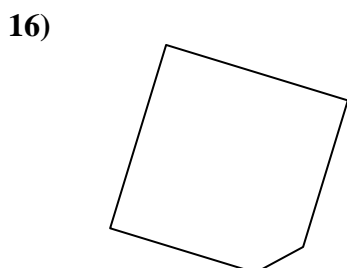
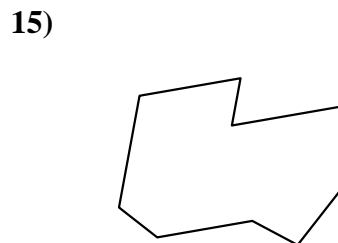
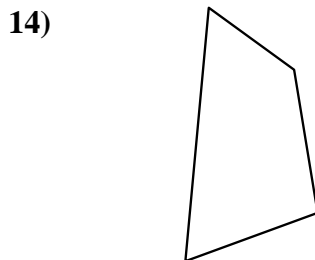
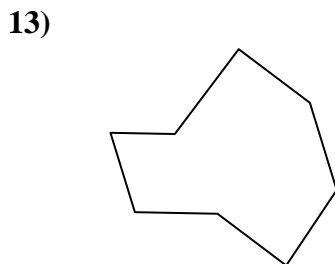
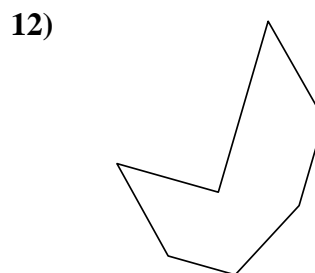
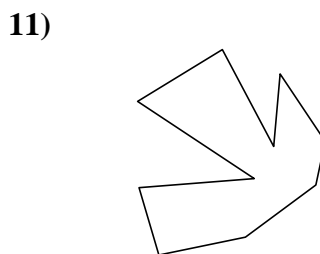
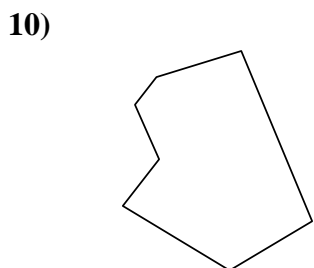
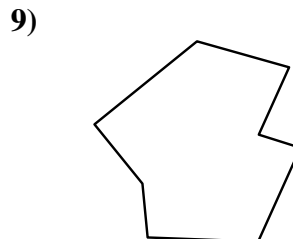
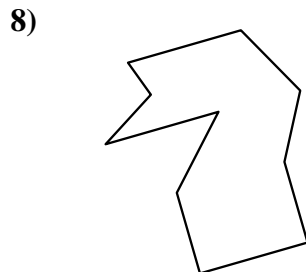
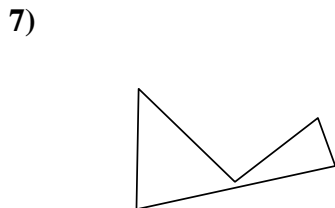
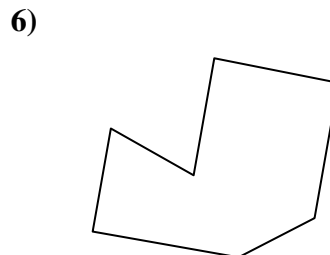
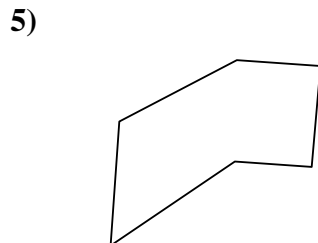
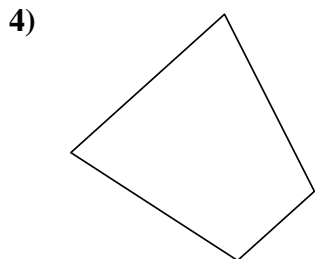
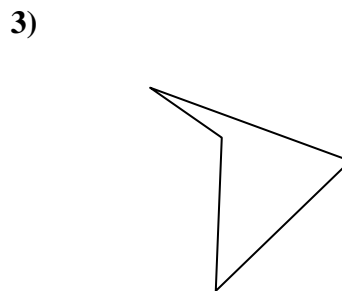
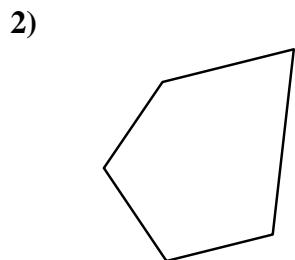
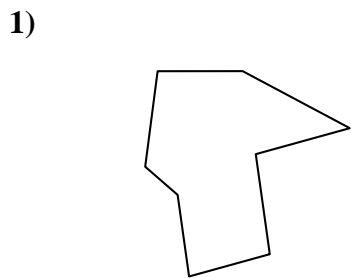
19. \_\_\_\_\_

20. \_\_\_\_\_

21. \_\_\_\_\_



Identifiziere jede gezeigte Form.



**Antworten**

1. Achteck

2. Fünfeck

3. Viereck

4. Viereck

5. Sechseck

6. Siebeneck

7. Fünfeck

8. Zehneck

9. Achteck

10. Siebeneck

11. Zehneck

12. Siebeneck

13. Achteck

14. Viereck

15. Neuneck

16. Fünfeck

17. Neuneck

18. Viereck

19. Siebeneck

20. Sechseck

21. Neuneck