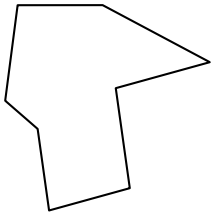




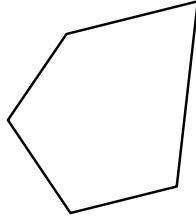
Identifiziere jede gezeigte Form.

**Antworten**


1)



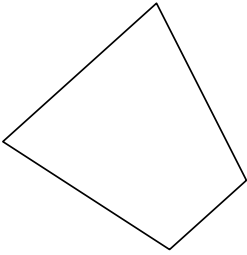
2)



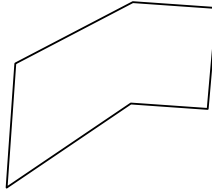
3)



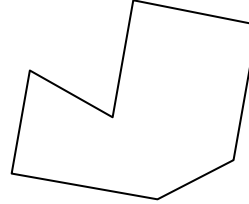
4)



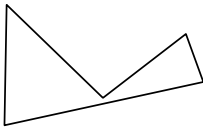
5)




6)



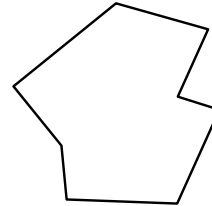
7)



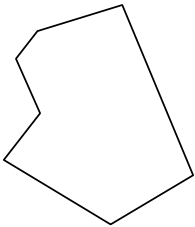
8)



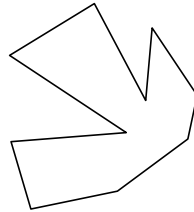
9)



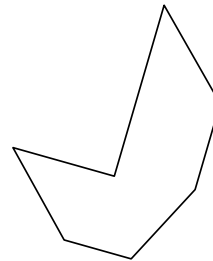
10)



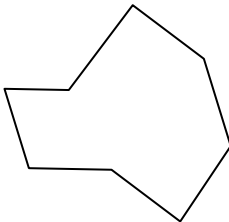
11)



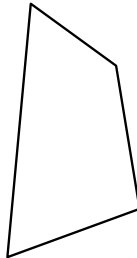
12)



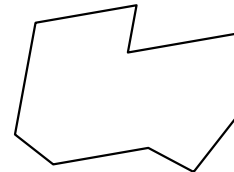
13)



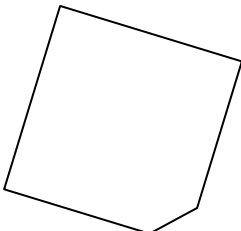
14)



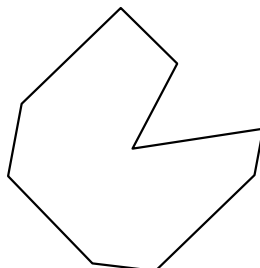
15)



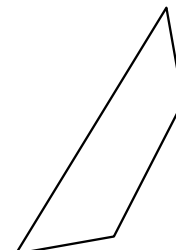
16)



17)



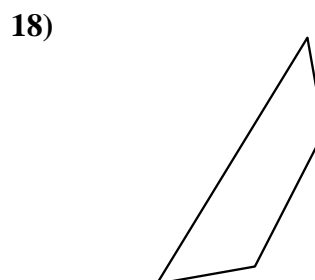
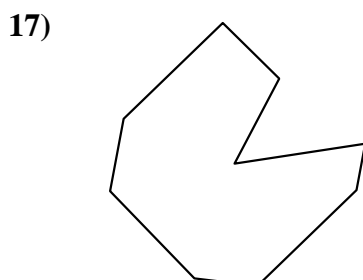
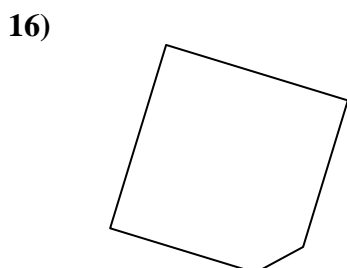
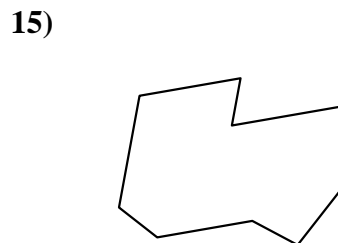
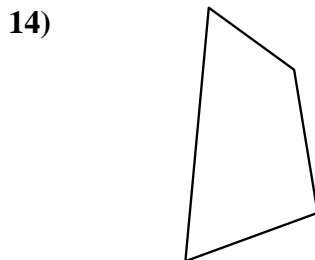
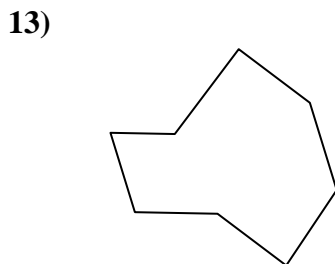
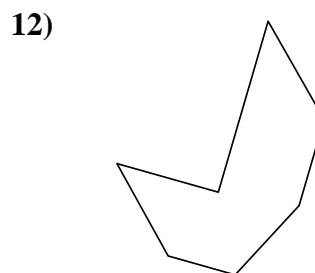
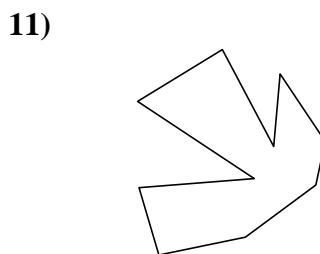
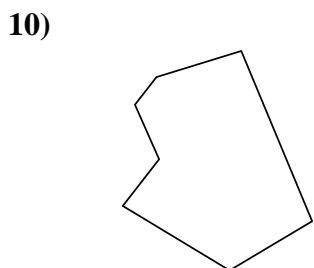
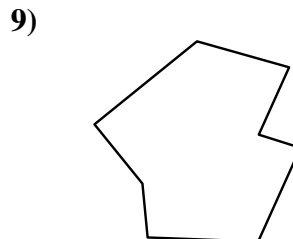
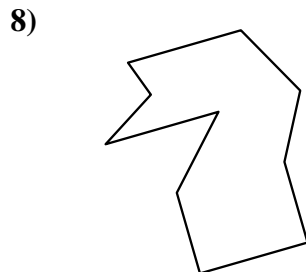
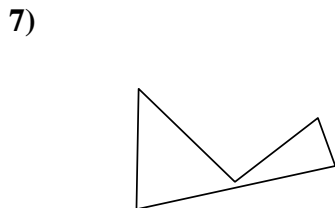
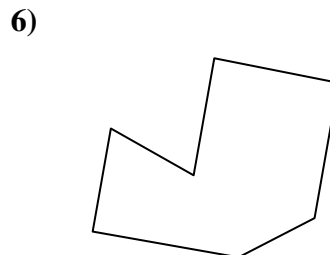
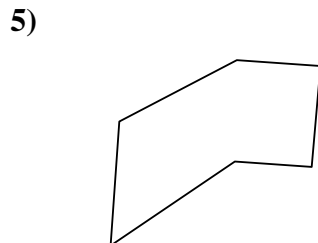
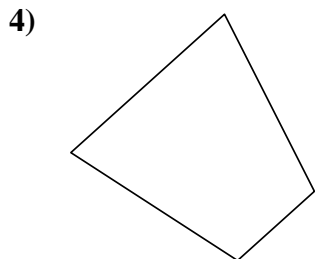
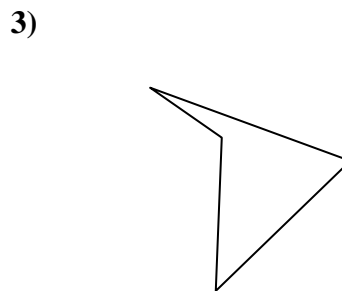
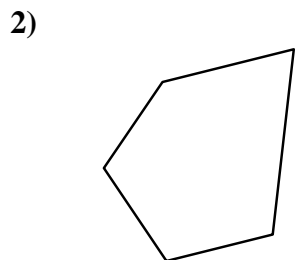
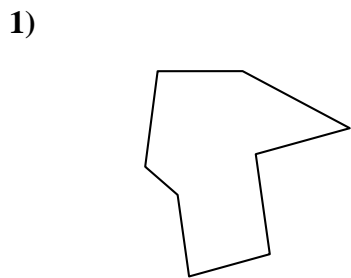
18)



- 1. \_\_\_\_\_
- 2. \_\_\_\_\_
- 3. \_\_\_\_\_
- 4. \_\_\_\_\_
- 5. \_\_\_\_\_
- 6. \_\_\_\_\_
- 7. \_\_\_\_\_
- 8. \_\_\_\_\_
- 9. \_\_\_\_\_
- 10. \_\_\_\_\_
- 11. \_\_\_\_\_
- 12. \_\_\_\_\_
- 13. \_\_\_\_\_
- 14. \_\_\_\_\_
- 15. \_\_\_\_\_
- 16. \_\_\_\_\_
- 17. \_\_\_\_\_
- 18. \_\_\_\_\_
- 19. \_\_\_\_\_
- 20. \_\_\_\_\_
- 21. \_\_\_\_\_



Identifiziere jede gezeigte Form.



**Antworten**

1. Achteck

2. Fünfeck

3. Viereck

4. Viereck

5. Sechseck

6. Siebeneck

7. Fünfeck

8. Zehneck

9. Achteck

10. Siebeneck

11. Zehneck

12. Siebeneck

13. Achteck

14. Viereck

15. Neuneck

16. Fünfeck

17. Neuneck

18. Viereck

19. Siebeneck

20. Sechseck

21. Neuneck