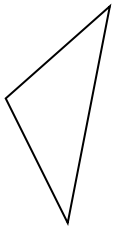




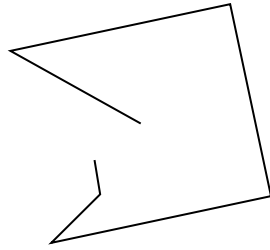
Stelle fest, was die gezeigten Formen sind: Dreieck, Quadrat, Rechteck, Sechseck oder eine andere Figur.

Antworten

1)



2)



3)



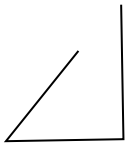
1. _____

2. _____

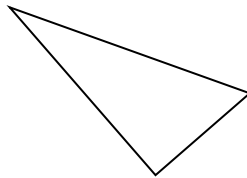
3. _____

4. _____

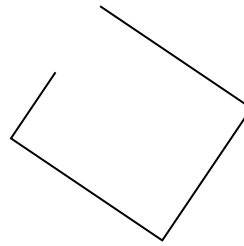
4)



5)



6)



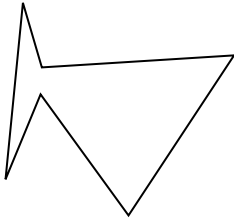
5. _____

6. _____

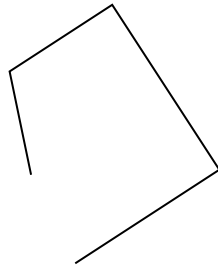
7. _____

8. _____


7)



8)



9)




9. _____

10. _____

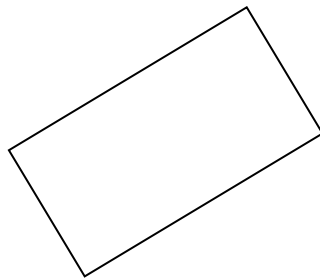
11. _____

12. _____


10)



11)



12)

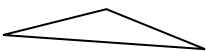


13. _____


14. _____

15. _____

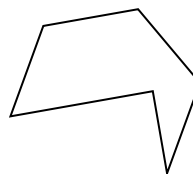
13)



14)



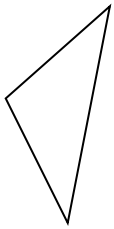
15)



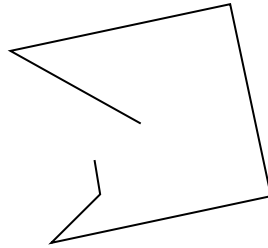


Stelle fest, was die gezeigten Formen sind: Dreieck, Quadrat, Rechteck, Sechseck oder eine andere Figur.

1)



2)



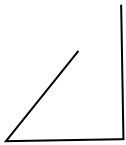
3)



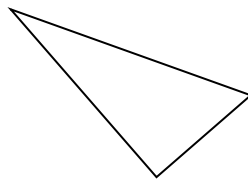
1.

triangle

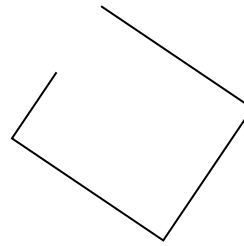
4)



5)



6)



2.

andere

3.

andere

4.

andere

5.

triangle

6.

andere

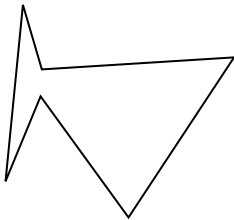
7.

Sechseck

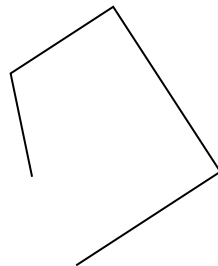
8.

andere

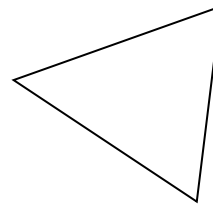
7)



8)



9)



9.

triangle

10.

andere


11.

rectangle

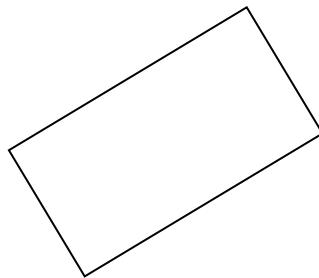
12.

Sechseck


10)



11)



12)



13.

triangle

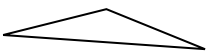
14.

andere


15.

Sechseck

13)



14)



15)

