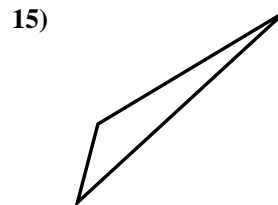
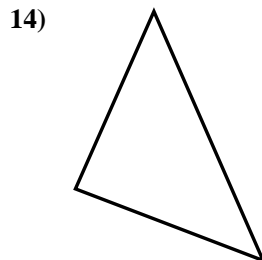
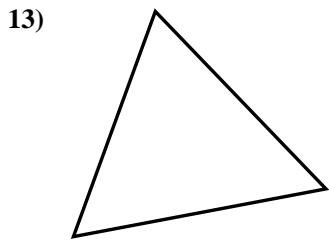

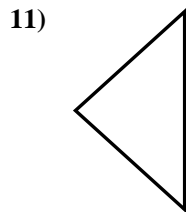
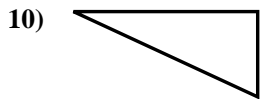
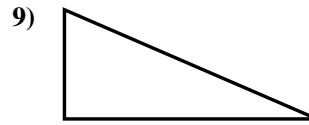
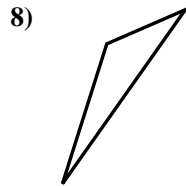

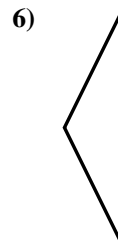

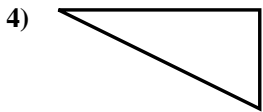
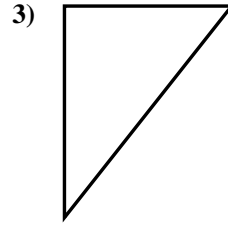





Stelle fest, ob die gezeigten Dreiecke rechtwinklig sind (ja) oder nicht (nein).

**Antworten**

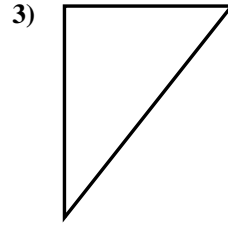



- 1. \_\_\_\_\_
- 2. \_\_\_\_\_
- 3. \_\_\_\_\_
- 4. \_\_\_\_\_
- 5. \_\_\_\_\_
- 6. \_\_\_\_\_
- 7. \_\_\_\_\_
- 8. \_\_\_\_\_
- 9. \_\_\_\_\_
- 10. \_\_\_\_\_
- 11. \_\_\_\_\_
- 12. \_\_\_\_\_
- 13. \_\_\_\_\_
- 14. \_\_\_\_\_
- 15. \_\_\_\_\_

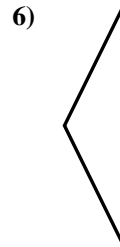

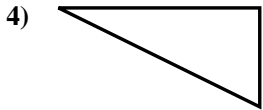


Stelle fest, ob die gezeigten Dreiecke rechtwinklig sind (ja) oder nicht (nein).

Antworten



1. ja



2. ja

3. ja

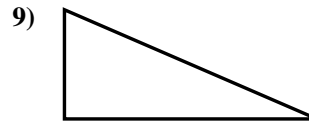
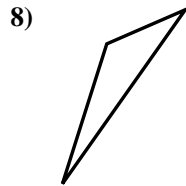

4. ja

5. nein

6. nein

7. nein

8. nein


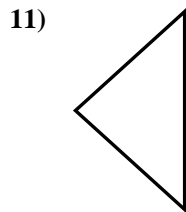
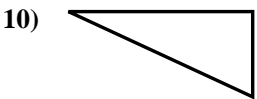


9. ja

10. ja

11. nein

12. ja



13. nein

14. ja

15. nein

