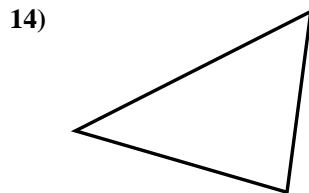
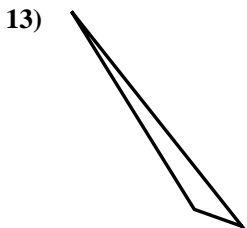
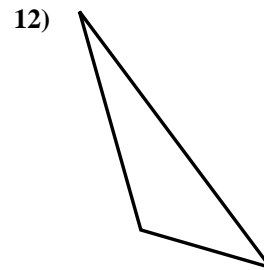
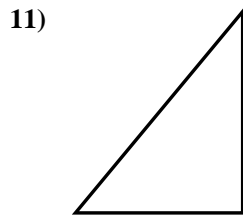
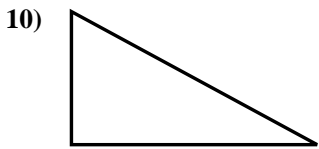
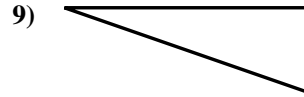
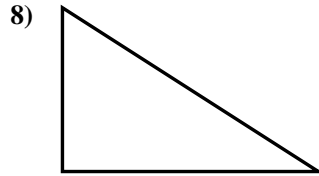
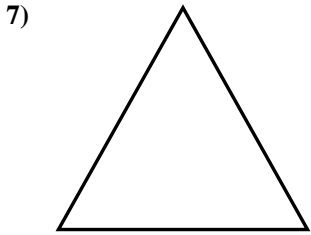
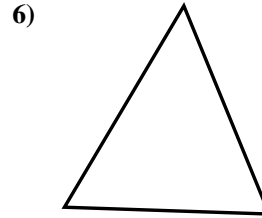

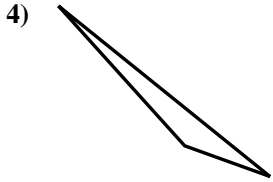
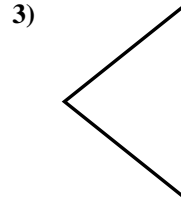
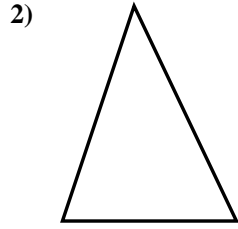
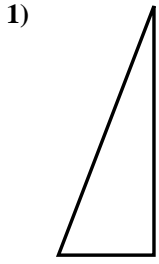




Stelle fest, ob die gezeigten Dreiecke rechtwinklig sind (ja) oder nicht (nein).

Antworten



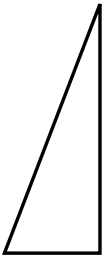
- 1. _____
- 2. _____
- 3. _____
- 4. _____
- 5. _____
- 6. _____
- 7. _____
- 8. _____
- 9. _____
- 10. _____
- 11. _____
- 12. _____
- 13. _____
- 14. _____
- 15. _____



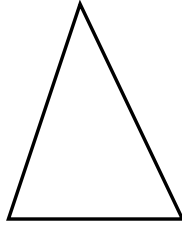
Stelle fest, ob die gezeigten Dreiecke rechtwinklig sind (ja) oder nicht (nein).

Antworten

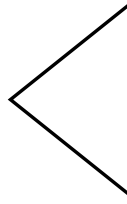
1)



2)

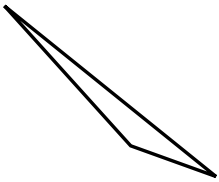


3)

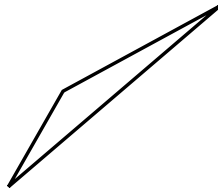


1. ja

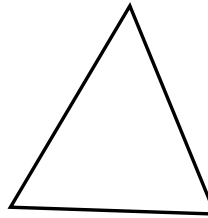
4)



5)



6)



2. nein

3. nein

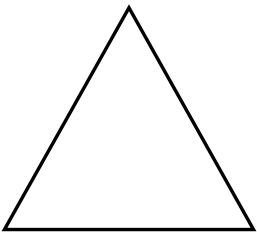
4. nein

5. nein

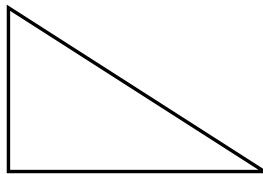
6. nein

7. nein

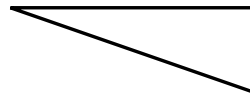
7)



8)



9)



8. ja

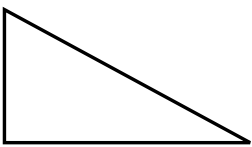
9. ja

10. ja

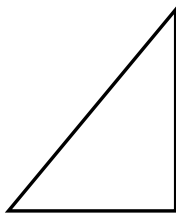
11. ja

12. nein

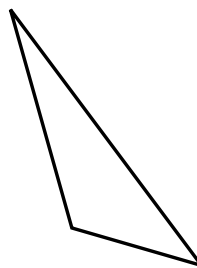
10)



11)



12)




13. nein

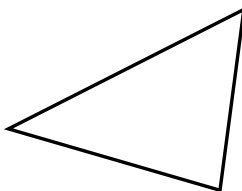
14. nein

15. ja

13)



14)



15)

