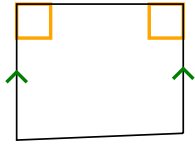




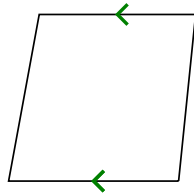
Stelle fest, um was es sich bei den gezeigten Formen handelt: Viereck, Drachenviereck, Trapez, Parallelogramm, Raute, Rechteck oder Quadrat (eine Figur kann mehrere Formen haben).

**Antworten**


1)



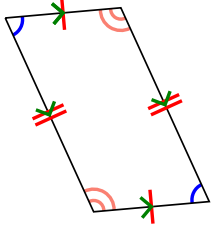
2)



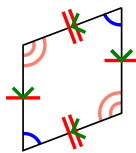
3)



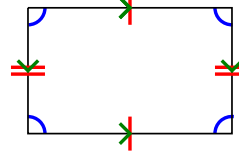
4)



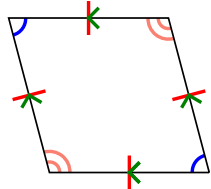
5)



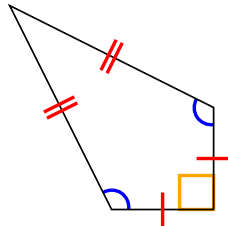
6)



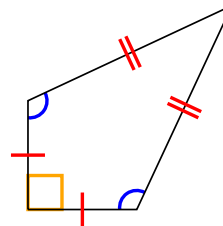
7)



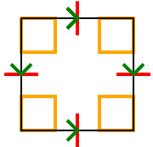
8)



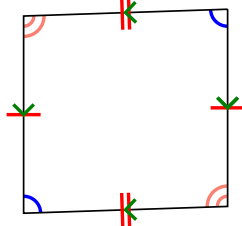
9)




10)



11)



12)

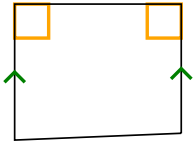


- 1. \_\_\_\_\_
- 2. \_\_\_\_\_
- 3. \_\_\_\_\_
- 4. \_\_\_\_\_
- 5. \_\_\_\_\_
- 6. \_\_\_\_\_
- 7. \_\_\_\_\_
- 8. \_\_\_\_\_
- 9. \_\_\_\_\_
- 10. \_\_\_\_\_
- 11. \_\_\_\_\_
- 12. \_\_\_\_\_

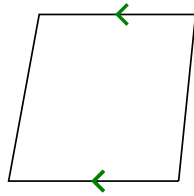


Stelle fest, um was es sich bei den gezeigten Formen handelt: Viereck, Drachenviereck, Trapez, Parallelogramm, Raute, Rechteck oder Quadrat (eine Figur kann mehrere Formen haben).


1)



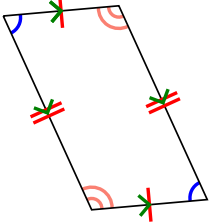
2)



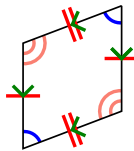
3)



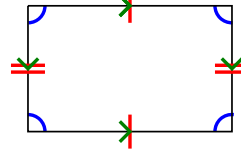
4)



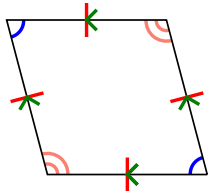
5)



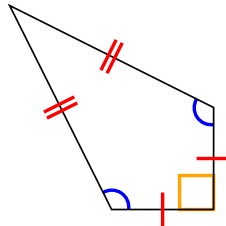
6)



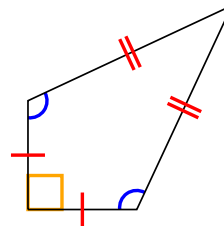
7)



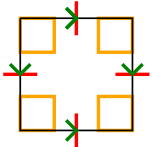
8)



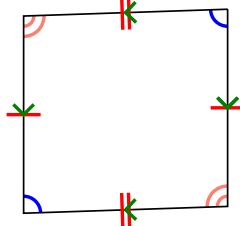
9)




10)



11)



12)



**Antworten**

1. Q,T

2. Q,T

3. Q

4. Q,P

5. Q,P

6. Q,P

7. Q,P,H

8. Q,K

9. Q,K

10. Q,P,H,R,S

11. Q,P

12. Q