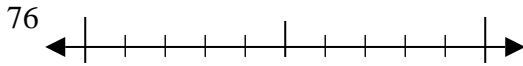


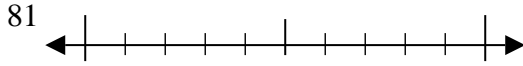


Benutze den Zahlenstrahl um jede Zahl auf die nächste Zehnerstelle zu runden.

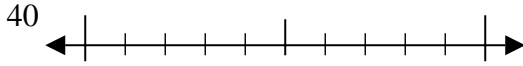
Bsp)



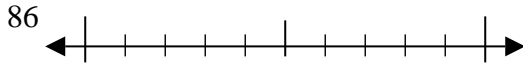
1)



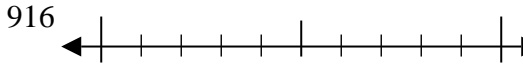
2)



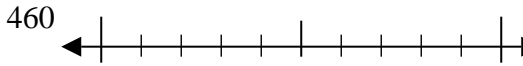
3)



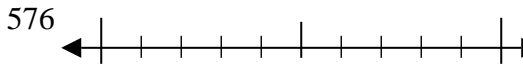
4)



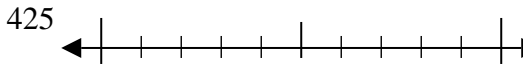
5)



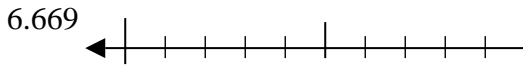
6)



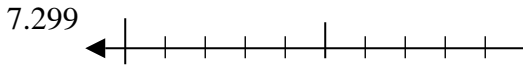
7)



8)



9)

**Antworten**Bsp. 80

1. _____

2. _____

3. _____

4. _____

5. _____

6. _____

7. _____

8. _____

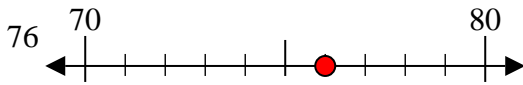
9. _____



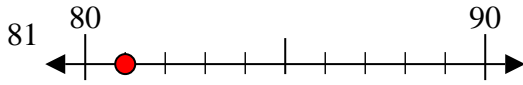
Benutze den Zahlenstrahl um jede Zahl auf die nächste Zehnerstelle zu runden.

Antworten

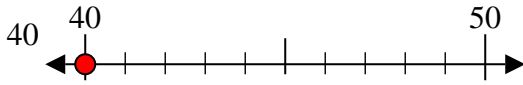
Bsp)

Bsp. 80

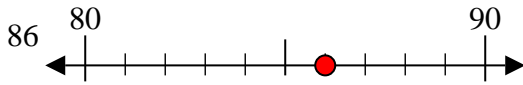
1)

1. 80

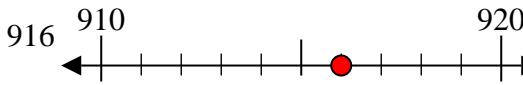
2)

2. 40

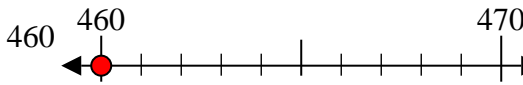
3)

3. 90

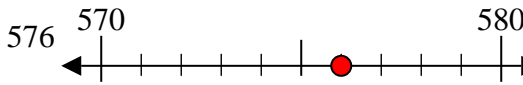
4)

4. 920

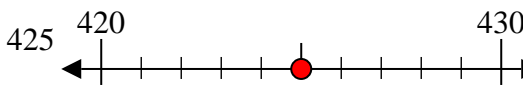
5)

5. 460

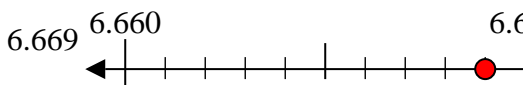
6)

6. 580

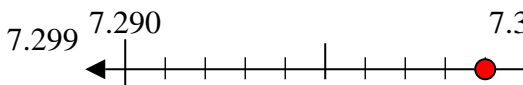
7)

7. 430

8)

8. 6670

9)

9. 7300