



Benutze den Zahlenstrahl um jede Zahl auf das nächste Hundert zu runden.

Antworten

Bsp)

22.128



Bsp. 22.100

1)

7.798



1. _____

2)

73.791



2. _____

3)

48.807



3. _____

4)

1.381



4. _____

5)

746



5. _____

6)

140



6. _____

7)

904



7. _____

8)

93.445



8. _____

9)

4.176



9. _____

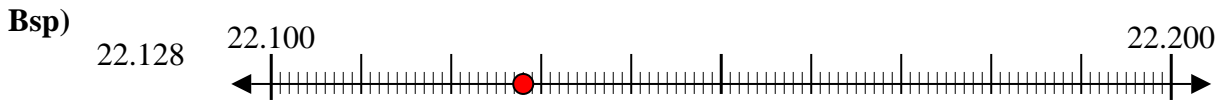
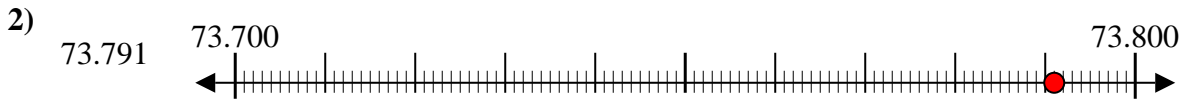
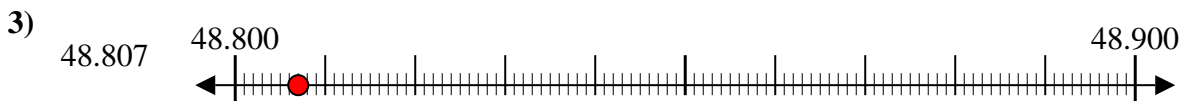
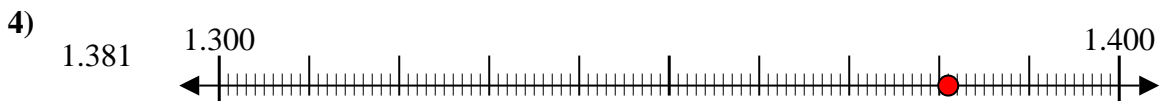
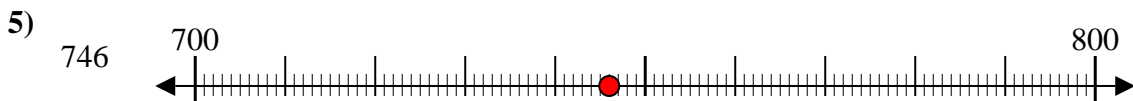
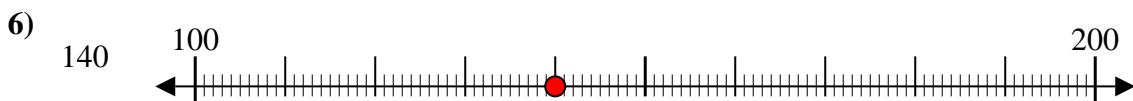
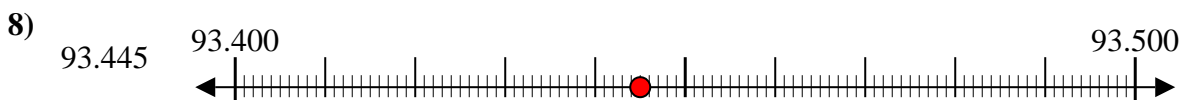
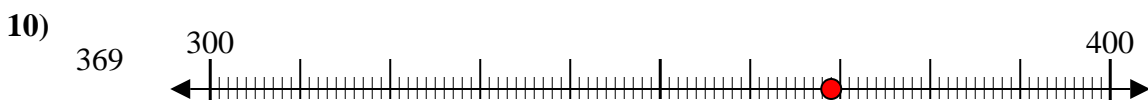
10)

369





Benutze den Zahlenstrahl um jede Zahl auf das nächste Hundert zu runden.

AntwortenBsp. 22.1001. 7.8002. 73.8003. 48.8004. 1.4005. 7006. 1007. 9008. 93.4009. 4.20010. 400