




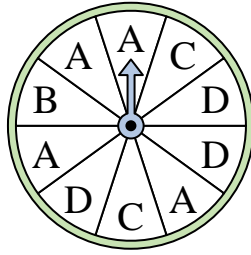
## Löse jede Aufgabe.

Antworten

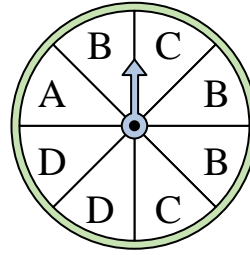
- 1) Which number is the spinner most likely to land on?



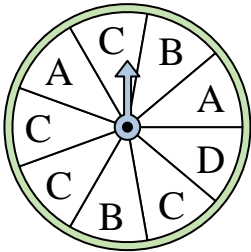
- 2) Which letter is the spinner least likely to land on?



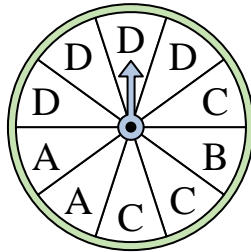
- 3) Which two letters is the spinner equally likely to land on?



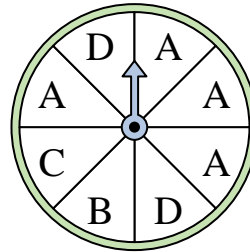
- 4) Which letter is the spinner most likely to land on?



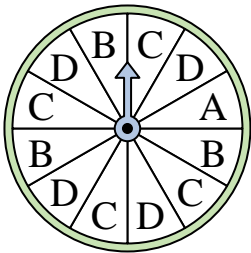
- 5) Which letter is the spinner most likely to land on?



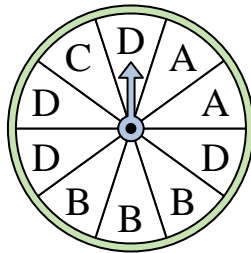
- 6) Which letter is the spinner most likely to land on?




- 7) Which letter is the spinner least likely to land on?



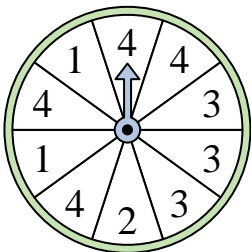
- 8) Which letter is the spinner least likely to land on?



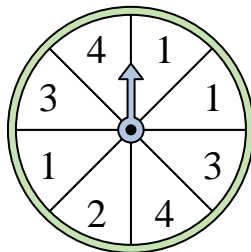
- 9) Which number is the spinner least likely to land on?




- 10) Which number is the spinner least likely to land on?



- 11) Which two numbers is the spinner equally likely to land on?



- 12) Which number is the spinner least likely to land on?




1. \_\_\_\_\_
2. \_\_\_\_\_
3. \_\_\_\_\_
4. \_\_\_\_\_
5. \_\_\_\_\_
6. \_\_\_\_\_
7. \_\_\_\_\_
8. \_\_\_\_\_
9. \_\_\_\_\_
10. \_\_\_\_\_
11. \_\_\_\_\_
12. \_\_\_\_\_

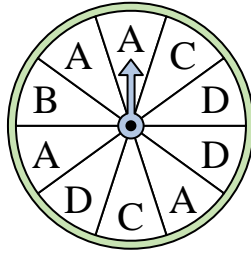


Löse jede Aufgabe.

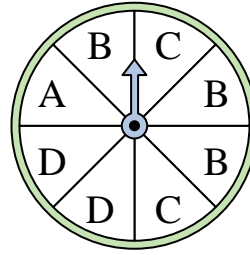
- 1) Which number is the spinner most likely to land on?



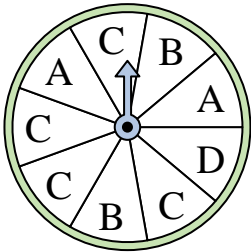
- 2) Which letter is the spinner least likely to land on?



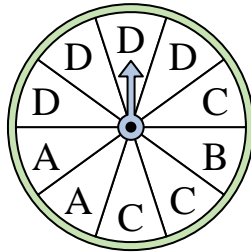
- 3) Which two letters is the spinner equally likely to land on?



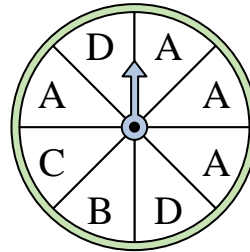
- 4) Which letter is the spinner most likely to land on?



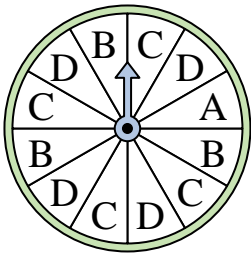
- 5) Which letter is the spinner most likely to land on?



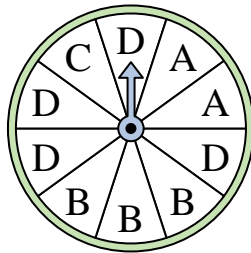
- 6) Which letter is the spinner most likely to land on?




- 7) Which letter is the spinner least likely to land on?



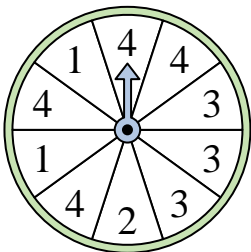
- 8) Which letter is the spinner least likely to land on?



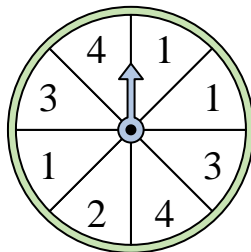
- 9) Which number is the spinner least likely to land on?




- 10) Which number is the spinner least likely to land on?



- 11) Which two numbers is the spinner equally likely to land on?



- 12) Which number is the spinner least likely to land on?

**Antworten**1. 42. B3. C & D4. C5. D6. A7. A8. C9. 310. 211. 3 & 412. 2