


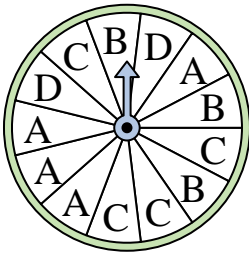
Löse jede Aufgabe.

**Antworten**

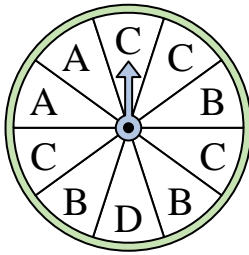
1) Which two numbers is the spinner equally likely to land on?



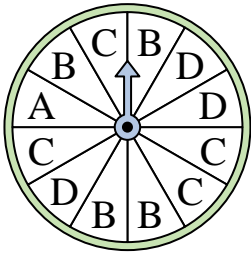
2) Which letter is the spinner least likely to land on?



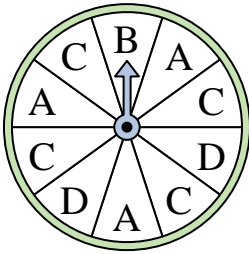
3) Which letter is the spinner least likely to land on?



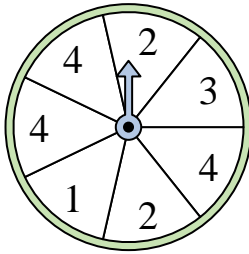
4) Which letter is the spinner least likely to land on?



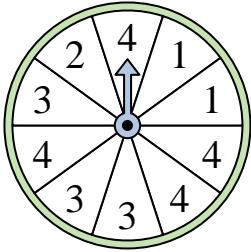
5) Which letter is the spinner least likely to land on?



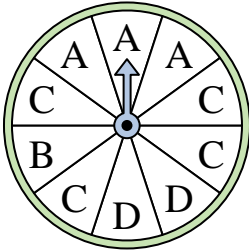
6) Which two numbers is the spinner equally likely to land on?



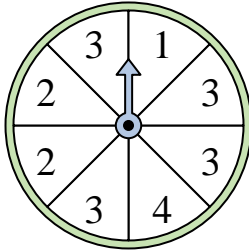
7) Which number is the spinner most likely to land on?



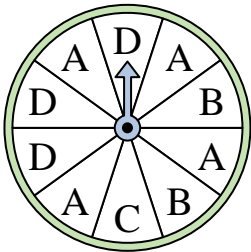
8) Which letter is the spinner most likely to land on?



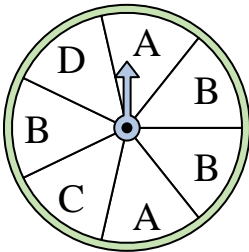
9) Which number is the spinner most likely to land on?




10) Which letter is the spinner least likely to land on?



11) Which two letters is the spinner equally likely to land on?



12) Which number is the spinner least likely to land on?



1. \_\_\_\_\_

2. \_\_\_\_\_

3. \_\_\_\_\_

4. \_\_\_\_\_

5. \_\_\_\_\_

6. \_\_\_\_\_

7. \_\_\_\_\_

8. \_\_\_\_\_

9. \_\_\_\_\_

10. \_\_\_\_\_


11. \_\_\_\_\_

12. \_\_\_\_\_

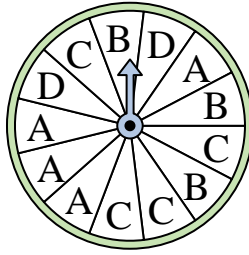


Löse jede Aufgabe.

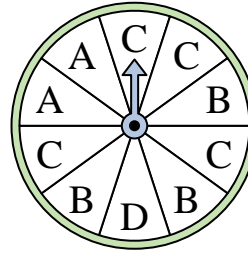
- 1) Which two numbers is the spinner equally likely to land on?



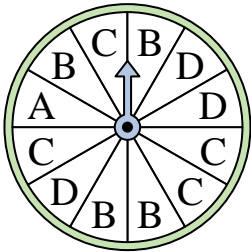
- 2) Which letter is the spinner least likely to land on?



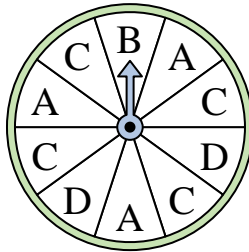
- 3) Which letter is the spinner least likely to land on?



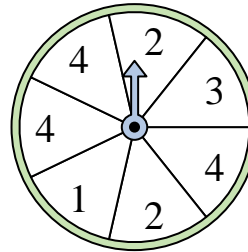
- 4) Which letter is the spinner least likely to land on?



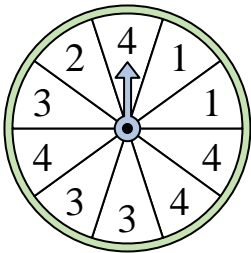
- 5) Which letter is the spinner least likely to land on?



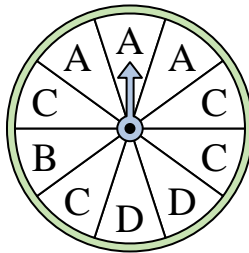
- 6) Which two numbers is the spinner equally likely to land on?



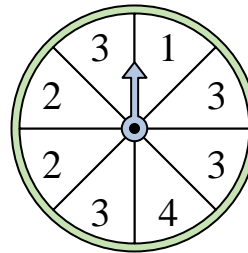
- 7) Which number is the spinner most likely to land on?



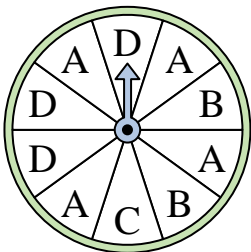
- 8) Which letter is the spinner most likely to land on?



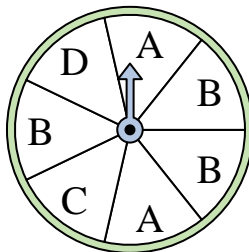
- 9) Which number is the spinner most likely to land on?




- 10) Which letter is the spinner least likely to land on?



- 11) Which two letters is the spinner equally likely to land on?



- 12) Which number is the spinner least likely to land on?

**Antworten**

1. **1 & 4**  
2. **D**  
3. **D**  
4. **A**  
5. **B**  
6. **1 & 3**  
7. **4**  
8. **C**  
9. **3**  
10. **C**  
11. **C & D**  
12. **2**