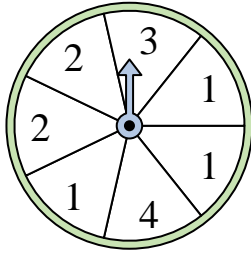
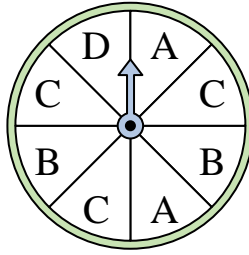


**Löse jede Aufgabe.****Antworten**

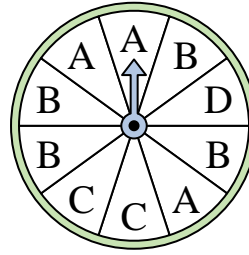
- 1) Which number is the spinner most likely to land on?



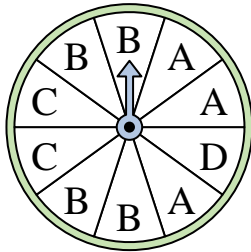
- 2) Which two letters is the spinner equally likely to land on?



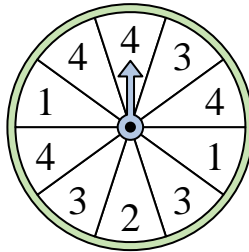
- 3) Which letter is the spinner least likely to land on?



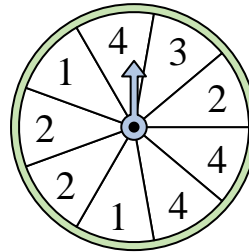
- 4) Which letter is the spinner most likely to land on?



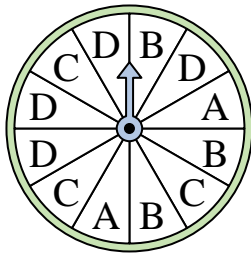
- 5) Which number is the spinner most likely to land on?



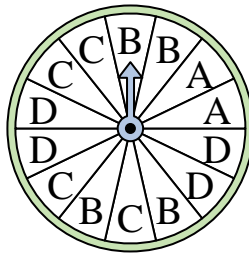
- 6) Which two numbers is the spinner equally likely to land on?



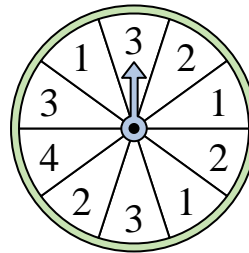
- 7) Which letter is the spinner least likely to land on?




- 8) Which letter is the spinner least likely to land on?



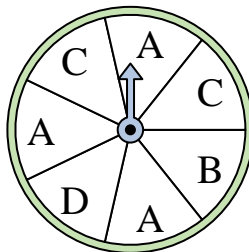
- 9) Which number is the spinner least likely to land on?



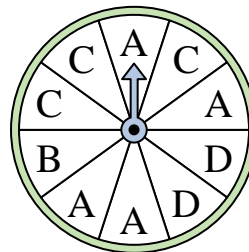
- 10) Which number is the spinner least likely to land on?



- 11) Which two letters is the spinner equally likely to land on?



- 12) Which letter is the spinner most likely to land on?

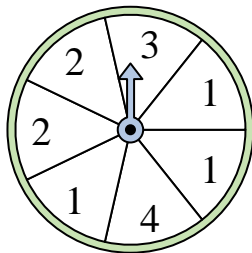


1. _____
2. _____
3. _____
4. _____
5. _____
6. _____
7. _____
8. _____
9. _____
10. _____
11. _____
12. _____

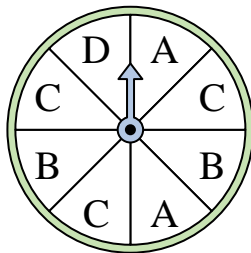


Löse jede Aufgabe.

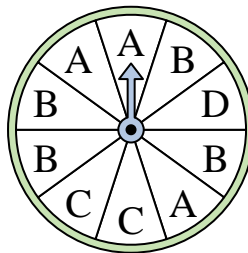
- 1) Which number is the spinner most likely to land on?



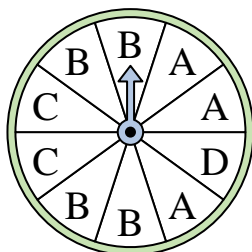
- 2) Which two letters is the spinner equally likely to land on?




- 3) Which letter is the spinner least likely to land on?



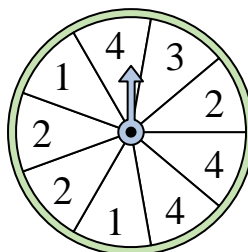
- 4) Which letter is the spinner most likely to land on?



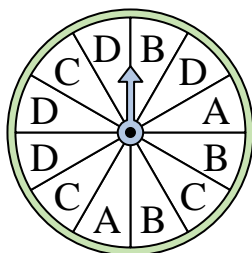
- 5) Which number is the spinner most likely to land on?



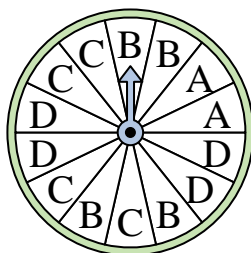
- 6) Which two numbers is the spinner equally likely to land on?



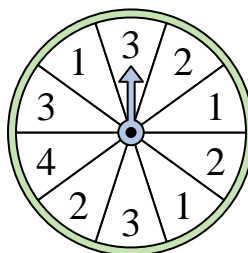
- 7) Which letter is the spinner least likely to land on?




- 8) Which letter is the spinner least likely to land on?



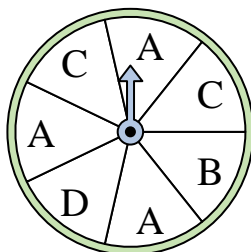
- 9) Which number is the spinner least likely to land on?



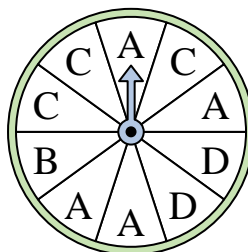
- 10) Which number is the spinner least likely to land on?



- 11) Which two letters is the spinner equally likely to land on?



- 12) Which letter is the spinner most likely to land on?

**Antworten**1. **1**2. **A & B**3. **D**4. **B**5. **4**6. **2 & 4**7. **A**8. **A**9. **4**10. **4**11. **B & D**12. **A**