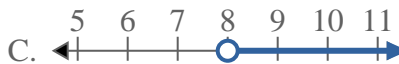
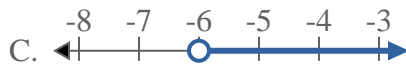
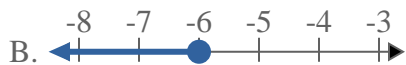
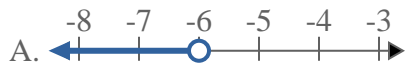




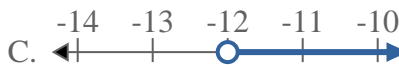
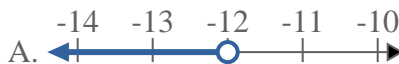
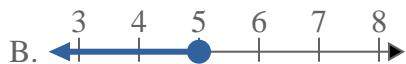
Löse jede Aufgabe.

Antworten

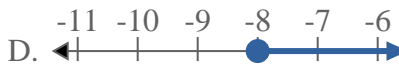
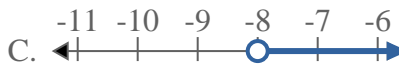
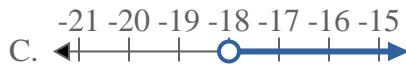
- 1) Bestimme, welche Möglichkeit $X < -6$ anzeigt. 2) Bestimme, welche Möglichkeit $X < 8$ anzeigt.



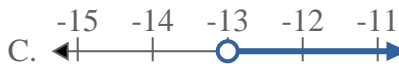
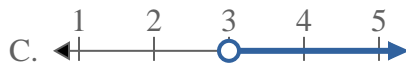
- 3) Bestimme, welche Möglichkeit $X \leq 5$ anzeigt. 4) Bestimme, welche Möglichkeit $X \geq -12$ anzeigt.



- 5) Bestimme, welche Möglichkeit $X \geq -18$ anzeigt. 6) Bestimme, welche Möglichkeit $X \geq -8$ anzeigt.



- 7) Bestimme, welche Möglichkeit $X < 3$ anzeigt. 8) Bestimme, welche Möglichkeit $X < -13$ anzeigt.



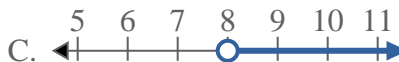
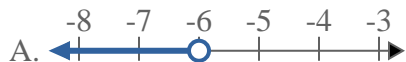
1. _____
2. _____
3. _____
4. _____
5. _____
6. _____
7. _____
8. _____



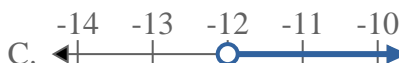
Löse jede Aufgabe.

Antworten

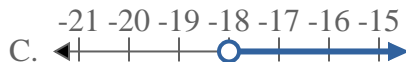
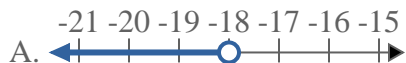
- 1) Bestimme, welche Möglichkeit $X < -6$ anzeigt. 2) Bestimme, welche Möglichkeit $X < 8$ anzeigt.



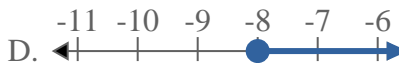
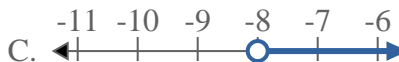
- 3) Bestimme, welche Möglichkeit $X \leq 5$ anzeigt. 4) Bestimme, welche Möglichkeit $X \geq -12$ anzeigt.



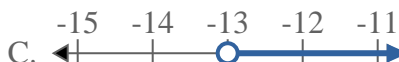
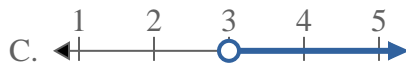
- 5) Bestimme, welche Möglichkeit $X \geq -18$ anzeigt.



- 6) Bestimme, welche Möglichkeit $X \geq -8$ anzeigt.



- 7) Bestimme, welche Möglichkeit $X < 3$ anzeigt. 8) Bestimme, welche Möglichkeit $X < -13$ anzeigt.

1. **A** 2. **A** 3. **B** 4. **D** 5. **D** 6. **D** 7. **A** 8. **A**