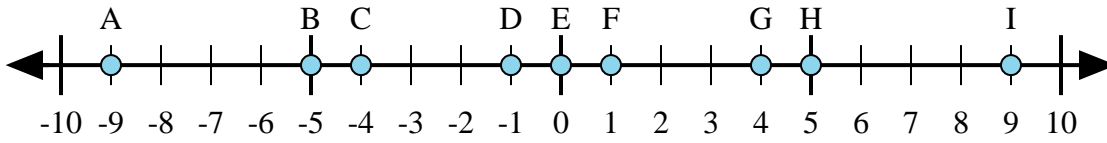




Bestimmen Sie, welcher Buchstabe im Zahlenstrahl die Antwort auf jedes Problem am besten darstellt.

**Antworten**



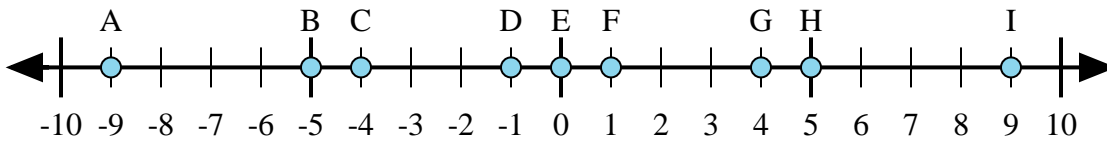
1)  $(-5) + 4 =$

2)  $(-4) + (-5) =$

3)  $4 + 5 =$

4)  $(-4) + 5 =$

5)  $5 + (-4) =$



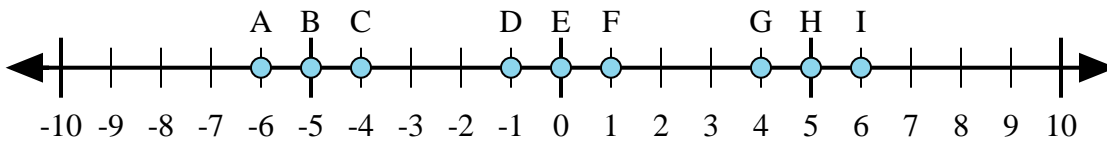
6)  $(-5) + (-4) =$

7)  $5 + (-4) =$

8)  $4 + (-5) =$

9)  $(-5) + 4 =$

10)  $5 + 4 =$



11)  $(-5) + (-1) =$

12)  $(-5) + 1 =$

13)  $5 + 1 =$

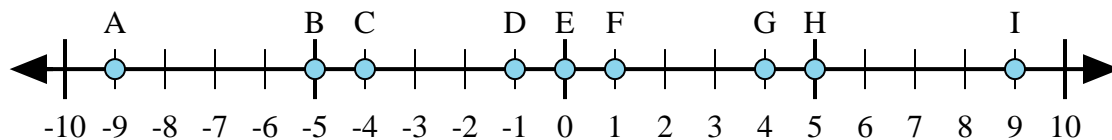
14)  $1 + (-5) =$

15)  $(-1) + 5 =$

1. \_\_\_\_\_
2. \_\_\_\_\_
3. \_\_\_\_\_
4. \_\_\_\_\_
5. \_\_\_\_\_
6. \_\_\_\_\_
7. \_\_\_\_\_
8. \_\_\_\_\_
9. \_\_\_\_\_
10. \_\_\_\_\_
11. \_\_\_\_\_
12. \_\_\_\_\_
13. \_\_\_\_\_
14. \_\_\_\_\_
15. \_\_\_\_\_



Bestimmen Sie, welcher Buchstabe im Zahlenstrahl die Antwort auf jedes Problem am besten darstellt.



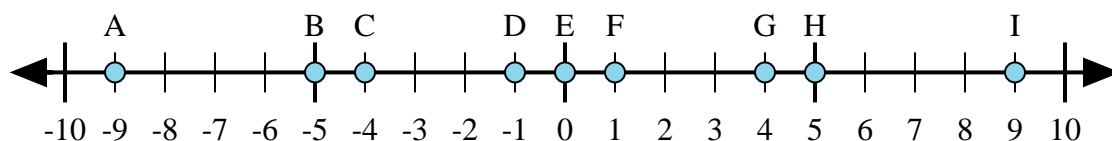
1)  $(-5) + 4 =$

2)  $(-4) + (-5) =$

3)  $4 + 5 =$

4)  $(-4) + 5 =$

5)  $5 + (-4) =$



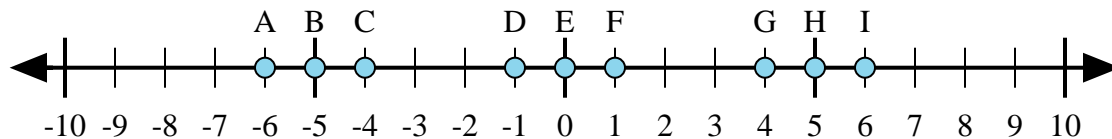
6)  $(-5) + (-4) =$

7)  $5 + (-4) =$

8)  $4 + (-5) =$

9)  $(-5) + 4 =$

10)  $5 + 4 =$



11)  $(-5) + (-1) =$

12)  $(-5) + 1 =$

13)  $5 + 1 =$

14)  $1 + (-5) =$

15)  $(-1) + 5 =$

**Antworten**1. **D**2. **A**3. **I**4. **F**5. **F**6. **A**7. **F**8. **D**9. **D**10. **I**11. **A**12. **C**13. **I**14. **C**15. **G**