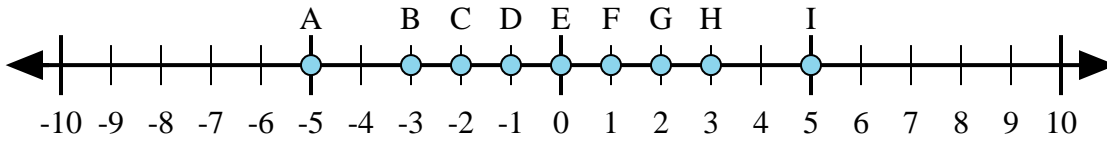




Bestimmen Sie, welcher Buchstabe im Zahlenstrahl die Antwort auf jedes Problem am besten darstellt.

Antworten



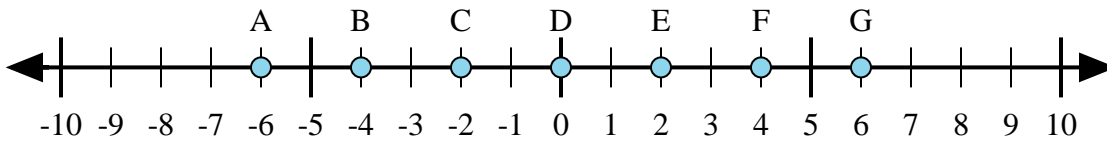
1) $2 + 3 =$

2) $2 + (-3) =$

3) $3 + (-2) =$

4) $(-2) + 3 =$

5) $(-3) + 2 =$



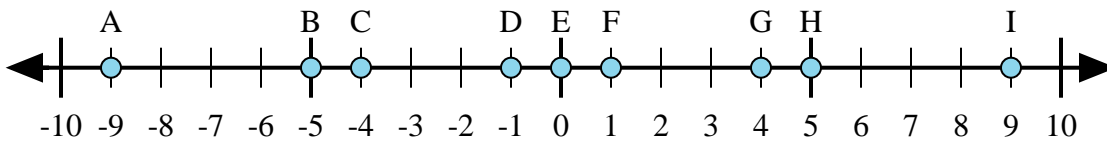
6) $4 + (-2) =$

7) $2 + 4 =$

8) $(-2) + 4 =$

9) $(-4) + 2 =$

10) $(-2) + (-4) =$



11) $5 + (-4) =$

12) $4 + (-5) =$

13) $4 + 5 =$

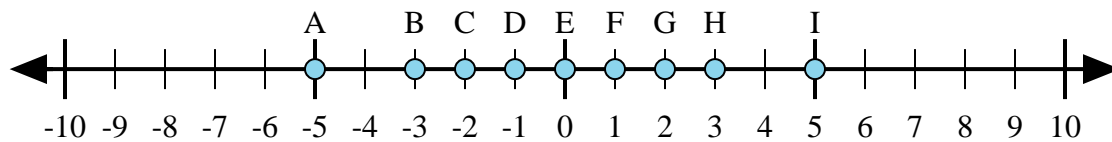
14) $(-5) + 4 =$

15) $(-4) + 5 =$

1. _____
2. _____
3. _____
4. _____
5. _____
6. _____
7. _____
8. _____
9. _____
10. _____
11. _____
12. _____
13. _____
14. _____
15. _____



Bestimmen Sie, welcher Buchstabe im Zahlenstrahl die Antwort auf jedes Problem am besten darstellt.



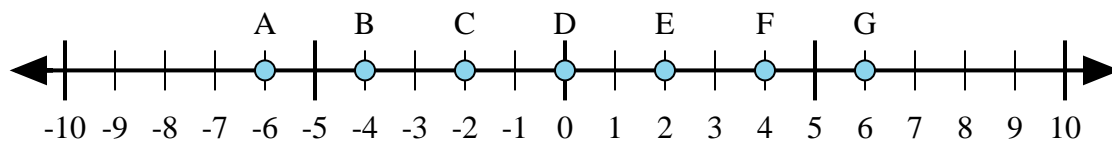
1) $2 + 3 =$

2) $2 + (-3) =$

3) $3 + (-2) =$

4) $(-2) + 3 =$

5) $(-3) + 2 =$



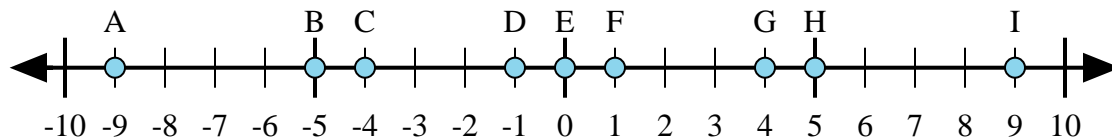
6) $4 + (-2) =$

7) $2 + 4 =$

8) $(-2) + 4 =$

9) $(-4) + 2 =$

10) $(-2) + (-4) =$



11) $5 + (-4) =$

12) $4 + (-5) =$

13) $4 + 5 =$

14) $(-5) + 4 =$

15) $(-4) + 5 =$

Antworten1. **I**2. **D**3. **F**4. **F**5. **D**6. **E**7. **G**8. **E**9. **C**10. **A**11. **F**12. **D**13. **I**14. **D**15. **F**