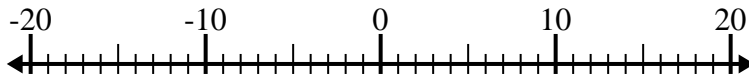




Löse jede Aufgabe. Benutze den Zahlenstrahl, falls du ihn brauchst.

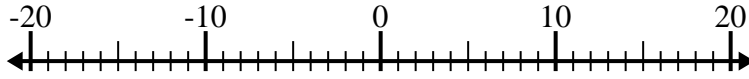
**Antworten**

1)  $(-8) + (-6) =$  \_\_\_\_\_



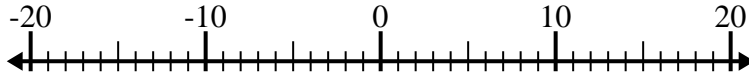
1. \_\_\_\_\_

2)  $2 - (-13) =$  \_\_\_\_\_



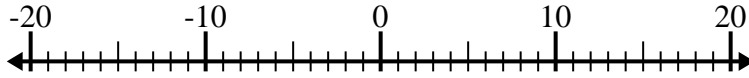
2. \_\_\_\_\_

3)  $(-11) - 2 =$  \_\_\_\_\_



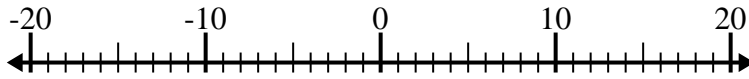
3. \_\_\_\_\_

4)  $(-11) - (-4) =$  \_\_\_\_\_



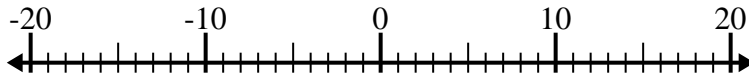
4. \_\_\_\_\_

5)  $(-9) - (-7) =$  \_\_\_\_\_



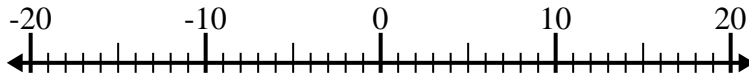
5. \_\_\_\_\_

6)  $(-9) + (-6) =$  \_\_\_\_\_



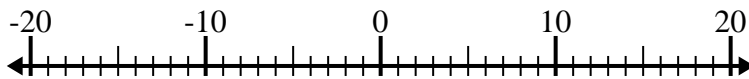
6. \_\_\_\_\_

7)  $7 + (-2) =$  \_\_\_\_\_



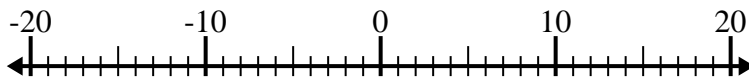
7. \_\_\_\_\_

8)  $8 - (-6) =$  \_\_\_\_\_



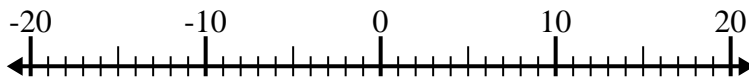
8. \_\_\_\_\_

9)  $6 + (-4) =$  \_\_\_\_\_



9. \_\_\_\_\_

10)  $(-7) - 8 =$  \_\_\_\_\_



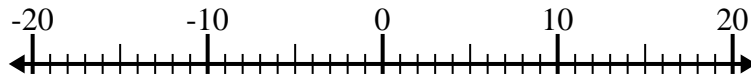
10. \_\_\_\_\_



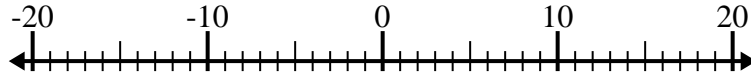
Löse jede Aufgabe. Benutze den Zahlenstrahl, falls du ihn brauchst.

**Antworten**

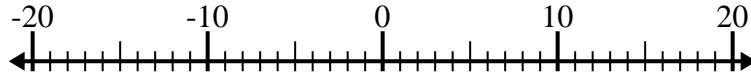
1)  $(-8) + (-6) = \underline{-14}$

1. **-14**

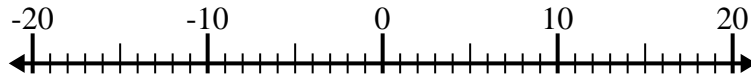
2)  $2 - (-13) = \underline{15}$

2. **15**

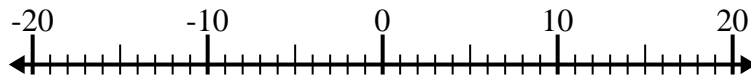
3)  $(-11) - 2 = \underline{-13}$

3. **-13**

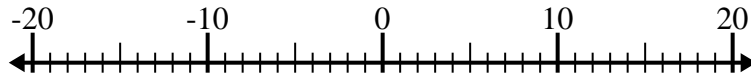
4)  $(-11) - (-4) = \underline{-7}$

4. **-7**

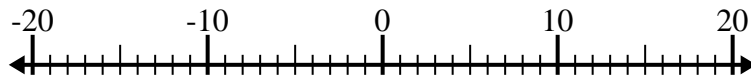
5)  $(-9) - (-7) = \underline{-2}$

5. **-2**

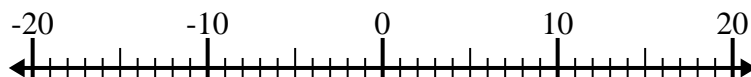
6)  $(-9) + (-6) = \underline{-15}$

6. **-15**

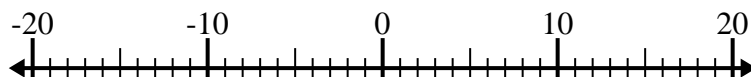
7)  $7 + (-2) = \underline{5}$

7. **5**

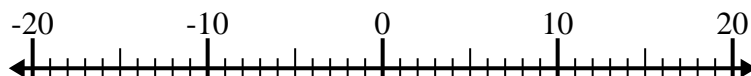
8)  $8 - (-6) = \underline{14}$

8. **14**

9)  $6 + (-4) = \underline{2}$

9. **2**

10)  $(-7) - 8 = \underline{-15}$

10. **-15**