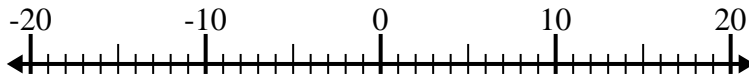




Löse jede Aufgabe. Benutze den Zahlenstrahl, falls du ihn brauchst.

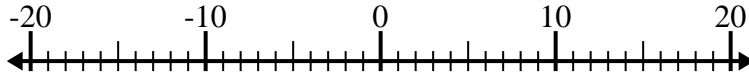
Antworten

1) $8 - (-12) =$ _____



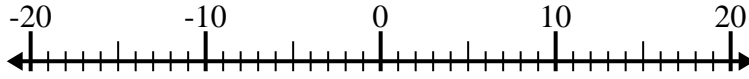
1. _____

2) $(-8) + (-6) =$ _____



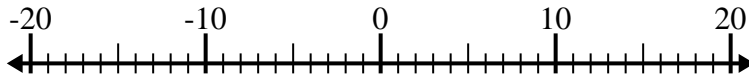
2. _____

3) $12 + (-2) =$ _____



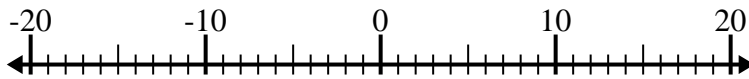
3. _____

4) $(-2) + (-13) =$ _____



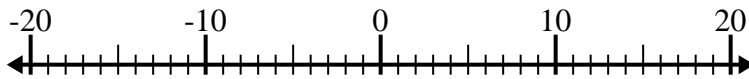
4. _____

5) $(-6) + 8 =$ _____



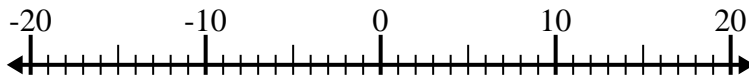
5. _____

6) $(-5) - 10 =$ _____



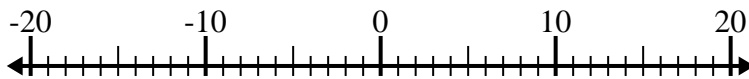
6. _____

7) $(-14) - (-8) =$ _____



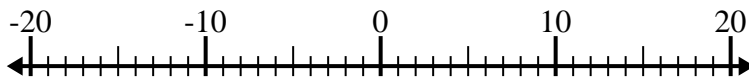
7. _____

8) $5 - (-2) =$ _____



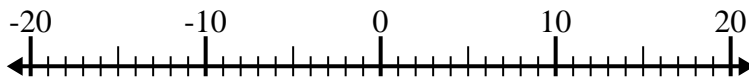
8. _____

9) $(-11) - (-14) =$ _____



9. _____

10) $14 + (-10) =$ _____



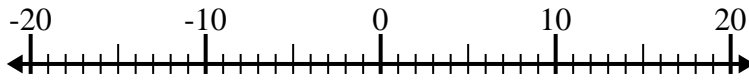
10. _____



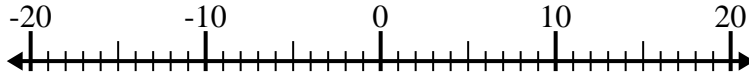
Löse jede Aufgabe. Benutze den Zahlenstrahl, falls du ihn brauchst.

Antworten

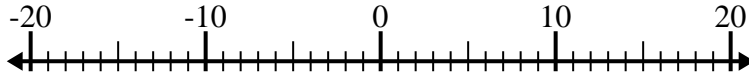
1) $8 - (-12) = \underline{20}$

1. **20**

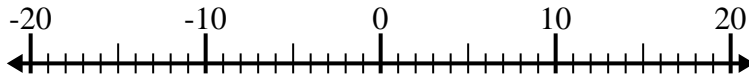
2) $(-8) + (-6) = \underline{-14}$

2. **-14**

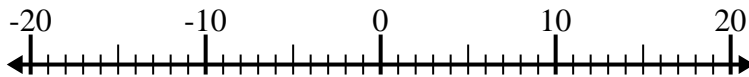
3) $12 + (-2) = \underline{10}$

3. **10**

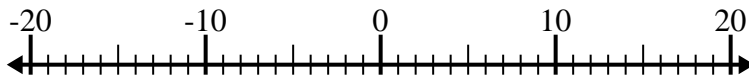
4) $(-2) + (-13) = \underline{-15}$

4. **-15**

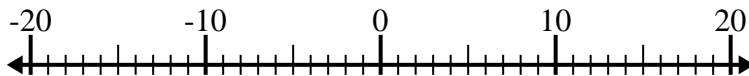
5) $(-6) + 8 = \underline{2}$

5. **2**

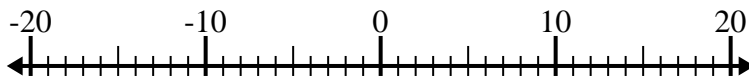
6) $(-5) - 10 = \underline{-15}$

6. **-15**

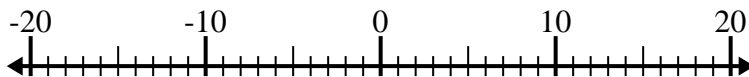
7) $(-14) - (-8) = \underline{-6}$

7. **-6**

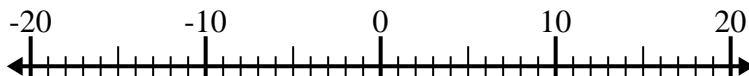
8) $5 - (-2) = \underline{7}$

8. **7**

9) $(-11) - (-14) = \underline{3}$

9. **3**

10) $14 + (-10) = \underline{4}$

10. **4**