



Stelle fest, wie man die gezeigten Gruppen als eine Multiplikationsaufgabe ausdrücken könnte.

Antworten

Bsp)

Bsp. **10•10=100**

1. _____

2. _____

3. _____

4. _____

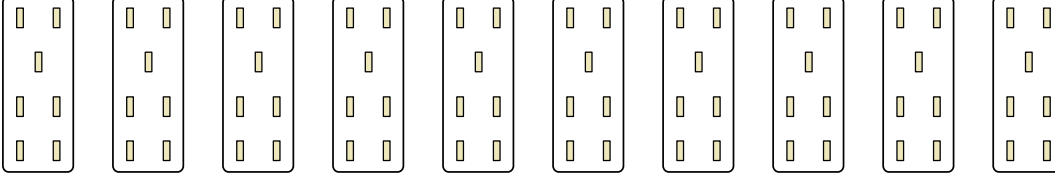
5. _____

6. _____

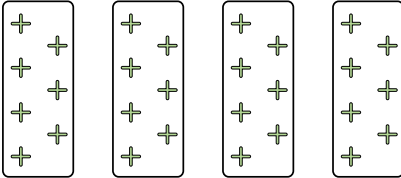
7. _____

8. _____


1)



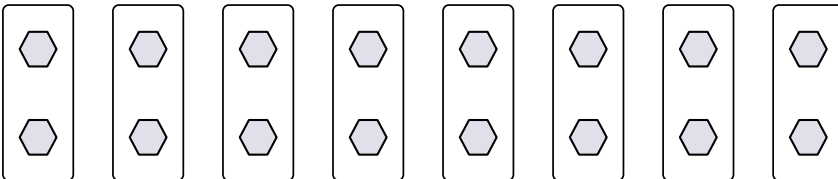
2)



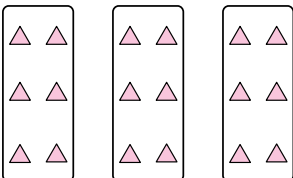
3)



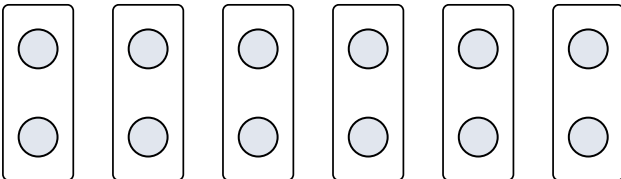
4)



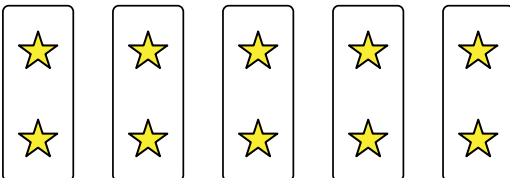
5)




6)



7)




8)



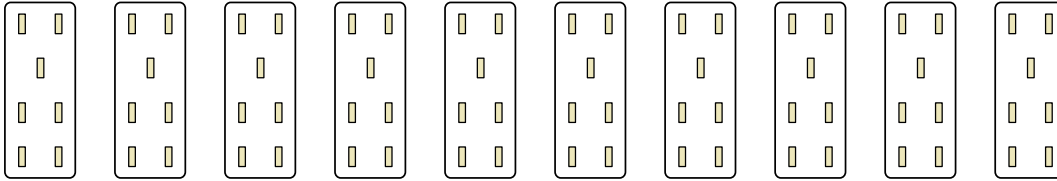


Stelle fest, wie man die gezeigten Gruppen als eine Multiplikationsaufgabe ausdrücken könnte.

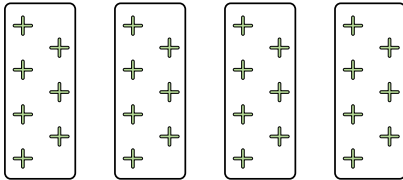
Bsp)




1)



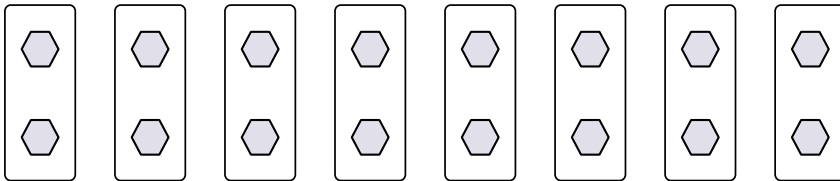
2)



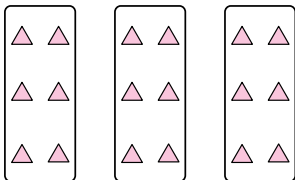
3)



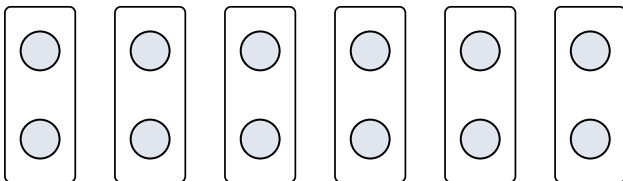
4)



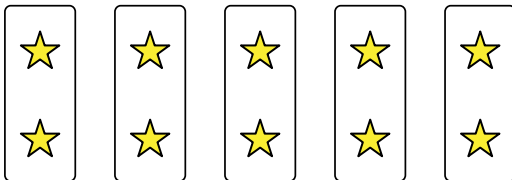
5)




6)



7)



8)



Antworten

Bsp. $10 \cdot 10 = 100$

1. $10 \cdot 7 = 70$

2. $4 \cdot 7 = 28$

3. $10 \cdot 6 = 60$

4. $8 \cdot 2 = 16$

5. $3 \cdot 6 = 18$

6. $6 \cdot 2 = 12$

7. $5 \cdot 2 = 10$

8. $5 \cdot 7 = 35$