



Stelle fest, wie man die gezeigten Gruppen als eine Multiplikationsaufgabe ausdrücken könnte.

Antworten

Bsp)

Bsp. **5•8=40**

1. _____

2. _____

3. _____

4. _____

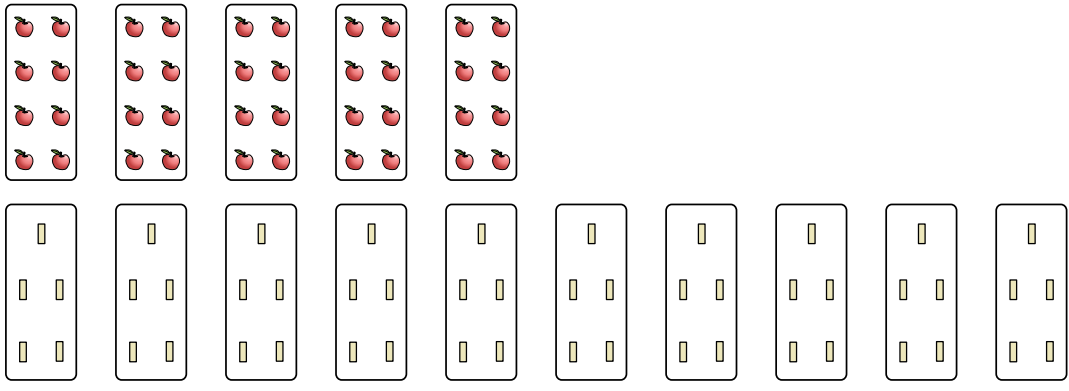
5. _____

6. _____

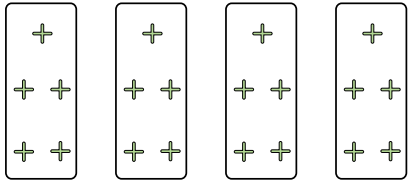
7. _____

8. _____


1)



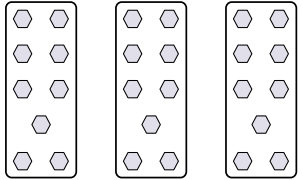
2)



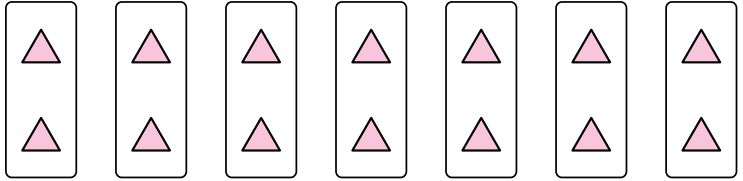
3)



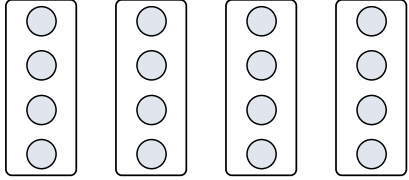
4)




5)



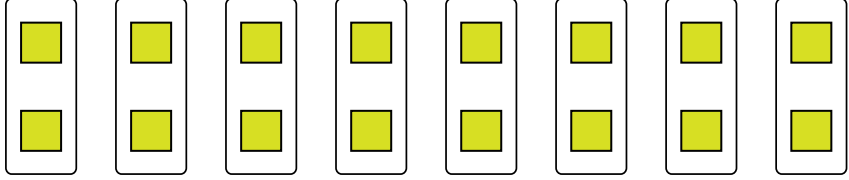
6)



7)



8)






Stelle fest, wie man die gezeigten Gruppen als eine Multiplikationsaufgabe ausdrücken könnte.

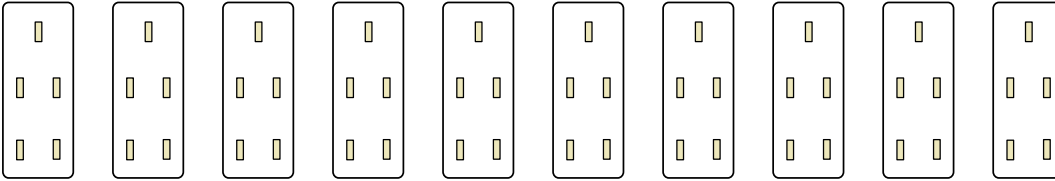
Antworten

Bsp)



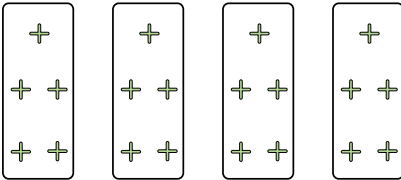
Bsp. $5 \cdot 8 = 40$

1)




1. $10 \cdot 5 = 50$

2)



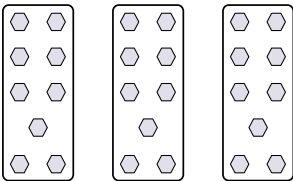
2. $4 \cdot 5 = 20$

3)



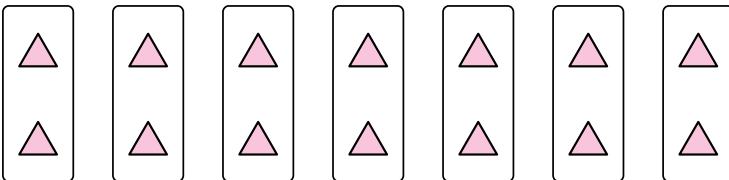
3. $2 \cdot 8 = 16$

4)



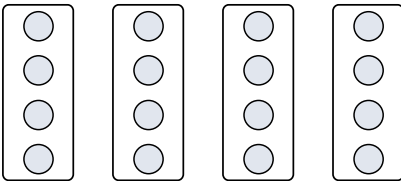
4. $3 \cdot 9 = 27$

5)




5. $7 \cdot 2 = 14$

6)



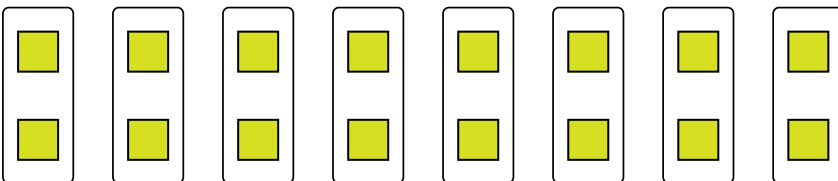
6. $4 \cdot 4 = 16$

7)



7. $2 \cdot 2 = 4$

8)



8. $8 \cdot 2 = 16$