



Stelle fest, wie man die gezeigten Gruppen als eine Multiplikationsaufgabe ausdrücken könnte.

Antworten

Bsp)

Bsp. $8 \cdot 5 = 40$

1)

1. _____

2. _____

3. _____

4. _____

2)

5. _____

6. _____

3)

7. _____

8. _____



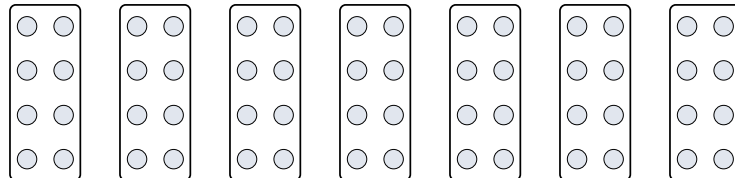
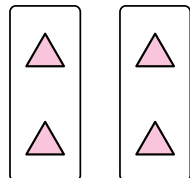
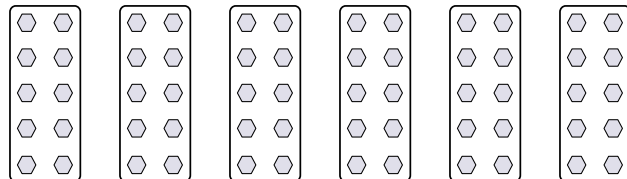

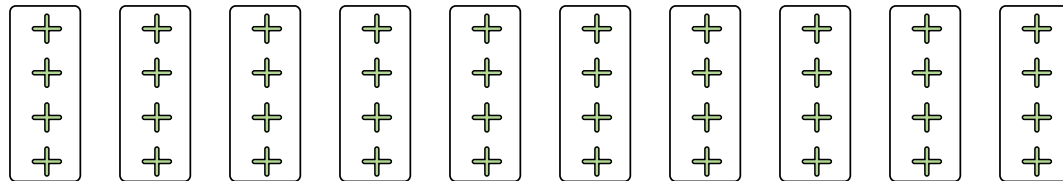

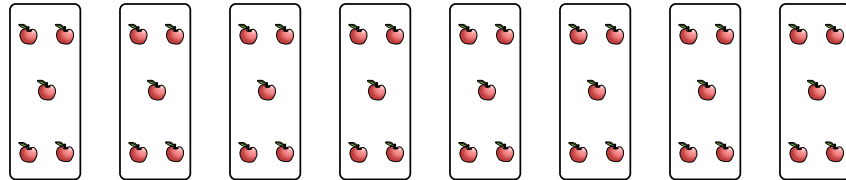
4)

5)

6)


7)


8)







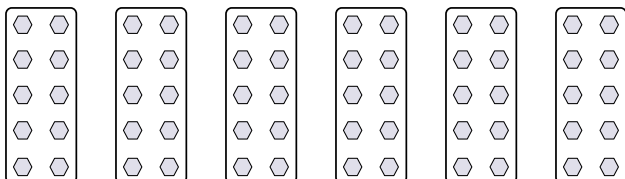
Stelle fest, wie man die gezeigten Gruppen als eine Multiplikationsaufgabe ausdrücken könnte.

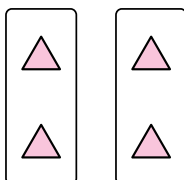
Bsp) 

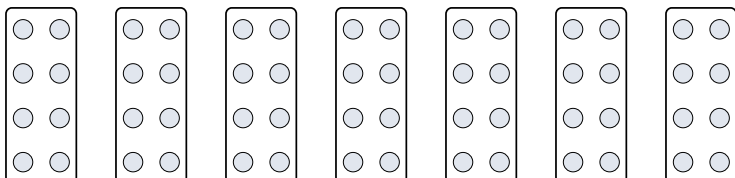
1) 


2) 


3) 

4) 

5) 

6) 

7) 

8) 

Antworten

Bsp. $8 \cdot 5 = 40$

1. $3 \cdot 7 = 21$

2. $10 \cdot 4 = 40$

3. $7 \cdot 4 = 28$

4. $6 \cdot 10 = 60$

5. $2 \cdot 2 = 4$

6. $7 \cdot 8 = 56$

7. $3 \cdot 10 = 30$

8. $7 \cdot 9 = 63$