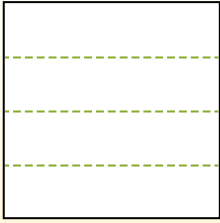


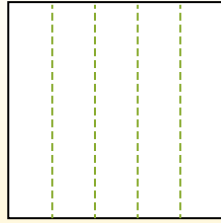


Teile die Form wie beschrieben auf und zähle dann die Anzahl der Felder.

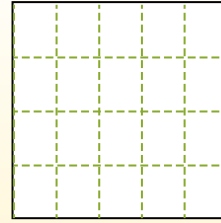
Las filas van de izquierda a derecha.




Las columnas van de arriba a abajo.



Aqui tem 4 linhas e 5 colunas .  
Existem 20 caixas no total.




1) 3 Reihen  
3 Spalten




2) 3 Reihen  
2 Spalten



3) 2 Reihen  
2 Spalten




4) 4 Reihen  
3 Spalten




5) 4 Reihen  
2 Spalten




6) 4 Reihen  
4 Spalten




7) 3 Reihen  
5 Spalten



8) 2 Reihen  
5 Spalten



9) 2 Reihen  
4 Spalten



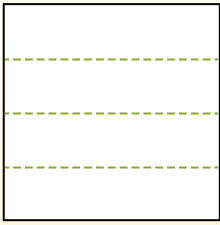
**Antworten**

- 1. \_\_\_\_\_
- 2. \_\_\_\_\_
- 3. \_\_\_\_\_
- 4. \_\_\_\_\_
- 5. \_\_\_\_\_
- 6. \_\_\_\_\_
- 7. \_\_\_\_\_
- 8. \_\_\_\_\_
- 9. \_\_\_\_\_

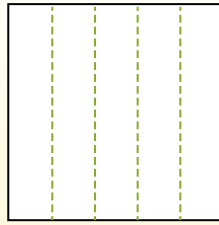


Teile die Form wie beschrieben auf und zähle dann die Anzahl der Felder.

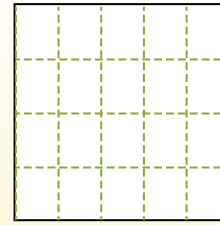
Las filas van de izquierda a derecha.



Las columnas van de arriba a abajo.

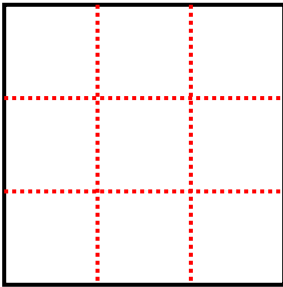


Aqui tem 4 linhas e 5 colunas. Existem 20 caixas no total.

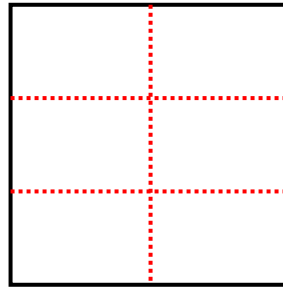


**Antworten**

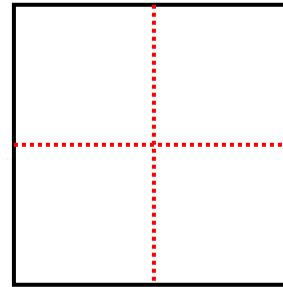
1) 3 Reihen  
3 Spalten



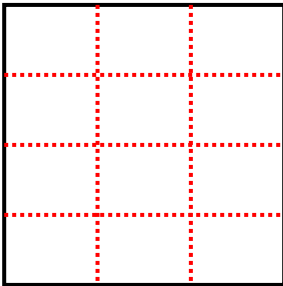
2) 3 Reihen  
2 Spalten



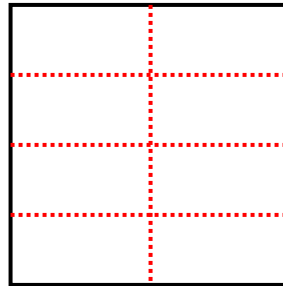
3) 2 Reihen  
2 Spalten



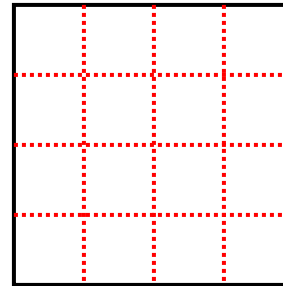
4) 4 Reihen  
3 Spalten



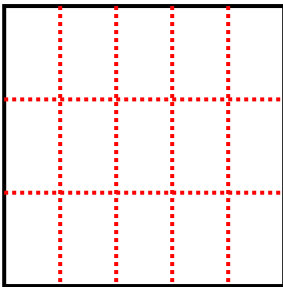
5) 4 Reihen  
2 Spalten



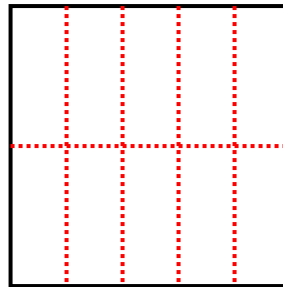
6) 4 Reihen  
4 Spalten



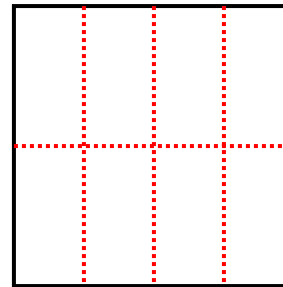
7) 3 Reihen  
5 Spalten



8) 2 Reihen  
5 Spalten



9) 2 Reihen  
4 Spalten



- 1. 9
- 2. 6
- 3. 4
- 4. 12
- 5. 8
- 6. 16
- 7. 15
- 8. 10
- 9. 8