





Benutze die vorgegebene Anordnung um jede Aufgabe zu lösen.


1)  $20 \cdot 23 =$




2)  $28 \cdot 20 =$




3)  $24 \cdot 20 =$




4)  $26 \cdot 20 =$



5)  $20 \cdot 25 =$



6)  $20 \cdot 24 =$



**Antworten**

1. \_\_\_\_\_

2. \_\_\_\_\_

3. \_\_\_\_\_

4. \_\_\_\_\_

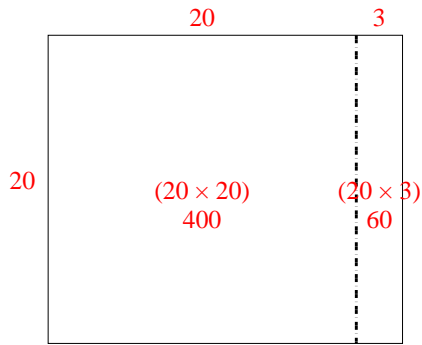
5. \_\_\_\_\_

6. \_\_\_\_\_

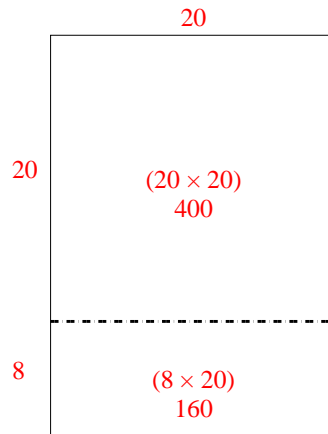


Benutze die vorgegebene Anordnung um jede Aufgabe zu lösen.

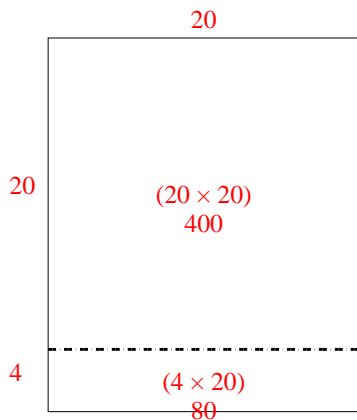
1)  $20 \cdot 23 =$



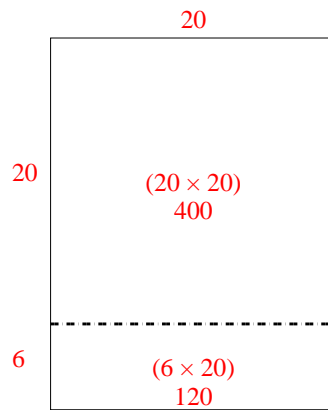
2)  $28 \cdot 20 =$



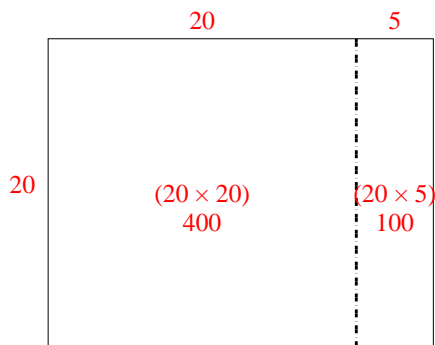
3)  $24 \cdot 20 =$



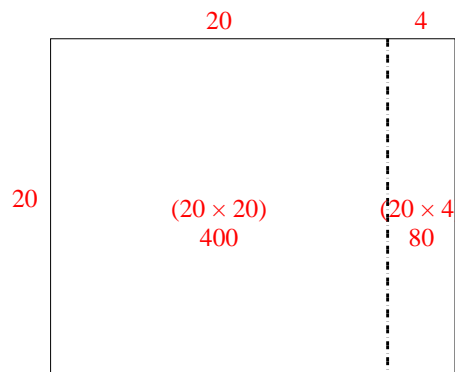
4)  $26 \cdot 20 =$



5)  $20 \cdot 25 =$



6)  $20 \cdot 24 =$



**Antworten**

- 1. 460
- 2. 560
- 3. 480
- 4. 520
- 5. 500
- 6. 480