



Benutze die vorgegebene Anordnung um jede Aufgabe zu lösen.

**Antworten**

1)  $36 \cdot 55 =$

2)  $42 \cdot 26 =$

1. \_\_\_\_\_



2. \_\_\_\_\_

3. \_\_\_\_\_

4. \_\_\_\_\_


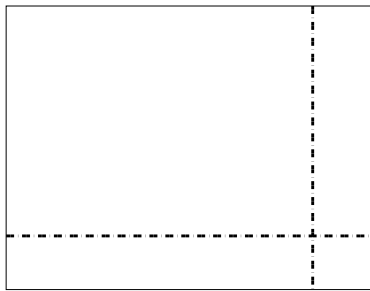
5. \_\_\_\_\_

6. \_\_\_\_\_





3)  $37 \cdot 48 =$

4)  $44 \cdot 59 =$



5)  $46 \cdot 39 =$

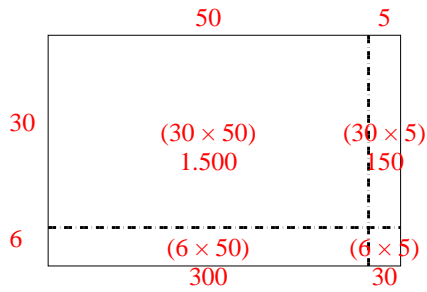
6)  $47 \cdot 59 =$



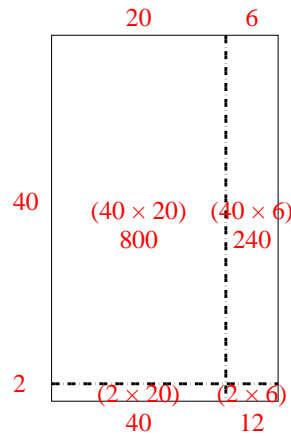


Benutze die vorgegebene Anordnung um jede Aufgabe zu lösen.

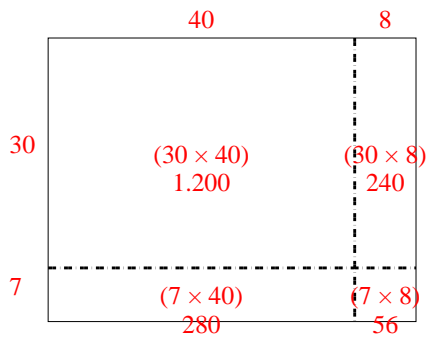
1)  $36 \cdot 55 =$



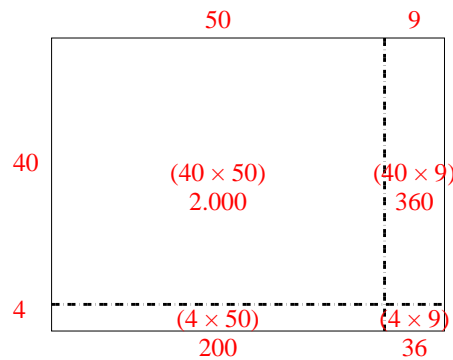
2)  $42 \cdot 26 =$



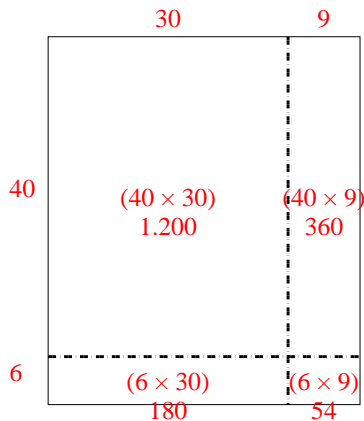
3)  $37 \cdot 48 =$



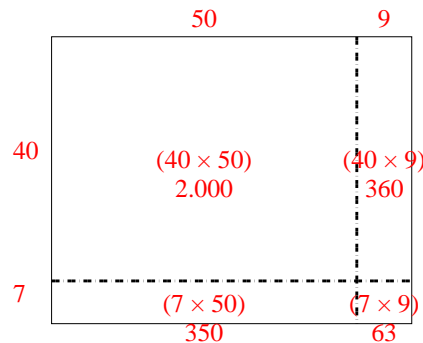
4)  $44 \cdot 59 =$



5)  $46 \cdot 39 =$



6)  $47 \cdot 59 =$

**Antworten**1. **1.980**2. **1.092**3. **1.776**4. **2.596**5. **1.794**6. **2.773**