





Benutze die vorgegebene Anordnung um jede Aufgabe zu lösen.

Antworten

1) $43 \cdot 28 =$



2) $37 \cdot 18 =$



1. _____

2. _____

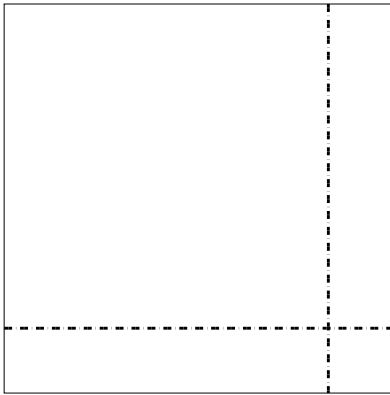
3. _____

4. _____

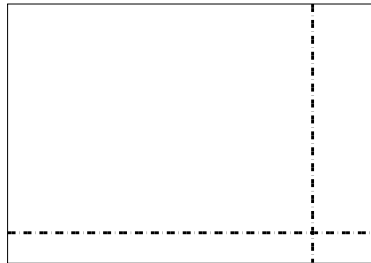
5. _____

6. _____


3) $36 \cdot 36 =$




4) $34 \cdot 49 =$



5) $46 \cdot 54 =$



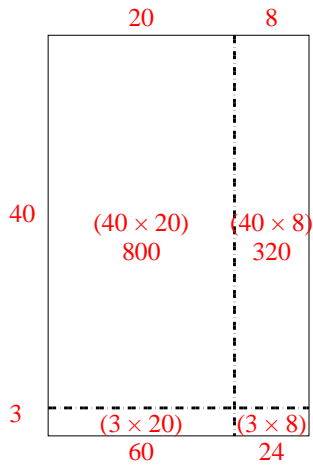
6) $44 \cdot 52 =$



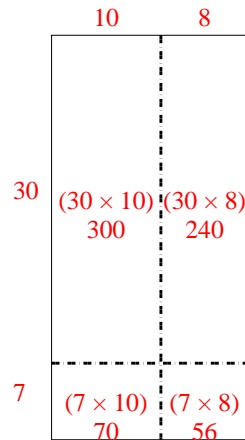


Benutze die vorgegebene Anordnung um jede Aufgabe zu lösen.

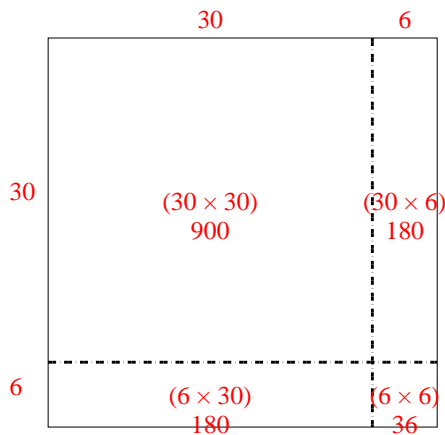
1) $43 \cdot 28 =$



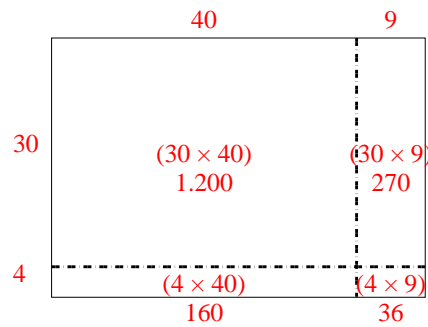
2) $37 \cdot 18 =$



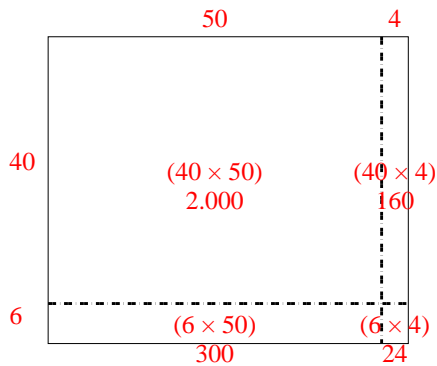
3) $36 \cdot 36 =$



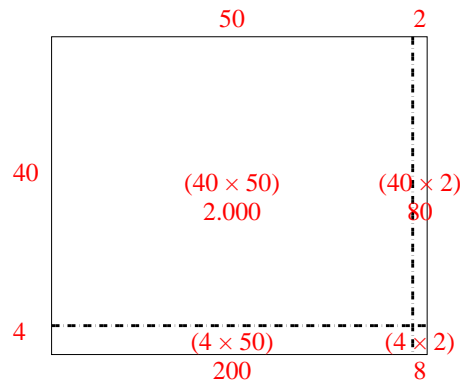
4) $34 \cdot 49 =$



5) $46 \cdot 54 =$



6) $44 \cdot 52 =$

**Antworten**1. **1.204**2. **666**3. **1.296**4. **1.666**5. **2.484**6. **2.288**