



Benutze die vorgegebene Anordnung um jede Aufgabe zu lösen.

Antworten

1) $52 \cdot 58 =$

2) $36 \cdot 33 =$

1. _____



2. _____

3. _____

4. _____



5. _____

6. _____




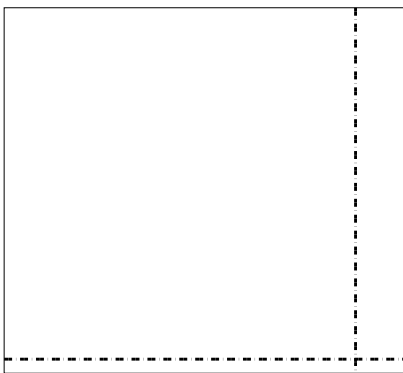
3) $33 \cdot 46 =$

4) $45 \cdot 68 =$



5) $52 \cdot 57 =$

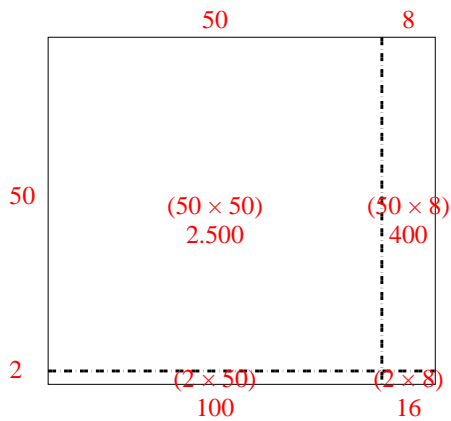
6) $42 \cdot 37 =$



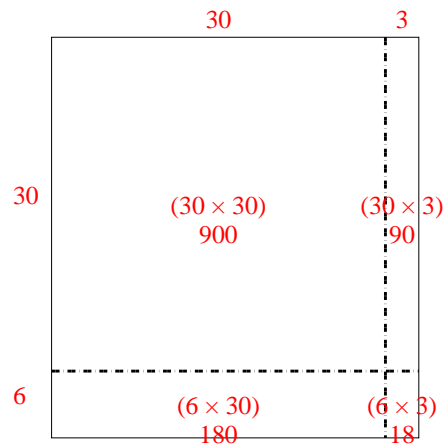


Benutze die vorgegebene Anordnung um jede Aufgabe zu lösen.

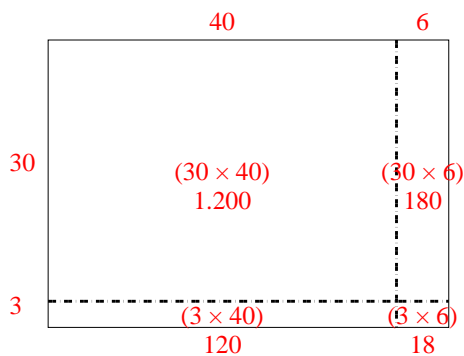
1) $52 \cdot 58 =$



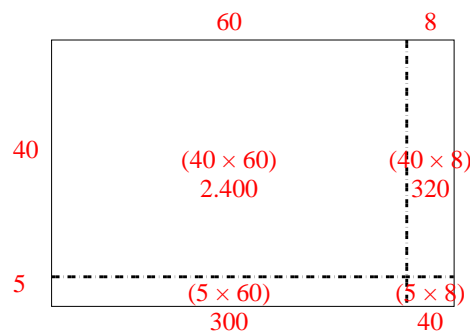
2) $36 \cdot 33 =$



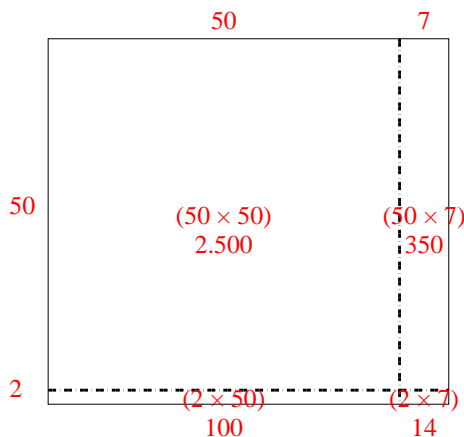
3) $33 \cdot 46 =$



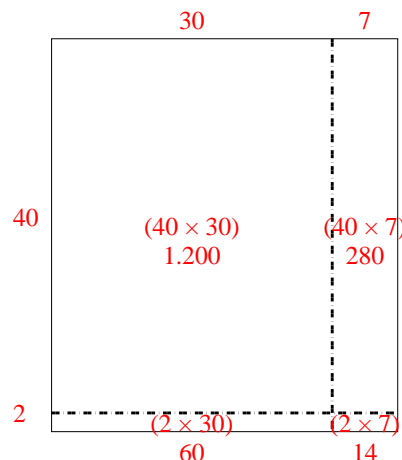
4) $45 \cdot 68 =$



5) $52 \cdot 57 =$



6) $42 \cdot 37 =$

**Antworten**1. **3.016**2. **1.188**3. **1.518**4. **3.060**5. **2.964**6. **1.554**