





Benutze die vorgegebene Anordnung um jede Aufgabe zu lösen.

**Antworten**

1)  $63 \cdot 69 =$



2)  $66 \cdot 53 =$



1. \_\_\_\_\_

2. \_\_\_\_\_


3. \_\_\_\_\_

4. \_\_\_\_\_


5. \_\_\_\_\_

6. \_\_\_\_\_


3)  $42 \cdot 53 =$




4)  $53 \cdot 72 =$



5)  $62 \cdot 75 =$



6)  $74 \cdot 88 =$

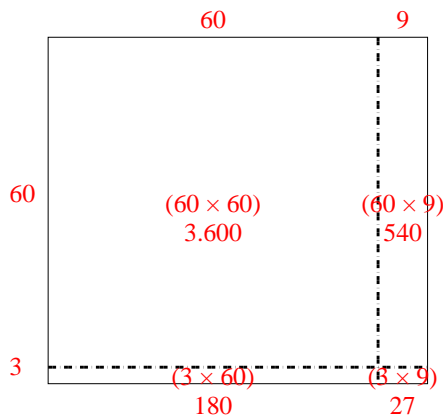




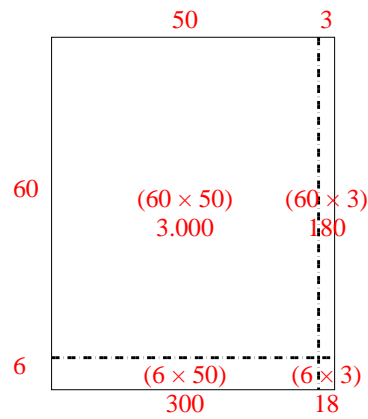
Benutze die vorgegebene Anordnung um jede Aufgabe zu lösen.

**Antworten**

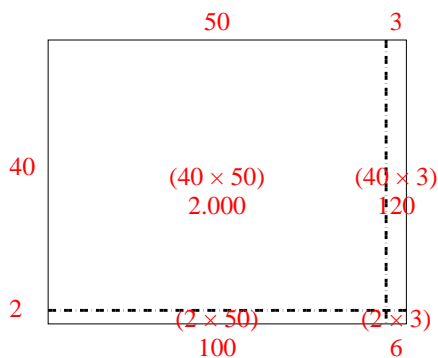
1)  $63 \cdot 69 =$



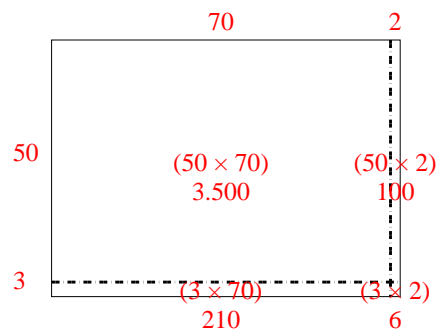
2)  $66 \cdot 53 =$

1. **4.347**2. **3.498**3. **2.226**4. **3.816**5. **4.650**6. **6.512**

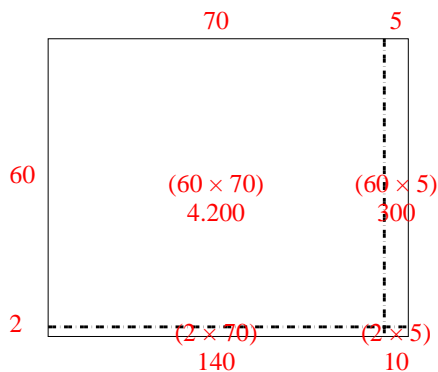
3)  $42 \cdot 53 =$



4)  $53 \cdot 72 =$



5)  $62 \cdot 75 =$



6)  $74 \cdot 88 =$

