





Benutze die vorgegebenen Anordnungen um jede Aufgabe zu lösen.

Antworten

1) $19 \cdot 10 =$



2) $14 \cdot 10 =$



1. _____

2. _____


3. _____

4. _____


5. _____

6. _____


3) $17 \cdot 10 =$




4) $10 \cdot 15 =$



5) $16 \cdot 10 =$



6) $10 \cdot 16 =$

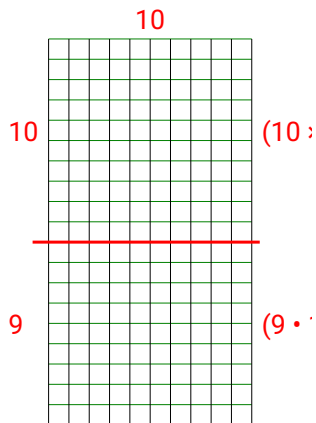




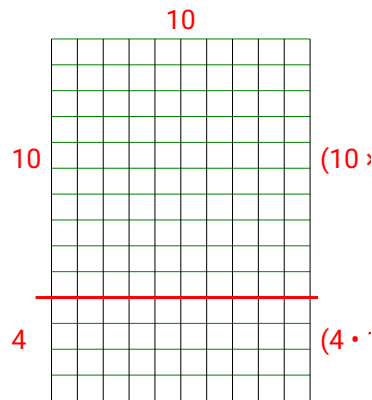
Benutze die vorgegebenen Anordnungen um jede Aufgabe zu lösen.

Antworten

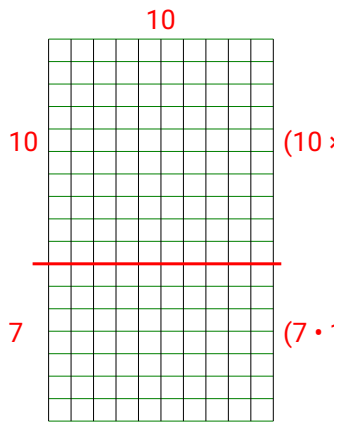
1) $19 \cdot 10 =$



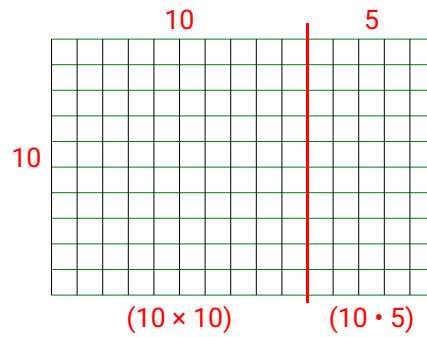
2) $14 \cdot 10 =$

1. **190**2. **140**3. **170**4. **150**5. **160**6. **160**

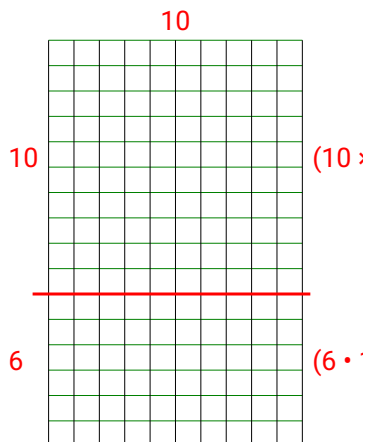
3) $17 \cdot 10 =$



4) $10 \cdot 15 =$



5) $16 \cdot 10 =$



6) $10 \cdot 16 =$

