




Schreibe eine Gleichung, die der Anordnung entspricht und finde die richtige Anzahl der Formen.

**Antworten**



Bsp.  $2 \cdot 3 = 6$

1. \_\_\_\_\_

2. \_\_\_\_\_

3. \_\_\_\_\_

4. \_\_\_\_\_

5. \_\_\_\_\_

6. \_\_\_\_\_

7. \_\_\_\_\_

8. \_\_\_\_\_

9. \_\_\_\_\_

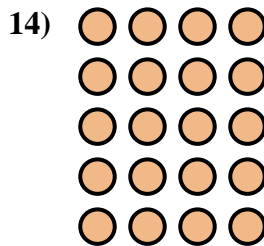
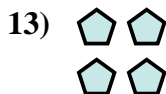


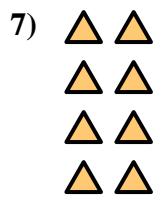
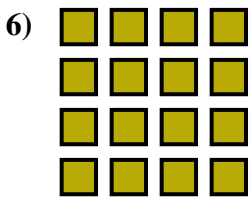
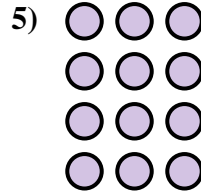

10. \_\_\_\_\_

11. \_\_\_\_\_

12. \_\_\_\_\_



13. \_\_\_\_\_

14. \_\_\_\_\_





Schreibe eine Gleichung, die der Anordnung entspricht und finde die richtige Anzahl der Formen.



**Antworten**

Bsp.  $2 \cdot 3 = 6$

1.  $3 \cdot 5 = 15$

2.  $3 \cdot 3 = 9$

3.  $2 \cdot 5 = 10$

4.  $3 \cdot 2 = 6$

5.  $4 \cdot 3 = 12$

6.  $4 \cdot 4 = 16$

7.  $4 \cdot 2 = 8$

8.  $3 \cdot 4 = 12$

9.  $5 \cdot 5 = 25$

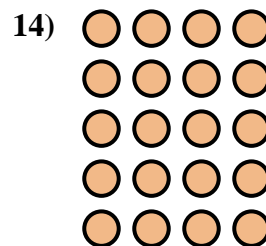
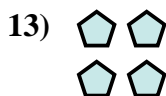


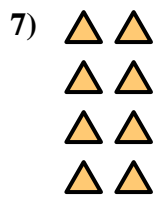
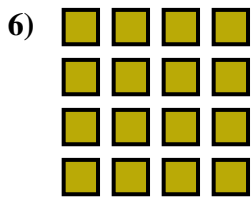
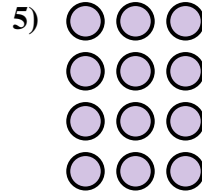

10.  $4 \cdot 5 = 20$

11.  $5 \cdot 2 = 10$

12.  $2 \cdot 4 = 8$

13.  $2 \cdot 2 = 4$

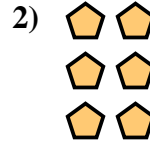
14.  $5 \cdot 4 = 20$





Schreibe eine Gleichung, die der Anordnung entspricht und finde die richtige Anzahl der Formen.

**Antworten**



Bsp.  $2 \cdot 2 = 4$

1. \_\_\_\_\_

2. \_\_\_\_\_

3. \_\_\_\_\_

4. \_\_\_\_\_

5. \_\_\_\_\_

6. \_\_\_\_\_

7. \_\_\_\_\_

8. \_\_\_\_\_

9. \_\_\_\_\_

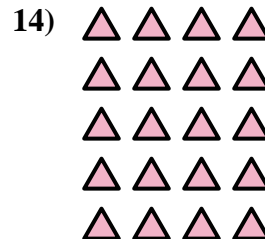
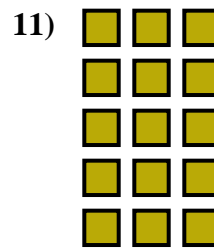




10. \_\_\_\_\_

11. \_\_\_\_\_

12. \_\_\_\_\_

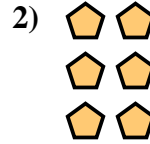
13. \_\_\_\_\_

14. \_\_\_\_\_





Schreibe eine Gleichung, die der Anordnung entspricht und finde die richtige Anzahl der Formen.



Bsp.  $2 \cdot 2 = 4$

1.  $3 \cdot 3 = 9$

2.  $3 \cdot 2 = 6$

3.  $4 \cdot 3 = 12$

4.  $3 \cdot 4 = 12$

5.  $4 \cdot 2 = 8$

6.  $4 \cdot 4 = 16$

7.  $3 \cdot 5 = 15$

8.  $4 \cdot 5 = 20$

9.  $2 \cdot 4 = 8$

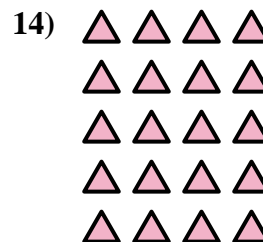
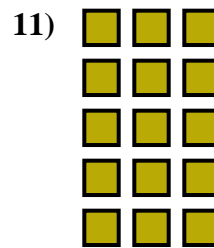




10.  $2 \cdot 3 = 6$

11.  $5 \cdot 3 = 15$

12.  $5 \cdot 2 = 10$

13.  $2 \cdot 5 = 10$

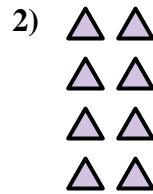
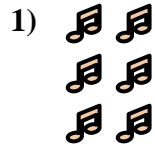
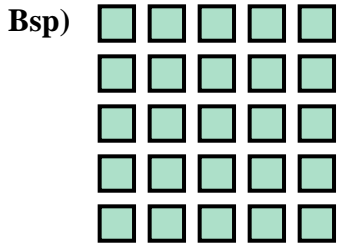
14.  $5 \cdot 4 = 20$





Schreibe eine Gleichung, die der Anordnung entspricht und finde die richtige Anzahl der Formen.

**Antworten**



Bsp.  $5 \cdot 5 = 25$

1. \_\_\_\_\_

2. \_\_\_\_\_

3. \_\_\_\_\_

4. \_\_\_\_\_

5. \_\_\_\_\_

6. \_\_\_\_\_

7. \_\_\_\_\_

8. \_\_\_\_\_

9. \_\_\_\_\_

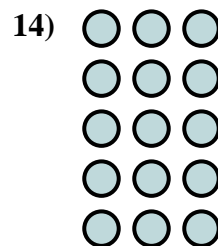
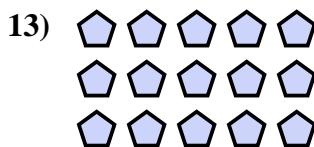
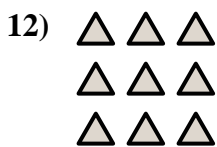
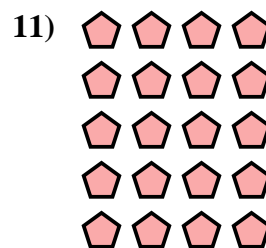



10. \_\_\_\_\_

11. \_\_\_\_\_

12. \_\_\_\_\_

13. \_\_\_\_\_

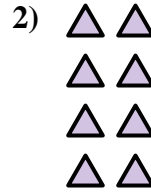
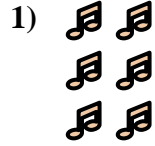
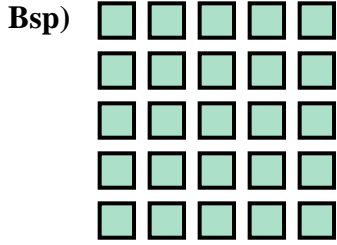
14. \_\_\_\_\_





Schreibe eine Gleichung, die der Anordnung entspricht und finde die richtige Anzahl der Formen.

**Antworten**



Bsp.  $5 \cdot 5 = 25$

1.  $3 \cdot 2 = 6$

2.  $4 \cdot 2 = 8$

3.  $2 \cdot 3 = 6$

4.  $4 \cdot 5 = 20$

5.  $5 \cdot 2 = 10$

6.  $2 \cdot 2 = 4$

7.  $3 \cdot 4 = 12$

8.  $2 \cdot 5 = 10$

9.  $4 \cdot 3 = 12$

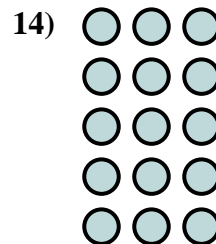
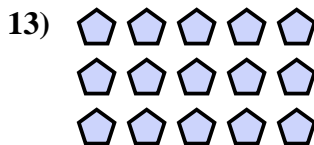
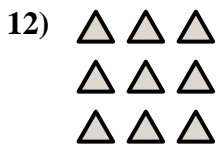
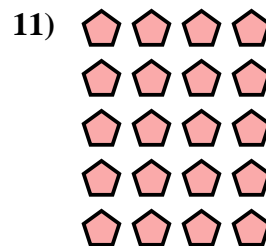
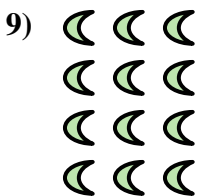


10.  $4 \cdot 4 = 16$

11.  $5 \cdot 4 = 20$

12.  $3 \cdot 3 = 9$

13.  $3 \cdot 5 = 15$



14.  $5 \cdot 3 = 15$





Schreibe eine Gleichung, die der Anordnung entspricht und finde die richtige Anzahl der Formen.

**Antworten**



Bsp.  $5 \cdot 3 = 15$

1. \_\_\_\_\_

2. \_\_\_\_\_

3. \_\_\_\_\_

4. \_\_\_\_\_

5. \_\_\_\_\_

6. \_\_\_\_\_

7. \_\_\_\_\_

8. \_\_\_\_\_

9. \_\_\_\_\_

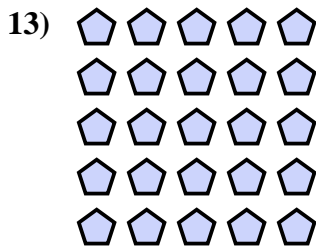

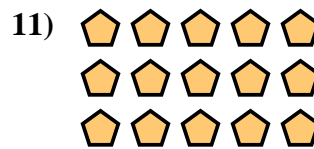
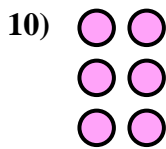

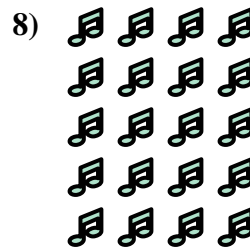
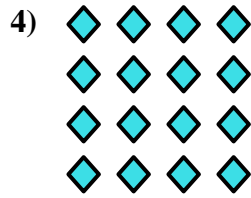

10. \_\_\_\_\_

11. \_\_\_\_\_

12. \_\_\_\_\_

13. \_\_\_\_\_

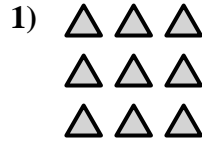

14. \_\_\_\_\_





Schreibe eine Gleichung, die der Anordnung entspricht und finde die richtige Anzahl der Formen.

**Antworten**



Bsp.  $5 \cdot 3 = 15$

1.  $3 \cdot 3 = 9$

2.  $2 \cdot 3 = 6$

3.  $4 \cdot 2 = 8$

4.  $4 \cdot 4 = 16$

5.  $2 \cdot 5 = 10$

6.  $2 \cdot 4 = 8$

7.  $4 \cdot 3 = 12$

8.  $5 \cdot 4 = 20$

9.  $3 \cdot 4 = 12$

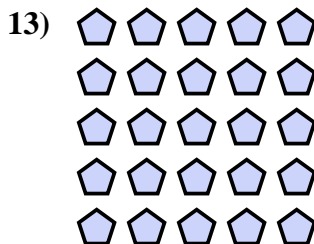


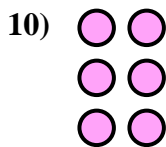

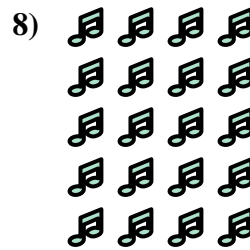
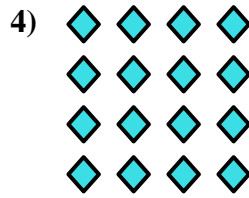

10.  $3 \cdot 2 = 6$

11.  $3 \cdot 5 = 15$

12.  $4 \cdot 5 = 20$

13.  $5 \cdot 5 = 25$

14.  $2 \cdot 2 = 4$

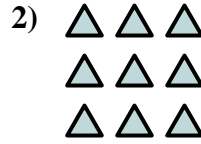







Schreibe eine Gleichung, die der Anordnung entspricht und finde die richtige Anzahl der Formen.

**Antworten**



Bsp.  $2 \cdot 2 = 4$

1. \_\_\_\_\_

2. \_\_\_\_\_

3. \_\_\_\_\_

4. \_\_\_\_\_

5. \_\_\_\_\_

6. \_\_\_\_\_

7. \_\_\_\_\_

8. \_\_\_\_\_

9. \_\_\_\_\_

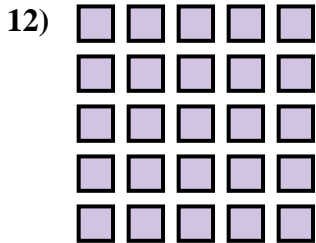
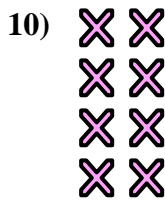

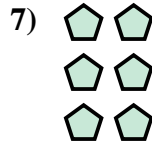

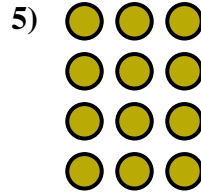

10. \_\_\_\_\_

11. \_\_\_\_\_

12. \_\_\_\_\_

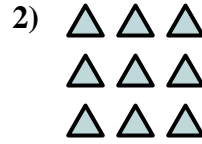

13. \_\_\_\_\_

14. \_\_\_\_\_





Schreibe eine Gleichung, die der Anordnung entspricht und finde die richtige Anzahl der Formen.



Bsp.  $2 \cdot 2 = 4$

1.  $5 \cdot 2 = 10$

2.  $3 \cdot 3 = 9$

3.  $2 \cdot 3 = 6$

4.  $3 \cdot 4 = 12$

5.  $4 \cdot 3 = 12$

6.  $5 \cdot 4 = 20$

7.  $3 \cdot 2 = 6$

8.  $5 \cdot 3 = 15$

9.  $2 \cdot 5 = 10$


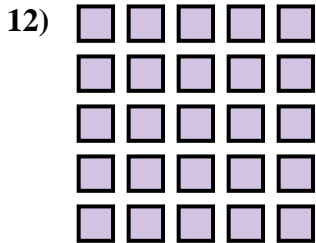
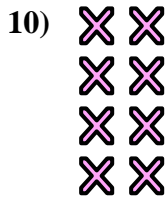
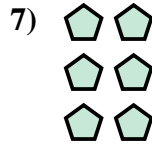

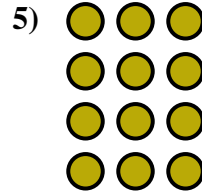

10.  $4 \cdot 2 = 8$

11.  $3 \cdot 5 = 15$

12.  $5 \cdot 5 = 25$

13.  $2 \cdot 4 = 8$

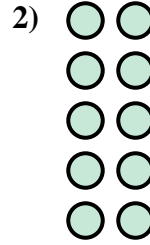
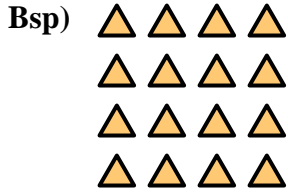
14.  $4 \cdot 4 = 16$





Schreibe eine Gleichung, die der Anordnung entspricht und finde die richtige Anzahl der Formen.

**Antworten**



Bsp.  $4 \cdot 4 = 16$

1. \_\_\_\_\_

2. \_\_\_\_\_

3. \_\_\_\_\_

4. \_\_\_\_\_

5. \_\_\_\_\_

6. \_\_\_\_\_

7. \_\_\_\_\_

8. \_\_\_\_\_

9. \_\_\_\_\_

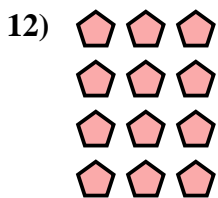


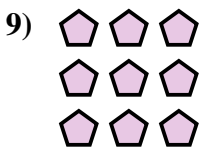
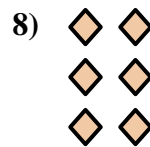



10. \_\_\_\_\_

11. \_\_\_\_\_

12. \_\_\_\_\_

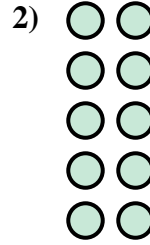
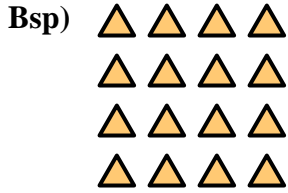
13. \_\_\_\_\_

14. \_\_\_\_\_





Schreibe eine Gleichung, die der Anordnung entspricht und finde die richtige Anzahl der Formen.



Bsp.  $4 \cdot 4 = 16$

1.  $2 \cdot 4 = 8$

2.  $5 \cdot 2 = 10$

3.  $3 \cdot 4 = 12$

4.  $3 \cdot 5 = 15$

5.  $2 \cdot 3 = 6$

6.  $4 \cdot 5 = 20$

7.  $5 \cdot 3 = 15$

8.  $3 \cdot 2 = 6$

9.  $3 \cdot 3 = 9$

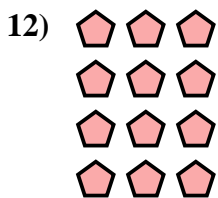


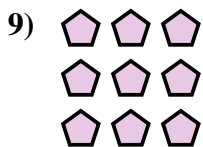
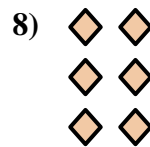



10.  $5 \cdot 5 = 25$

11.  $5 \cdot 4 = 20$

12.  $4 \cdot 3 = 12$

13.  $2 \cdot 2 = 4$


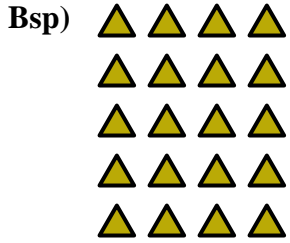
14.  $2 \cdot 5 = 10$





Schreibe eine Gleichung, die der Anordnung entspricht und finde die richtige Anzahl der Formen.

**Antworten**



Bsp.  $5 \cdot 4 = 20$

1. \_\_\_\_\_

2. \_\_\_\_\_

3. \_\_\_\_\_

4. \_\_\_\_\_

5. \_\_\_\_\_

6. \_\_\_\_\_

7. \_\_\_\_\_

8. \_\_\_\_\_

9. \_\_\_\_\_

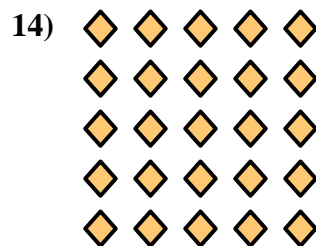

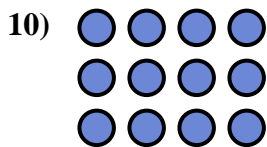



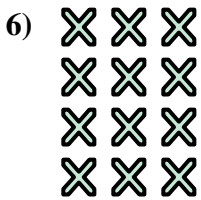
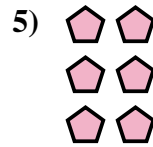


10. \_\_\_\_\_

11. \_\_\_\_\_

12. \_\_\_\_\_


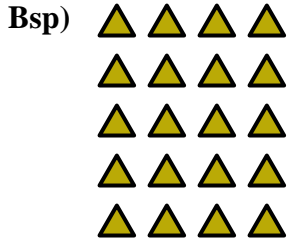
13. \_\_\_\_\_

14. \_\_\_\_\_





Schreibe eine Gleichung, die der Anordnung entspricht und finde die richtige Anzahl der Formen.



Bsp.  $5 \cdot 4 = 20$

1.  $4 \cdot 2 = 8$

2.  $2 \cdot 2 = 4$

3.  $5 \cdot 3 = 15$

4.  $4 \cdot 4 = 16$

5.  $3 \cdot 2 = 6$

6.  $4 \cdot 3 = 12$

7.  $5 \cdot 2 = 10$

8.  $3 \cdot 3 = 9$

9.  $2 \cdot 3 = 6$

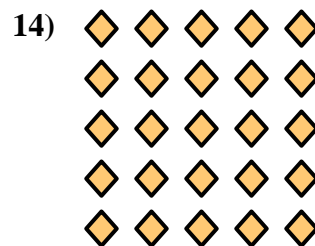



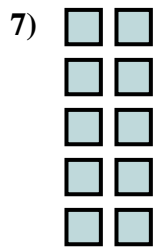
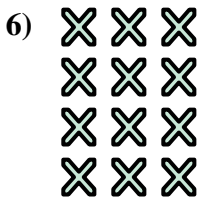
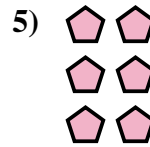


10.  $3 \cdot 4 = 12$

11.  $2 \cdot 5 = 10$

12.  $2 \cdot 4 = 8$

13.  $3 \cdot 5 = 15$


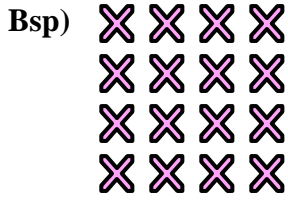
14.  $5 \cdot 5 = 25$





Schreibe eine Gleichung, die der Anordnung entspricht und finde die richtige Anzahl der Formen.

**Antworten**



Bsp.  $4 \cdot 4 = 16$

1. \_\_\_\_\_

2. \_\_\_\_\_

3. \_\_\_\_\_

4. \_\_\_\_\_

5. \_\_\_\_\_

6. \_\_\_\_\_

7. \_\_\_\_\_

8. \_\_\_\_\_

9. \_\_\_\_\_

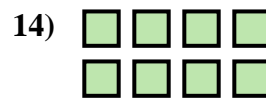
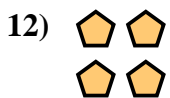

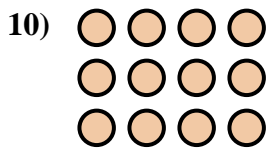
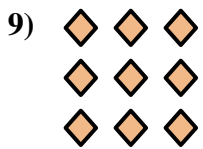
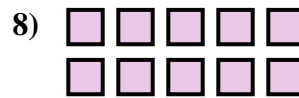
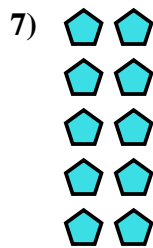
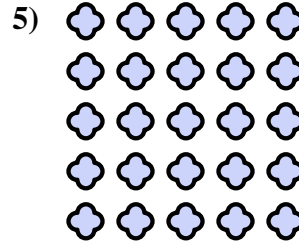
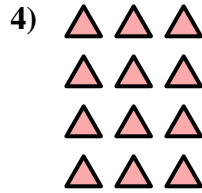
10. \_\_\_\_\_

11. \_\_\_\_\_

12. \_\_\_\_\_


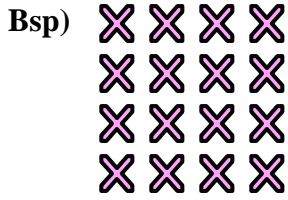
13. \_\_\_\_\_

14. \_\_\_\_\_





Schreibe eine Gleichung, die der Anordnung entspricht und finde die richtige Anzahl der Formen.



Bsp.  $4 \cdot 4 = 16$

1.  $5 \cdot 4 = 20$

2.  $4 \cdot 5 = 20$

3.  $2 \cdot 3 = 6$

4.  $4 \cdot 3 = 12$

5.  $5 \cdot 5 = 25$

6.  $3 \cdot 5 = 15$

7.  $5 \cdot 2 = 10$

8.  $2 \cdot 5 = 10$

9.  $3 \cdot 3 = 9$

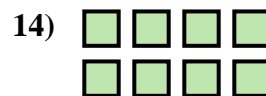

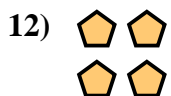


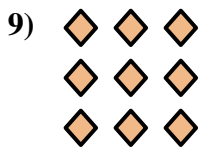
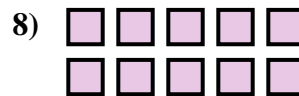
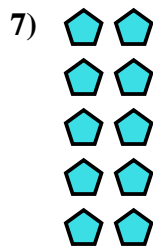
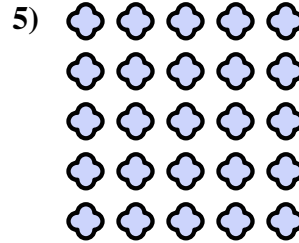
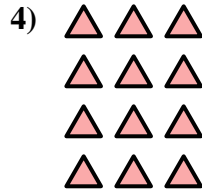
10.  $3 \cdot 4 = 12$

11.  $4 \cdot 2 = 8$

12.  $2 \cdot 2 = 4$

13.  $3 \cdot 2 = 6$

14.  $2 \cdot 4 = 8$


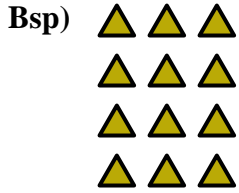






Schreibe eine Gleichung, die der Anordnung entspricht und finde die richtige Anzahl der Formen.

**Antworten**



Bsp.  $4 \cdot 3 = 12$

1. \_\_\_\_\_

2. \_\_\_\_\_

3. \_\_\_\_\_

4. \_\_\_\_\_

5. \_\_\_\_\_

6. \_\_\_\_\_

7. \_\_\_\_\_

8. \_\_\_\_\_

9. \_\_\_\_\_




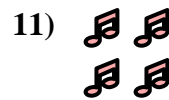


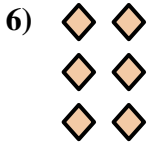


10. \_\_\_\_\_

11. \_\_\_\_\_

12. \_\_\_\_\_

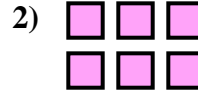
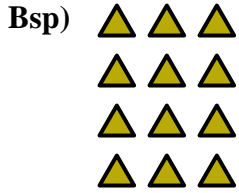
13. \_\_\_\_\_

14. \_\_\_\_\_





Schreibe eine Gleichung, die der Anordnung entspricht und finde die richtige Anzahl der Formen.



Bsp.  $4 \cdot 3 = 12$

1.  $3 \cdot 3 = 9$

2.  $2 \cdot 3 = 6$

3.  $3 \cdot 4 = 12$

4.  $5 \cdot 4 = 20$

5.  $2 \cdot 5 = 10$

6.  $3 \cdot 2 = 6$

7.  $2 \cdot 4 = 8$

8.  $4 \cdot 4 = 16$

9.  $5 \cdot 3 = 15$



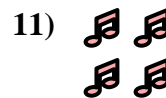



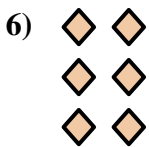


10.  $5 \cdot 2 = 10$

11.  $2 \cdot 2 = 4$

12.  $4 \cdot 5 = 20$

13.  $3 \cdot 5 = 15$



14.  $4 \cdot 2 = 8$





Schreibe eine Gleichung, die der Anordnung entspricht und finde die richtige Anzahl der Formen.

**Antworten**



Bsp.  $3 \cdot 4 = 12$

1. \_\_\_\_\_

2. \_\_\_\_\_

3. \_\_\_\_\_

4. \_\_\_\_\_

5. \_\_\_\_\_

6. \_\_\_\_\_

7. \_\_\_\_\_

8. \_\_\_\_\_

9. \_\_\_\_\_

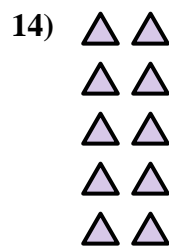
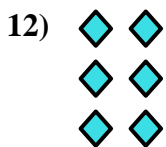
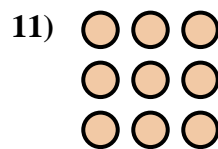

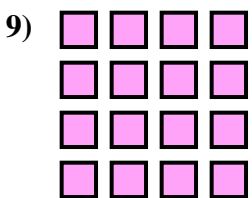
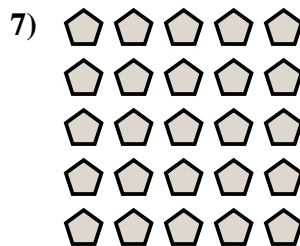

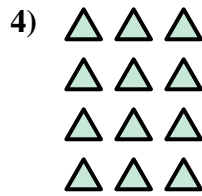

10. \_\_\_\_\_

11. \_\_\_\_\_

12. \_\_\_\_\_



13. \_\_\_\_\_

14. \_\_\_\_\_





Schreibe eine Gleichung, die der Anordnung entspricht und finde die richtige Anzahl der Formen.



**Antworten**

Bsp.  $3 \cdot 4 = 12$

1.  $2 \cdot 5 = 10$

2.  $3 \cdot 5 = 15$

3.  $4 \cdot 5 = 20$

4.  $4 \cdot 3 = 12$

5.  $5 \cdot 3 = 15$

6.  $2 \cdot 3 = 6$

7.  $5 \cdot 5 = 25$

8.  $2 \cdot 2 = 4$

9.  $4 \cdot 4 = 16$

10.  $4 \cdot 2 = 8$

11.  $3 \cdot 3 = 9$

12.  $3 \cdot 2 = 6$

13.  $2 \cdot 4 = 8$

14.  $5 \cdot 2 = 10$

