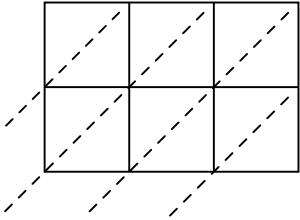




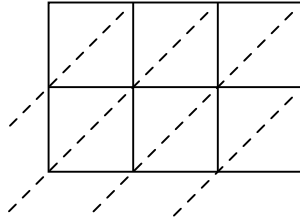
Wende die Gittermultiplikation an um jede Aufgabe zu lösen.

**Antworten**

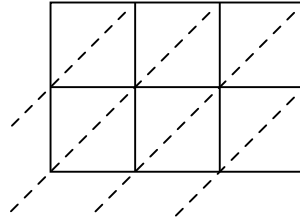
1)  $485 \cdot 11 =$



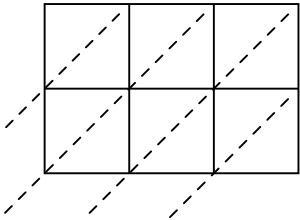
2)  $401 \cdot 55 =$



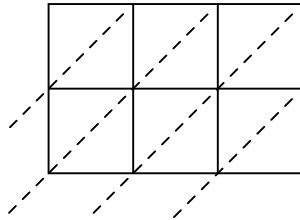
3)  $665 \cdot 39 =$



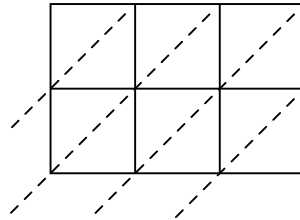
4)  $257 \cdot 58 =$



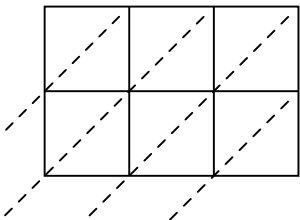
5)  $242 \cdot 51 =$



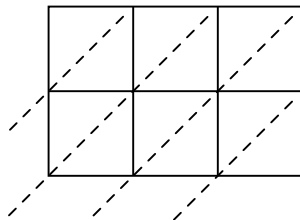
6)  $338 \cdot 18 =$



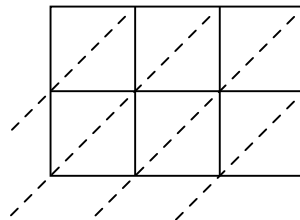
7)  $690 \cdot 32 =$



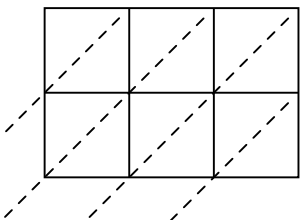
8)  $309 \cdot 90 =$



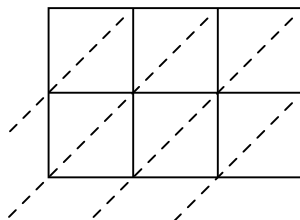
9)  $211 \cdot 95 =$



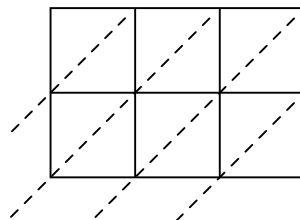
10)  $226 \cdot 83 =$



11)  $329 \cdot 59 =$



12)  $306 \cdot 62 =$



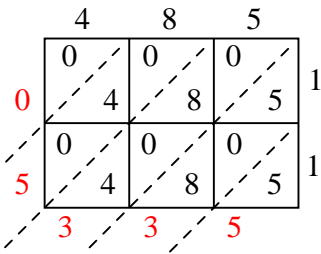
1. \_\_\_\_\_
2. \_\_\_\_\_
3. \_\_\_\_\_
4. \_\_\_\_\_
5. \_\_\_\_\_
6. \_\_\_\_\_
7. \_\_\_\_\_
8. \_\_\_\_\_
9. \_\_\_\_\_
10. \_\_\_\_\_
11. \_\_\_\_\_
12. \_\_\_\_\_



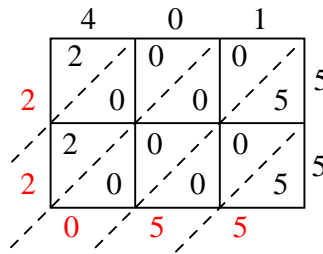
Wende die Gittermultiplikation an um jede Aufgabe zu lösen.

**Antworten**

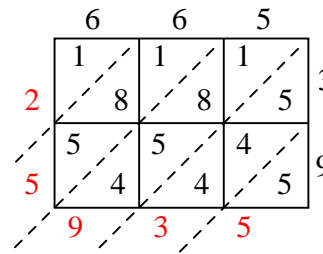
1)  $485 \cdot 11 =$



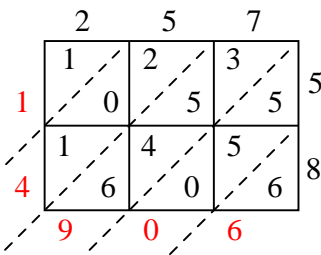
2)  $401 \cdot 55 =$



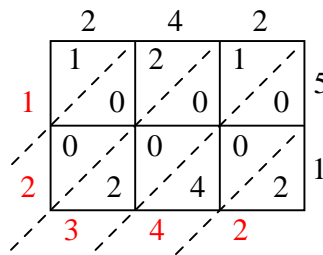
3)  $665 \cdot 39 =$



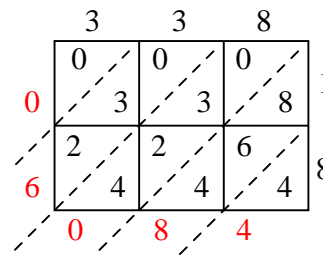
4)  $257 \cdot 58 =$



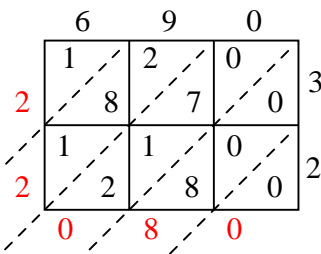
5)  $242 \cdot 51 =$



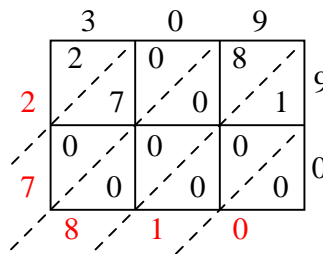
6)  $338 \cdot 18 =$



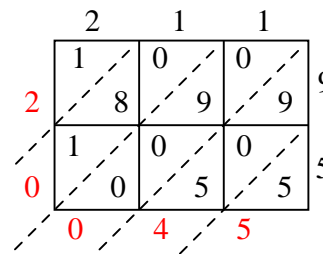
7)  $690 \cdot 32 =$



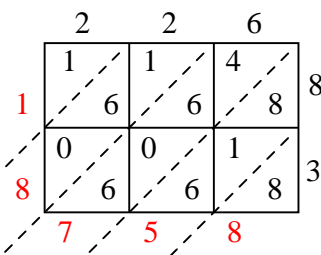
8)  $309 \cdot 90 =$



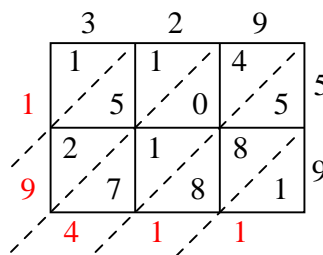
9)  $211 \cdot 95 =$



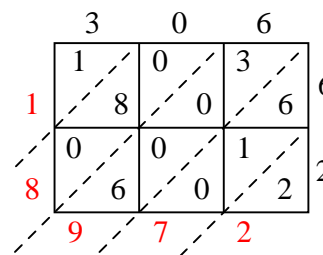
10)  $226 \cdot 83 =$



11)  $329 \cdot 59 =$



12)  $306 \cdot 62 =$

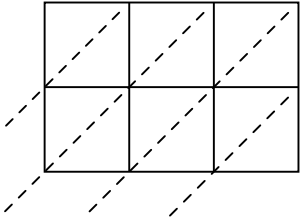
1. **5.335**2. **22.055**3. **25.935**4. **14.906**5. **12.342**6. **6.084**7. **22.080**8. **27.810**9. **20.045**10. **18.758**11. **19.411**12. **18.972**



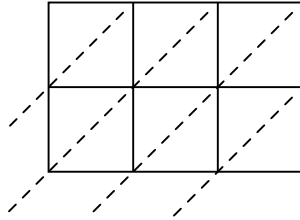
Wende die Gittermultiplikation an um jede Aufgabe zu lösen.

**Antworten**

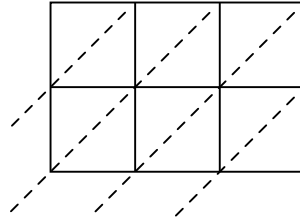
1)  $189 \cdot 31 =$



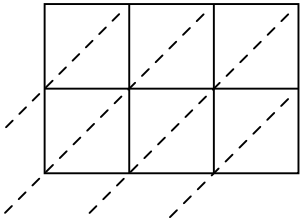
2)  $633 \cdot 58 =$



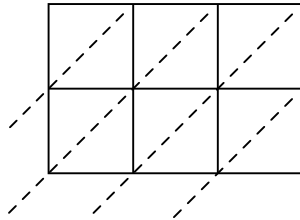
3)  $856 \cdot 16 =$



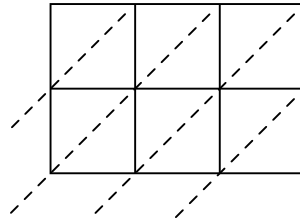
4)  $254 \cdot 35 =$



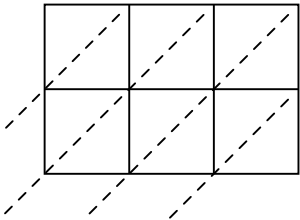
5)  $186 \cdot 28 =$



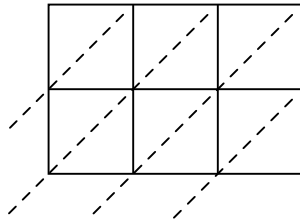
6)  $390 \cdot 84 =$



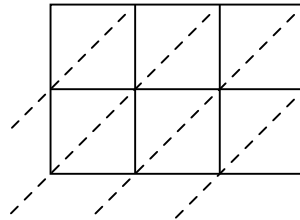
7)  $325 \cdot 37 =$



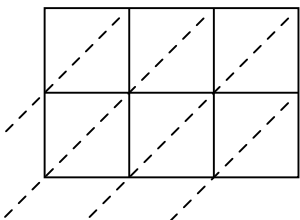
8)  $493 \cdot 91 =$



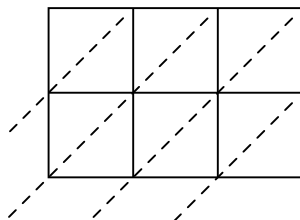
9)  $348 \cdot 20 =$



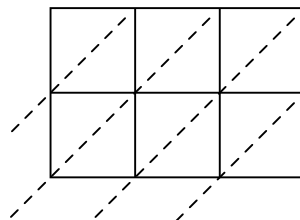
10)  $894 \cdot 10 =$



11)  $961 \cdot 10 =$



12)  $317 \cdot 15 =$



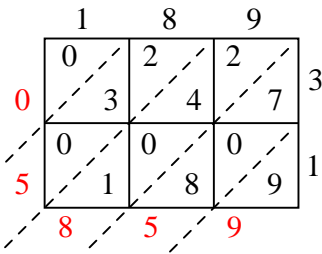
1. \_\_\_\_\_
2. \_\_\_\_\_
3. \_\_\_\_\_
4. \_\_\_\_\_
5. \_\_\_\_\_
6. \_\_\_\_\_
7. \_\_\_\_\_
8. \_\_\_\_\_
9. \_\_\_\_\_
10. \_\_\_\_\_
11. \_\_\_\_\_
12. \_\_\_\_\_



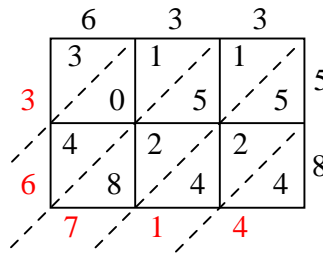
Wende die Gittermultiplikation an um jede Aufgabe zu lösen.

**Antworten**

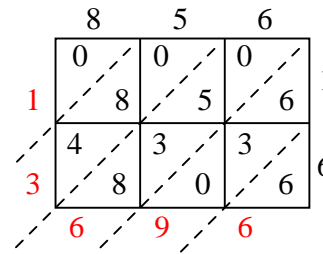
1)  $189 \cdot 31 =$



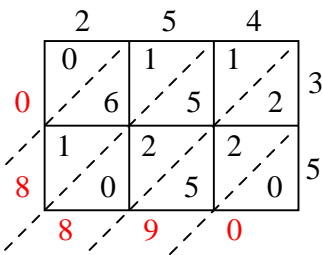
2)  $633 \cdot 58 =$



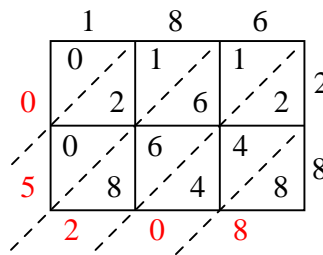
3)  $856 \cdot 16 =$



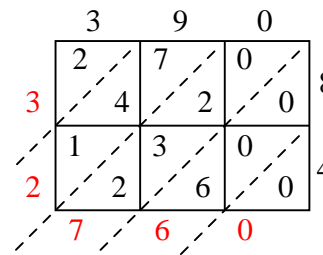
4)  $254 \cdot 35 =$



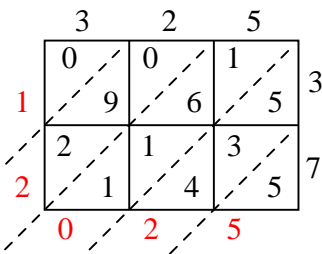
5)  $186 \cdot 28 =$



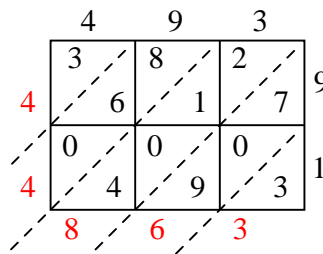
6)  $390 \cdot 84 =$



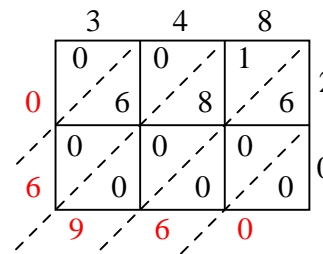
7)  $325 \cdot 37 =$



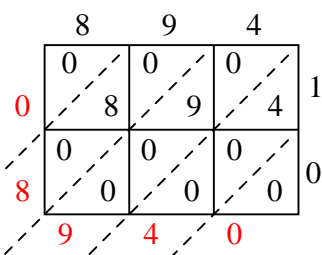
8)  $493 \cdot 91 =$



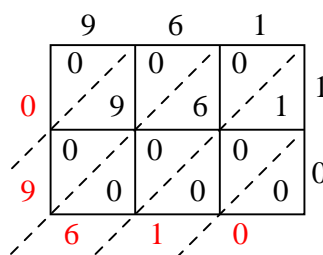
9)  $348 \cdot 20 =$



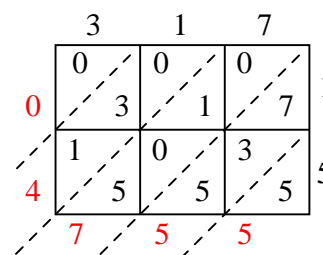
10)  $894 \cdot 10 =$



11)  $961 \cdot 10 =$



12)  $317 \cdot 15 =$

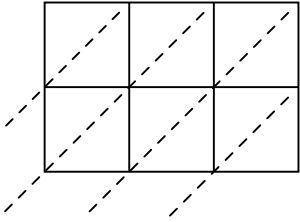
1. **5.859**2. **36.714**3. **13.696**4. **8.890**5. **5.208**6. **32.760**7. **12.025**8. **44.863**9. **6.960**10. **8.940**11. **9.610**12. **4.755**



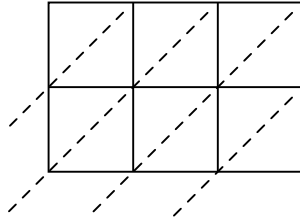
Wende die Gittermultiplikation an um jede Aufgabe zu lösen.

**Antworten**

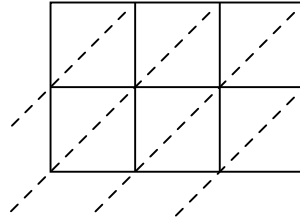
1)  $617 \cdot 36 =$



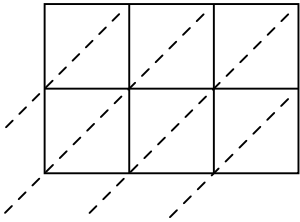
2)  $902 \cdot 60 =$



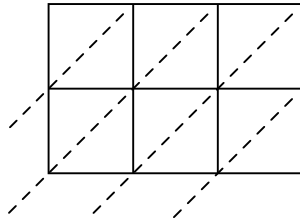
3)  $936 \cdot 11 =$



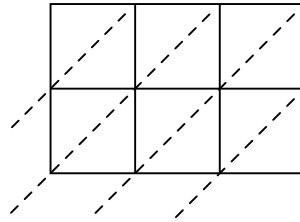
4)  $506 \cdot 97 =$



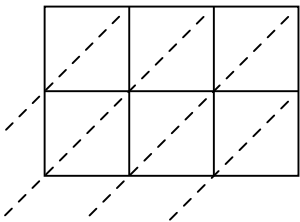
5)  $375 \cdot 92 =$



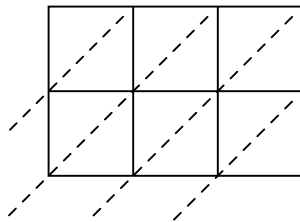
6)  $944 \cdot 94 =$



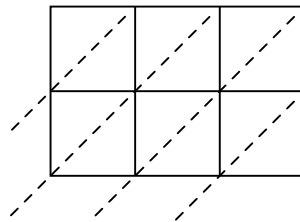
7)  $773 \cdot 32 =$



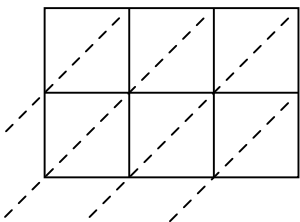
8)  $444 \cdot 54 =$



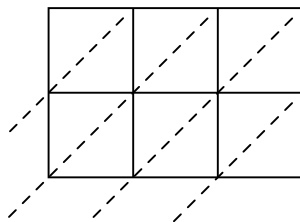
9)  $950 \cdot 35 =$



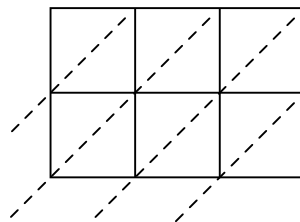
10)  $608 \cdot 49 =$



11)  $289 \cdot 74 =$



12)  $530 \cdot 32 =$



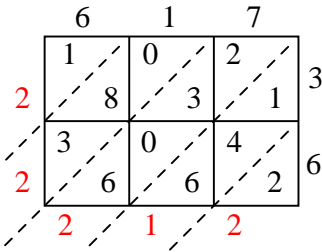
1. \_\_\_\_\_
2. \_\_\_\_\_
3. \_\_\_\_\_
4. \_\_\_\_\_
5. \_\_\_\_\_
6. \_\_\_\_\_
7. \_\_\_\_\_
8. \_\_\_\_\_
9. \_\_\_\_\_
10. \_\_\_\_\_
11. \_\_\_\_\_
12. \_\_\_\_\_



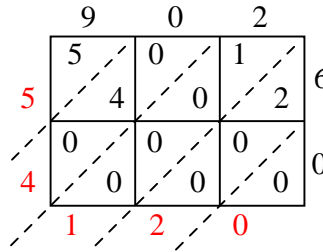
Wende die Gittermultiplikation an um jede Aufgabe zu lösen.

**Antworten**

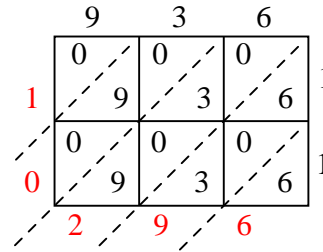
1)  $617 \cdot 36 =$



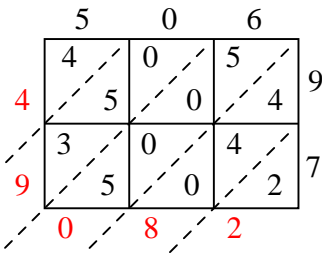
2)  $902 \cdot 60 =$



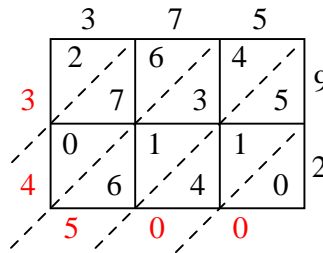
3)  $936 \cdot 11 =$



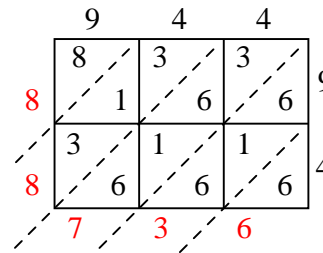
4)  $506 \cdot 97 =$



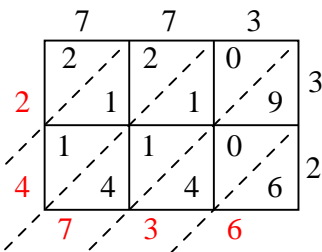
5)  $375 \cdot 92 =$



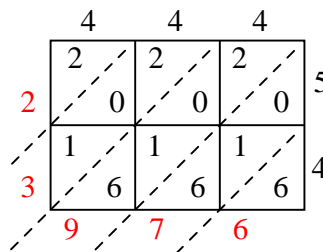
6)  $944 \cdot 94 =$



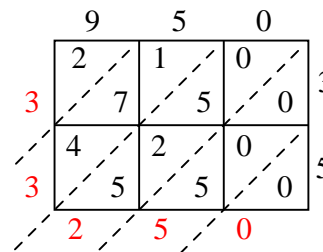
7)  $773 \cdot 32 =$



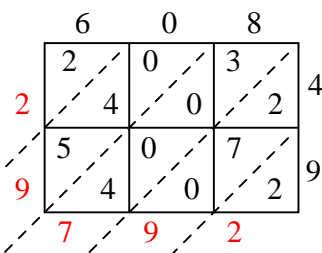
8)  $444 \cdot 54 =$



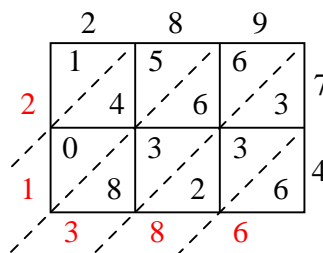
9)  $950 \cdot 35 =$



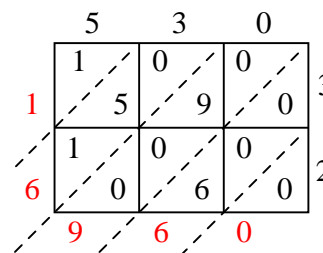
10)  $608 \cdot 49 =$



11)  $289 \cdot 74 =$



12)  $530 \cdot 32 =$

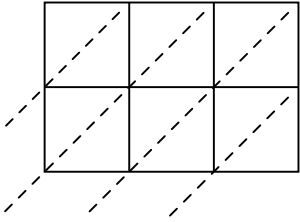
1. **22.212**2. **54.120**3. **10.296**4. **49.082**5. **34.500**6. **88.736**7. **24.736**8. **23.976**9. **33.250**10. **29.792**11. **21.386**12. **16.960**



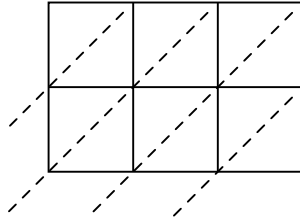
Wende die Gittermultiplikation an um jede Aufgabe zu lösen.

**Antworten**

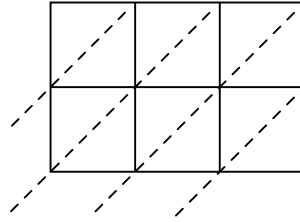
1)  $341 \cdot 47 =$



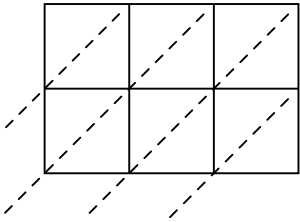
2)  $768 \cdot 31 =$



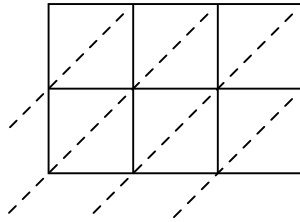
3)  $166 \cdot 52 =$



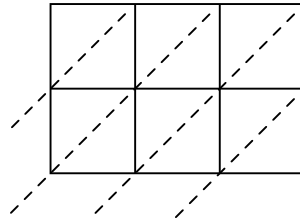
4)  $126 \cdot 82 =$



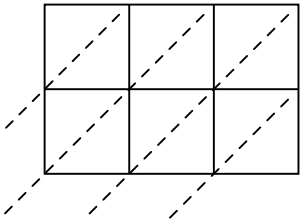
5)  $130 \cdot 86 =$



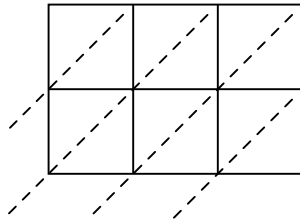
6)  $692 \cdot 58 =$



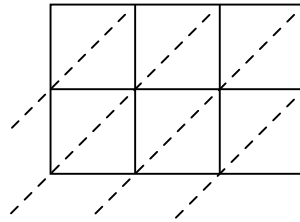
7)  $268 \cdot 37 =$



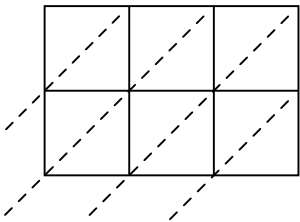
8)  $535 \cdot 68 =$



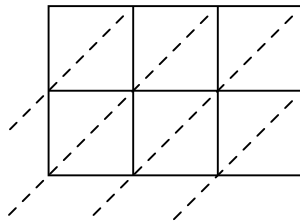
9)  $631 \cdot 39 =$



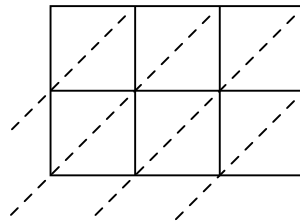
10)  $404 \cdot 13 =$



11)  $173 \cdot 57 =$



12)  $394 \cdot 75 =$



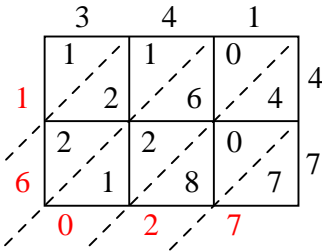
1. \_\_\_\_\_
2. \_\_\_\_\_
3. \_\_\_\_\_
4. \_\_\_\_\_
5. \_\_\_\_\_
6. \_\_\_\_\_
7. \_\_\_\_\_
8. \_\_\_\_\_
9. \_\_\_\_\_
10. \_\_\_\_\_
11. \_\_\_\_\_
12. \_\_\_\_\_



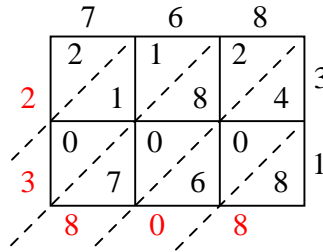
Wende die Gittermultiplikation an um jede Aufgabe zu lösen.

**Antworten**

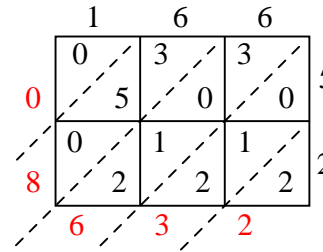
1)  $341 \cdot 47 =$



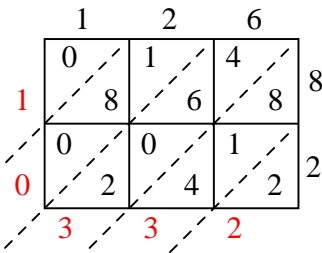
2)  $768 \cdot 31 =$



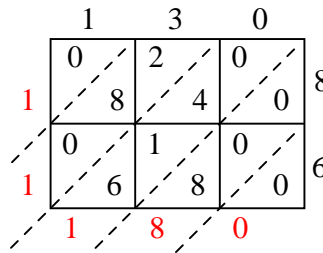
3)  $166 \cdot 52 =$



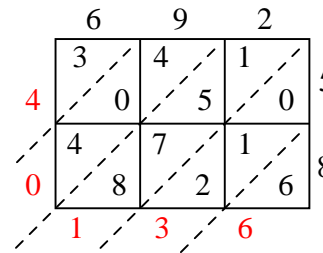
4)  $126 \cdot 82 =$



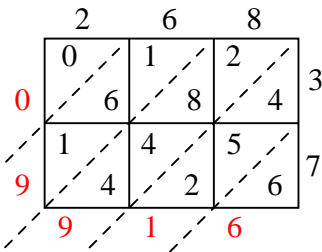
5)  $130 \cdot 86 =$



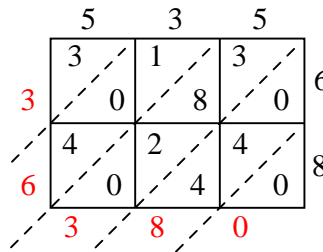
6)  $692 \cdot 58 =$



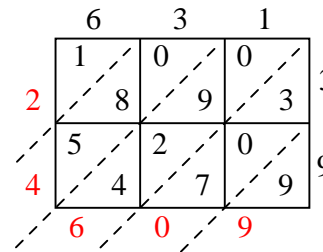
7)  $268 \cdot 37 =$



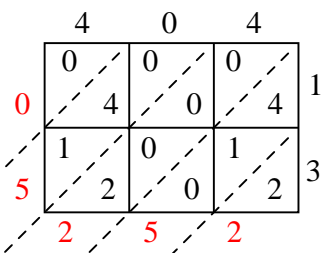
8)  $535 \cdot 68 =$



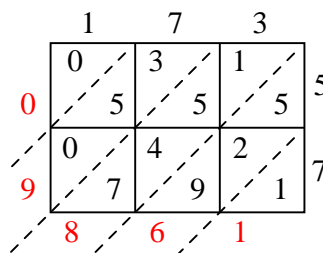
9)  $631 \cdot 39 =$



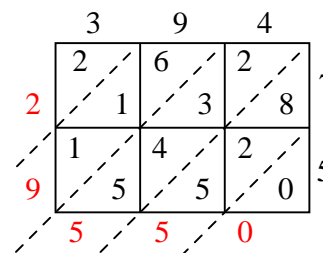
10)  $404 \cdot 13 =$



11)  $173 \cdot 57 =$



12)  $394 \cdot 75 =$

1. **16.027**2. **23.808**3. **8.632**4. **10.332**5. **11.180**6. **40.136**7. **9.916**8. **36.380**9. **24.609**10. **5.252**11. **9.861**12. **29.550**

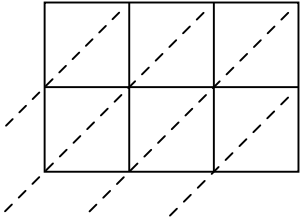




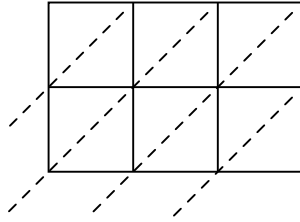
Wende die Gittermultiplikation an um jede Aufgabe zu lösen.

**Antworten**

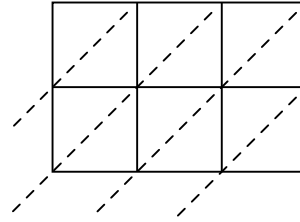
1)  $927 \cdot 78 =$



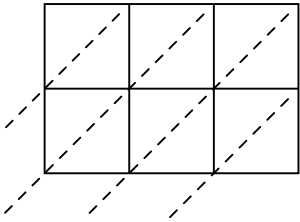
2)  $669 \cdot 51 =$



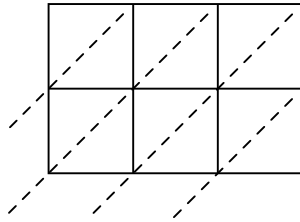
3)  $864 \cdot 95 =$



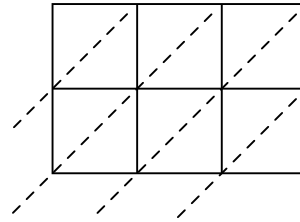
4)  $709 \cdot 28 =$



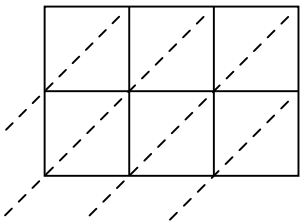
5)  $776 \cdot 14 =$



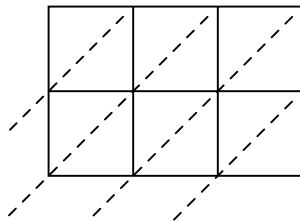
6)  $743 \cdot 46 =$



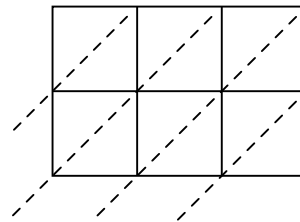
7)  $139 \cdot 10 =$



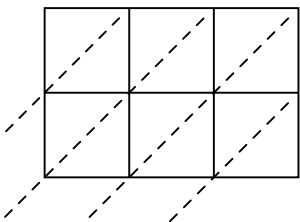
8)  $139 \cdot 15 =$



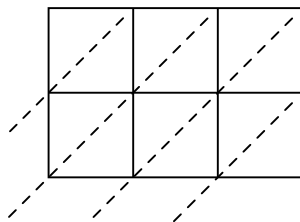
9)  $652 \cdot 85 =$



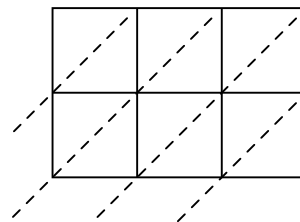
10)  $692 \cdot 17 =$



11)  $362 \cdot 41 =$



12)  $355 \cdot 63 =$



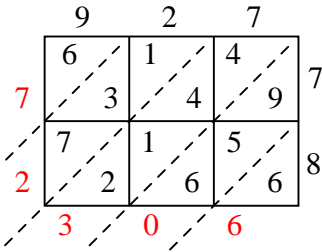
1. \_\_\_\_\_
2. \_\_\_\_\_
3. \_\_\_\_\_
4. \_\_\_\_\_
5. \_\_\_\_\_
6. \_\_\_\_\_
7. \_\_\_\_\_
8. \_\_\_\_\_
9. \_\_\_\_\_
10. \_\_\_\_\_
11. \_\_\_\_\_
12. \_\_\_\_\_



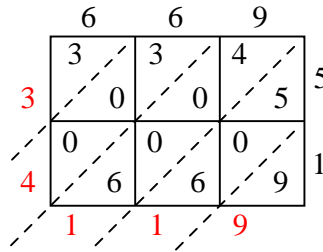
Wende die Gittermultiplikation an um jede Aufgabe zu lösen.

**Antworten**

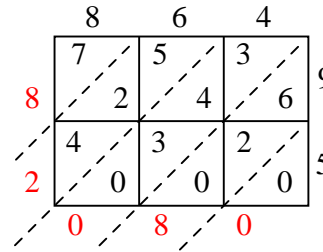
1)  $927 \cdot 78 =$



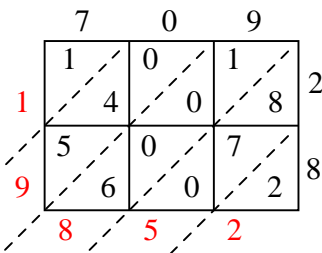
2)  $669 \cdot 51 =$



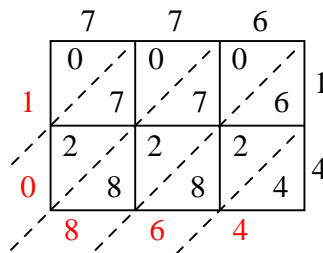
3)  $864 \cdot 95 =$



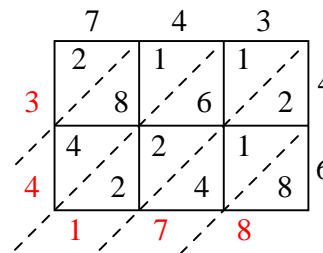
4)  $709 \cdot 28 =$



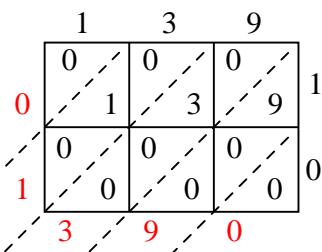
5)  $776 \cdot 14 =$



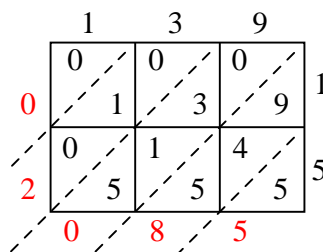
6)  $743 \cdot 46 =$



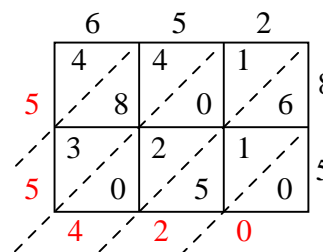
7)  $139 \cdot 10 =$



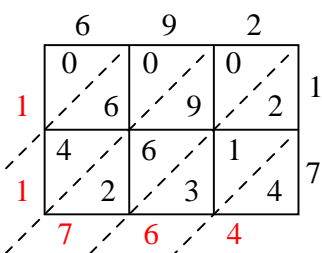
8)  $139 \cdot 15 =$



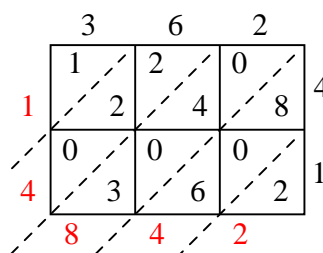
9)  $652 \cdot 85 =$



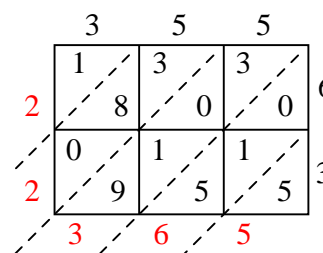
10)  $692 \cdot 17 =$



11)  $362 \cdot 41 =$



12)  $355 \cdot 63 =$



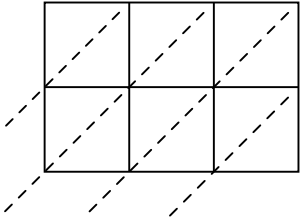
1. **72.306**
2. **34.119**
3. **82.080**
4. **19.852**
5. **10.864**
6. **34.178**
7. **1.390**
8. **2.085**
9. **55.420**
10. **11.764**
11. **14.842**
12. **22.365**



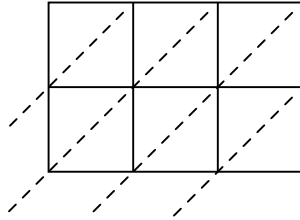
Wende die Gittermultiplikation an um jede Aufgabe zu lösen.

**Antworten**

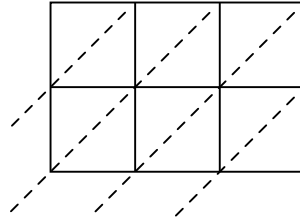
1)  $636 \cdot 32 =$



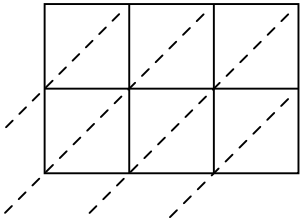
2)  $339 \cdot 54 =$



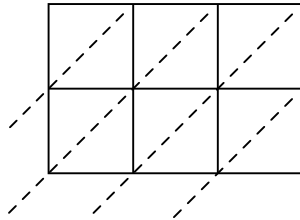
3)  $637 \cdot 28 =$



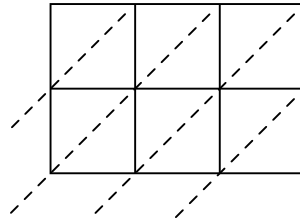
4)  $525 \cdot 91 =$



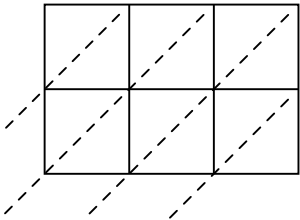
5)  $768 \cdot 79 =$



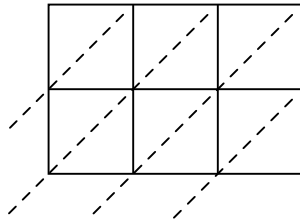
6)  $686 \cdot 73 =$



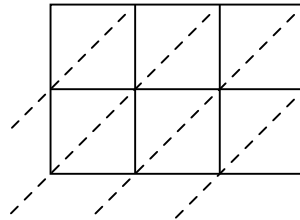
7)  $675 \cdot 69 =$



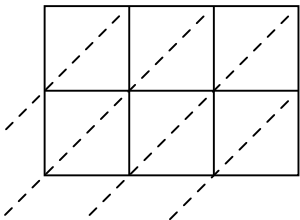
8)  $714 \cdot 45 =$



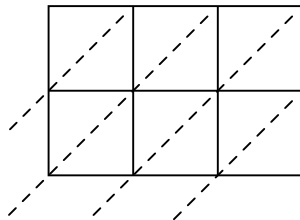
9)  $389 \cdot 41 =$



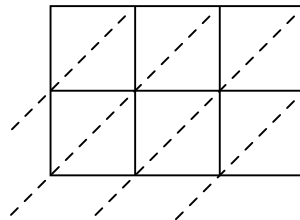
10)  $135 \cdot 24 =$



11)  $363 \cdot 59 =$



12)  $417 \cdot 39 =$



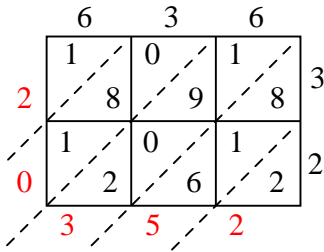
- 1. \_\_\_\_\_
- 2. \_\_\_\_\_
- 3. \_\_\_\_\_
- 4. \_\_\_\_\_
- 5. \_\_\_\_\_
- 6. \_\_\_\_\_
- 7. \_\_\_\_\_
- 8. \_\_\_\_\_
- 9. \_\_\_\_\_
- 10. \_\_\_\_\_
- 11. \_\_\_\_\_
- 12. \_\_\_\_\_



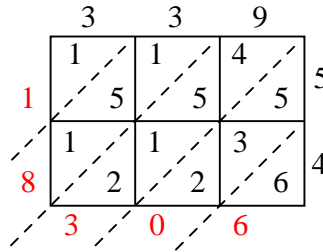
Wende die Gittermultiplikation an um jede Aufgabe zu lösen.

**Antworten**

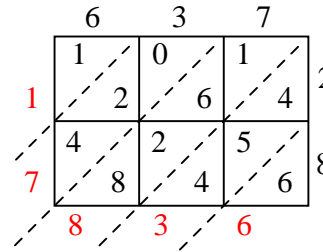
1)  $636 \cdot 32 =$



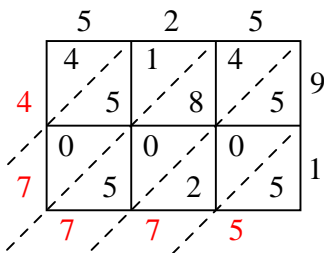
2)  $339 \cdot 54 =$



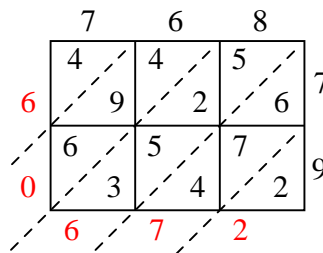
3)  $637 \cdot 28 =$



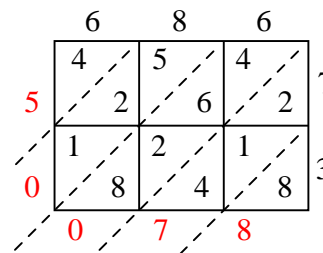
4)  $525 \cdot 91 =$



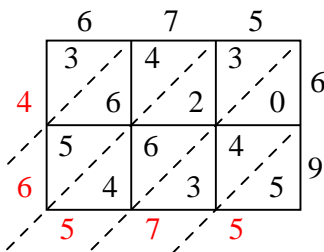
5)  $768 \cdot 79 =$



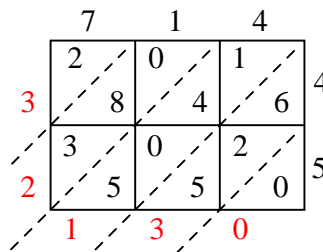
6)  $686 \cdot 73 =$



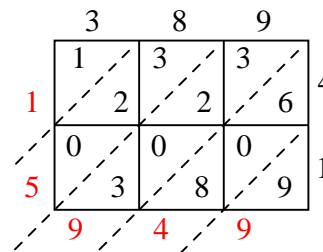
7)  $675 \cdot 69 =$



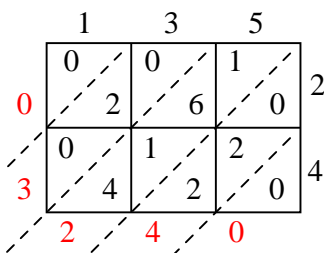
8)  $714 \cdot 45 =$



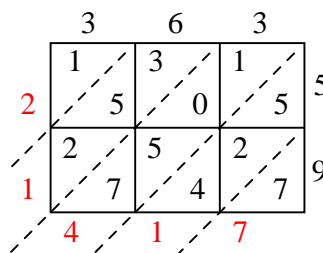
9)  $389 \cdot 41 =$



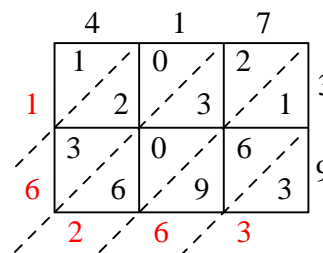
10)  $135 \cdot 24 =$



11)  $363 \cdot 59 =$



12)  $417 \cdot 39 =$

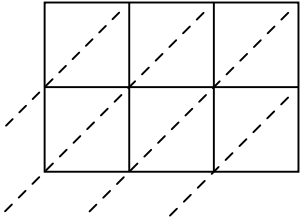
1. **20.352**2. **18.306**3. **17.836**4. **47.775**5. **60.672**6. **50.078**7. **46.575**8. **32.130**9. **15.949**10. **3.240**11. **21.417**12. **16.263**



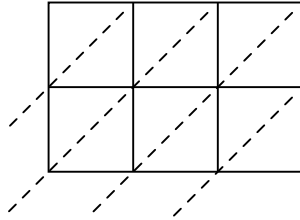
Wende die Gittermultiplikation an um jede Aufgabe zu lösen.

**Antworten**

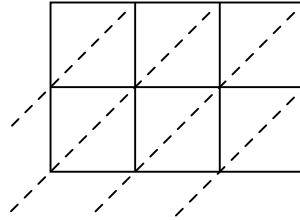
1)  $718 \cdot 14 =$



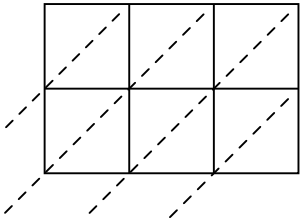
2)  $428 \cdot 34 =$



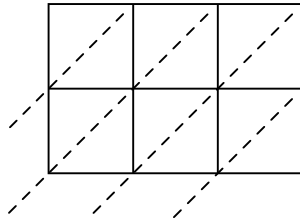
3)  $823 \cdot 37 =$



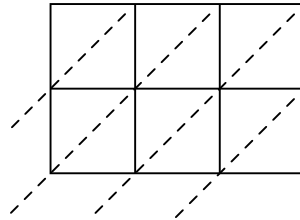
4)  $171 \cdot 34 =$



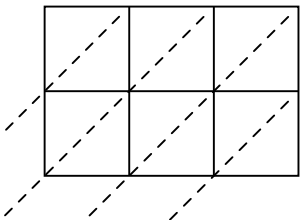
5)  $745 \cdot 82 =$



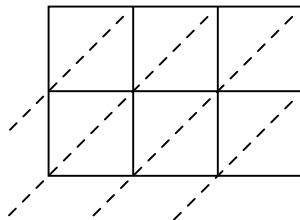
6)  $314 \cdot 99 =$



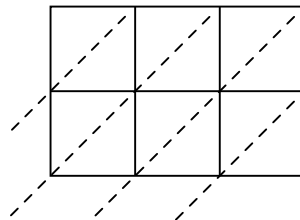
7)  $920 \cdot 70 =$



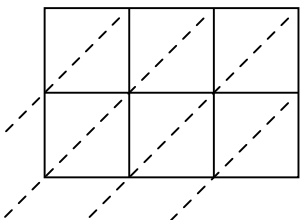
8)  $664 \cdot 98 =$



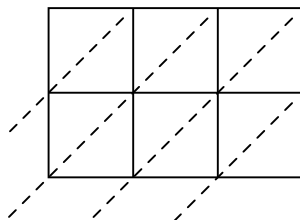
9)  $281 \cdot 53 =$



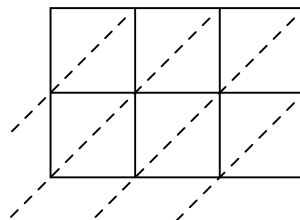
10)  $530 \cdot 53 =$



11)  $104 \cdot 75 =$



12)  $375 \cdot 51 =$



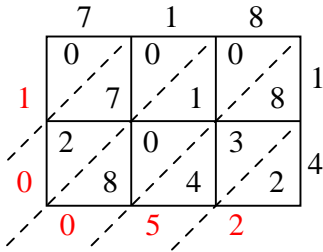
1. \_\_\_\_\_
2. \_\_\_\_\_
3. \_\_\_\_\_
4. \_\_\_\_\_
5. \_\_\_\_\_
6. \_\_\_\_\_
7. \_\_\_\_\_
8. \_\_\_\_\_
9. \_\_\_\_\_
10. \_\_\_\_\_
11. \_\_\_\_\_
12. \_\_\_\_\_



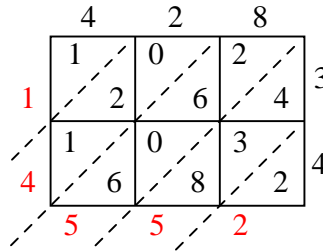
Wende die Gittermultiplikation an um jede Aufgabe zu lösen.

**Antworten**

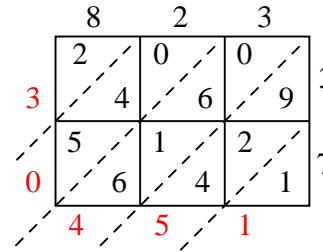
1)  $718 \cdot 14 =$



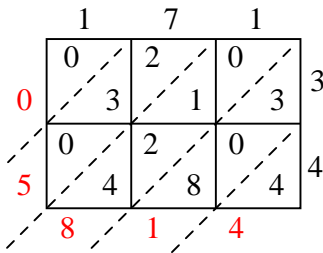
2)  $428 \cdot 34 =$



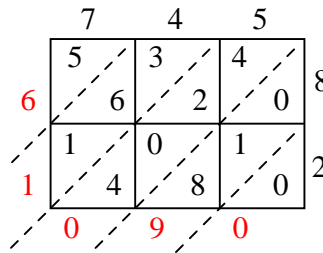
3)  $823 \cdot 37 =$



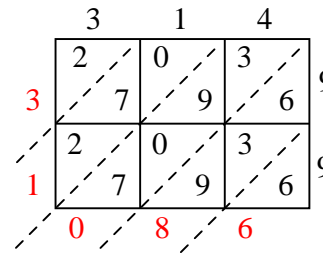
4)  $171 \cdot 34 =$



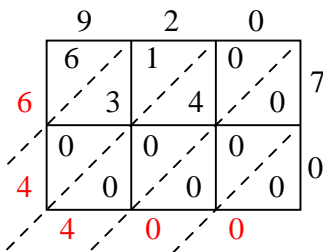
5)  $745 \cdot 82 =$



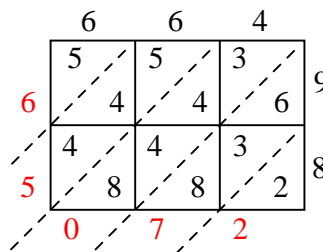
6)  $314 \cdot 99 =$



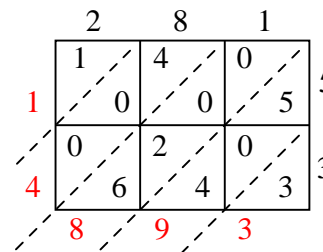
7)  $920 \cdot 70 =$



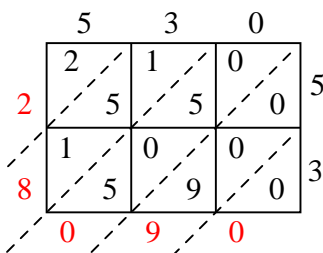
8)  $664 \cdot 98 =$



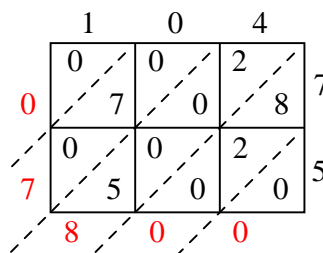
9)  $281 \cdot 53 =$



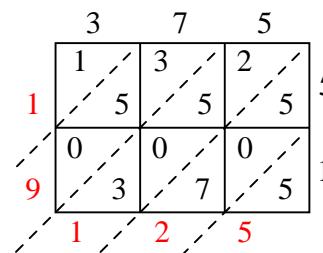
10)  $530 \cdot 53 =$



11)  $104 \cdot 75 =$



12)  $375 \cdot 51 =$

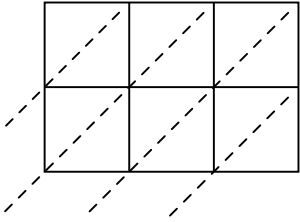
1. **10.052**2. **14.552**3. **30.451**4. **5.814**5. **61.090**6. **31.086**7. **64.400**8. **65.072**9. **14.893**10. **28.090**11. **7.800**12. **19.125**



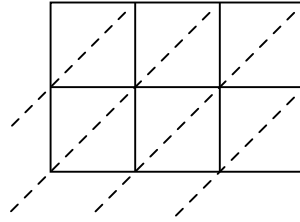
Wende die Gittermultiplikation an um jede Aufgabe zu lösen.

**Antworten**

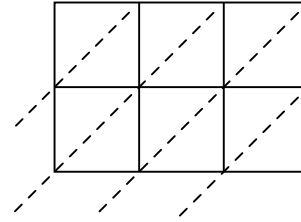
1)  $591 \cdot 54 =$



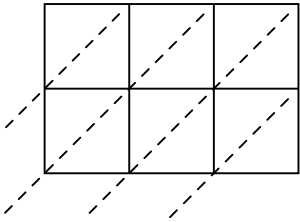
2)  $722 \cdot 75 =$



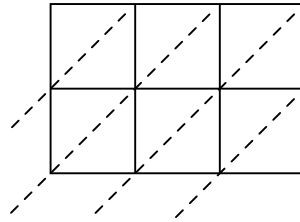
3)  $524 \cdot 33 =$



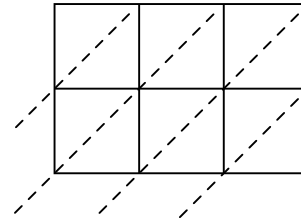
4)  $698 \cdot 33 =$



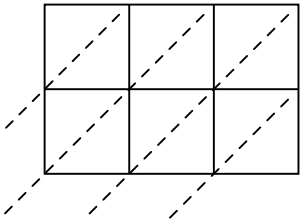
5)  $447 \cdot 39 =$



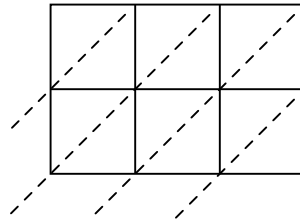
6)  $111 \cdot 53 =$



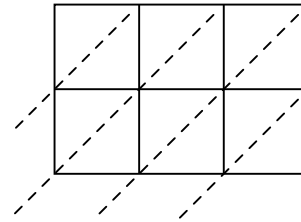
7)  $696 \cdot 63 =$



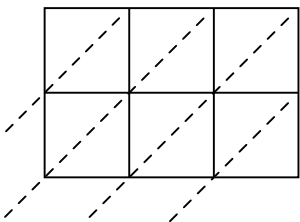
8)  $568 \cdot 79 =$



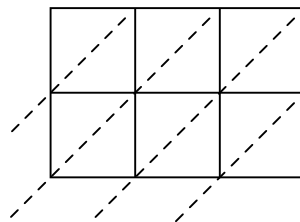
9)  $907 \cdot 26 =$



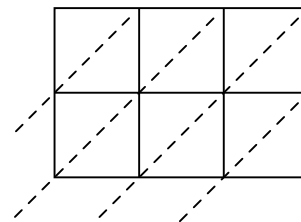
10)  $399 \cdot 30 =$



11)  $798 \cdot 26 =$



12)  $712 \cdot 46 =$



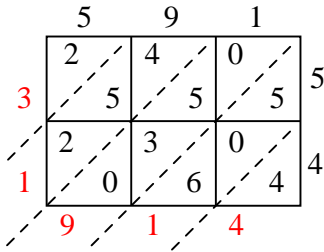
1. \_\_\_\_\_
2. \_\_\_\_\_
3. \_\_\_\_\_
4. \_\_\_\_\_
5. \_\_\_\_\_
6. \_\_\_\_\_
7. \_\_\_\_\_
8. \_\_\_\_\_
9. \_\_\_\_\_
10. \_\_\_\_\_
11. \_\_\_\_\_
12. \_\_\_\_\_



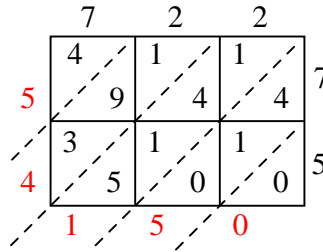
Wende die Gittermultiplikation an um jede Aufgabe zu lösen.

**Antworten**

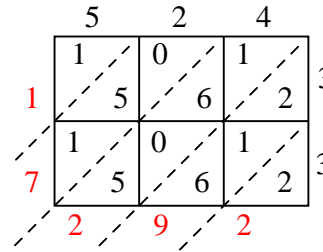
1)  $591 \cdot 54 =$



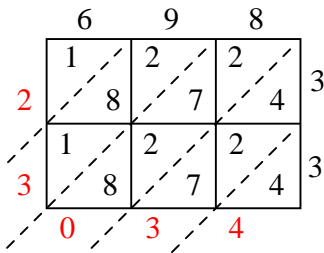
2)  $722 \cdot 75 =$



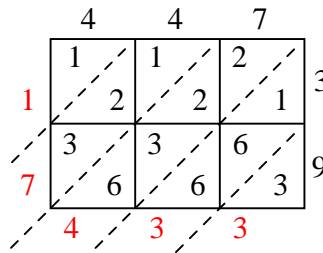
3)  $524 \cdot 33 =$



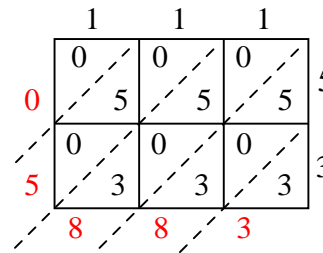
4)  $698 \cdot 33 =$



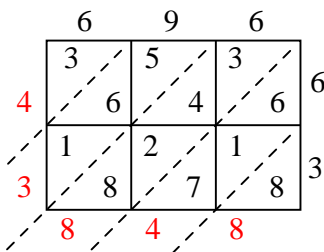
5)  $447 \cdot 39 =$



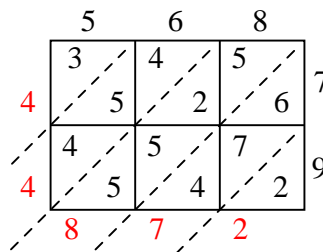
6)  $111 \cdot 53 =$



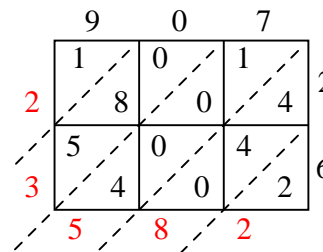
7)  $696 \cdot 63 =$



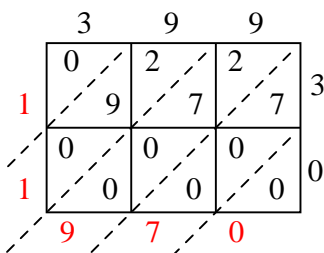
8)  $568 \cdot 79 =$



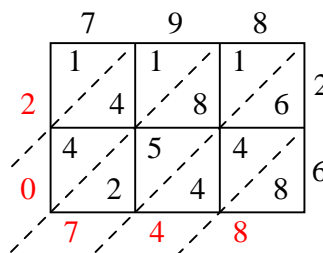
9)  $907 \cdot 26 =$



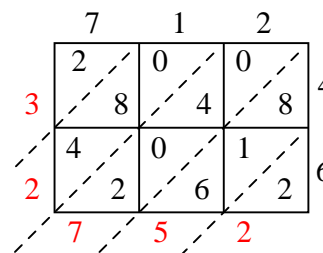
10)  $399 \cdot 30 =$



11)  $798 \cdot 26 =$



12)  $712 \cdot 46 =$



1. **31.914**
2. **54.150**
3. **17.292**
4. **23.034**
5. **17.433**
6. **5.883**
7. **43.848**
8. **44.872**
9. **23.582**
10. **11.970**
11. **20.748**
12. **32.752**

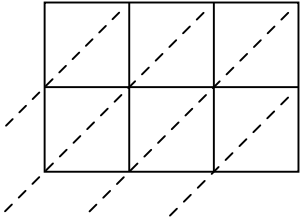




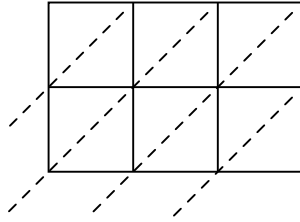
Wende die Gittermultiplikation an um jede Aufgabe zu lösen.

**Antworten**

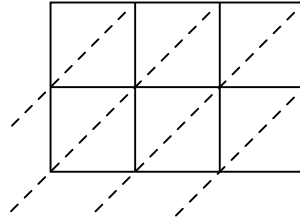
1)  $133 \cdot 55 =$



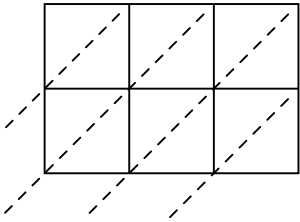
2)  $680 \cdot 53 =$



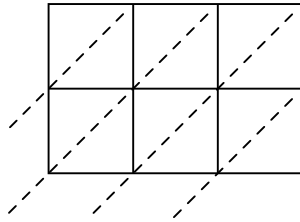
3)  $362 \cdot 51 =$



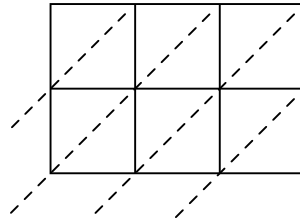
4)  $703 \cdot 44 =$



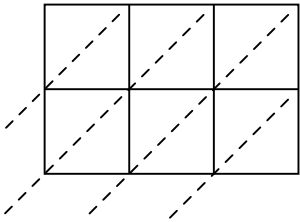
5)  $560 \cdot 57 =$



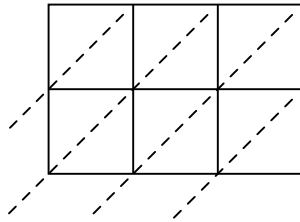
6)  $637 \cdot 90 =$



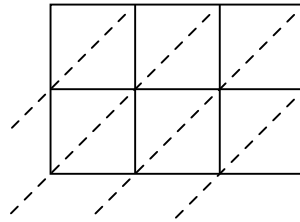
7)  $711 \cdot 62 =$



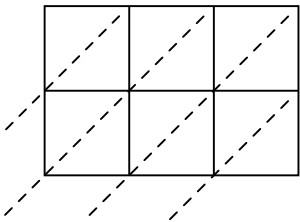
8)  $361 \cdot 36 =$



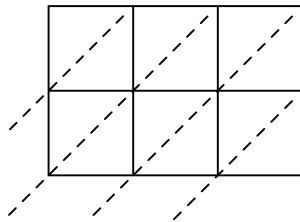
9)  $743 \cdot 53 =$



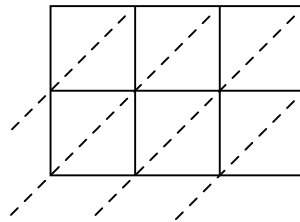
10)  $344 \cdot 41 =$



11)  $279 \cdot 94 =$



12)  $862 \cdot 89 =$



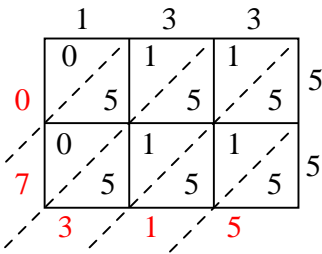
1. \_\_\_\_\_
2. \_\_\_\_\_
3. \_\_\_\_\_
4. \_\_\_\_\_
5. \_\_\_\_\_
6. \_\_\_\_\_
7. \_\_\_\_\_
8. \_\_\_\_\_
9. \_\_\_\_\_
10. \_\_\_\_\_
11. \_\_\_\_\_
12. \_\_\_\_\_



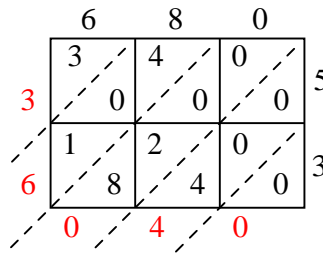
Wende die Gittermultiplikation an um jede Aufgabe zu lösen.

**Antworten**

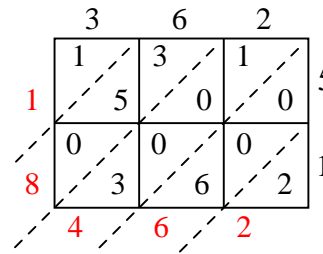
1)  $133 \cdot 55 =$



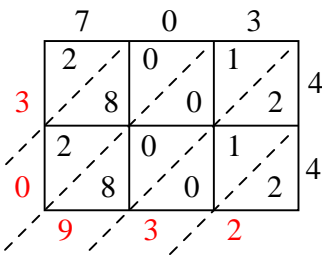
2)  $680 \cdot 53 =$



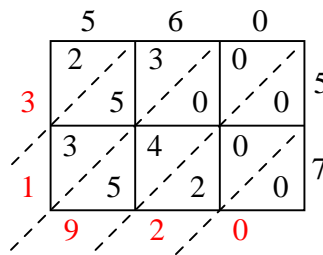
3)  $362 \cdot 51 =$



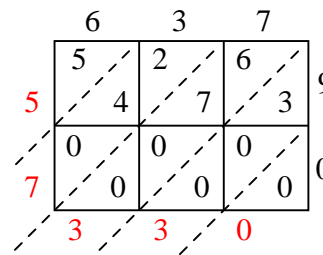
4)  $703 \cdot 44 =$



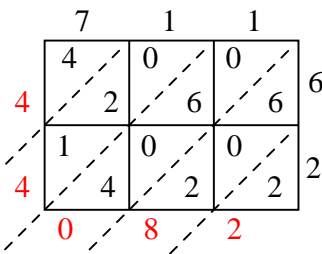
5)  $560 \cdot 57 =$



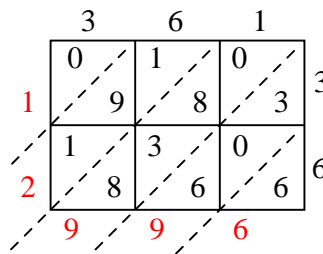
6)  $637 \cdot 90 =$



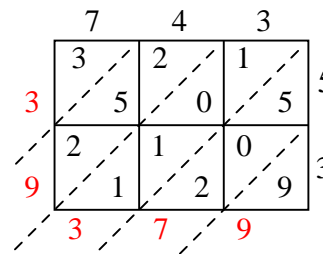
7)  $711 \cdot 62 =$



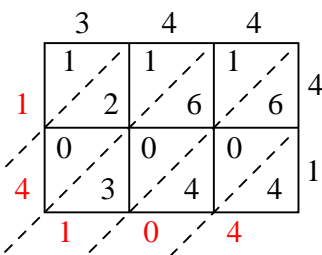
8)  $361 \cdot 36 =$



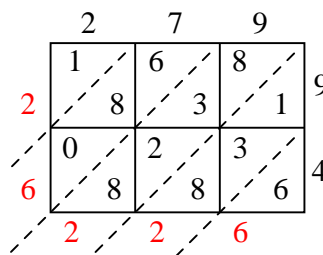
9)  $743 \cdot 53 =$



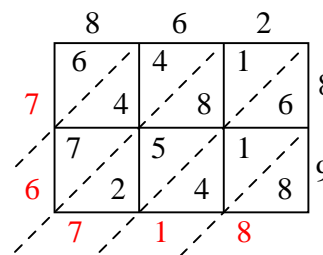
10)  $344 \cdot 41 =$



11)  $279 \cdot 94 =$



12)  $862 \cdot 89 =$

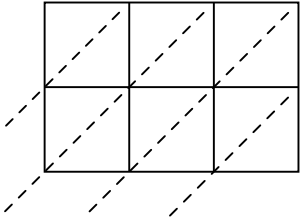
1. **7.315**2. **36.040**3. **18.462**4. **30.932**5. **31.920**6. **57.330**7. **44.082**8. **12.996**9. **39.379**10. **14.104**11. **26.226**12. **76.718**



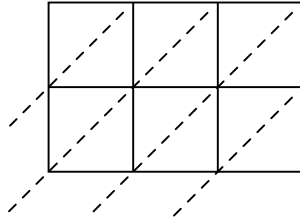
Wende die Gittermultiplikation an um jede Aufgabe zu lösen.

**Antworten**

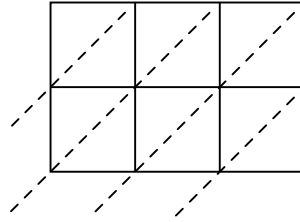
1)  $828 \cdot 35 =$



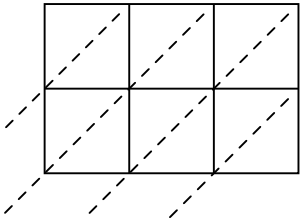
2)  $953 \cdot 85 =$



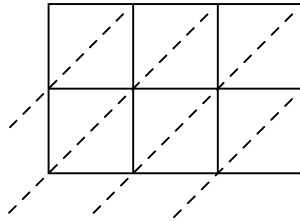
3)  $706 \cdot 55 =$



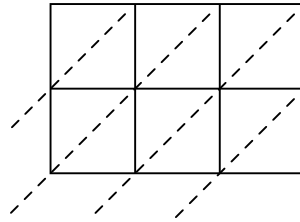
4)  $862 \cdot 57 =$



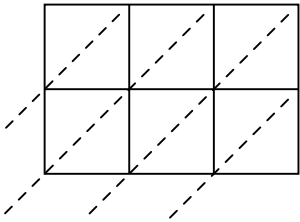
5)  $350 \cdot 99 =$



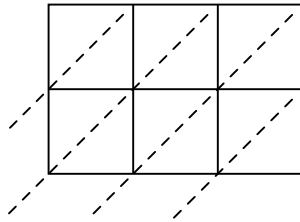
6)  $488 \cdot 19 =$



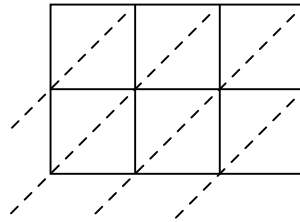
7)  $543 \cdot 53 =$



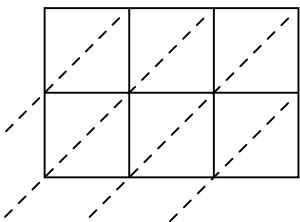
8)  $387 \cdot 83 =$



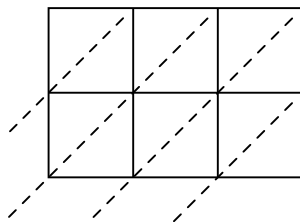
9)  $702 \cdot 60 =$



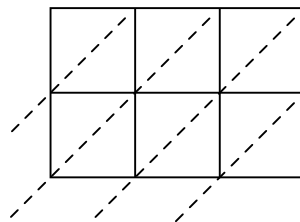
10)  $244 \cdot 16 =$



11)  $848 \cdot 21 =$



12)  $673 \cdot 70 =$



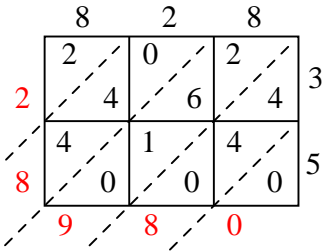
1. \_\_\_\_\_
2. \_\_\_\_\_
3. \_\_\_\_\_
4. \_\_\_\_\_
5. \_\_\_\_\_
6. \_\_\_\_\_
7. \_\_\_\_\_
8. \_\_\_\_\_
9. \_\_\_\_\_
10. \_\_\_\_\_
11. \_\_\_\_\_
12. \_\_\_\_\_



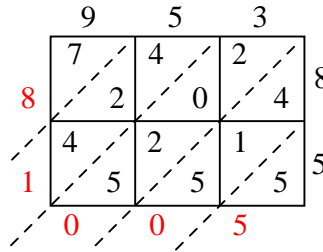
Wende die Gittermultiplikation an um jede Aufgabe zu lösen.

**Antworten**

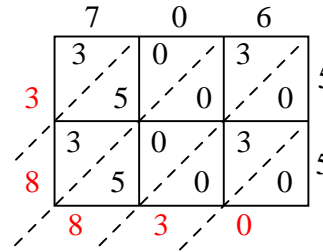
1)  $828 \cdot 35 =$



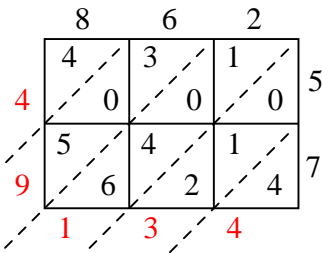
2)  $953 \cdot 85 =$



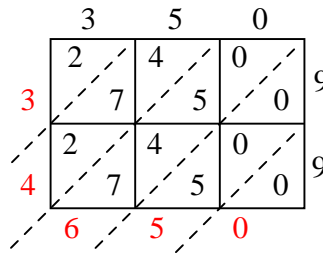
3)  $706 \cdot 55 =$



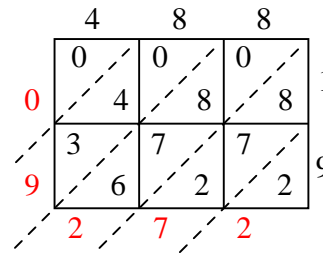
4)  $862 \cdot 57 =$



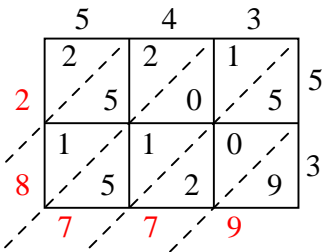
5)  $350 \cdot 99 =$



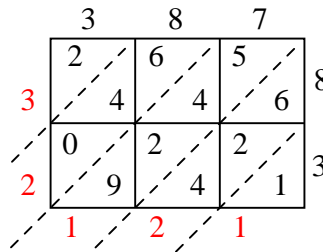
6)  $488 \cdot 19 =$



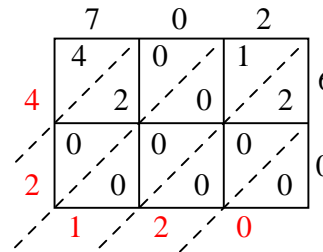
7)  $543 \cdot 53 =$



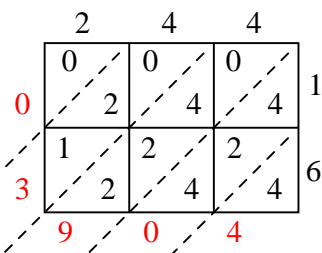
8)  $387 \cdot 83 =$



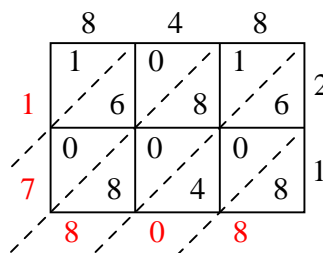
9)  $702 \cdot 60 =$



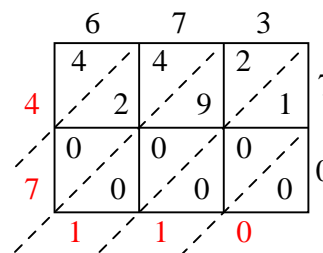
10)  $244 \cdot 16 =$



11)  $848 \cdot 21 =$



12)  $673 \cdot 70 =$

1. **28.980**2. **81.005**3. **38.830**4. **49.134**5. **34.650**6. **9.272**7. **28.779**8. **32.121**9. **42.120**10. **3.904**11. **17.808**12. **47.110**