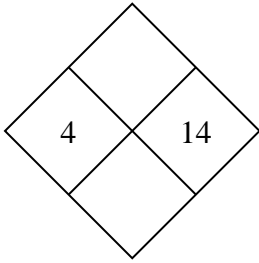




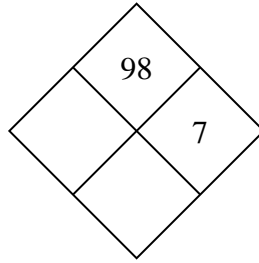
Vervollständige den Diamanten.

**Antworten**

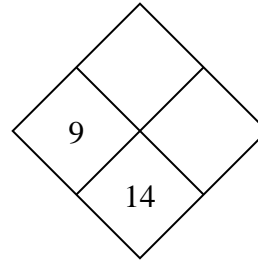
1)



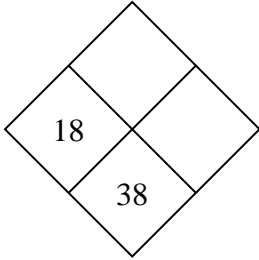
2)



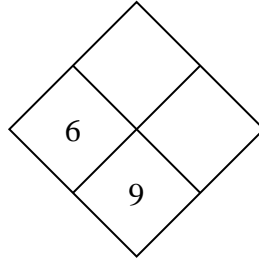
3)



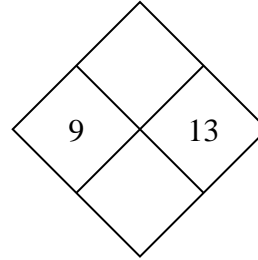
4)



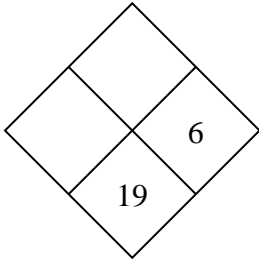
5)



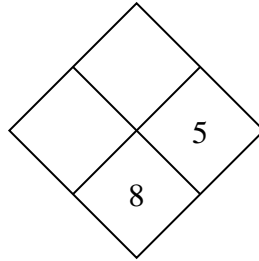
6)



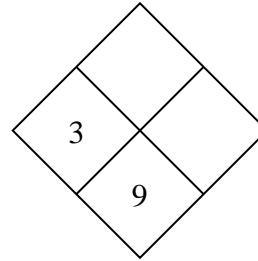
7)



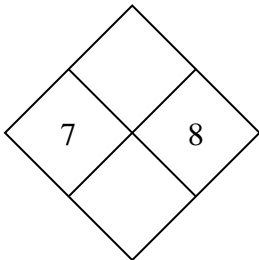
8)



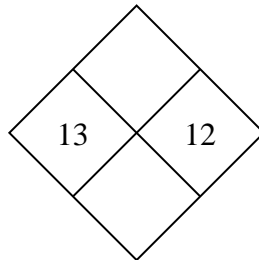
9)



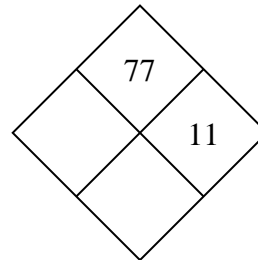
10)



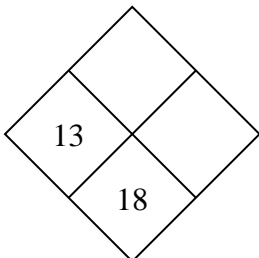
11)



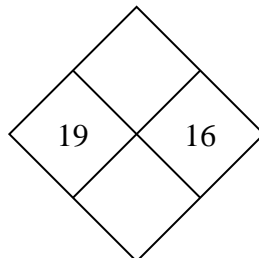
12)



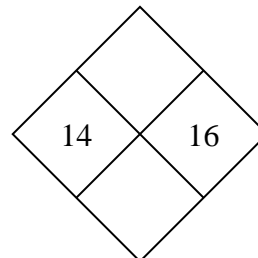
13)



14)



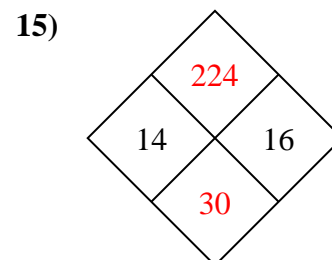
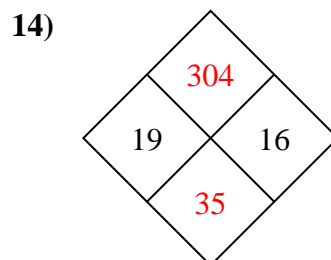
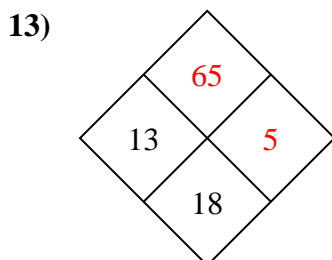
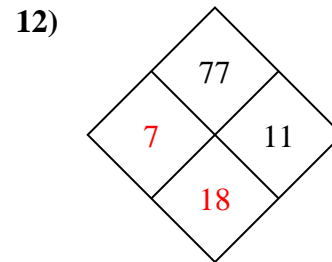
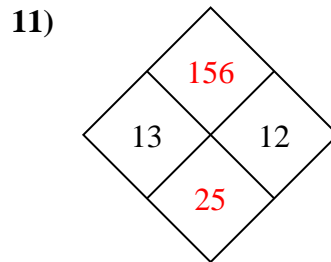
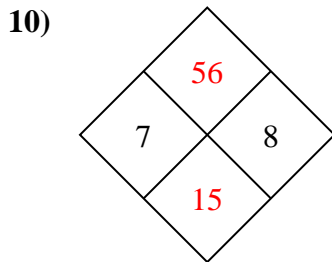
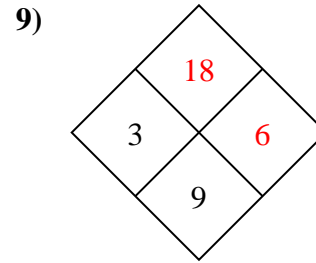
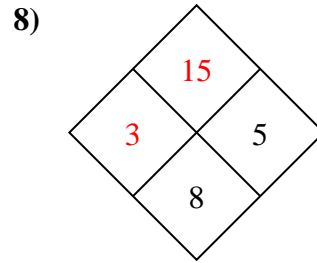
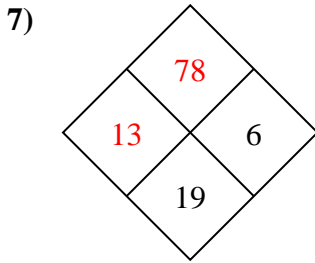
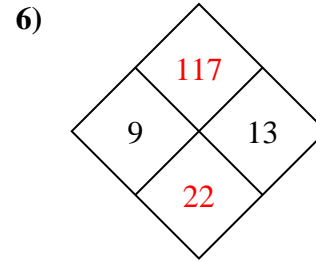
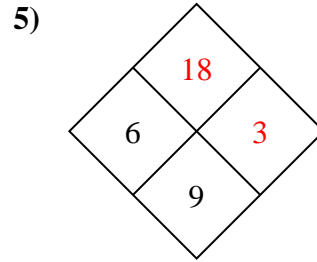
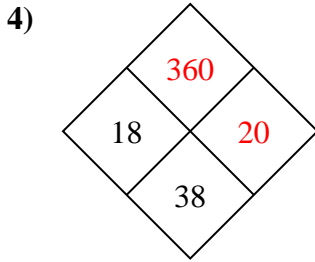
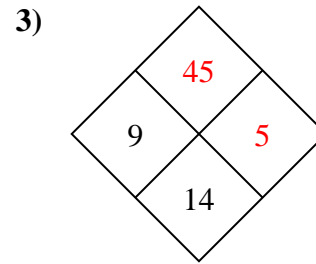
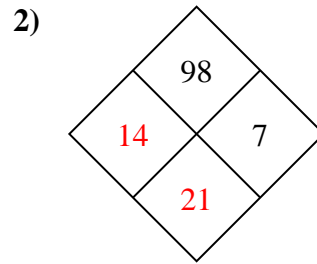
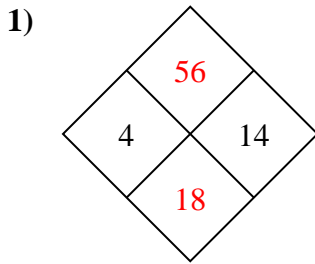
15)



1. \_\_\_\_\_
2. \_\_\_\_\_
3. \_\_\_\_\_
4. \_\_\_\_\_
5. \_\_\_\_\_
6. \_\_\_\_\_
7. \_\_\_\_\_
8. \_\_\_\_\_
9. \_\_\_\_\_
10. \_\_\_\_\_
11. \_\_\_\_\_
12. \_\_\_\_\_
13. \_\_\_\_\_
14. \_\_\_\_\_
15. \_\_\_\_\_



Vervollständige den Diamanten.

**Antworten**

1. **56 , 18**
2. **14 , 21**
3. **45 , 5**
4. **360 , 20**
5. **18 , 3**
6. **117 , 22**
7. **78 , 13**
8. **15 , 3**
9. **18 , 6**
10. **56 , 15**
11. **156 , 25**
12. **7 , 18**
13. **65 , 5**
14. **304 , 35**
15. **224 , 30**