




Bestimmen Sie den angezeigten Geldbetrag.

Antworten




1. _____




2. _____



3. _____



4. _____



5. _____




6. _____



7. _____



8. _____




9. _____



10. _____



Bestimmen Sie den angezeigten Geldbetrag.



Antworten

1. \$0,96

2. \$0,96

3. \$0,97

4. \$0,95

5. \$0,95

6. \$0,99

7. \$0,99

8. \$0,98

9. \$0,97

10. \$0,97