




Benutze die Einheiten zum Messen der Länge jeden Streifens.

**Antworten**



1. \_\_\_\_\_



2. \_\_\_\_\_



3. \_\_\_\_\_



4. \_\_\_\_\_



5. \_\_\_\_\_



6. \_\_\_\_\_



7. \_\_\_\_\_



8. \_\_\_\_\_



9. \_\_\_\_\_



10. \_\_\_\_\_




Benutze die Einheiten zum Messen der Länge jeden Streifens.

**Antworten**



1. 2



2. 1



3. 15



4. 4



5. 12



6. 9



7. 8



8. 6




9. 11



10. 14

Cut out and use the units shown to measure the bars on the previous page.






Benutze die Einheiten zum Messen der Länge jeden Streifens.

**Antworten**



1. \_\_\_\_\_



2. \_\_\_\_\_



3. \_\_\_\_\_



4. \_\_\_\_\_



5. \_\_\_\_\_



6. \_\_\_\_\_



7. \_\_\_\_\_



8. \_\_\_\_\_



9. \_\_\_\_\_



10. \_\_\_\_\_




Benutze die Einheiten zum Messen der Länge jeden Streifens.

**Antworten**



1. 10



2. 1



3. 9



4. 2



5. 4




6. 3



7. 12



8. 7




9. 11



10. 6

Cut out and use the units shown to measure the bars on the previous page.





Benutze die Einheiten zum Messen der Länge jeden Streifens.

**Antworten**



1. \_\_\_\_\_




2. \_\_\_\_\_



3. \_\_\_\_\_



4. \_\_\_\_\_



5. \_\_\_\_\_



6. \_\_\_\_\_



7. \_\_\_\_\_



8. \_\_\_\_\_



9. \_\_\_\_\_



10. \_\_\_\_\_



Benutze die Einheiten zum Messen der Länge jeden Streifens.

**Antworten**



1. 9



2. 13



3. 2



4. 4



5. 1



6. 8



7. 3



8. 5




9. 14



10. 12



Cut out and use the units shown to measure the bars on the previous page.





Benutze die Einheiten zum Messen der Länge jeden Streifens.

**Antworten**




1. \_\_\_\_\_



2. \_\_\_\_\_



3. \_\_\_\_\_



4. \_\_\_\_\_




5. \_\_\_\_\_



6. \_\_\_\_\_




7. \_\_\_\_\_



8. \_\_\_\_\_



9. \_\_\_\_\_



10. \_\_\_\_\_



Benutze die Einheiten zum Messen der Länge jeden Streifens.

**Antworten**



1. 8



2. 2



3. 3



4. 10



5. 7



6. 9



7. 4



8. 5



9. 1



10. 6






Benutze die Einheiten zum Messen der Länge jeden Streifens.

**Antworten**



1. \_\_\_\_\_



2. \_\_\_\_\_



3. \_\_\_\_\_




4. \_\_\_\_\_



5. \_\_\_\_\_



6. \_\_\_\_\_



7. \_\_\_\_\_



8. \_\_\_\_\_



9. \_\_\_\_\_



10. \_\_\_\_\_




Benutze die Einheiten zum Messen der Länge jeden Streifens.

**Antworten**



1. 10



2. 1



3. 4



4. 3



5. 6



6. 8



7. 9



8. 11




9. 5



10. 13


Cut out and use the units shown to measure the bars on the previous page.





Benutze die Einheiten zum Messen der Länge jeden Streifens.

**Antworten**



1. \_\_\_\_\_



2. \_\_\_\_\_



3. \_\_\_\_\_



4. \_\_\_\_\_



5. \_\_\_\_\_



6. \_\_\_\_\_



7. \_\_\_\_\_



8. \_\_\_\_\_



9. \_\_\_\_\_




10. \_\_\_\_\_





Benutze die Einheiten zum Messen der Länge jeden Streifens.



**Antworten**

1. 1

2. 7

3. 11

4. 8

5. 2

6. 14


7. 12

8. 6

9. 10

10. 5

Cut out and use the units shown to measure the bars on the previous page.





Benutze die Einheiten zum Messen der Länge jeden Streifens.

**Antworten**



1. \_\_\_\_\_




2. \_\_\_\_\_




3. \_\_\_\_\_




4. \_\_\_\_\_



5. \_\_\_\_\_



6. \_\_\_\_\_



7. \_\_\_\_\_



8. \_\_\_\_\_



9. \_\_\_\_\_




10. \_\_\_\_\_



Benutze die Einheiten zum Messen der Länge jeden Streifens.

**Antworten**



1. 5



2. 10




3. 13




4. 1



5. 11



6. 15



7. 8



8. 14




9. 6



10. 9

Cut out and use the units shown to measure the bars on the previous page.





Benutze die Einheiten zum Messen der Länge jeden Streifens.

**Antworten**



1. \_\_\_\_\_



2. \_\_\_\_\_



3. \_\_\_\_\_



4. \_\_\_\_\_



5. \_\_\_\_\_



6. \_\_\_\_\_



7. \_\_\_\_\_



8. \_\_\_\_\_



9. \_\_\_\_\_



10. \_\_\_\_\_



Benutze die Einheiten zum Messen der Länge jeden Streifens.

**Antworten**



1. 5




2. 6



3. 4



4. 3



5. 10



6. 2



7. 1



8. 8




9. 7



10. 9

Cut out and use the units shown to measure the bars on the previous page.







Benutze die Einheiten zum Messen der Länge jeden Streifens.

**Antworten**



1. \_\_\_\_\_



2. \_\_\_\_\_



3. \_\_\_\_\_



4. \_\_\_\_\_



5. \_\_\_\_\_



6. \_\_\_\_\_



7. \_\_\_\_\_



8. \_\_\_\_\_



9. \_\_\_\_\_



10. \_\_\_\_\_



Benutze die Einheiten zum Messen der Länge jeden Streifens.

**Antworten**



1. 7



2. 3



3. 9



4. 1



5. 8



6. 10



7. 4



8. 2

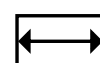
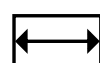
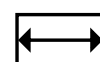
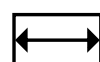
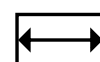
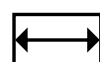
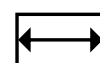
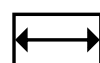
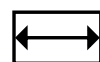
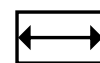
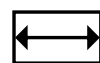
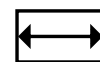
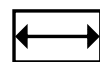
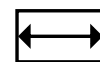
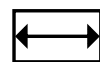
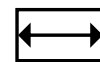
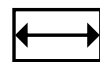
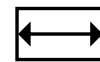
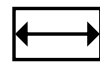
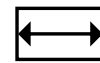
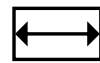
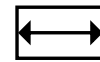
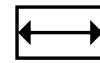
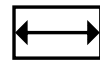
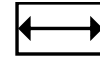
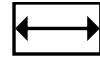


9. 11



10. 5

Cut out and use the units shown to measure the bars on the previous page.





Benutze die Einheiten zum Messen der Länge jeden Streifens.

**Antworten**



1. \_\_\_\_\_



2. \_\_\_\_\_



3. \_\_\_\_\_



4. \_\_\_\_\_



5. \_\_\_\_\_



6. \_\_\_\_\_



7. \_\_\_\_\_



8. \_\_\_\_\_



9. \_\_\_\_\_



10. \_\_\_\_\_



Benutze die Einheiten zum Messen der Länge jeden Streifens.

**Antworten**



1. 10



2. 1



3. 8



4. 7



5. 4



6. 3



7. 2



8. 9



9. 11



10. 6

Cut out and use the units shown to measure the bars on the previous page.

