



Stelle fest, welcher Buchstaben am besten die Länge / Höhe darstellt.

Antworten

Milímetro (mm)

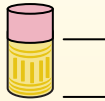
Un milímetro equivale al grosor de una tarjeta de crédito.



Centímetro (cm)

10 mm = 1 cm.

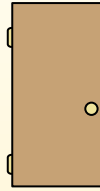
La parte metálica de un lápiz mide aproximadamente 1 cm. Una regla mide unos 30 centímetros.



Metro (m)

100 cm = 1 m

Desde el suelo hasta la perilla de una puerta hay aproximadamente 1 metro.



Kilómetro (km)


1,000 m = 1 km

La mayoría de las carreteras principales tienen al menos un kilómetro de largo.



1. _____
2. _____
3. _____
4. _____
5. _____
6. _____
7. _____
8. _____
9. _____


1)



Popcorn

- A. 3 zentimeters
- B. 90 zentimeters
- C. 2 kilometers
- D. 3 millimeters

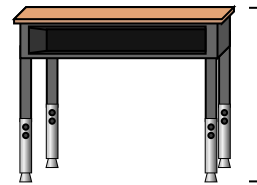
2)



Lutscher

- A. 2 kilometers
- B. 30 millimeters
- C. 10 zentimeters
- D. 30 zentimeters


3)



Schreibtisch

- A. 2 meters
- B. 70 zentimeters
- C. 30 zentimeters
- D. 15 zentimeters

4)



Riesenrad

- A. 30 zentimeters
- B. 50 kilometers
- C. 23 meters
- D. 5 meters


5)



Zahnbürste

- A. 10 zentimeters
- B. 3 meters
- C. 17 zentimeters
- D. 1 meter

6)



Dose Soda

- A. 1 meter
- B. 10 zentimeters
- C. 30 zentimeters
- D. 3 zentimeters

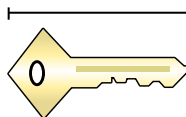
7)



Frosch

- A. 60 zentimeters
- B. 4 millimeters
- C. 8 zentimeters
- D. 20 zentimeters

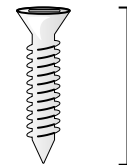
8)



Taste

- A. 2 meters
- B. 5 zentimeters
- C. 15 zentimeters
- D. 150 zentimeters

9)



Schrauben

- A. 1 meter
- B. 25 zentimeters
- C. 20 zentimeters
- D. 3 zentimeters



Stelle fest, welcher Buchstaben am besten die Länge / Höhe darstellt.

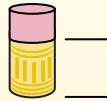
Antworten**Milímetro (mm)**

Un milímetro equivale al grosor de una tarjeta de crédito.

**Centímetro (cm)**

10 mm = 1 cm.

La parte metálica de un lápiz mide aproximadamente 1 cm. Una regla mide unos 30 centímetros.

**Metro (m)**

100 cm = 1 m

Desde el suelo hasta la perilla de una puerta hay aproximadamente 1 metro.


**Kilómetro (km)**

1,000 m = 1 km

La mayoría de las carreteras principales tienen al menos un kilómetro de largo.




1)



Popcorn

- A. 3 zentimeters
- B. 90 zentimeters
- C. 2 kilometers
- D. 3 millimeters

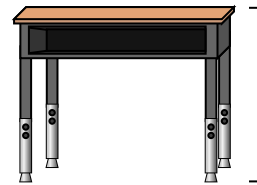
2)



Lutscher

- A. 2 kilometers
- B. 30 millimeters
- C. 10 zentimeters
- D. 30 zentimeters


3)



Schreibtisch

- A. 2 meters
- B. 70 zentimeters
- C. 30 zentimeters
- D. 15 zentimeters

4)



Riesenrad

- A. 30 zentimeters
- B. 50 kilometers
- C. 23 meters
- D. 5 meters


5)



Zahnbürste

- A. 10 zentimeters
- B. 3 meters
- C. 17 zentimeters
- D. 1 meter

6)



Dose Soda

- A. 1 meter
- B. 10 zentimeters
- C. 30 zentimeters
- D. 3 zentimeters

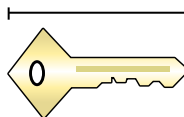
7)



Frosch

- A. 60 zentimeters
- B. 4 millimeters
- C. 8 zentimeters
- D. 20 zentimeters

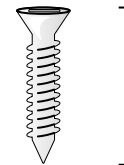
8)



Taste

- A. 2 meters
- B. 5 zentimeters
- C. 15 zentimeters
- D. 150 zentimeters

9)



Schrauben

- A. 1 meter
- B. 25 zentimeters
- C. 20 zentimeters
- D. 3 zentimeters

1. **A**2. **C**3. **B**4. **C**5. **C**6. **B**7. **C**8. **B**9. **D**



Stelle fest, welcher Buchstaben am besten die Länge / Höhe darstellt.

Antworten

Milímetro (mm)

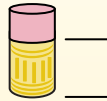
Un milímetro equivale al grosor de una tarjeta de crédito.



Centímetro (cm)

10 mm = 1 cm.

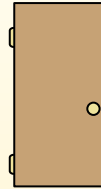
La parte metálica de un lápiz mide aproximadamente 1 cm. Una regla mide unos 30 centímetros.



Metro (m)

100 cm = 1 m

Desde el suelo hasta la perilla de una puerta hay aproximadamente 1 metro.



Kilómetro (km)

1,000 m = 1 km

La mayoría de las carreteras principales tienen al menos un kilómetro de largo.



1. _____
2. _____
3. _____
4. _____
5. _____
6. _____
7. _____
8. _____
9. _____

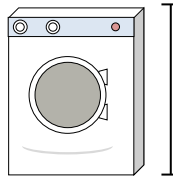
1)



Dose Bohnen

- A. 2 meters
- B. 2 kilometers
- C. 10 zentimeters
- D. 120 zentimeters

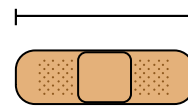
2)



Waschmaschine

- A. 30 zentimeters
- B. 10 zentimeters
- C. 2 meters
- D. 1 meter


3)



Binde

- A. 60 zentimeters
- B. 3 kilometers
- C. 9 zentimeters
- D. 1 meter


4)



Berg

- A. 700 millimeters
- B. 9 meters
- C. 3 kilometers
- D. 60 zentimeters


5)



Brotscheibe

- A. 10 zentimeters
- B. 120 zentimeters
- C. 2 meters
- D. 25 zentimeters


6)



Elefant

- A. 150 millimeters
- B. 4 meters
- C. 2 kilometers
- D. 45 zentimeters


7)



Hund

- A. 4 meters
- B. 60 zentimeters
- C. 2 meters
- D. 10 zentimeters


8)



Notizbuch Papier

- A. 25 zentimeters
- B. 1 meter
- C. 15 zentimeters
- D. 60 zentimeters

9)



Bügeleisen

- A. 240 zentimeters
- B. 60 zentimeters
- C. 40 zentimeters
- D. 15 zentimeters



Stelle fest, welcher Buchstaben am besten die Länge / Höhe darstellt.

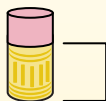
Antworten**Milímetro (mm)**

Un milímetro equivale al grosor de una tarjeta de crédito.

**Centímetro (cm)**

10 mm = 1 cm.

La parte metálica de un lápiz mide aproximadamente 1 cm. Una regla mide unos 30 centímetros.

**Metro (m)**

100 cm = 1 m

Desde el suelo hasta la perilla de una puerta hay aproximadamente 1 metro.


**Kilómetro (km)**

1,000 m = 1 km

La mayoría de las carreteras principales tienen al menos un kilómetro de largo.




1)



Dose Bohnen

- A. 2 meters
- B. 2 kilometers
- C. 10 zentimeters
- D. 120 zentimeters

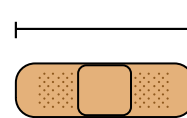
2)



Waschmaschine

- A. 30 zentimeters
- B. 10 zentimeters
- C. 2 meters
- D. 1 meter



3)



Binde

- A. 60 zentimeters
- B. 3 kilometers
- C. 9 zentimeters
- D. 1 meter


4)



Berg

- A. 700 millimeters
- B. 9 meters
- C. 3 kilometers
- D. 60 zentimeters


5)



Brotscheibe

- A. 10 zentimeters
- B. 120 zentimeters
- C. 2 meters
- D. 25 zentimeters

6)



Elefant

- A. 150 millimeters
- B. 4 meters
- C. 2 kilometers
- D. 45 zentimeters


7)



Hund

- A. 4 meters
- B. 60 zentimeters
- C. 2 meters
- D. 10 zentimeters

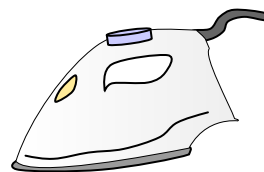
8)



Notizbuch Papier

- A. 25 zentimeters
- B. 1 meter
- C. 15 zentimeters
- D. 60 zentimeters

9)



Bügeleisen

- A. 240 zentimeters
- B. 60 zentimeters
- C. 40 zentimeters
- D. 15 zentimeters

1. **C**2. **D**3. **C**4. **C**5. **A**6. **B**7. **B**8. **A**9. **D**



Stelle fest, welcher Buchstaben am besten die Länge / Höhe darstellt.

Antworten

Milímetro (mm)

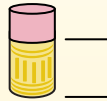
Un milímetro equivale al grosor de una tarjeta de crédito.



Centímetro (cm)

10 mm = 1 cm.

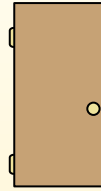
La parte metálica de un lápiz mide aproximadamente 1 cm. Una regla mide unos 30 centímetros.



Metro (m)

100 cm = 1 m

Desde el suelo hasta la perilla de una puerta hay aproximadamente 1 metro.



Kilómetro (km)

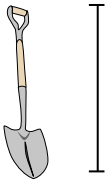
1,000 m = 1 km

La mayoría de las carreteras principales tienen al menos un kilómetro de largo.



1. _____
2. _____
3. _____
4. _____
5. _____
6. _____
7. _____
8. _____
9. _____

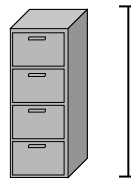
1)



Schaufel

- A. 1 meter
- B. 60 zentimeters
- C. 3 meters
- D. 30 zentimeters


2)



Aktenschrank

- A. 30 zentimeters
- B. 60 zentimeters
- C. 1.5 millimeters
- D. 30 millimeters


3)



Berg

- A. 700 millimeters
- B. 3 kilometers
- C. 9 meters
- D. 60 zentimeters

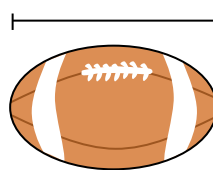
4)



Notizbuch Papier

- A. 1 meter
- B. 25 zentimeters
- C. 15 zentimeters
- D. 60 zentimeters

5)



Fußball

- A. 25 zentimeters
- B. 3 zentimeters
- C. 60 zentimeters
- D. 1 meter


6)



Stift

- A. 12 zentimeters
- B. 30 zentimeters
- C. 30 millimeters
- D. 5 meters

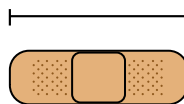
7)



Hammer

- A. 40 zentimeters
- B. 1 meter
- C. 10 zentimeters
- D. 3 zentimeters

8)



Binde

- A. 9 zentimeters
- B. 1 meter
- C. 60 zentimeters
- D. 3 kilometers

9)



Popcorn

- A. 3 zentimeters
- B. 2 kilometers
- C. 3 millimeters
- D. 90 zentimeters



Stelle fest, welcher Buchstaben am besten die Länge / Höhe darstellt.

Antworten

Milímetro (mm)

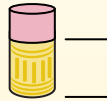
Un milímetro equivale al grosor de una tarjeta de crédito.



Centímetro (cm)

10 mm = 1 cm.

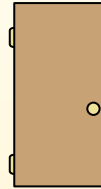
La parte metálica de un lápiz mide aproximadamente 1 cm. Una regla mide unos 30 centímetros.



Metro (m)

100 cm = 1 m

Desde el suelo hasta la perilla de una puerta hay aproximadamente 1 metro.



Kilómetro (km)

1,000 m = 1 km

La mayoría de las carreteras principales tienen al menos un kilómetro de largo.



1. **A**

2. **C**

3. **B**

4. **B**


5. **A**

6. **A**

7. **A**

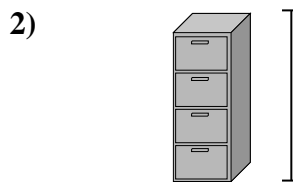
8. **A**

9. **A**



Schaufel

- A. 1 meter
- B. 60 zentimeters
- C. 3 meters
- D. 30 zentimeters




Aktenschrank

- A. 30 zentimeters
- B. 60 zentimeters
- C. 1.5 millimeters
- D. 30 millimeters



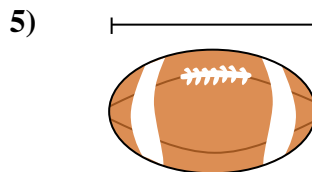
Berg

- A. 700 millimeters
- B. 3 kilometers
- C. 9 meters
- D. 60 zentimeters



Notizbuch Papier

- A. 1 meter
- B. 25 zentimeters
- C. 15 zentimeters
- D. 60 zentimeters




Fußball

- A. 25 zentimeters
- B. 3 zentimeters
- C. 60 zentimeters
- D. 1 meter



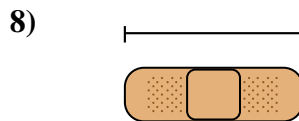
Stift

- A. 12 zentimeters
- B. 30 zentimeters
- C. 30 millimeters
- D. 5 meters



Hammer

- A. 40 zentimeters
- B. 1 meter
- C. 10 zentimeters
- D. 3 zentimeters



Binde

- A. 9 zentimeters
- B. 1 meter
- C. 60 zentimeters
- D. 3 kilometers



Popcorn

- A. 3 zentimeters
- B. 2 kilometers
- C. 3 millimeters
- D. 90 zentimeters



Stelle fest, welcher Buchstaben am besten die Länge / Höhe darstellt.

Antworten

Milímetro (mm)

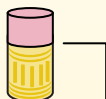
Un milímetro equivale al grosor de una tarjeta de crédito.



Centímetro (cm)

10 mm = 1 cm.

La parte metálica de un lápiz mide aproximadamente 1 cm. Una regla mide unos 30 centímetros.



Metro (m)

100 cm = 1 m

Desde el suelo hasta la perilla de una puerta hay aproximadamente 1 metro.




Kilómetro (km)

1,000 m = 1 km

La mayoría de las carreteras principales tienen al menos un kilómetro de largo.




1. _____
2. _____
3. _____
4. _____
5. _____
6. _____
7. _____
8. _____
9. _____



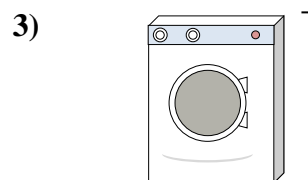
Notizbuch Papier

- A. 60 zentimeters
- B. 15 zentimeters
- C. 1 meter
- D. 25 zentimeters



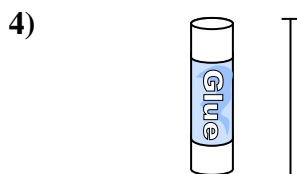
Gallone Milch

- A. 3 meters
- B. 20 zentimeters
- C. 10 millimeters
- D. 8 zentimeters




Waschmaschine

- A. 10 zentimeters
- B. 30 zentimeters
- C. 1 meter
- D. 2 meters



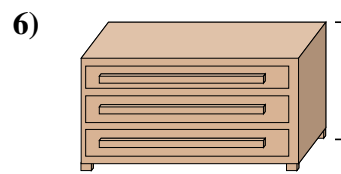
Klebestift

- A. 30 zentimeters
- B. 10 zentimeters
- C. 6 kilometers
- D. 25 zentimeters




Elefant

- A. 45 zentimeters
- B. 4 meters
- C. 150 millimeters
- D. 2 kilometers



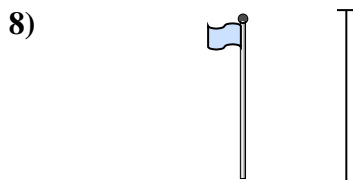
Kommode

- A. 45 zentimeters
- B. 30 zentimeters
- C. 90 zentimeters
- D. 3 meters



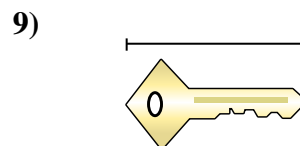
Bowlingkugelhöhe

- A. 10 zentimeters
- B. 1 meter
- C. 25 zentimeters
- D. 305 zentimeters



Fahnenmast

- A. 300 zentimeters
- B. 9 meters
- C. 2 meters
- D. 2 kilometers



Taste

- A. 2 meters
- B. 5 zentimeters
- C. 15 zentimeters
- D. 150 zentimeters



Stelle fest, welcher Buchstaben am besten die Länge / Höhe darstellt.

Antworten

Milímetro (mm)

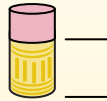
Un milímetro equivale al grosor de una tarjeta de crédito.



Centímetro (cm)

10 mm = 1 cm.

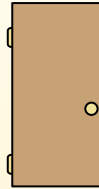
La parte metálica de un lápiz mide aproximadamente 1 cm. Una regla mide unos 30 centímetros.



Metro (m)

100 cm = 1 m


Desde el suelo hasta la perilla de una puerta hay aproximadamente 1 metro.




Kilómetro (km)

1,000 m = 1 km

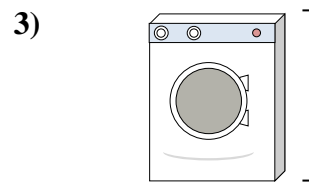
La mayoría de las carreteras principales tienen al menos un kilómetro de largo.



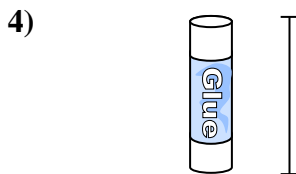
- Notizbuch Papier
A. 60 zentimeters
B. 15 zentimeters
C. 1 meter
D. 25 zentimeters




- Gallone Milch
A. 3 meters
B. 20 zentimeters
C. 10 millimeters
D. 8 zentimeters



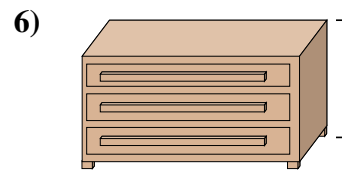
- Waschmaschine
A. 10 zentimeters
B. 30 zentimeters
C. 1 meter
D. 2 meters



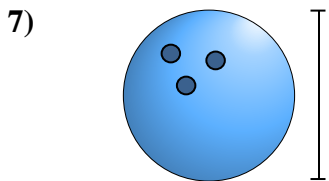
- Klebestift
A. 30 zentimeters
B. 10 zentimeters
C. 6 kilometers
D. 25 zentimeters



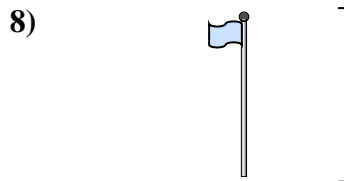
- Elefant
A. 45 zentimeters
B. 4 meters
C. 150 millimeters
D. 2 kilometers



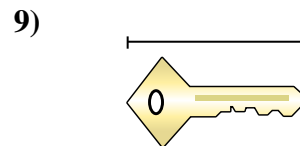
- Kommode
A. 45 zentimeters
B. 30 zentimeters
C. 90 zentimeters
D. 3 meters



- Bowlingkugelhöhe
A. 10 zentimeters
B. 1 meter
C. 25 zentimeters
D. 305 zentimeters



- Fahnenmast
A. 300 zentimeters
B. 9 meters
C. 2 meters
D. 2 kilometers



- Taste
A. 2 meters
B. 5 zentimeters
C. 15 zentimeters
D. 150 zentimeters

1. **D**
2. **B**
3. **C**
4. **B**
5. **B**
6. **C**
7. **C**
8. **B**
9. **B**



Stelle fest, welcher Buchstaben am besten die Länge / Höhe darstellt.

Antworten

Milímetro (mm)

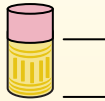
Un milímetro equivale al grosor de una tarjeta de crédito.



Centímetro (cm)

10 mm = 1 cm.

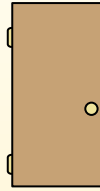
La parte metálica de un lápiz mide aproximadamente 1 cm. Una regla mide unos 30 centímetros.



Metro (m)

100 cm = 1 m

Desde el suelo hasta la perilla de una puerta hay aproximadamente 1 metro.



Kilómetro (km)


1,000 m = 1 km

La mayoría de las carreteras principales tienen al menos un kilómetro de largo.



1. _____
2. _____
3. _____
4. _____
5. _____
6. _____
7. _____
8. _____
9. _____

1)



Notizbuch Papier

- A. 15 zentimeters
- B. 25 zentimeters
- C. 60 zentimeters
- D. 1 meter


2)



Berg

- A. 9 meters
- B. 3 kilometers
- C. 60 zentimeters
- D. 700 millimeters

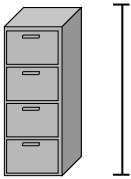
3)



Stift

- A. 5 meters
- B. 30 millimeters
- C. 12 zentimeters
- D. 30 zentimeters

4)



Aktenschrank

- A. 30 millimeters
- B. 60 zentimeters
- C. 1.5 millimeters
- D. 30 zentimeters

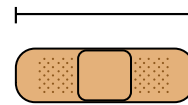
5)



Frosch

- A. 4 millimeters
- B. 60 zentimeters
- C. 8 zentimeters
- D. 20 zentimeters

6)



Binde

- A. 9 zentimeters
- B. 3 kilometers
- C. 60 zentimeters
- D. 1 meter

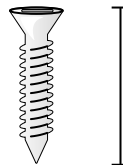
7)



Insekt

- A. 30 zentimeters
- B. 7 millimeters
- C. 5 zentimeters
- D. 10 zentimeters


8)



Schrauben

- A. 3 zentimeters
- B. 25 zentimeters
- C. 20 zentimeters
- D. 1 meter

9)



Bügeleisen

- A. 40 zentimeters
- B. 15 zentimeters
- C. 60 zentimeters
- D. 240 zentimeters



Stelle fest, welcher Buchstaben am besten die Länge / Höhe darstellt.

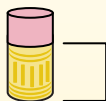
Antworten**Milímetro (mm)**

Un milímetro equivale al grosor de una tarjeta de crédito.

**Centímetro (cm)**

10 mm = 1 cm.

La parte metálica de un lápiz mide aproximadamente 1 cm. Una regla mide unos 30 centímetros.

**Metro (m)**

100 cm = 1 m

Desde el suelo hasta la perilla de una puerta hay aproximadamente 1 metro.


**Kilómetro (km)**

1,000 m = 1 km

La mayoría de las carreteras principales tienen al menos un kilómetro de largo.



1)



Notizbuch Papier

- A. 15 zentimeters
- B. 25 zentimeters
- C. 60 zentimeters
- D. 1 meter

2)



Berg

- A. 9 meters
- B. 3 kilometers
- C. 60 zentimeters
- D. 700 millimeters

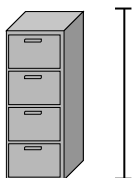
3)



Stift

- A. 5 meters
- B. 30 millimeters
- C. 12 zentimeters
- D. 30 zentimeters

4)



Aktenschrank

- A. 30 millimeters
- B. 60 zentimeters
- C. 1.5 millimeters
- D. 30 zentimeters

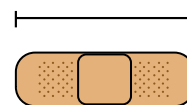
5)



Frosch

- A. 4 millimeters
- B. 60 zentimeters
- C. 8 zentimeters
- D. 20 zentimeters

6)



Binde

- A. 9 zentimeters
- B. 3 kilometers
- C. 60 zentimeters
- D. 1 meter

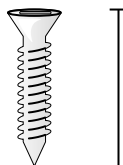
7)



Insekt

- A. 30 zentimeters
- B. 7 millimeters
- C. 5 zentimeters
- D. 10 zentimeters

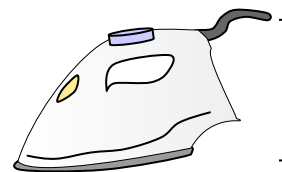
8)



Schrauben

- A. 3 zentimeters
- B. 25 zentimeters
- C. 20 zentimeters
- D. 1 meter

9)



Bügeleisen

- A. 40 zentimeters
- B. 15 zentimeters
- C. 60 zentimeters
- D. 240 zentimeters

1. **B**2. **B**3. **C**4. **C**5. **C**6. **A**7. **B**8. **A**9. **B**



Stelle fest, welcher Buchstaben am besten die Länge / Höhe darstellt.

Antworten

Milímetro (mm)

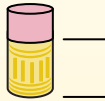
Un milímetro equivale al grosor de una tarjeta de crédito.



Centímetro (cm)

10 mm = 1 cm.

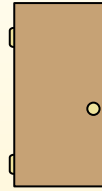
La parte metálica de un lápiz mide aproximadamente 1 cm. Una regla mide unos 30 centímetros.



Metro (m)

100 cm = 1 m

Desde el suelo hasta la perilla de una puerta hay aproximadamente 1 metro.



Kilómetro (km)


1,000 m = 1 km

La mayoría de las carreteras principales tienen al menos un kilómetro de largo.



1. _____
2. _____
3. _____
4. _____
5. _____
6. _____
7. _____
8. _____
9. _____


1)



Kochtopf

- A. 10 zentimeters
- B. 3 zentimeters
- C. 60 zentimeters
- D. 25 zentimeters

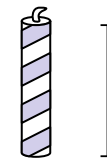
2)



Hammer

- A. 3 zentimeters
- B. 40 zentimeters
- C. 10 zentimeters
- D. 1 meter

3)



Kerze

- A. 20 zentimeters
- B. 30 zentimeters
- C. 5 zentimeters
- D. 2 kilometers

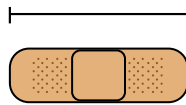
4)



Klebestift

- A. 30 zentimeters
- B. 6 kilometers
- C. 25 zentimeters
- D. 10 zentimeters

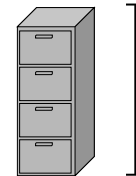
5)



Binde

- A. 60 zentimeters
- B. 3 kilometers
- C. 9 zentimeters
- D. 1 meter

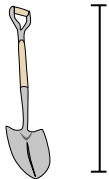
6)



Aktenschrank

- A. 1.5 millimeters
- B. 30 millimeters
- C. 60 zentimeters
- D. 30 zentimeters

7)



Schaufel

- A. 60 zentimeters
- B. 1 meter
- C. 30 zentimeters
- D. 3 meters

8)



Baumhöhe

- A. 2 kilometers
- B. 100 zentimeters
- C. 5 meters
- D. 30 zentimeters

9)

Flash Drive

- A. 60 zentimeters
- B. 30 zentimeters
- C. 15 zentimeters
- D. 6 zentimeters



Stelle fest, welcher Buchstaben am besten die Länge / Höhe darstellt.

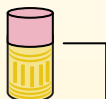
Antworten**Milímetro (mm)**

Un milímetro equivale al grosor de una tarjeta de crédito.

**Centímetro (cm)**

10 mm = 1 cm.

La parte metálica de un lápiz mide aproximadamente 1 cm. Una regla mide unos 30 centímetros.

**Metro (m)**

100 cm = 1 m

Desde el suelo hasta la perilla de una puerta hay aproximadamente 1 metro.


**Kilómetro (km)**

1,000 m = 1 km

La mayoría de las carreteras principales tienen al menos un kilómetro de largo.

1. **D**2. **B**3. **C**4. **D**5. **C**6. **A**7. **B**8. **C**9. **D**


1)



Kochtopf

- A. 10 zentimeters
- B. 3 zentimeters
- C. 60 zentimeters
- D. 25 zentimeters

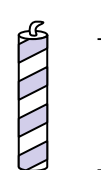
2)



Hammer

- A. 3 zentimeters
- B. 40 zentimeters
- C. 10 zentimeters
- D. 1 meter

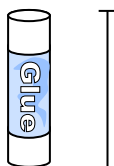
3)



Kerze

- A. 20 zentimeters
- B. 30 zentimeters
- C. 5 zentimeters
- D. 2 kilometers

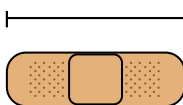
4)



Klebestift

- A. 30 zentimeters
- B. 6 kilometers
- C. 25 zentimeters
- D. 10 zentimeters

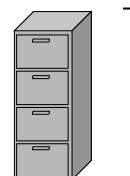
5)



Binde

- A. 60 zentimeters
- B. 3 kilometers
- C. 9 zentimeters
- D. 1 meter

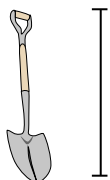
6)



Aktenschrank

- A. 1.5 millimeters
- B. 30 millimeters
- C. 60 zentimeters
- D. 30 zentimeters


7)



Schaufel

- A. 60 zentimeters
- B. 1 meter
- C. 30 zentimeters
- D. 3 meters

8)



Baumhöhe

- A. 2 kilometers
- B. 100 zentimeters
- C. 5 meters
- D. 30 zentimeters

9)

Flash Drive

- A. 60 zentimeters
- B. 30 zentimeters
- C. 15 zentimeters
- D. 6 zentimeters



Stelle fest, welcher Buchstaben am besten die Länge / Höhe darstellt.

Antworten

Milímetro (mm)

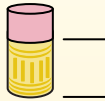
Un milímetro equivale al grosor de una tarjeta de crédito.



Centímetro (cm)

10 mm = 1 cm.

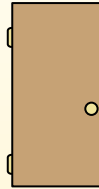
La parte metálica de un lápiz mide aproximadamente 1 cm. Una regla mide unos 30 centímetros.



Metro (m)

100 cm = 1 m

Desde el suelo hasta la perilla de una puerta hay aproximadamente 1 metro.



Kilómetro (km)

1,000 m = 1 km

La mayoría de las carreteras principales tienen al menos un kilómetro de largo.



1. _____
2. _____
3. _____
4. _____
5. _____
6. _____
7. _____
8. _____
9. _____

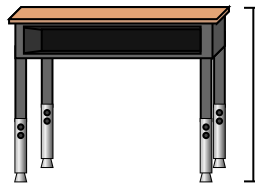
1)



Stift

- A. 12 zentimeters
- B. 30 millimeters
- C. 30 zentimeters
- D. 5 meters

2)



Schreibtisch

- A. 15 zentimeters
- B. 2 meters
- C. 70 zentimeters
- D. 30 zentimeters

3)



Frosch

- A. 20 zentimeters
- B. 8 zentimeters
- C. 4 millimeters
- D. 60 zentimeters

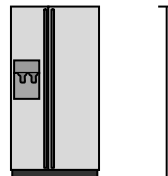
4)



Fahrrad

- A. 10 zentimeters
- B. 1 meter
- C. 3 meters
- D. 25 zentimeters

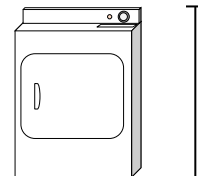
5)



Kühlschrank

- A. 180 zentimeters
- B. 30 zentimeters
- C. 5 kilometers
- D. 4 meters

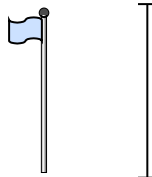
6)



Wäschetrockner

- A. 60 zentimeters
- B. 1 meter
- C. 25 zentimeters
- D. 15 zentimeters

7)



Fahnenmast

- A. 2 kilometers
- B. 9 meters
- C. 300 zentimeters
- D. 2 meters

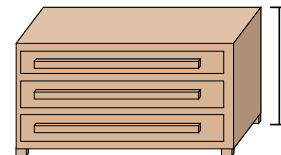
8)



Tennis Ball

- A. 3 millimeters
- B. 25 zentimeters
- C. 8 zentimeters
- D. 60 zentimeters

9)



Kommode

- A. 45 zentimeters
- B. 90 zentimeters
- C. 3 meters
- D. 30 zentimeters



Stelle fest, welcher Buchstaben am besten die Länge / Höhe darstellt.

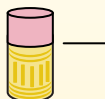
Antworten**Milímetro (mm)**

Un milímetro equivale al grosor de una tarjeta de crédito.

**Centímetro (cm)**


10 mm = 1 cm.

La parte metálica de un lápiz mide aproximadamente 1 cm. Una regla mide unos 30 centímetros.

**Metro (m)**

100 cm = 1 m

Desde el suelo hasta la perilla de una puerta hay aproximadamente 1 metro.

**Kilómetro (km)**

1,000 m = 1 km

La mayoría de las carreteras principales tienen al menos un kilómetro de largo.



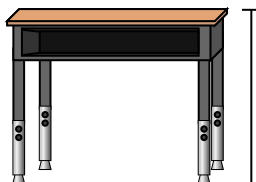
1)



Stift

- A. 12 zentimeters
- B. 30 millimeters
- C. 30 zentimeters
- D. 5 meters

2)



Schreibtisch

- A. 15 zentimeters
- B. 2 meters
- C. 70 zentimeters
- D. 30 zentimeters

3)



Frosch

- A. 20 zentimeters
- B. 8 zentimeters
- C. 4 millimeters
- D. 60 zentimeters

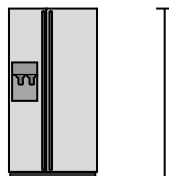
4)



Fahrrad

- A. 10 zentimeters
- B. 1 meter
- C. 3 meters
- D. 25 zentimeters

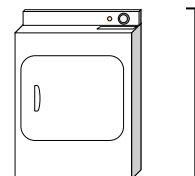
5)



Kühlschrank

- A. 180 zentimeters
- B. 30 zentimeters
- C. 5 kilometers
- D. 4 meters

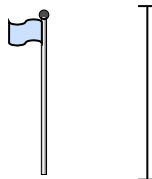
6)



Wäschetrockner

- A. 60 zentimeters
- B. 1 meter
- C. 25 zentimeters
- D. 15 zentimeters


7)



Fahnenmast

- A. 2 kilometers
- B. 9 meters
- C. 300 zentimeters
- D. 2 meters

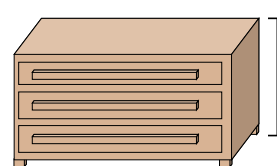
8)



Tennis Ball

- A. 3 millimeters
- B. 25 zentimeters
- C. 8 zentimeters
- D. 60 zentimeters

9)



Kommode

- A. 45 zentimeters
- B. 90 zentimeters
- C. 3 meters
- D. 30 zentimeters

1. **A**2. **C**3. **B**4. **B**5. **A**6. **B**7. **B**8. **C**9. **B**



Stelle fest, welcher Buchstaben am besten die Länge / Höhe darstellt.

Antworten

Milímetro (mm)

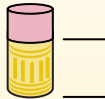
Un milímetro equivale al grosor de una tarjeta de crédito.



Centímetro (cm)

10 mm = 1 cm.

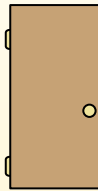
La parte metálica de un lápiz mide aproximadamente 1 cm. Una regla mide unos 30 centímetros.



Metro (m)

100 cm = 1 m

Desde el suelo hasta la perilla de una puerta hay aproximadamente 1 metro.



Kilómetro (km)

1,000 m = 1 km

La mayoría de las carreteras principales tienen al menos un kilómetro de largo.



1. _____
2. _____
3. _____
4. _____
5. _____
6. _____
7. _____
8. _____
9. _____

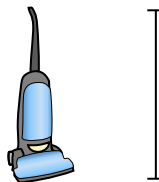
1)



Fahrrad

- A. 10 zentimeters
- B. 25 zentimeters
- C. 1 meter
- D. 3 meters

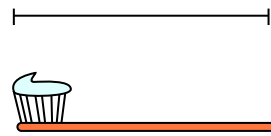
2)



Vakuum

- A. 30 zentimeters
- B. 120 zentimeters
- C. 3 meters
- D. 35 zentimeters

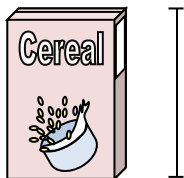
3)



Zahnbürste

- A. 3 meters
- B. 10 zentimeters
- C. 17 zentimeters
- D. 1 meter


4)



Höhe der Getreidekiste

- A. 10 zentimeters
- B. 60 zentimeters
- C. 3 zentimeters
- D. 30 zentimeters


5)



Elefant

- A. 2 kilometers
- B. 150 millimeters
- C. 45 zentimeters
- D. 4 meters

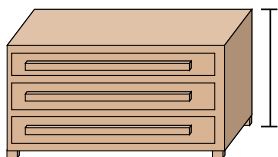
6)



Wäschetrockner

- A. 15 zentimeters
- B. 60 zentimeters
- C. 25 zentimeters
- D. 1 meter

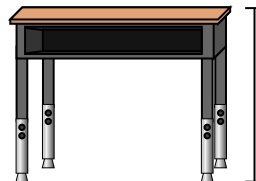
7)



Kommode

- A. 30 zentimeters
- B. 3 meters
- C. 90 zentimeters
- D. 45 zentimeters

8)



Schreibtisch

- A. 15 zentimeters
- B. 30 zentimeters
- C. 70 zentimeters
- D. 2 meters

9)



Insekt

- A. 30 zentimeters
- B. 10 zentimeters
- C. 5 zentimeters
- D. 7 millimeters



Stelle fest, welcher Buchstaben am besten die Länge / Höhe darstellt.

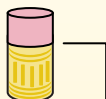
Antworten**Milímetro (mm)**

Un milímetro equivale al grosor de una tarjeta de crédito.

**Centímetro (cm)**

10 mm = 1 cm.

La parte metálica de un lápiz mide aproximadamente 1 cm. Una regla mide unos 30 centímetros.

**Metro (m)**

100 cm = 1 m

Desde el suelo hasta la perilla de una puerta hay aproximadamente 1 metro.

**Kilómetro (km)**

1,000 m = 1 km

La mayoría de las carreteras principales tienen al menos un kilómetro de largo.



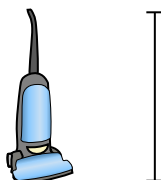
1)



Fahrrad

- A. 10 zentimeters
- B. 25 zentimeters
- C. 1 meter
- D. 3 meters


2)



Vakuum

- A. 30 zentimeters
- B. 120 zentimeters
- C. 3 meters
- D. 35 zentimeters


3)



Zahnbürste

- A. 3 meters
- B. 10 zentimeters
- C. 17 zentimeters
- D. 1 meter


4)



Höhe der Getreidekiste

- A. 10 zentimeters
- B. 60 zentimeters
- C. 3 zentimeters
- D. 30 zentimeters

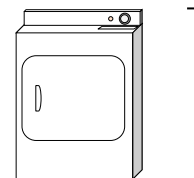
5)



Elefant

- A. 2 kilometers
- B. 150 millimeters
- C. 45 zentimeters
- D. 4 meters

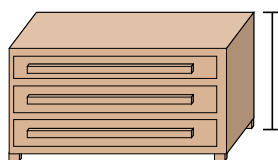
6)



Wäschetrockner

- A. 15 zentimeters
- B. 60 zentimeters
- C. 25 zentimeters
- D. 1 meter

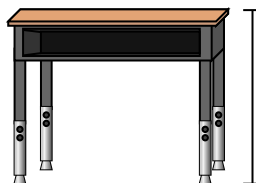
7)



Kommode

- A. 30 zentimeters
- B. 3 meters
- C. 90 zentimeters
- D. 45 zentimeters

8)



Schreibtisch

- A. 15 zentimeters
- B. 30 zentimeters
- C. 70 zentimeters
- D. 2 meters

9)



Insekt

- A. 30 zentimeters
- B. 10 zentimeters
- C. 5 zentimeters
- D. 7 millimeters

1. **C**2. **B**3. **C**4. **D**5. **D**6. **D**7. **C**8. **C**9. **D**



Stelle fest, welcher Buchstaben am besten die Länge / Höhe darstellt.

Antworten

Milímetro (mm)

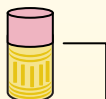
Un milímetro equivale al grosor de una tarjeta de crédito.



Centímetro (cm)

10 mm = 1 cm.

La parte metálica de un lápiz mide aproximadamente 1 cm. Una regla mide unos 30 centímetros.



Metro (m)

100 cm = 1 m

Desde el suelo hasta la perilla de una puerta hay aproximadamente 1 metro.



Kilómetro (km)


1,000 m = 1 km

La mayoría de las carreteras principales tienen al menos un kilómetro de largo.



1. _____
2. _____
3. _____
4. _____
5. _____
6. _____
7. _____
8. _____
9. _____

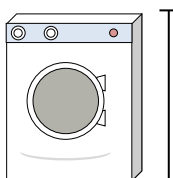
1)



Dose Soda

- A. 30 zentimeters
- B. 3 zentimeters
- C. 1 meter
- D. 10 zentimeters


2)



Waschmaschine

- A. 1 meter
- B. 30 zentimeters
- C. 2 meters
- D. 10 zentimeters

3)



Lutscher

- A. 30 millimeters
- B. 30 zentimeters
- C. 2 kilometers
- D. 10 zentimeters

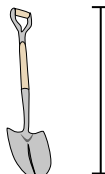
4)



Fahrrad

- A. 25 zentimeters
- B. 10 zentimeters
- C. 1 meter
- D. 3 meters


5)



Schaufel

- A. 30 zentimeters
- B. 60 zentimeters
- C. 1 meter
- D. 3 meters

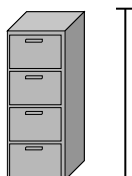
6)



Bowlingkugelhöhe

- A. 25 zentimeters
- B. 305 zentimeters
- C. 1 meter
- D. 10 zentimeters

7)



Aktenschrank

- A. 30 zentimeters
- B. 1.5 millimeters
- C. 30 millimeters
- D. 60 zentimeters

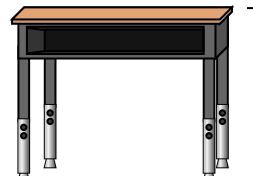
8)



Bleistift

- A. 30 millimeters
- B. 20 zentimeters
- C. 150 zentimeters
- D. 1 meter

9)



Schreibtisch

- A. 2 meters
- B. 15 zentimeters
- C. 30 zentimeters
- D. 70 zentimeters



Stelle fest, welcher Buchstaben am besten die Länge / Höhe darstellt.

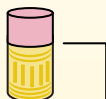
Antworten**Milímetro (mm)**

Un milímetro equivale al grosor de una tarjeta de crédito.

**Centímetro (cm)**

10 mm = 1 cm.

La parte metálica de un lápiz mide aproximadamente 1 cm. Una regla mide unos 30 centímetros.

**Metro (m)**

100 cm = 1 m

Desde el suelo hasta la perilla de una puerta hay aproximadamente 1 metro.


**Kilómetro (km)**

1,000 m = 1 km

La mayoría de las carreteras principales tienen al menos un kilómetro de largo.



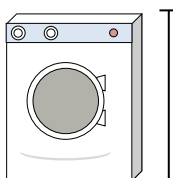
1)



Dose Soda

- A. 30 zentimeters
- B. 3 zentimeters
- C. 1 meter
- D. 10 zentimeters


2)



Waschmaschine

- A. 1 meter
- B. 30 zentimeters
- C. 2 meters
- D. 10 zentimeters

3)



Lutscher

- A. 30 millimeters
- B. 30 zentimeters
- C. 2 kilometers
- D. 10 zentimeters

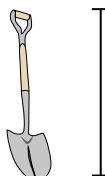
4)



Fahrrad

- A. 25 zentimeters
- B. 10 zentimeters
- C. 1 meter
- D. 3 meters


5)



Schaufel

- A. 30 zentimeters
- B. 60 zentimeters
- C. 1 meter
- D. 3 meters

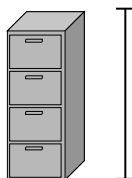
6)



Bowlingkugelhöhe

- A. 25 zentimeters
- B. 305 zentimeters
- C. 1 meter
- D. 10 zentimeters

7)



Aktenschrank

- A. 30 zentimeters
- B. 1.5 millimeters
- C. 30 millimeters
- D. 60 zentimeters

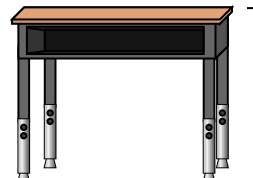
8)



Bleistift

- A. 30 millimeters
- B. 20 zentimeters
- C. 150 zentimeters
- D. 1 meter

9)



Schreibtisch

- A. 2 meters
- B. 15 zentimeters
- C. 30 zentimeters
- D. 70 zentimeters

1. **D**2. **A**3. **D**4. **C**5. **C**6. **A**7. **B**8. **B**9. **D**



Stelle fest, welcher Buchstaben am besten die Länge / Höhe darstellt.

Antworten

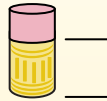
Milímetro (mm)

Un milímetro equivale al grosor de una tarjeta de crédito.

**Centímetro (cm)**

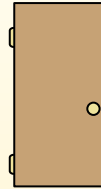
10 mm = 1 cm.

La parte metálica de un lápiz mide aproximadamente 1 cm. Una regla mide unos 30 centímetros.

**Metro (m)**

100 cm = 1 m

Desde el suelo hasta la perilla de una puerta hay aproximadamente 1 metro.

**Kilómetro (km)**

1,000 m = 1 km

La mayoría de las carreteras principales tienen al menos un kilómetro de largo.




1)

DVD

- A. 10 zentimeters
- B. 1 meter
- C. 30 millimeters
- D. 30 zentimeters


2)



Berg

- A. 700 millimeters
- B. 3 kilometers
- C. 60 zentimeters
- D. 9 meters

3)



Brotscheibe

- A. 120 zentimeters
- B. 2 meters
- C. 10 zentimeters
- D. 25 zentimeters

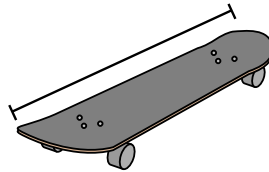
4)



Fahrrad

- A. 3 meters
- B. 25 zentimeters
- C. 10 zentimeters
- D. 1 meter

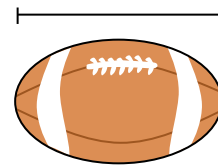
5)



Skateboard

- A. 80 zentimeters
- B. 2 meters
- C. 30 zentimeters
- D. 3 zentimeters

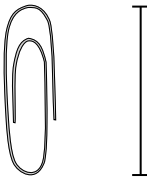
6)



Fußball

- A. 1 meter
- B. 25 zentimeters
- C. 3 zentimeters
- D. 60 zentimeters

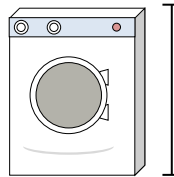
7)



Büroklammer

- A. 3 zentimeters
- B. 60 zentimeters
- C. 10 zentimeters
- D. 30 zentimeters

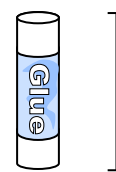
8)



Waschmaschine

- A. 30 zentimeters
- B. 1 meter
- C. 2 meters
- D. 10 zentimeters

9)



Klebestift

- A. 10 zentimeters
- B. 30 zentimeters
- C. 25 zentimeters
- D. 6 kilometers

1. _____
2. _____
3. _____
4. _____
5. _____
6. _____
7. _____
8. _____
9. _____



Stelle fest, welcher Buchstaben am besten die Länge / Höhe darstellt.

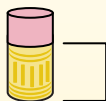
Antworten**Milímetro (mm)**

Un milímetro equivale al grosor de una tarjeta de crédito.

**Centímetro (cm)**

10 mm = 1 cm.

La parte metálica de un lápiz mide aproximadamente 1 cm. Una regla mide unos 30 centímetros.

**Metro (m)**

100 cm = 1 m

Desde el suelo hasta la perilla de una puerta hay aproximadamente 1 metro.

**Kilómetro (km)**

1,000 m = 1 km

La mayoría de las carreteras principales tienen al menos un kilómetro de largo.




1)

DVD

- A. 10 zentimeters
- B. 1 meter
- C. 30 millimeters
- D. 30 zentimeters


2)



Berg

- A. 700 millimeters
- B. 3 kilometers
- C. 60 zentimeters
- D. 9 meters

3)



Brotzscheibe

- A. 120 zentimeters
- B. 2 meters
- C. 10 zentimeters
- D. 25 zentimeters

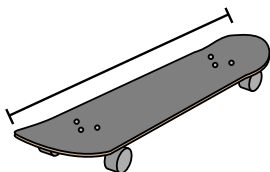
4)



Fahrrad

- A. 3 meters
- B. 25 zentimeters
- C. 10 zentimeters
- D. 1 meter

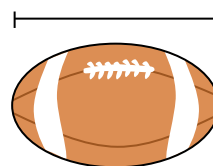
5)



Skateboard

- A. 80 zentimeters
- B. 2 meters
- C. 30 zentimeters
- D. 3 zentimeters

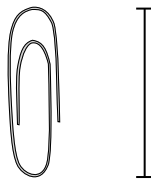
6)



Fußball

- A. 1 meter
- B. 25 zentimeters
- C. 3 zentimeters
- D. 60 zentimeters

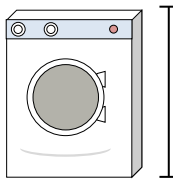
7)



Büroklammer

- A. 3 zentimeters
- B. 60 zentimeters
- C. 10 zentimeters
- D. 30 zentimeters

8)



Waschmaschine

- A. 30 zentimeters
- B. 1 meter
- C. 2 meters
- D. 10 zentimeters

9)



Klebestift

- A. 10 zentimeters
- B. 30 zentimeters
- C. 25 zentimeters
- D. 6 kilometers

1. **A**2. **B**3. **C**4. **D**5. **A**6. **B**7. **A**8. **B**9. **A**