



Stelle fest, welcher Buchstaben am besten die Länge / Höhe darstellt.

Antworten

Milímetro (mm)

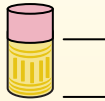
Un milímetro equivale al grosor de una tarjeta de crédito.



Centímetro (cm)

10 mm = 1 cm.

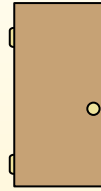
La parte metálica de un lápiz mide aproximadamente 1 cm. Una regla mide unos 30 centímetros.



Metro (m)

100 cm = 1 m

Desde el suelo hasta la perilla de una puerta hay aproximadamente 1 metro.



Kilómetro (km)


1,000 m = 1 km

La mayoría de las carreteras principales tienen al menos un kilómetro de largo.



1. _____
2. _____
3. _____
4. _____
5. _____
6. _____
7. _____
8. _____
9. _____


1)



Kochtopf

- A. 10 zentimeters
- B. 3 zentimeters
- C. 60 zentimeters
- D. 25 zentimeters

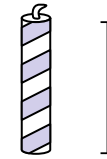
2)



Hammer

- A. 3 zentimeters
- B. 40 zentimeters
- C. 10 zentimeters
- D. 1 meter

3)



Kerze

- A. 20 zentimeters
- B. 30 zentimeters
- C. 5 zentimeters
- D. 2 kilometers

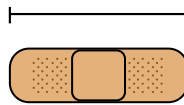
4)



Klebestift

- A. 30 zentimeters
- B. 6 kilometers
- C. 25 zentimeters
- D. 10 zentimeters

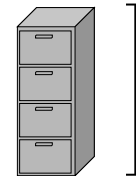
5)



Binde

- A. 60 zentimeters
- B. 3 kilometers
- C. 9 zentimeters
- D. 1 meter

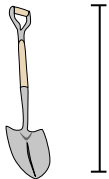
6)



Aktenschrank

- A. 1.5 millimeters
- B. 30 millimeters
- C. 60 zentimeters
- D. 30 zentimeters

7)



Schaufel

- A. 60 zentimeters
- B. 1 meter
- C. 30 zentimeters
- D. 3 meters

8)



Baumhöhe

- A. 2 kilometers
- B. 100 zentimeters
- C. 5 meters
- D. 30 zentimeters

9)

Flash Drive

- A. 60 zentimeters
- B. 30 zentimeters
- C. 15 zentimeters
- D. 6 zentimeters



Stelle fest, welcher Buchstaben am besten die Länge / Höhe darstellt.

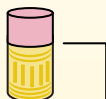
Antworten**Milímetro (mm)**

Un milímetro equivale al grosor de una tarjeta de crédito.

**Centímetro (cm)**

10 mm = 1 cm.

La parte metálica de un lápiz mide aproximadamente 1 cm. Una regla mide unos 30 centímetros.

**Metro (m)**

100 cm = 1 m

Desde el suelo hasta la perilla de una puerta hay aproximadamente 1 metro.


**Kilómetro (km)**

1,000 m = 1 km

La mayoría de las carreteras principales tienen al menos un kilómetro de largo.

1. **D**2. **B**3. **C**4. **D**5. **C**6. **A**7. **B**8. **C**9. **D**


1)



Kochtopf

- A. 10 zentimeters
- B. 3 zentimeters
- C. 60 zentimeters
- D. 25 zentimeters

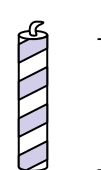
2)



Hammer

- A. 3 zentimeters
- B. 40 zentimeters
- C. 10 zentimeters
- D. 1 meter

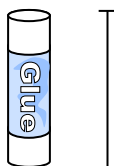
3)



Kerze

- A. 20 zentimeters
- B. 30 zentimeters
- C. 5 zentimeters
- D. 2 kilometers

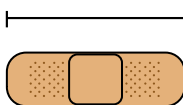
4)



Klebestift

- A. 30 zentimeters
- B. 6 kilometers
- C. 25 zentimeters
- D. 10 zentimeters

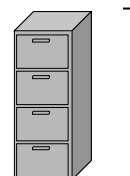
5)



Binde

- A. 60 zentimeters
- B. 3 kilometers
- C. 9 zentimeters
- D. 1 meter

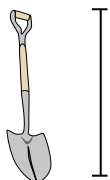
6)



Aktenschrank

- A. 1.5 millimeters
- B. 30 millimeters
- C. 60 zentimeters
- D. 30 zentimeters


7)



Schaufel

- A. 60 zentimeters
- B. 1 meter
- C. 30 zentimeters
- D. 3 meters

8)



Baumhöhe

- A. 2 kilometers
- B. 100 zentimeters
- C. 5 meters
- D. 30 zentimeters

9)

Flash Drive

- A. 60 zentimeters
- B. 30 zentimeters
- C. 15 zentimeters
- D. 6 zentimeters